



GOVT. OF NCT OF DELHI  
Delhi Subordinate Services Selection Board  
FC-18, Institutional Area, Karkardooma, Delhi – 110092.  
[www.dsssb.delhigovt.nic.in](http://www.dsssb.delhigovt.nic.in)

Participant Name	NIKHIL PAL
Test Center Name	Aadarsh Pariksha Kendra CENTER A - Gate No 1 - Noida Sector 64
Test Date	29/04/2026
Test Time	1:00 PM - 3:00 PM
Subject	Multi Tasking Staff

Section : General intelligence and Reasoning Ability

Q.1 Seven boxes, A, B, C, D, E, F and G, are kept one over the other but not necessarily in the same order. F is kept fifth from the bottom. G is kept fifth from the top. E is kept above B but below G. C is immediately below A. How many boxes are kept below D?  
1575

- Ans
- 1. Two
  - 2. Three
  - 3. Four
  - 4. Zero

Q.2 A, B, C, D, E, F and G are sitting around a circular table facing the centre. D sits second to the left of E. B sits third to the left of E. A sits third to the right of D. G is the immediate neighbour of F and A.  
How many people sit between F and C when counted from the left of F?

- Ans
- 1. Two
  - 2. Four
  - 3. Five
  - 4. Three

Q.3 In a certain code language,  
A + B means 'A is the mother of B'  
A - B means 'A is the brother of B'  
A # B means 'A is the daughter of B'  
A % B means 'A is the father of B'  
Based on the above, how is K related to N if 'L + K # Y - N'?

- Ans
- 1. Husband's sister
  - 2. Father's brother
  - 3. Brother's daughter
  - 4. Brother's wife

Q.4 Six people C, D, E, T, U and V are sitting around a circular table facing the center. E sits second to the right of V. Only one person sits between C and E when counted from the left of C. C is not an immediate neighbor of D. Only two people sit between E and T when counted from the left of E. Who sits immediately left of U?

- Ans
- 1. E
  - 2. V
  - 3. C
  - 4. T

Q.5 In a certain code language, 'GIRL' is coded as '8264' and 'INKS' is coded as '3587'. What is the code for 'T' in the given code language?5235

- Ans
- 1. 3
  - 2. 8
  - 3. 7
  - 4. 2

Q.6 D, E, F, G, O and P live on six different floors of the same building. The lowermost floor in the building is numbered 1, the floor above it is numbered 2 and so on till the topmost floor is numbered 6. Only F lives above D. G lives immediately below D. Only P lives below O. Who lives on floor number 3?1515

- Ans
- 1. G
  - 2. D
  - 3. E
  - 4. P

Q.7 The position(s) of how many letters will remain unchanged if each letter in the word LOBSTER is arranged in alphabetical order?255

- Ans
- 1. 2
  - 2. 3
  - 3. 1
  - 4. 0

Q.8 In this question, a statement is followed by two conclusions. Find out which conclusion is true based on the given statement.

Statement :  $T > N < Q < K = A$

Conclusions:

I.  $T < Q$

II.  $A < T$ 1542

- Ans
- 1. Both I and II are true
  - 2. Only II is true
  - 3. Neither I nor II is true
  - 4. Only I is true

Q.9 Refer to the following letter, symbol series and answer the question. Counting to be done from left to right only.

(Left) ! L @ F M > \* A \$ G B & H J C : K D ? N E ? (Right)

How many such consonants are there, each of which is immediately preceded by a symbol and also immediately followed by a vowel?556

- Ans
- 1. One
  - 2. None
  - 3. Two
  - 4. Three

Q.10 The position(s) of how many letters will remain unchanged if each letter in the word JOVIAL is arranged in the English alphabetical order?

- Ans
- 1. 2
  - 2. 1
  - 3. 0
  - 4. 3

Q.11 Refer to the following series and answer the question (all numbers are single digit numbers only)

(Left) 8 6 3 9 6 2 1 2 4 6 7 8 5 7 5 2 8 4 1 3 5 9 3 1 9 4 7 (Right)

How many such odd digits are there each of which is immediately preceded by an even digit and also immediately followed by an odd digit?534

Ans  1. Three

2. One

3. More than three

4. Two

Q.12 Seven boxes, A, B, C, D, E, F and G, are kept one over the other but not necessarily in the same order. F is kept third from the top. Only three boxes are kept between C and F. Only one box is kept between D and C. E is kept immediately above A. G is not kept above B. How many boxes are kept above B?1577

Ans  1. Three

2. Five

3. Four

4. Six

Q.13 Refer to the following letter, symbol series and answer the question. Counting to be done from left to right only.

(Left) B A % / C G J M P T Q N K E & > D H L F Y U ? (Right)

How many such vowels are there, each of which is immediately preceded by a consonant and also immediately followed by a symbol?555

Ans  1. Two

2. None

3. Three

4. One

Q.14 In this question, statement is followed by two conclusions. Find out which conclusion is/are true based on the given statement.

Statement:  $A=B<C<D<E<F$

Conclusions:

I.  $A<D$

II.  $C=F$

Ans  1. Only II is true

2. Neither I nor II is true

3. Only I is true

4. Both I and II are true

Q.15 In a certain code language, 'CASH' is coded as '2468' and 'SACK' is coded as '6294'. What is the code for 'K' in the given code language?7922

Ans  1. 2

2. 9

3. 6

4. 4

Q.16 XY ranked 19th from the top and 56th from the bottom in his class. How many students are there in his class?

- Ans  1. 74  
 2. 73  
 3. 76  
 4. 75

Q.17 In a certain code language,  
A x B means 'A is the father of B'  
A – B means 'A is the wife of B'  
A / B means 'A is the mother of B'  
A + B means 'A is the brother of B'  
Based on the above, how is P related to T if 'P – Q x R + S / T'?

- Ans  1. Father's sister  
 2. Sister's daughter  
 3. Mother's mother  
 4. Father's mother

Q.18 Read the given statements and conclusions carefully. You have to take the given statements to be true even if they seem to be at variance from commonly known facts. You have to decide which conclusion(s) logically follow(s) from the given statements.

Statements: Some cars are buses. No bus is a jeep.

Conclusions (I): Some cars are jeeps.

Conclusions (II): Some buses are cars.1553

- Ans  1. Both conclusions (I) and (II) follow  
 2. Only conclusion (II) follows  
 3. Only conclusion (I) follows  
 4. Neither conclusion (I) nor (II) follows

Q.19 Refer to the following letter, symbol series and answer the question that follows. Counting to be done from left to right only.

(Left) £ Q & R G K % @ U \$ D C & Ω T Y E # B \* A V (Right)

How many such letters are there, each of which is immediately preceded by a symbol and also immediately followed by another symbol?

- Ans  1. One  
 2. Three  
 3. Two  
 4. None

Q.20 In a certain code language, 'CASH' is coded as '3425' and 'SUCH' is coded as '2935'.What is the code for 'U' in the given code language?7924

- Ans  1. 5  
 2. 3  
 3. 2  
 4. 9

Q.1 If 'A' stands for '+', 'B' stands for 'x', 'C' stands for '+' and 'D' stands for '-', what will come in place of the question mark '?' in the following equation?

11 B 12 C 16 D 39 A 3 = ?

Ans  1. 135

2. 136

3. 133

4. 134

Q.2 What should come in place of the question mark (?) in the given series?

97, 125, 163, ?, 269, 337

Ans  1. 222

2. 211

3. 212

4. 221

Q.3 If 'C' stands for '+', 'D' stands for 'x', 'E' stands for '+', and 'F' stands for '-', what will come in place of the question mark '?' in the following equation?

40 C 8 D 4 F 12 E 16 = ?

Ans  1. 28

2. 24

3. 22

4. 18

Q.4 Based on the English alphabetical order, three of the following four are alike in a certain way and thus form a group. Which is the one that does not belong to that group?

(Note: The odd man out is not based on the number of consonants/vowels or their position in the letter cluster)1546

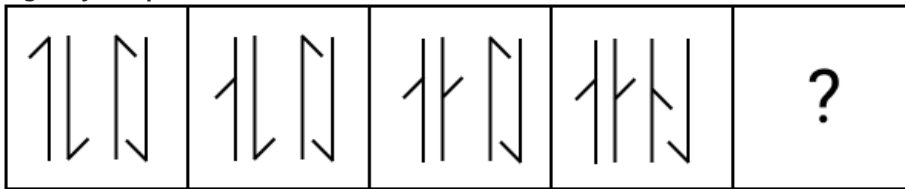
Ans  1. SUQ

2. OQM

3. JLH

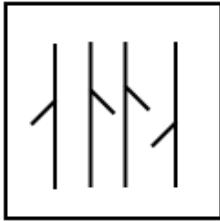
4. JGY

Q.5 Identify the figure given in the options which when put in place of the '?' will logically complete the series.

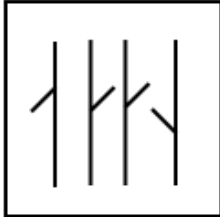


Ans

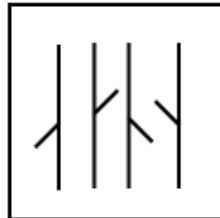
1.



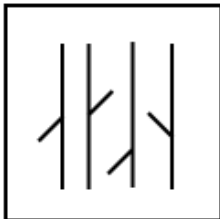
2.



3.



4.



Q.6 If 2 is added to each even digit and 1 is subtracted from each odd digit in the number 47293651, then how many digits will appear more than once in the new number thus formed?  
(Odd/Even digits should NOT be determined based on its position in the number)173

Ans  1. Three

2. One

3. Four

4. Two

Q.7 JILO is related to PORU in a certain way based on the English alphabetical order. In the same way, GFIL is related to MLOR. To which of the following is ZYBE related to, following the same logic?11704

Ans  1. FFGN

2. FEGK

3. FEHK

4. FDGK

**Q.8** Read the given statements and conclusions carefully. Assuming that the information given in the statements is true, even if it appears to be at variance with commonly known facts, decide which of the given conclusion(s) logically follow(s) from the statements.

**Statements:**

All hens are sippers.  
All monks are sippers.

**Conclusions:**

(I) Some hens are monks.  
(II) Some sippers are monks.2113

- Ans**
- 1. Only conclusion (I) follows.
  - 2. Neither conclusion (I) nor (II) follows.
  - 3. Only conclusion (II) follows.
  - 4. Both conclusions (I) and (II) follow.

**Q.9** What should come in place of '?' in the given series?  
52 55 58 61 ?

- Ans**
- 1. 62
  - 2. 68
  - 3. 64
  - 4. 69

**Q.10** In the following number-pairs, the second number is obtained by applying certain mathematical operations to the first number. Which numbers should replace X and Y so that the pattern followed by the two numbers on the left side of :: is same as that on the right side of :: ?

(NOTE: Operations should be performed on the whole numbers, without breaking down the numbers into their constituent digits. E.g. 13 – Operations on 13 such as adding / subtracting / multiplying, etc. to 13 can be performed. Breaking down 13 into 1 and 3 and then performing mathematical operations on 1 and 3 is not allowed.)

X : 162 :: 131 : Y254

- Ans**
- 1. X=157, Y=126
  - 2. X=167, Y=135
  - 3. X=167, Y=121
  - 4. X=167, Y=126

**Q.11** In the following number-pairs, the second number is obtained by applying certain mathematical operations to the first number. Select the set in which the numbers are related in the same way as are the numbers of the following sets.

(NOTE : Operations should be performed on the whole numbers, without breaking down the numbers into its constituent digits. E.g. 13 – Operations on 13 such as adding / subtracting /multiplying etc. to 13 can be performed. Breaking down 13 into 1 and 3 and then performing mathematical operations on 1 and 3 is not allowed)

893, 782  
764, 653313

- Ans**
- 1. 689, 578
  - 2. 395, 311
  - 3. 444, 336
  - 4. 284, 122

Q.12 MD 22 is related to KB 24 in a certain way. In the same way, JS 19 is related to HQ 21. To which of the following is CH 37 related to following the same logic?<sup>11731</sup>

- Ans
- 1. BE 35
  - 2. DE 35
  - 3. AG 39
  - 4. AF 39

Q.13 Based on the English alphabetical order, three of the following four letter cluster pairs are alike in a certain way and thus form a group. Which is the one that does not belong to that group?  
(Note: The odd man out is not based on the number of consonants/vowels or their position in the letter cluster)

- Ans
- 1. WT - QN
  - 2. PM - JG
  - 3. SP - LK
  - 4. ZW - TQ

Q.14 In the following number-pairs, the second number is obtained by applying certain mathematical operations to the first number. Select the set in which the numbers are related in the same way as are the numbers of the following sets.  
(NOTE: Operations should be performed on the whole numbers, without breaking down the numbers into their constituent digits. E.g. 13 - Operations on 13 such as adding / subtracting / multiplying, etc. to 13 can be performed. Breaking down 13 into 1 and 3 and then performing mathematical operations on 1 and 3 is not allowed.)

18, 91  
13, 66279

- Ans
- 1. 16, 80
  - 2. 21, 104
  - 3. 14, 81
  - 4. 11, 56

Q.15 What will come in the place of the question mark (?) in the following equation, if '+' and '-' are interchanged and 'x' and '÷' are interchanged?

$$(35 \times 5) + 27 \times 3 - 16 \div 2 - 12 = ?$$

- Ans
- 1. 40
  - 2. 52
  - 3. 42
  - 4. 44

Q.16 What will come in the place of '?' in the following equation, if '+' and '-' are interchanged and 'x' and '÷' are interchanged?  
 $5 \times 5 \div 8 - 5 + 7 = ?$

- Ans
- 1. 5
  - 2. 4
  - 3. 7
  - 4. 6

Q.17 Based on the alphabetical order, three of the following four are alike in a certain way and thus form a group. Which is the one that does not belong to that group? (Note: The odd one out is not based on the number of consonants/vowels or their position in the letter cluster)<sup>1533</sup>

- Ans
- 1. MOT
  - 2. QSX
  - 3. IKP
  - 4. EGN

Q.18 What should come in place of the question mark (?) in the given series?

115, 143, 181, ?, 287, 355

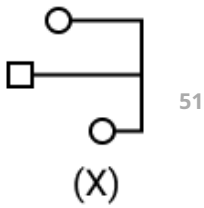
- Ans
- 1. 219
  - 2. 209
  - 3. 239
  - 4. 229

Q.19 Which of the following letter-number clusters will replace the question mark (?) in the given series to make it logically complete?

NKT 2, OJV 3, PIX 4, QHZ 9, RGB 8, SFD 27, ?

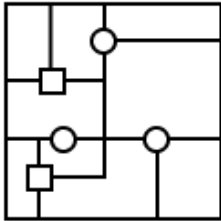
- Ans
- 1. TEF 16
  - 2. TEF 64
  - 3. EFG 32
  - 4. TEG 81

Q.20 Select the option in which the given figure (X) is embedded (rotation is NOT allowed).

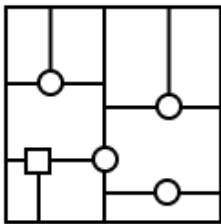


Ans

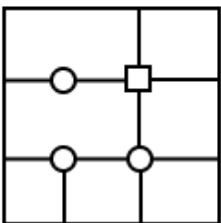
✗ 1.



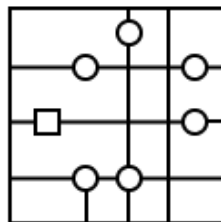
✗ 2.



✗ 3.



✓ 4.



Section : General Awareness

Q.1 What does 'standard of deferred payment' mean in the context of money?

- Ans
- ✗ 1. Delayed tax collection
  - ✗ 2. Money lending without interest
  - ✗ 3. Cancellation of loans
  - ✓ 4. Using money to make future payments

Q.2 Who became the most-capped player in women's international cricket with 356 matches in February 2026?

- Ans
- ✗ 1. Smriti Mandhana
  - ✓ 2. Harmanpreet Kaur
  - ✗ 3. Mithali Raj
  - ✗ 4. Suzie Bates

**Q.3 In April 1929, which specific act carried out by Bhagat Singh inside the Central Legislative Assembly in Delhi created a nationwide political uproar during the British colonial period?**

- Ans**
- 1. Organising a peaceful sit-in protest inside the Assembly premises
  - 2. Submitting a written petition to the Viceroy inside the Assembly hall
  - 3. Delivering a public speech inside the Assembly demanding complete independence
  - 4. Throwing non-lethal bombs into the Assembly chamber along with Batukeshwar Dutt

**Q.4 What was the main objective of Operation SINDOOR?**

- Ans**
- 1. To dismantle terror infrastructure across the Line of Control and inside Pakistan
  - 2. To provide medical aid in border areas
  - 3. To evacuate civilians from flood-affected areas
  - 4. To conduct joint military exercises with neighboring countries

**Q.5 In the inaugural Men's Kho-Kho World Cup 2025, which country won the title by defeating Nepal in the final?**

- Ans**
- 1. India
  - 2. Pakistan
  - 3. Bangladesh
  - 4. Sri Lanka

**Q.6 Where were the first Khelo India Beach Games 2025 held in May 2025?**

- Ans**
- 1. Mumbai
  - 2. Diu
  - 3. Kerala
  - 4. Goa

**Q.7 What do you call the deposits which are kept by commercial banks in Reserve Bank of India?**

- Ans**
- 1. Reserves
  - 2. Loans
  - 3. Liabilities
  - 4. Assets

**Q.8 Income earned by a normal resident of India for services rendered abroad on a temporary basis is included in which of the following aggregates?**

- Ans**
- 1. State Domestic Product
  - 2. Net Domestic Product of India
  - 3. Gross Domestic Product of India
  - 4. National Income of India

**Q.9 Ganga-Sagar mela is celebrated every year in West Bengal on the occasion of \_\_\_\_.**

- Ans**
- 1. Navratri
  - 2. Diwali
  - 3. Holi
  - 4. Makar Sankranti

**Q.10 Which of the following indigenous microprocessors was developed by the Centre for Development of Advanced Computing in India in December 2025?**

- Ans**
- 1. SHAKTI64
  - 2. PARAM64
  - 3. DHRUV64
  - 4. VEGA64

**Q.11** The Deccan Sabha, established in Pune as a political association, was founded by:

- Ans**
- 1. Dadabhai Naoroji
  - 2. Gopal Krishna Gokhale
  - 3. Bal Gangadhar Tilak
  - 4. Mahatma Gandhi

**Q.12** Which of the following is the principal financial institution for the development of Micro Small and Medium Enterprises in India?

- Ans**
- 1. Industrial Development Bank of India
  - 2. Export-Import Bank of India
  - 3. Small Industries Development Bank of India
  - 4. National Bank for Agriculture and Rural Development

**Q.13** According to the traditional poverty line established by the Planning Commission based on the 1979 Task Force in India, what is the minimum daily calorie requirement for a person in rural areas?

- Ans**
- 1. 2400 calories
  - 2. 1500 calories
  - 3. 2100 calories
  - 4. 3000 calories

**Q.14** The Poona Sarvajanik Sabha was intended to mediate between the colonial government and the Indian people. The Poona Sarvajanik Sabha was launched in Pune district of Maharashtra in which year?

- Ans**
- 1. 1875
  - 2. 1885
  - 3. 1867
  - 4. 1870

**Q.15** According to the World Bank's Gini Index for 2025, what is India's global ranking in terms of equality?

- Ans**
- 1. Fourth most equal country in the world
  - 2. Tenth most equal country in the world
  - 3. First most equal country in the world
  - 4. Second most equal country in the world

**Q.16** Which social reformer and educationist founded the Central Hindu School at Varanasi in 1898 with the objective of promoting modern education along with Indian cultural values?

- Ans**
- 1. Annie Besant
  - 2. Mahatma Gandhi
  - 3. Raja Rammohan Roy
  - 4. Madan Mohan Malaviya

**Q.17** Which secret society was organised by Vinayak Damodar Savarkar in 1904 during the freedom movement?

- Ans**
- 1. Abhinav Bharat
  - 2. Jugantar
  - 3. Anushilan Samity
  - 4. Indian National Congress

**Q.18** Rural development initiatives aim to promote decentralized governance and community participation. Which institutional mechanism enables villagers to directly participate in decision-making and ensures accountability in rural administration?

- Ans**
- 1. Functioning of the Gram Sabha
  - 2. Functioning of State Rural Development Agencies
  - 3. Formation of District Planning Committees
  - 4. Operation of Block Development Offices

**Q.19** Which of the following correctly identifies under which sub-scheme of the Export Promotion Mission was the Market Access Support (MAS) scheme, launched in December 2025, placed?

- Ans**
- 1. Niryat Disha
  - 2. Niryat Mitra
  - 3. Niryat Setu
  - 4. Niryat Protsahan

**Q.20** The Tetanus and Adult Diphtheria (Td) vaccine was launched at which institution in February 2026?

- Ans**
- 1. ICMR New Delhi
  - 2. AIIMS New Delhi
  - 3. PGIMER Chandigarh
  - 4. Central Research Institute (CRI), Kasauli

Section : **General Awareness1**

**Q.1** Which of the following deficiency diseases is most commonly observed in children with insufficient calcium and vitamin D intake, resulting in bone deformities and delayed growth?

- Ans**
- 1. Night blindness
  - 2. Scurvy
  - 3. Anemia
  - 4. Rickets

**Q.2** National Farmers' Day in India is celebrated to honour the contribution of which of the following leaders?

- Ans**
- 1. Mahatma Gandhi
  - 2. M. S. Swaminathan
  - 3. Lal Bahadur Shastri
  - 4. Chaudhary Charan Singh

**Q.3** According to the Census of India 2011, literacy rate is calculated for persons aged above which minimum age?

- Ans**
- 1. 15 years
  - 2. 7 years
  - 3. 10 years
  - 4. 18 years

**Q.4 Which of the following sites is NOT mentioned as an important early temple location in North India?**

- Ans**
- 1. Deogarh
  - 2. Udayagiri
  - 3. Mahabalipuram
  - 4. Eran

**Q.5 Which language, recognised as the sacred canonical language of Theravada Buddhism, was granted the status of a Classical Language by the Government of India in October 2024?**

- Ans**
- 1. Pali
  - 2. Sadhukkadi
  - 3. Bodo
  - 4. Ardhamagadhi

**Q.6 भारतीय संविधान के अनुच्छेद 19 के तहत नागरिकों को, निम्नलिखित में से कौन-सा अधिकार प्राप्त है?**

- Ans**
- 1. किसी भी सार्वजनिक पद के लिए चुनाव लड़ना
  - 2. सामाजिक रीति-रिवाजों में अस्पृश्यता को लागू करना
  - 3. सार्वजनिक रोजगार में आरक्षण की मांग करना
  - 4. शांतिपूर्वक और बिना हथियारों के इकट्ठा होना

**Q.7 Korba Thermal Power Station, one of the major coal-based power generation centers in India, is located in which state?**

- Ans**
- 1. Jharkhand
  - 2. Odisha
  - 3. Chhattisgarh
  - 4. Madhya Pradesh

**Q.8 The North-South Corridor under the National Highways Development Project connects which of the following cities as its official terminal points?**

- Ans**
- 1. Srinagar and Kanniyakumari
  - 2. Silchar and Porbandar
  - 3. Delhi and Bengaluru
  - 4. Jammu and Madurai

**Q.9 The Elephanta Caves were declared a UNESCO World Heritage Site in which year?**

- Ans**
- 1. 2004
  - 2. 2018
  - 3. 1987
  - 4. 1983

**Q.10 Which among the following is the method of cooking food in a small quantity of liquid at a temperature below 100°C for a long time?**

- Ans**
- 1. Stewing
  - 2. Steaming
  - 3. Frying
  - 4. Boiling

Q.11 Which of the following writs issued in India is considered a safeguard against arbitrary arrest and detention?

- Ans
- 1. Prohibition
  - 2. Habeas Corpus
  - 3. Mandamus
  - 4. Certiorari

Q.12 Match the Buddhist art centre with its unique stylistic material and influence as described in the texts.

Centre Style/Material

P. Gandhara 1. Indigenous Yaksha tradition foundation

Q. Mathura 2. Red sandstone usage

R. Amaravati 3. Greco-Roman sculptural influence

S. Ellora 4. Focus on heavy sculptural volume

- Ans
- 1. P-4, Q-1, R-3, S-2
  - 2. P-2, Q-3, R-4, S-1
  - 3. P-1, Q-4, R-2, S-3
  - 4. P-3, Q-2, R-1, S-4

Q.13 Which is the largest west-flowing river of Peninsular India that originates from the Amarkantak Plateau?

- Ans
- 1. Tapti
  - 2. Narmada
  - 3. Krishna
  - 4. Godavari

Q.14 The original jurisdiction of the Indian Supreme Court deals with which of the following Articles of the Constitution of India?

- Ans
- 1. Article 127
  - 2. Article 131
  - 3. Article 129
  - 4. Article 124

Q.15 Which of the following is the fundamental process in sexual reproduction, ensuring the production of genetically diverse gametes and the regulation of chromosome numbers in offspring?

- Ans
- 1. Fertilization
  - 2. Replication
  - 3. Meiosis
  - 4. Translation

Q.16 In India, which of the following vegetation types is found at the highest altitudes and consists mainly of mosses and lichens?

- Ans
- 1. Temperate grasslands
  - 2. Tropical evergreen forests
  - 3. Mangrove forests
  - 4. Tundra vegetation

Q.17 Which of the following is likely to increase the rate of enzyme-catalysed reactions up to a certain point?

- Ans
- 1. Increasing temperature moderately
  - 2. Drastically decreasing pH
  - 3. Adding inhibitors
  - 4. Removing substrate

**Q.18** Which Article empowers the High Courts to issue writs for the enforcement of fundamental rights?

- Ans
- 1. Article 226
  - 2. Article 232
  - 3. Article 252
  - 4. Article 256

**Q.19** Members of Lok Sabha are elected for a period of how many years?

- Ans
- 1. Three
  - 2. Seven
  - 3. Five
  - 4. Four

**Q.20** Which among the following is an example of one of the most nutritionally important and abundant monosaccharides?

- Ans
- 1. Starch
  - 2. Cellulose
  - 3. Sucrose
  - 4. Glucose

Section : **Arithmetical and Numerical Ability**

**Q.1** Evaluate the given expression.

$$11 - 2 + 8 \div 4 \times 2$$

- Ans
- 1. 9
  - 2. 13
  - 3. 14
  - 4. 16

**Q.2** There are 12 members in group A, 22 members in group B, and 72 members in group C. All the members of these groups went to a restaurant. The average amount spent per member in groups A, B, and C is ₹139, ₹500, and ₹251 respectively. Find the overall average amount spent per member (in ₹).

- Ans
- 1. 289
  - 2. 290
  - 3. 285
  - 4. 295

**Q.3** The monthly incomes of two friends Rakesh and Shivam are in the ratio 5 : 9 and each of them saves ₹93,000 every month. If the ratio of their monthly expenditure is 1 : 3, find the monthly income of Rakesh (in ₹).

- Ans
- 1. 1,55,000
  - 2. 2,17,000
  - 3. 1,54,000
  - 4. 1,56,000

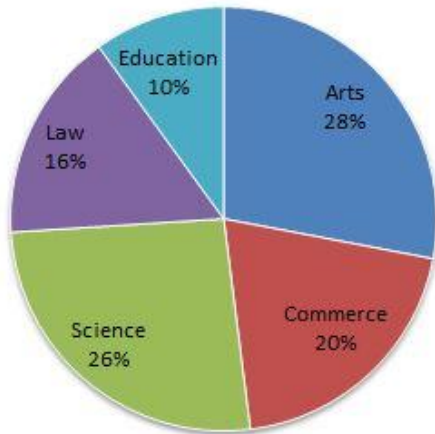
**Q.4** A number when increased by 20% gives 2490. The number is:

- Ans
- 1. 1038
  - 2. 2075
  - 3. 4150
  - 4. 6225

Q.5 The average of first 93 natural numbers is:

- Ans  1. 47  
 2. 46.5  
 3. 48  
 4. 47.5

Q.6 The piechart shows the percentage of students admitted in different faculties of a college. If the total students admitted in college is 2800, what is the number of students in commerce?



- Ans  1. 550  
 2. 560  
 3. 540  
 4. 570

Q.7 The total amount after 18 months would be ₹1,33,100. If the rate of interest is 20% per annum and compounding is performed half yearly, determine the present value (in ₹).

- Ans  1. 1,00,500  
 2. 1,11,000  
 3. 1,00,000  
 4. 1,10,000

Q.8 A manufacturer sells a product to a wholesaler at a profit of 25%. The wholesaler, in turn, sells it to a retailer at a profit of 25%, and the retailer sells it to a customer at a profit of 31%. If the customer pays ₹131, find the cost price (in ₹) for the manufacturer.

- Ans  1. 66  
 2. 67  
 3. 64  
 4. 63

Q.9 Ms. Parul deposits an amount of ₹31,400 to obtain a compound interest, compounded annually at the rate of 10 per cent per annum for 3 years. What total amount will Ms. Parul get at the end of 3 years?

- Ans  1. ₹42,088.8  
 2. ₹42,345.6  
 3. ₹41,793.4  
 4. ₹41,077.5

Q.10 Simplify:  $98 \div [24 - \{14 + 4 - (10 \text{ of } 2 - 2 \times 3)\}]$ .

- Ans  1. 4.9  
 2. 6  
 3. 3.9  
 4. 5.9

Q.11 Find the simple interest (in ₹) on ₹1,500 at 5% per month for 11 months.

- Ans  1. 68.75  
 2. 88.75  
 3. 825  
 4. 137.50

Q.12 Evaluate the given expression.

$$11 - 2 + 8 \div 4 \times 3$$

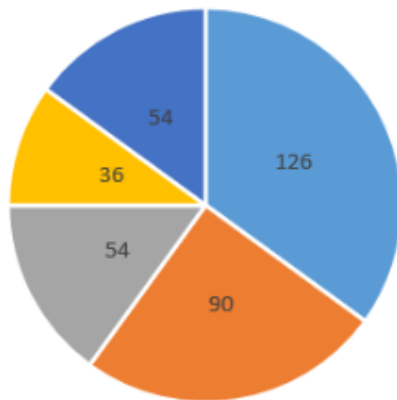
- Ans  1. 11  
 2. 15  
 3. 18  
 4. 16

Q.13 The average of the first 92 natural numbers is:

- Ans  1. 46  
 2. 46.5  
 3. 47.5  
 4. 47

Q.14 The following pie chart shows a family's monthly expenditure out of a total of ₹40,000. How much does the family spend on Transportation?

Family's Monthly Expenses (Pie Chart in Degrees)



■ Rent ■ Food ■ Transportation ■ Entertainment ■ Savings

- Ans  1. ₹6,000  
 2. ₹4,000  
 3. ₹3,000  
 4. ₹5,000

Q.15 A company buys a piece of equipment for ₹50,000. The equipment depreciates by 15% in the first year, 10% in the second year, and 2% in the third year. What will be the value (in ₹) of the equipment at the end of 3 years?

Ans  1. 37,485

2. 37,255

3. 37,015

4. 37,125

Q.16 Keshav's salary was first reduced by 40% and subsequently raised by 48%. How much percentage was his final salary lower compared to his initial salary?

Ans  1. 48%

2. 40%

3. 11.2%

4. 19.2%

Q.17 A manufacturer sells a product to a wholesaler at a profit of 28%. The wholesaler, in turn, sells it to a retailer at a profit of 25%, and the retailer sells it to a customer at a profit of 25%. If the customer pays ₹430, find the cost price (in ₹) for the manufacturer.

Ans  1. 215

2. 213

3. 214

4. 217

Q.18 In the year 2022, monthly income of Ankur decreases by 25% than his monthly income in the year 2021. What is the ratio of his monthly expenditures of the year 2021 to 2022, if his monthly savings in 2022 increases by 20% than his monthly savings in year 2021 and the expenditure in year 2021 is equal to 3 times savings in the same year?

Ans  1. 5:3

2. 5:4

3. 4:3

4. 3:4

Q.19 The length of the shadow of a 116 cm tall person at a particular time of day is 290 cm. What will be the length of the shadow of a 190 cm tall person at the same time of the day?

Ans  1. 455 cm

2. 425 cm

3. 475 cm

4. 435 cm

Q.20 In what ratio should a grocer mix two varieties of rice worth ₹40 per kg and ₹60 per kg to get a mixture worth ₹50 per kg?

Ans  1. 1 : 3

2. 1 : 2

3. 3 : 2

4. 3 : 5

Q.1 Arman sells an item at a 30% profit to Aman. Aman sells the same at 18% profit to Raman and received ₹49,088. Had Raman purchased the same item from Arman, he would have spent 8% less than what he paid to Aman. What profit would Arman have made?

- Ans
- 1. ₹10,560.70
  - 2. ₹11,640.56
  - 3. ₹12,320.70
  - 4. ₹13,160.96

Q.2 Divide ₹4,410 into three parts in such a way that half of the first part, one-fourth of the second part and one-eighth of the third part are equal. What is the value of first part (in ₹)?

- Ans
- 1. 930
  - 2. 830
  - 3. 630
  - 4. 330

Q.3 During a sale, 50% of the goods are sold at 43% profit, 18% of the remaining goods are sold at 20% profit and the still remaining goods are sold at a loss of 30%. If there is an overall profit of  $x\%$ , then what is the value of  $x$ ?

- Ans
- 1. 11.5%
  - 2. 11%
  - 3. 12%
  - 4. 10.5%

Q.4 Dhoni walked a certain distance at a speed of 6 km/hr. He was in a hurry, so on the return journey, he travelled at a speed of 30 km/hr. Find his average speed (in km/hr) for the entire journey.

- Ans
- 1. 12
  - 2. 16
  - 3. 10
  - 4. 14

Q.5 A solid sphere of radius 15 cm is melted and recast into a hollow cylindrical shell with inner radius 7 cm and height 12 cm. Find the outer radius of the cylindrical shell. (Round off your answer to one decimal place.)

- Ans
- 1. 21.6 cm
  - 2. 20.6 cm
  - 3. 23.1 cm
  - 4. 20.8 cm

Q.6 After applying two successive discounts of 10% and 25% on the marked price of a wallet, it was sold for ₹4,185. Find the marked price (in ₹) of the wallet.

- Ans
- 1. 6,100
  - 2. 6,000
  - 3. 6,300
  - 4. 6,200

Q.7 The mean proportional between  $(6 + 3\sqrt{2})$  and  $(8 - 4\sqrt{2})$  is:

- Ans
- 1.  $3\sqrt{5}$
  - 2.  $3\sqrt{6}$
  - 3.  $2\sqrt{5}$
  - 4.  $2\sqrt{6}$

Q.8 ₹32,000 is divided among L, M, and N. L receives ₹5,500 more than M, and N receives ₹7,000 more than M. Find the ratio of the amounts received by L, M, and N.

- Ans
- 1. 1 : 2 : 3
  - 2. 24 : 13 : 27
  - 3. 24 : 15 : 28
  - 4. 21 : 15 : 28

Q.9 Two pipes A and B can fill a tank in 18 hours and 39 hours, respectively. If both the pipes are opened simultaneously, in how many hours will the tank be full (rounded off to two decimal places)?

- Ans
- 1. 12.32 hours
  - 2. 12.09 hours
  - 3. 12.86 hours
  - 4. 12.72 hours

Q.10 If 390 bananas were distributed among three monkeys in the ratio  $\frac{1}{2} : \dots$

- ←  →
- Ans
- 1. 160
  - 2. 180
  - 3. 170
  - 4. 190

Q.11 The base radius of a cone is increased by 50% while the height remains unchanged. By what per cent does the volume of the cone increase?

- Ans
- 1. 50%
  - 2. 125%
  - 3. 100%
  - 4. 75%

Q.12 There are three inlet pipes M, N and P connected to a tank. M and N together can fill a tank in 10 hours, N and P together can fill the same tank in 15 hours and P and M together can fill the same tank in 7.5 hours. Find the time taken by pipe N alone to fill it.

- Ans
- 1. 52 hours
  - 2. 60 hours
  - 3. 45 hours
  - 4. 30 hours

Q.13 If the radius of the base of a right circular cone is 7 cm and its slant height is 25 cm, find its volume.  
(Take  $\pi = \frac{22}{7}$ )

- ←  →
- Ans
- 1. 550
  - 2. 660
  - 3. 440
  - 4. 330

Q.14 Find the area of a triangle, whose sides are 8 cm, 13 cm and 0.07 m. (Round off your answer to two decimal places)

- Ans  1. 24.25 cm<sup>2</sup>  
 2. 22.15 cm<sup>2</sup>  
 3. 20.05 cm<sup>2</sup>  
 4. 26.25 cm<sup>2</sup>

Q.15 A train 150 m long is running at a speed of 54 km/h. Find the time (in seconds) taken by it to pass a man standing near the railway line.

- Ans  1. 12  
 2. 10  
 3. 8  
 4. 14

Q.16 A cyclist rides to a nearby town at one-third of the speed at which he returns. If the average speed for the entire journey is 18 km/h, what is the cyclist's speed (in km/h) while riding to the town?

- Ans  1. 15  
 2. 12  
 3. 14  
 4. 13

Q.17 The printed price of a book is ₹360. A retailer pays ₹307.80 for it. He gets successive discounts of 10% and another discount. Find the other discount.

- Ans  1. 8%  
 2. 3%  
 3. 5%  
 4. 10%

Q.18 Two pipes, A and B, can fill a tank in 14 hours and 24 hours, respectively. If both the pipes are opened simultaneously, in how many hours will the tank be full (rounded off to two decimal places)?

- Ans  1. 8.84 hours  
 2. 8.48 hours  
 3. 8.56 hours  
 4. 8.24 hours

Q.19 Two pipes A and B can fill a tank in 18 minutes and 14 minutes, respectively. Both the pipes are opened together but after 3 minutes, pipe A is turned off. What is the total time (in minutes) required to fill the tank?

- Ans  1.  $\frac{26}{3}$   
 2.  $\frac{35}{3}$   
 3.  $\frac{34}{3}$   
 4.  $\frac{28}{3}$

**Q.20** Maya goes from point P to Q and comes back. Her average speed for the whole journey is 80 km/hr. If her speed while going from P to Q is 60 km/h, then what will be the speed of Maya (in km/h) while coming back from Q to P?

- Ans**
- 1. 120
  - 2. 130
  - 3. 110
  - 4. 100

Section : Test of English Language and Comprehension

**Q.1** Choose the best option to complete the sentence.  
Why don't you give him \_\_\_ apple? He seems hungry.1801

- Ans**
- 1. no article required
  - 2. an
  - 3. the
  - 4. a

**Q.2** In the given question, sentences of a paragraph are given in a jumbled order.  
Rearrange all the sentences to form a coherent paragraph.

A. Seventy-year-old Mithipoo from Porthimandu in the Nilgiris, takes a 45-minute drive to Ooty every once a week with a bag of embroidered fabrics.

B. She further shared that for the past 15 years, she has been travelling to Shalom Ooty, founded by Sheela Powell to sell her products.

C. She shared that she gets paid instantly for her work, which is a great source of income.

D. The embroidery, called Toda embroidery, is the pride of her community and is practised by the women of the household.

- Ans**
- 1. ADCB
  - 2. DACB
  - 3. CADB
  - 4. BDAC

**Q.3** Choose the best option to complete the sentence.  
I have always wanted to have \_\_\_ pet at home.1803

- Ans**
- 1. a
  - 2. no article required
  - 3. an
  - 4. the

**Q.4** Fill in the blank with the most suitable option.

The dog \_\_\_\_\_ its teeth at the stranger which made him panic. 926

- Ans**
- 1. beard
  - 2. has bare
  - 3. bared
  - 4. bears

Q.5 Fill in the blank with the most suitable option:

She has.....to complete her homework before the deadline.

1171

- Ans
- 1. kind of time
  - 2. halfway time
  - 3. adequate time
  - 4. the little time

Q.6 Choose the correct option to fill in the blank.

My father studied in \_\_\_\_ international university for his master's degree.1921

- Ans
- 1. an
  - 2. a
  - 3. no article needed
  - 4. the

Q.7 Choose the correct option to fill in the blank.

Due to my illness, I was confined \_\_ my bed for over a week.

- Ans
- 1. at
  - 2. to
  - 3. in
  - 4. on

Q.8 Select the option that will improve the highlighted part of the given sentence.

I don't trust everything he says as his integrity is questionable enough.313

- Ans
- 1. most questionable
  - 2. more questionable
  - 3. quite questionable
  - 4. some questionable

Q.9 Select the most appropriate option to fill in the blank.

My friend and I go \_\_\_\_ every summer.

2008

- Ans
- 1. there
  - 2. their
  - 3. here
  - 4. where

Q.10 Select the option that can rectify the underlined part of the given sentence to make it grammatically and contextually correct.

The delicious cake was topped with drab strawberries and whipped cream.

- Ans
- 1. sooty
  - 2. filthy
  - 3. fancy
  - 4. fresh

Q.11 Select the most appropriate option to fill in the blank.

After much anticipation, \_\_\_ long-awaited sequel was finally released.

- Ans
- 1. No article required
  - 2. an
  - 3. the
  - 4. a

Q.12 Select the most appropriate preposition to fill in the blank.

Mr. Benedict commented, "The decision was made \_\_\_\_\_ careful consideration of all the facts."

- Ans
- 1. via
  - 2. unto
  - 3. up
  - 4. upon

Q.13 Select the most appropriate option to fill in the blank.

The artist's latest painting is \_\_\_ and full of vibrant colours.<sup>378</sup>

- Ans
- 1. murky
  - 2. somber
  - 3. dull
  - 4. stunning

Q.14 Choose the most grammatically correct sentence:<sup>914</sup>

- Ans
- 1. Our grandmother several saw us.
  - 2. Our grandmother scarcely saw us.
  - 3. Our grandmother rare saw us.
  - 4. Our grandmother scarce saw us.

Q.15 Rearrange the jumbled segments to form a coherent statement.

(P) requires careful planning  
(Q) successful project execution  
(R) at every stage  
(S) to avoid unnecessary delays

- Ans
- 1. QPRS
  - 2. PQSR
  - 3. SRQP
  - 4. RSPQ

#### Comprehension:

Read the following passage and answer the questions given below-

The Sundarbans, stretching across India and Bangladesh, form the world's largest mangrove forest. This UNESCO World Heritage site is where land, river, and sea blend into a rich ecosystem teeming with biodiversity. The Sundarbans are home to the elusive Royal Bengal tiger, saltwater crocodiles, and countless species of fish and birds. What makes this region unique is its ability to adapt—trees breathe through roots above water, and animals survive in brackish tides. Villagers live alongside nature, building houses on stilts and using boats for daily travel. The forest also acts as a natural barrier, protecting inland areas from cyclones and storm surges. However, climate change, rising sea levels, and human encroachment pose increasing threats. Conservation efforts aim to protect both the fragile habitat and the people who depend on it. The Sundarbans is not merely a forest—it is a living, breathing system of survival, balance, and resilience between humans and nature.

#### SubQuestion No : 16

Q.16 How do trees survive in the Sundarbans?

**Comprehension:**

Read the following passage and answer the questions given below-

The Sundarbans, stretching across India and Bangladesh, form the world's largest mangrove forest. This UNESCO World Heritage site is where land, river, and sea blend into a rich ecosystem teeming with biodiversity. The Sundarbans are home to the elusive Royal Bengal tiger, saltwater crocodiles, and countless species of fish and birds. What makes this region unique is its ability to adapt—trees breathe through roots above water, and animals survive in brackish tides. Villagers live alongside nature, building houses on stilts and using boats for daily travel. The forest also acts as a natural barrier, protecting inland areas from cyclones and storm surges. However, climate change, rising sea levels, and human encroachment pose increasing threats. Conservation efforts aim to protect both the fragile habitat and the people who depend on it. The Sundarbans is not merely a forest—it is a living, breathing system of survival, balance, and resilience between humans and nature.

**SubQuestion No : 17**

**Q.17 What is one role of the forest in disaster management?**

**Comprehension:**

Read the following passage and answer the questions given below-

The Sundarbans, stretching across India and Bangladesh, form the world's largest mangrove forest. This UNESCO World Heritage site is where land, river, and sea blend into a rich ecosystem teeming with biodiversity. The Sundarbans are home to the elusive Royal Bengal tiger, saltwater crocodiles, and countless species of fish and birds. What makes this region unique is its ability to adapt—trees breathe through roots above water, and animals survive in brackish tides. Villagers live alongside nature, building houses on stilts and using boats for daily travel. The forest also acts as a natural barrier, protecting inland areas from cyclones and storm surges. However, climate change, rising sea levels, and human encroachment pose increasing threats. Conservation efforts aim to protect both the fragile habitat and the people who depend on it. The Sundarbans is not merely a forest—it is a living, breathing system of survival, balance, and resilience between humans and nature.

**SubQuestion No : 18**

**Q.18 What is the tone of the passage?**

**Comprehension:**

Read the following passage and answer the questions given below-

The Sundarbans, stretching across India and Bangladesh, form the world's largest mangrove forest. This UNESCO World Heritage site is where land, river, and sea blend into a rich ecosystem teeming with biodiversity. The Sundarbans are home to the elusive Royal Bengal tiger, saltwater crocodiles, and countless species of fish and birds. What makes this region unique is its ability to adapt—trees breathe through roots above water, and animals survive in brackish tides. Villagers live alongside nature, building houses on stilts and using boats for daily travel. The forest also acts as a natural barrier, protecting inland areas from cyclones and storm surges. However, climate change, rising sea levels, and human encroachment pose increasing threats. Conservation efforts aim to protect both the fragile habitat and the people who depend on it. The Sundarbans is not merely a forest—it is a living, breathing system of survival, balance, and resilience between humans and nature.

**SubQuestion No : 19**

**Q.19 Which of the following best summarizes the theme of the passage?**

**Comprehension:**

Read the following passage and answer the questions given below-

The Sundarbans, stretching across India and Bangladesh, form the world's largest mangrove forest. This UNESCO World Heritage site is where land, river, and sea blend into a rich ecosystem teeming with biodiversity. The Sundarbans are home to the elusive Royal Bengal tiger, saltwater crocodiles, and countless species of fish and birds. What makes this region unique is its ability to adapt—trees breathe through roots above water, and animals survive in brackish tides. Villagers live alongside nature, building houses on stilts and using boats for daily travel. The forest also acts as a natural barrier, protecting inland areas from cyclones and storm surges. However, climate change, rising sea levels, and human encroachment pose increasing threats. Conservation efforts aim to protect both the fragile habitat and the people who depend on it. The Sundarbans is not merely a forest—it is a living, breathing system of survival, balance, and resilience between humans and nature.

**SubQuestion No : 20**

**Q.20 Which of the following real-world issue is connected with the passage?**

**Section : Test of English Language and Comprehension1**

**Q.1 From the given options choose the one that has no spelling error**

- Ans**
- ✓ 1. The markings on the fossil allowed for distinguishability from others found at the excavation site.
  - ✗ 2. The markings on the fossil allowed for distinguishability from others found at the excavation site.
  - ✗ 3. The markings on the fossil allowed for distenguishability from others found at the excavation site.
  - ✗ 4. The markings on the fossil allowed for distingushibility from others found at the excavation site.

Q.2 Choose the option which correctly expresses the meaning of the following proverb.  
"Rome wasn't built in a day."

- Ans
- 1. Time management is important.
  - 2. Rome is made of stone.
  - 3. Big tasks require time and effort.
  - 4. Rome is the best city in the world.

Q.3 Choose the correct one-word substitute for the following phrase.  
Extreme old age when a man behaves like a fool

- Ans
- 1. Dotage
  - 2. Senility
  - 3. Imbecility
  - 4. Superannuation

Q.4 Choose the correct antonym of the word given.

Impartial

- Ans
- 1. Fair
  - 2. Honest
  - 3. Just
  - 4. Biased

Q.5 Choose the right option to give the meaning of the underlined proverb.

Shika, Julie and Kavitha are great trekkers and join all expeditions. Not surprising, because birds of a feather flock together.

- Ans
- 1. People of similar interest will be found together.
  - 2. When a flock of birds migrate, the one with the brightest feather leads.
  - 3. People with different interests enjoy the company of one another.
  - 4. Generally birds have feathers of the same size.

Q.6 Choose the correct one-word substitute for the following phrase  
A person who is controlled by his wife

- Ans
- 1. Euphemism
  - 2. Henpecked
  - 3. Vindictive
  - 4. Maverick

Q.7 Rectify the sentence by choosing the correct spelling of the incorrectly spelt word.

A new millannium began in the year 2000.

- Ans
- 1. mellennium
  - 2. millennium
  - 3. millenium
  - 4. millinnium

Q.8 Select the correct one-word substitute for the underlined group of words in the given sentence.

The overwhelming obligation of proving him innocent lies with the prosecution.

- Ans
- 1. onus
  - 2. aid
  - 3. blessing
  - 4. benefit

Q.9 Choose the correct antonym for the underlined word given in the sentence:

He survived in an air crash.

- Ans
- 1. escaped
  - 2. perished
  - 3. exited
  - 4. endured

Q.10 Select the correct one-word substitute for the underlined group of words in the given sentence.

The out of luck worker was let off from her job.

- Ans
- 1. lucky
  - 2. hapless
  - 3. happy
  - 4. well-off

Q.11 Choose the correct antonym for the underlined word in the sentence.

The general was praised for his valour during the final battle.

- Ans
- 1. Aggression
  - 2. Strategy
  - 3. Bravery
  - 4. Cowardice

Q.12 Parts of a sentence are given below. Arrange the parts in the correct order to form a meaningful and coherent sentence.

(P) technology and social media,  
(Q) political force in the world today  
(R) thanks to the burgeoning of  
(S) public opinion is the most powerful

- Ans
- 1. RSQP
  - 2. RPSQ
  - 3. RSPQ
  - 4. RPQS

Q.13 Choose the option which correctly expresses the meaning of the following proverb.  
"Curiosity killed the cat"

- Ans
- 1. Cats are curious animals.
  - 2. Being curious can be dangerous.
  - 3. Curiosity leads to discovery.
  - 4. Cats are easily frightened.

Q.14 Select the most appropriate antonym of the given word.  
Ratify

- Ans
- 1. Espouse
  - 2. Reject
  - 3. Grasp
  - 4. Approve

**Q.15 Select the most appropriate meaning of the given proverb.**

**"Out of the frying pan and into the fire"**

- Ans**
- 1. Danger is relative and can intensify.
  - 2. A person must be ready to face every situation if he wants to be successful in life.
  - 3. Moved from a bad situation to one that is worse.
  - 4. Training requires patience and perseverance.

**Comprehension:**

Read the given passage carefully and answer the questions that follow.

Meera had owned the yellow umbrella since she was ten. It wasn't particularly pretty, but it had been her companion through countless monsoons. When the city flooded, she had once helped an elderly woman cross the road using that very umbrella. Years later, while rushing to an interview in pouring rain, Meera offered shelter under the same umbrella to a stranger at a bus stop. The stranger turned out to be the interviewer. They both laughed at the coincidence when she entered the room. Meera got the job—not just because of qualifications, but perhaps also because of kindness. Even now, that yellow umbrella hangs near her door. Faded, patched, and no longer waterproof, it is no longer used, but never thrown away. It reminds her how little acts shape big moments, and how a simple thing can be tied to so many turning points. It is, in its own way, a symbol of unexpected blessings.

**SubQuestion No : 16**

**Q.16 What happened at the flooded road?**

**Comprehension:**

Read the given passage carefully and answer the questions that follow.

Meera had owned the yellow umbrella since she was ten. It wasn't particularly pretty, but it had been her companion through countless monsoons. When the city flooded, she had once helped an elderly woman cross the road using that very umbrella. Years later, while rushing to an interview in pouring rain, Meera offered shelter under the same umbrella to a stranger at a bus stop. The stranger turned out to be the interviewer. They both laughed at the coincidence when she entered the room. Meera got the job—not just because of qualifications, but perhaps also because of kindness. Even now, that yellow umbrella hangs near her door. Faded, patched, and no longer waterproof, it is no longer used, but never thrown away. It reminds her how little acts shape big moments, and how a simple thing can be tied to so many turning points. It is, in its own way, a symbol of unexpected blessings.

**SubQuestion No : 17**

**Q.17 What best describes the yellow umbrella?**

**Comprehension:**

Read the given passage carefully and answer the questions that follow.

Meera had owned the yellow umbrella since she was ten. It wasn't particularly pretty, but it had been her companion through countless monsoons. When the city flooded, she had once helped an elderly woman cross the road using that very umbrella. Years later, while rushing to an interview in pouring rain, Meera offered shelter under the same umbrella to a stranger at a bus stop. The stranger turned out to be the interviewer. They both laughed at the coincidence when she entered the room. Meera got the job—not just because of qualifications, but perhaps also because of kindness. Even now, that yellow umbrella hangs near her door. Faded, patched, and no longer waterproof, it is no longer used, but never thrown away. It reminds her how little acts shape big moments, and how a simple thing can be tied to so many turning points. It is, in its own way, a symbol of unexpected blessings.

**SubQuestion No : 18**

**Q.18 What is the theme of the passage?**

**Comprehension:**

Read the given passage carefully and answer the questions that follow.

Meera had owned the yellow umbrella since she was ten. It wasn't particularly pretty, but it had been her companion through countless monsoons. When the city flooded, she had once helped an elderly woman cross the road using that very umbrella. Years later, while rushing to an interview in pouring rain, Meera offered shelter under the same umbrella to a stranger at a bus stop. The stranger turned out to be the interviewer. They both laughed at the coincidence when she entered the room. Meera got the job—not just because of qualifications, but perhaps also because of kindness. Even now, that yellow umbrella hangs near her door. Faded, patched, and no longer waterproof, it is no longer used, but never thrown away. It reminds her how little acts shape big moments, and how a simple thing can be tied to so many turning points. It is, in its own way, a symbol of unexpected blessings.

**SubQuestion No : 19**

**Q.19 Which title suits the passage best?**

## Comprehension:

Read the given passage carefully and answer the questions that follow.

Meera had owned the yellow umbrella since she was ten. It wasn't particularly pretty, but it had been her companion through countless monsoons. When the city flooded, she had once helped an elderly woman cross the road using that very umbrella. Years later, while rushing to an interview in pouring rain, Meera offered shelter under the same umbrella to a stranger at a bus stop. The stranger turned out to be the interviewer. They both laughed at the coincidence when she entered the room. Meera got the job—not just because of qualifications, but perhaps also because of kindness. Even now, that yellow umbrella hangs near her door. Faded, patched, and no longer waterproof, it is no longer used, but never thrown away. It reminds her how little acts shape big moments, and how a simple thing can be tied to so many turning points. It is, in its own way, a symbol of unexpected blessings.

### SubQuestion No : 20

Q.20 What is the structure of the passage?

### Section : Test of Hindi Language and Comprehension

Q.1 अनिश्चित परिमाणवाचक विशेषण शब्द का प्रयोग करते हुए निम्न वाक्य पूर्ण करें -  
महाविद्यालय के \_\_\_\_\_ छात्र हड़ताल पर हैं।

- Ans
- 1. सुन्दर
  - 2. यह
  - 3. कुछ
  - 4. दस

Q.2 रेखांकित शब्द के आधार पर विशेषण के उचित भेद को चुन कर वाक्य पूर्ण करें -  
यह पुस्तक राम की है। वाक्य में \_\_\_\_\_ विशेषण है।

- Ans
- 1. परिमाणवाचक
  - 2. सार्वनामिक
  - 3. गुणवाचक
  - 4. संख्यावाचक

Q.3 निम्नलिखित वाक्यों में से अतिरिक्त वाक्य की पहचान करें-

- Ans
- 1. इस पुनर्जागरण की चेतना को साहित्य, संस्कृति, धर्म और दर्शन के माध्यम से अभिव्यक्ति देने वाले कुछ प्रमुख पुरोधा हुए।
  - 2. उनमें तीन दिव्य व्यक्तित्व थे: 'बंकिमचन्द्र चट्टोपाध्याय', 'रवीन्द्रनाथ टैगोर, और 'श्रीअरविन्द'।
  - 3. सत्पुरुष उज्ज्वल भविष्य के लिए योजना बनाकर प्रयत्न करते हुए महोच्च आदर्शों को आँखों से ओझल नहीं होने देते।
  - 4. भारतीय नवजागरण केवल एक ऐतिहासिक कालखंड नहीं, बल्कि आत्म-चेतना, सांस्कृतिक गौरव और राष्ट्रीय पुनर्जागरण का वह प्रवाह था, जिसने भारत की आत्मा को औपनिवेशिक दासता से मुक्ति के लिए प्रेरित किया।

Q.4 निम्न विकल्पों में उचित विकल्प का चयन कर वाक्य पूर्ण करें -  
हम सभी को ..... मतभेद नहीं रखना चाहिए।

- Ans
- 1. बहुधा
  - 2. निरन्तर
  - 3. बेशक
  - 4. परस्पर

Q.5 निम्नलिखित वाक्यांश को एक सार्थक शब्द से प्रतिस्थापित कीजिए-  
'जिसे बाह्य जगत का ज्ञान न हो'<sup>497</sup>

- Ans
- 1. ऊष्मज
  - 2. लोर
  - 3. कूपमण्डूक
  - 4. उपप्लव

Q.6 'लट्टू होना' मुहावरे का सर्वाधिक उपयुक्त अर्थ है-

- Ans  1. मुग्ध होना  
 2. घुमाना  
 3. बहुत प्रसन्न होना  
 4. प्यार होना

Q.7 निम्नलिखित वाक्य खंड को क्रम में लिखें -  
 पृथ्वी पर उपलब्ध प्राकृतिक संसाधन जैसे  
 अत्यंत आवश्यक हैं, इसलिए उनका विवेकपूर्ण  
 जल, वन और खनिज मानव जीवन के लिए  
 उपयोग करना हमारा नैतिक दायित्व है

- Ans  1. 3214  
 2. 4213  
 3. 1324  
 4. 2143

Q.8 निम्नलिखित वाक्य खंड को क्रम में लिखें -  
 लोकतंत्र में प्रत्येक नागरिक को  
 की भागीदारी सुनिश्चित होती है  
 अपने विचार व्यक्त करने का अधिकार  
 होता है, जिससे राष्ट्र की प्रगति में सभी

- Ans  1. 2314  
 2. 1342  
 3. 4213  
 4. 3412

Q.9 निम्नलिखित वाक्यों में से तीन वाक्य विशेष संदर्भ में एक-दूसरे से संबन्धित हैं, किन्तु एक वाक्य भिन्न है।  
 उस अतिरिक्त वाक्य को चुनें।

- Ans  1. पिछले कुछ दशकों से स्त्री शिक्षा में एक क्रांतिकारी परिवर्तन देखने को मिला है।  
 2. पुरुषों की तुलना में स्त्रियाँ अधिक सशक्त एवं आत्मनिर्भर प्रतीत होती हैं।  
 3. भारत सरकार के अथक प्रयासों के कारण आज 10 में से 8 स्त्रियाँ शिक्षित हैं।  
 4. शिक्षा आयोग के अनुसार पिछले कुछ दशकों में स्त्री शिक्षा का वृद्धि दर दुगना हुआ है।

Q.10 नीचे दिए गए वाक्य को ध्यानपूर्वक पढ़िए और रिक्त स्थान की पूर्ति उचित कारक से करें।  
 "पिता जी ..... प्रेरणा लेकर राहुल ने कठिन मेहनत शुरू की और परीक्षा में सफल हुआ।"

- Ans  1. पर  
 2. ने  
 3. को  
 4. से

Q.11 "काठ का उल्लू" मुहावरे का अर्थ है -

- Ans  1. अत्यंत मूर्ख।  
 2. चालाक बनना।  
 3. पा लेना  
 4. खो देना

- Q.12 निम्नलिखित में से किस एक वाक्य में त्रुटि नहीं है?  
1.सने सने उसकी दशा बिगड़ती गई।  
2. कल पिताजी मुझे डांट रहे थे।  
3.दक्षिण भारत के मंदिरों में वास्तुकला के दर्शन होते हैं।  
4.मुझे बेशुमार कष्ट उठाना पड़ा।

Ans  1. 2  
 2. 4  
 3. 1  
 4. 3

- Q.13 निम्नलिखित वाक्य खंड को क्रम में लिखें -  
मानव जीवन संघर्ष  
विजय इच्छाशक्ति  
का मैदान है, जहाँ  
से मिलती है

Ans  1. 4231  
 2. 1324  
 3. 2341  
 4. 2134

- Q.14 निम्नलिखित वाक्य को परिमाण वाचक क्रिया-विशेषण द्वारा पूर्ण करें।  
तुमने \_\_\_ रसगुल्ले खाए हैं।

Ans  1. बहुत  
 2. ठन्डे  
 3. आज  
 4. गर्म

- Q.15 निम्नलिखित वाक्यांश के लिए सार्थक शब्द बताएं -  
'अपने बेटे की पत्नी'

Ans  1. वर-वधु  
 2. पुत्र-वधू  
 3. पौत्र  
 4. पौत्री

#### Comprehension:

दिए गये गद्यांश को पढ़ें और नीचे दिए गये प्रश्नों का उत्तर दें

एक मिल मालिक के दिमाग में अजीब-अजीब खयाल आया करते थे जैसे सारा संसार मिल हो जाएगा, सारे लोग मजदूर और वह उनका मालिक या मिल में और चीजों की तरह आदमी भी बनने लगेंगे, तब मजदूरी भी नहीं देनी पड़ेगी, वगैरा-वगैरा। एक दिन उसके दिमाग में खयाल आया कि अगर मजदूरों के चार हाथ हो तो काम कितनी तेज़ी से हो और मुनाफा कितना ज्यादा। लेकिन यह काम करेगा कौन? उसने सोचा, वैज्ञानिक करेंगे, ये हैं किस मर्ज की दवा? उसने यह काम करने के लिए बड़े वैज्ञानिकों को मोटी तनखाहों पर नौकर रखा और वे नौकर हो गए। कई साल तक शोध और प्रयोग करने के बाद वैज्ञानिकों ने कहा कि ऐसा असंभव है कि आदमी के चार हाथ हो जाएँ। मिल मालिक वैज्ञानिकों से नाराज हो गया। उसने उन्हें नौकरी से निकाल दिया और अपने-आप इस काम को पूरा करने के लिए जुट गया। उसने कटे हुए हाथ मंगवाए और अपने मजदूरों के फिट करवाने चाहे, पर ऐसा नहीं हो सका। फिर उसने मजदूरों के लकड़ी के हाथ लगवाने चाहे, पर उनसे काम नहीं हो सका। फिर उसने लोहे के हाथ फिट करवा दिए, पर मजदूर मर गए।<sup>890</sup>

#### SubQuestion No : 16

Q.16 उपरोक्त गद्यांश का उचित शीर्षक पहचानें।<sup>891</sup>

#### Comprehension:

दिए गये गद्यांश को पढ़ें और नीचे दिए गये प्रश्नों का उत्तर दें

एक मिल मालिक के दिमाग में अजीब-अजीब खयाल आया करते थे जैसे सारा संसार मिल हो जाएगा, सारे लोग मजदूर और वह उनका मालिक या मिल में और चीजों की तरह आदमी भी बनने लगेंगे, तब मजदूरी भी नहीं देनी पड़ेगी, वगैरा-वगैरा। एक दिन उसके दिमाग में खयाल आया कि अगर मजदूरों के चार हाथ हो तो काम कितनी तेज़ी से हो और मुनाफा कितना ज्यादा। लेकिन यह काम करेगा कौन? उसने सोचा, वैज्ञानिक करेंगे, ये हैं किस मर्ज की दवा? उसने यह काम करने के लिए बड़े वैज्ञानिकों को मोटी तनखाहों पर नौकर रखा और वे नौकर हो गए। कई साल तक शोध और प्रयोग करने के बाद वैज्ञानिकों ने कहा कि ऐसा असंभव है कि आदमी के चार हाथ हो जाएँ। मिल मालिक वैज्ञानिकों से नाराज हो गया। उसने उन्हें नौकरी से निकाल दिया और अपने-आप इस काम को पूरा करने के लिए जुट गया। उसने कटे हुए हाथ मंगवाए और अपने मजदूरों के फिट करवाने चाहे, पर ऐसा नहीं हो सका। फिर उसने मजदूरों के लकड़ी के हाथ लगवाने चाहे, पर उनसे काम नहीं हो सका। फिर उसने लोहे के हाथ फिट करवा दिए, पर मजदूर मर गए।<sup>890</sup>

#### SubQuestion No : 17

Q.17 उपरोक्त गद्यांश के आधार पर उत्तर दें।

मिल के मालिक ने वैज्ञानिकों को नौकरी पर क्यों रखा?<sup>892</sup>

### Comprehension:

दिए गये गद्यांश को पढ़ें और नीचे दिए गये प्रश्नों का उत्तर दें

एक मिल मालिक के दिमाग में अजीब-अजीब खयाल आया करते थे जैसे सारा संसार मिल हो जाएगा, सारे लोग मजदूर और वह उनका मालिक या मिल में और चीजों की तरह आदमी भी बनने लगेंगे, तब मज़दूरी भी नहीं देनी पड़ेगी, वगैरा-वगैरा। एक दिन उसके दिमाग में खयाल आया कि अगर मजदूरों के चार हाथ हो तो काम कितनी तेज़ी से हो और मुनाफा कितना ज्यादा। लेकिन यह काम करेगा कौन? उसने सोचा, वैज्ञानिक करेंगे, ये हैं किस मर्ज की दवा? उसने यह काम करने के लिए बड़े वैज्ञानिकों को मोटी तनखाहों पर नौकर रखा और वे नौकर हो गए। कई साल तक शोध और प्रयोग करने के बाद वैज्ञानिकों ने कहा कि ऐसा असंभव है कि आदमी के चार हाथ हो जाएँ। मिल मालिक वैज्ञानिकों से नाराज हो गया। उसने उन्हें नौकरी से निकाल दिया और अपने-आप इस काम को पूरा करने के लिए जुट गया। उसने कटे हुए हाथ मंगवाए और अपने मजदूरों के फिट करवाने चाहे, पर ऐसा नहीं हो सका। फिर उसने मजदूरों के लकड़ी के हाथ लगवाने चाहे, पर उनसे काम नहीं हो सका। फिर उसने लोहे के हाथ फिट करवा दिए, पर मजदूर मर गए।<sup>1890</sup>

### SubQuestion No : 18

Q.18 उपरोक्त गद्यांश के आधार पर वाक्य पूर्ण करें।

ऐसा \_\_\_\_\_ है कि आदमी के चार हाथ हो जाएँ।<sup>1893</sup>

### Comprehension:

दिए गये गद्यांश को पढ़ें और नीचे दिए गये प्रश्नों का उत्तर दें

एक मिल मालिक के दिमाग में अजीब-अजीब खयाल आया करते थे जैसे सारा संसार मिल हो जाएगा, सारे लोग मजदूर और वह उनका मालिक या मिल में और चीजों की तरह आदमी भी बनने लगेंगे, तब मज़दूरी भी नहीं देनी पड़ेगी, वगैरा-वगैरा। एक दिन उसके दिमाग में खयाल आया कि अगर मजदूरों के चार हाथ हो तो काम कितनी तेज़ी से हो और मुनाफा कितना ज्यादा। लेकिन यह काम करेगा कौन? उसने सोचा, वैज्ञानिक करेंगे, ये हैं किस मर्ज की दवा? उसने यह काम करने के लिए बड़े वैज्ञानिकों को मोटी तनखाहों पर नौकर रखा और वे नौकर हो गए। कई साल तक शोध और प्रयोग करने के बाद वैज्ञानिकों ने कहा कि ऐसा असंभव है कि आदमी के चार हाथ हो जाएँ। मिल मालिक वैज्ञानिकों से नाराज हो गया। उसने उन्हें नौकरी से निकाल दिया और अपने-आप इस काम को पूरा करने के लिए जुट गया। उसने कटे हुए हाथ मंगवाए और अपने मजदूरों के फिट करवाने चाहे, पर ऐसा नहीं हो सका। फिर उसने मजदूरों के लकड़ी के हाथ लगवाने चाहे, पर उनसे काम नहीं हो सका। फिर उसने लोहे के हाथ फिट करवा दिए, पर मजदूर मर गए।<sup>1890</sup>

### SubQuestion No : 19

Q.19 निम्नलिखित विकल्पों में से नाराज शब्द का पर्यायवाची शब्द पहचानें।<sup>1894</sup>

### Comprehension:

दिए गये गद्यांश को पढ़ें और नीचे दिए गये प्रश्नों का उत्तर दें

एक मिल मालिक के दिमाग में अजीब-अजीब खयाल आया करते थे जैसे सारा संसार मिल हो जाएगा, सारे लोग मजदूर और वह उनका मालिक या मिल में और चीजों की तरह आदमी भी बनने लगेंगे, तब मज़दूरी भी नहीं देनी पड़ेगी, वगैरा-वगैरा। एक दिन उसके दिमाग में खयाल आया कि अगर मजदूरों के चार हाथ हो तो काम कितनी तेज़ी से हो और मुनाफा कितना ज्यादा। लेकिन यह काम करेगा कौन? उसने सोचा, वैज्ञानिक करेंगे, ये हैं किस मर्ज की दवा? उसने यह काम करने के लिए बड़े वैज्ञानिकों को मोटी तनखाहों पर नौकर रखा और वे नौकर हो गए। कई साल तक शोध और प्रयोग करने के बाद वैज्ञानिकों ने कहा कि ऐसा असंभव है कि आदमी के चार हाथ हो जाएँ। मिल मालिक वैज्ञानिकों से नाराज हो गया। उसने उन्हें नौकरी से निकाल दिया और अपने-आप इस काम को पूरा करने के लिए जुट गया। उसने कटे हुए हाथ मंगवाए और अपने मजदूरों के फिट करवाने चाहे, पर ऐसा नहीं हो सका। फिर उसने मजदूरों के लकड़ी के हाथ लगवाने चाहे, पर उनसे काम नहीं हो सका। फिर उसने लोहे के हाथ फिट करवा दिए, पर मजदूर मर गए।<sup>1890</sup>

### SubQuestion No : 20

Q.20 निम्नलिखित विकल्पों में से मुनाफा शब्द का विलोम शब्द पहचानें।<sup>1895</sup>

### Section : Test of Hindi Language and Comprehension1

Q.1 इनमें त्रुटि पूर्ण वाक्य नहीं है?

- Ans
- ✓ 1. वह हमारे मुख्य अतिथि थे।
  - ✗ 2. वह हमारे मुख्य आतिथ्य थे।
  - ✗ 3. वह हमारे मुख्य अतिथी थे।
  - ✗ 4. वह हमारे मुख्य आतिथि थे।

Q.2 'कृतज्ञ' का विलोम शब्द है -

- Ans
- ✗ 1. निष्ठुर
  - ✓ 2. कृतघ्न
  - ✗ 3. स्वार्थी
  - ✗ 4. क्लिष्ट

Q.3 इनमें त्रुटि पूर्ण वाक्य नहीं है?

- Ans
- ✗ 1. हवन की सामग्री लानी चाहिए।
  - ✗ 2. हवन की समिग्रि लानी चाहिए।
  - ✗ 3. हवन की समिग्री लानी चाहिए।
  - ✓ 4. हवन की सामग्री लानी चाहिए।

Q.4 मधु का अनेकार्थी शब्द होगा।

- Ans
- 1. छापा
  - 2. लाख
  - 3. विलास
  - 4. शहद

Q.5 निम्न लोकोक्ति के अर्थ को बताएं , सही विकल्प का चयन करें -  
' कभी नाव गाड़ी पर , कभी गाड़ी नाव पर '

- Ans
- 1. स्वच्छता सबको प्रिय है ।
  - 2. हालात बदलते रहते हैं ।
  - 3. ऊपरी दिखावे से दोष नहीं छिपते ।
  - 4. किसी के दुख में किसी का खुश होना ।

Q.6 निम्न में से 'ऊँट का मुँह ऊँट चूमे' लोकोक्ति का सही अर्थ कौन-सा है ?

- Ans
- 1. अपने दोष को न स्वीकारना और दूसरे को ही दोषी बताना
  - 2. बड़े काम छिपकर नहीं किए जा सकते हैं
  - 3. बड़े काम बड़े आदमी ही कर सकते हैं
  - 4. दुष्ट व्यक्ति का पता नहीं कब किससे उलझ पड़े

Q.7 दिए गए विकल्पों में से शब्द 'चक्र' का सही अर्थ चुनें -

- Ans
- 1. सीधा
  - 2. गोल
  - 3. टेढ़ा-मेढ़ा
  - 4. ऋजु

Q.8 दिये गये वाक्य के किस भाग में त्रुटि है?  
देश की बढ़ती जनसंख्याओं से हर व्यक्ति प्रभावित हुआ है।

- Ans
- 1. प्रभावित हुआ है।
  - 2. से हर व्यक्ति
  - 3. जनसंख्याओं
  - 4. देश की बढ़ती

Q.9 'कोप' का उपयुक्त विलोम शब्द है-

- Ans
- 1. आदर
  - 2. रोष
  - 3. कृपा
  - 4. दोष

Q.10 अधिकार का अनेकार्थी शब्द होगा।

- Ans
- 1. स्वत्व
  - 2. रिवाज
  - 3. समीप
  - 4. मौलिक

Q.11 'लौंग' का तत्सम शब्द है-

- Ans
- 1. लावांग
  - 2. लवंग
  - 3. लाउंग
  - 4. लोंग

Q.12 इनमें से तत्सम शब्द पहचानिए-

- Ans
- 1. कपूर
  - 2. हाथ
  - 3. आठ
  - 4. रात्रि

Q.13 'गत' का उपयुक्त विलोम शब्द है-

- Ans
- 1. स्वगत
  - 2. आगत
  - 3. अवगत
  - 4. निर्गत

Q.14 निम्नलिखित लोकोक्ति के उचित अर्थ का चयन करें-  
'योगी था सो उठ गया, आसन रही भभूत'

- Ans
- 1. गुणहीन होकर भी गुणी होने का दम्भ करना
  - 2. किसी चीज़ का प्रभाव बदल जाना
  - 3. अपनी सभ्यता-संस्कृति छोड़कर दूसरों की नक़ल करना
  - 4. पुराना गौरव समाप्त होना

Q.15 दिए गए वाक्य में अशुद्ध वर्तनी वाले शब्द को पहचान कर शुद्ध शब्द का चयन करें -  
'मैं वीना बजाना नहीं जानता।' 615

- Ans
- 1. वीणा
  - 2. वीना
  - 3. वीण
  - 4. विणा

#### Comprehension:

दिए गये गद्यांश को पढ़ें और नीचे दिए गये प्रश्नों का उत्तर दें

मैं तो शहर से या आदमियों से डरकर जंगल इसलिए भागा था कि मेरे सिर पर सींग निकल रहे थे और डर था कि किसी-न-किसी दिन कसाई की नजर मुझ पर जरूर पड़ जाएगी। जंगल में मेरा पहला ही दिन था जब मैंने बरगद के पेड़ के नीचे एक शेर को बैठे हुए देखा। शेर का मुँह खुला हुआ था। शेर का खुला मुँह देखकर मेरा जो हाल होना था वही हुआ। यानी मैं डर के मारे एक झाड़ी के पीछे छिप गया। मैंने देखा कि झाड़ी की ओट भी गजब की चीज है। अगर झाड़ियाँ न हों तो शेर का मुँह-ही-मुँह हो और फिर उससे बच पाना बहुत कठिन हो जाए। कुछ देर के बाद मैंने देखा कि जंगल के छोटे-मोटे जानवर एक लाइन से चले आ रहे हैं और शेर के मुँह में घुसते चले जा रहे हैं। शेर बिना हिले-डुले, बिना चबाए, जानवरों को गटकता जा रहा है। कुछ दिनों के बाद मैंने सुना कि शेर अहिंसा और सह-अस्तित्ववाद का बड़ा जबरदस्त समर्थक है इसलिए जंगली जानवरों का शिकार नहीं करता। मैं सोचने लगा, शायद शेर के पेट में वे सारी चोर्जे हैं जिनके लिए लोग वहाँ जाते हैं। मैंने वहाँ जा कर पूछा, "क्या यह सच है कि शेर साहब के पेट के अंदर, रोजगार का दफ़्तर है?" बताया गया कि यह सच है।

#### SubQuestion No : 16

Q.16 उपरोक्त गद्यांश का उचित शीर्षक पहचानें।

#### Comprehension:

दिए गये गद्यांश को पढ़ें और नीचे दिए गये प्रश्नों का उत्तर दें

मैं तो शहर से या आदमियों से डरकर जंगल इसलिए भागा था कि मेरे सिर पर सींग निकल रहे थे और डर था कि किसी-न-किसी दिन कसाई की नजर मुझ पर जरूर पड़ जाएगी। जंगल में मेरा पहला ही दिन था जब मैंने बरगद के पेड़ के नीचे एक शेर को बैठे हुए देखा। शेर का मुँह खुला हुआ था। शेर का खुला मुँह देखकर मेरा जो हाल होना था वही हुआ। यानी मैं डर के मारे एक झाड़ी के पीछे छिप गया। मैंने देखा कि झाड़ी की ओट भी गजब की चीज है। अगर झाड़ियाँ न हों तो शेर का मुँह-ही-मुँह हो और फिर उससे बच पाना बहुत कठिन हो जाए। कुछ देर के बाद मैंने देखा कि जंगल के छोटे-मोटे जानवर एक लाइन से चले आ रहे हैं और शेर के मुँह में घुसते चले जा रहे हैं। शेर बिना हिले-डुले, बिना चबाए, जानवरों को गटकता जा रहा है। कुछ दिनों के बाद मैंने सुना कि शेर अहिंसा और सह-अस्तित्ववाद का बड़ा जबरदस्त समर्थक है इसलिए जंगली जानवरों का शिकार नहीं करता। मैं सोचने लगा, शायद शेर के पेट में वे सारी चोर्जे हैं जिनके लिए लोग वहाँ जाते हैं। मैंने वहाँ जा कर पूछा, "क्या यह सच है कि शेर साहब के पेट के अंदर, रोजगार का दफ़्तर है?" बताया गया कि यह सच है।

#### SubQuestion No : 17

Q.17 उपरोक्त गद्यांश के आधार पर उत्तर दें।

जंगल में लेखक ने क्या देखा जिससे वह बहुत डर गया?

### Comprehension:

दिए गये गद्यांश को पढ़ें और नीचे दिए गये प्रश्नों का उत्तर दें

मैं तो शहर से या आदमियों से डरकर जंगल इसलिए भागा था कि मेरे सिर पर सींग निकल रहे थे और डर था कि किसी-न-किसी दिन कसाई की नजर मुझ पर जरूर पड़ जाएगी। जंगल में मेरा पहला ही दिन था जब मैंने बरगद के पेड़ के नीचे एक शेर को बैठे हुए देखा। शेर का मुँह खुला हुआ था। शेर का खुला मुँह देखकर मेरा जो हाल होना था वही हुआ। यानी मैं डर के मारे एक झाड़ी के पीछे छिप गया। मैंने देखा कि झाड़ी की ओट भी गजब की चीज है। अगर झाड़ियाँ न हों तो शेर का मुँह-ही-मुँह हो और फिर उससे बच पाना बहुत कठिन हो जाए। कुछ देर के बाद मैंने देखा कि जंगल के छोटे-मोटे जानवर एक लाइन से चले आ रहे हैं और शेर के मुँह में घुसते चले जा रहे हैं। शेर बिना हिले-डुले, बिना चबाए, जानवरों को गटकता जा रहा है। कुछ दिनों के बाद मैंने सुना कि शेर अहिंसा और सह-अस्तित्ववाद का बड़ा जबरदस्त समर्थक है इसलिए जंगली जानवरों का शिकार नहीं करता। मैं सोचने लगा, शायद शेर के पेट में वे सारी चीजें हैं जिनके लिए लोग वहाँ जाते हैं। मैंने वहाँ जा कर पूछा, "क्या यह सच है कि शेर साहब के पेट के अंदर, रोजगार का दफ़्तर है?" बताया गया कि यह सच है।

### SubQuestion No : 18

Q.18 उपरोक्त गद्यांश के आधार पर वाक्य पूर्ण करें।

लेखक के अनुसार शेर किस विचारधारा का समर्थक था?

### Comprehension:

दिए गये गद्यांश को पढ़ें और नीचे दिए गये प्रश्नों का उत्तर दें

मैं तो शहर से या आदमियों से डरकर जंगल इसलिए भागा था कि मेरे सिर पर सींग निकल रहे थे और डर था कि किसी-न-किसी दिन कसाई की नजर मुझ पर जरूर पड़ जाएगी। जंगल में मेरा पहला ही दिन था जब मैंने बरगद के पेड़ के नीचे एक शेर को बैठे हुए देखा। शेर का मुँह खुला हुआ था। शेर का खुला मुँह देखकर मेरा जो हाल होना था वही हुआ। यानी मैं डर के मारे एक झाड़ी के पीछे छिप गया। मैंने देखा कि झाड़ी की ओट भी गजब की चीज है। अगर झाड़ियाँ न हों तो शेर का मुँह-ही-मुँह हो और फिर उससे बच पाना बहुत कठिन हो जाए। कुछ देर के बाद मैंने देखा कि जंगल के छोटे-मोटे जानवर एक लाइन से चले आ रहे हैं और शेर के मुँह में घुसते चले जा रहे हैं। शेर बिना हिले-डुले, बिना चबाए, जानवरों को गटकता जा रहा है। कुछ दिनों के बाद मैंने सुना कि शेर अहिंसा और सह-अस्तित्ववाद का बड़ा जबरदस्त समर्थक है इसलिए जंगली जानवरों का शिकार नहीं करता। मैं सोचने लगा, शायद शेर के पेट में वे सारी चीजें हैं जिनके लिए लोग वहाँ जाते हैं। मैंने वहाँ जा कर पूछा, "क्या यह सच है कि शेर साहब के पेट के अंदर, रोजगार का दफ़्तर है?" बताया गया कि यह सच है।

### SubQuestion No : 19

Q.19 निम्नलिखित विकल्पों में से **समर्थक** शब्द का पर्यायवाची शब्द पहचानें।

### Comprehension:

दिए गये गद्यांश को पढ़ें और नीचे दिए गये प्रश्नों का उत्तर दें

मैं तो शहर से या आदमियों से डरकर जंगल इसलिए भागा था कि मेरे सिर पर सींग निकल रहे थे और डर था कि किसी-न-किसी दिन कसाई की नजर मुझ पर जरूर पड़ जाएगी। जंगल में मेरा पहला ही दिन था जब मैंने बरगद के पेड़ के नीचे एक शेर को बैठे हुए देखा। शेर का मुँह खुला हुआ था। शेर का खुला मुँह देखकर मेरा जो हाल होना था वही हुआ। यानी मैं डर के मारे एक झाड़ी के पीछे छिप गया। मैंने देखा कि झाड़ी की ओट भी गजब की चीज है। अगर झाड़ियाँ न हों तो शेर का मुँह-ही-मुँह हो और फिर उससे बच पाना बहुत कठिन हो जाए। कुछ देर के बाद मैंने देखा कि जंगल के छोटे-मोटे जानवर एक लाइन से चले आ रहे हैं और शेर के मुँह में घुसते चले जा रहे हैं। शेर बिना हिले-डुले, बिना चबाए, जानवरों को गटकता जा रहा है। कुछ दिनों के बाद मैंने सुना कि शेर अहिंसा और सह-अस्तित्ववाद का बड़ा जबरदस्त समर्थक है इसलिए जंगली जानवरों का शिकार नहीं करता। मैं सोचने लगा, शायद शेर के पेट में वे सारी चीजें हैं जिनके लिए लोग वहाँ जाते हैं। मैंने वहाँ जा कर पूछा, "क्या यह सच है कि शेर साहब के पेट के अंदर, रोजगार का दफ़्तर है?" बताया गया कि यह सच है।

### SubQuestion No : 20

Q.20 निम्नलिखित विकल्पों में से **अहिंसा** शब्द का विलोम शब्द पहचानें।