



GOVT. OF NCT OF DELHI
Delhi Subordinate Services Selection Board
FC-18, Institutional Area, Karkardooma, Delhi – 110092.
www.dsssb.delhigovt.nic.in

Participant Name	NITIN
Test Center Name	Aadarsh Pariksha Kendra CENTER B - Gate No 2 - Noida Sector 64
Test Date	28/03/2026
Test Time	9:00 AM - 11:00 AM
Subject	Multi Tasking Staff

Section : General intelligence and Reasoning Ability

Q.1 Seven boxes S, T, U, V, D, E, and F are kept one over the other but not necessarily in the same order. No box is kept above T. Only three boxes are kept between T and F. Only one box is kept between D and V. V is kept immediately above F. Only four boxes are kept between D and S. U is kept at some place above E. Which box is kept second below U?

- Ans
- 1. S
 - 2. D
 - 3. V
 - 4. F

Q.2 R is the father of Q. T is the daughter of Y. K is the brother of R. Q is the sister of T. How is Y related to K?

- Ans
- 1. Brother's daughter
 - 2. Father's brother
 - 3. Brother's wife
 - 4. Husband's brother

Q.3 Seven boxes W, X, Y, Z, G, H and I are kept one over the other but not necessarily in the same order. Only two boxes are kept between G and I. Only X is kept below W. Only Z is kept above G. Y is not kept immediately above I. How many boxes are kept between H and X?

- Ans
- 1. Four
 - 2. Three
 - 3. Two
 - 4. One

Q.4 A statement is given followed by two conclusions. Find out which conclusion(s) is/are true based on the given statement.

Statement: $Q > L < S < D = B$

Conclusions:

I. $Q > D$

II. $L > B$

- Ans
- 1. Only I is true
 - 2. Both I and II are true
 - 3. Neither I nor II is true
 - 4. Only II is true

Q.5 Refer to the following letter series and answer the question. (Counting to be done from left to right only).

(Left) N E F M L C L T X X R X D G J A M Q F T Q (Right)

How many such consonants are there, each of which is immediately preceded by a consonant and also immediately followed by a vowel?

- Ans
- 1. Three
 - 2. None
 - 3. One
 - 4. Two

Q.6 Refer to the following letter, symbol series and answer the question. Counting to be done from left to right only.

(Left) R U # M X \$ & £ J Q R \$ © T # B # P W % V T (Right)

How many such symbols are there each of which is immediately preceded by a letter and also immediately followed by a symbol?9247

- Ans
- 1. 2
 - 2. 1
 - 3. 3
 - 4. 4

Q.7 E is the brother of G. E is the brother of F. Q is the father of F. How is E related to Q?

- Ans
- 1. Son's son
 - 2. Son
 - 3. Brother
 - 4. Father

Q.8 Seven boxes W, X, Y, Z, G, H and I are kept one over the other but not necessarily in the same order. Only Z is kept above X. Only two boxes are kept between Y and H. No box is kept below H. I is kept at some place below W but at some place above G. Which box is kept third above G?

- Ans
- 1. I
 - 2. H
 - 3. X
 - 4. W

Q.9 Refer to the following letter, symbol series and answer the question that follows. Counting to be done from left to right only.

(Left) D R £ R L £ W & T E H # D Q £ U % J R * # & (Right)

How many such letters are there, each of which is immediately preceded by a letter and also immediately followed by a symbol?

- Ans
- 1. 6
 - 2. 7
 - 3. 4
 - 4. 5

Q.10 A, B, C, D, E, F and G are sitting around a circular table facing the centre. Only two people sit between A and G when counted from the left of G. F sits third to the left of C. E sits to the immediate right of C.

E sits second to the left of A. B is an immediate neighbour of F.

How many people sit between G and D when counted from the right of G?

- Ans
- 1. 3
 - 2. 4
 - 3. 2
 - 4. 1

Q.11 Read the given statement(s) and conclusions carefully. Assuming that the information given in the statements is true, even if it appears to be at variance with commonly known facts, decide which of the given conclusions logically follow(s) from the statement(s).

Statements: Some canvases are brushes. All brushes are easels.

Conclusion (I): Some canvases are easels.

Conclusion (II): No canvas is an easel.

- Ans
- 1. Neither conclusion (I) nor (II) follows
 - 2. Only conclusion (II) follows
 - 3. Both conclusions (I) and (II) follow
 - 4. Only conclusion (I) follows

Q.12 In a certain code language, 'RAJS' is coded as '5897' and 'STAR' is coded as '8739'. What is the code for 'T' in the given code language?

- Ans
- 1. 8
 - 2. 7
 - 3. 9
 - 4. 3

Q.13 In this question, a statement is followed by two conclusions. Find out which conclusion is true based on the given statement.

Statement : $Y > S < R < T = W$

Conclusions:

I. $Y > T$

II. $S > W$

- Ans
- 1. Both I and II are true
 - 2. Only I is true
 - 3. Neither I nor II is true
 - 4. Only II is true

Q.14 Each vowel in the word AVALANCHING is changed to the letter immediately following it in the English alphabetical order AND each consonant is changed to the letter immediately preceding it in the English alphabetical order. Which of the following letters will appear exactly twice in the group of letters thus formed?10651

- Ans
- 1. B
 - 2. G
 - 3. J
 - 4. M

Q.15 Seven boxes W, X, Y, Z, G, H and I are kept one over the other but not necessarily in the same order. I is kept second from the bottom. H is kept at one of the positions above Y. Only three boxes are kept between I and Y. W is kept at one of the positions below I. Only G is kept between Y and X. How many boxes are kept between Z and Y?

- Ans
- 1. Two
 - 2. Four
 - 3. Three
 - 4. One

Q.16 In a certain code language, 'HAVE' is coded as '1537' and 'VOLT' is coded as '8612'. What is the code for 'V' in the given code language?535

- Ans
- 1. 8
 - 2. 3
 - 3. 1
 - 4. 2

Q.17 H, I, J, X, Y, Z and A are sitting in a straight line facing north. Only three people sit between I and H. Z sits to the immediate left of H. No one sits to the right of A. Only two people sit between A and Z. J sits to the immediate right of Y. How many people sit between X and J?

- Ans 1. Two
 2. Four
 3. One
 4. Three

Q.18 Refer to the following letter series and answer the question that follows.

(Left) S W L O P M N B T F V C R Y H B N U I S D C F R W M N B H L P S (Right)

How many vowels are there in the English alphabetical series between the letter which is fifth from right end and the letter that is fifth from the left end of the series?

- Ans 1. 3
 2. 4
 3. 2
 4. 1

Q.19 In a certain code language, 'voice key fruit' is coded as 'xq da rq' and 'key path zebra' is coded as 'fp wc da'. How is 'key' coded in the given language? (All codes are two-letter codes)

- Ans 1. xq
 2. fp
 3. da
 4. rq

Q.20 Refer to the following letter series and answer the question.

(Left) K L T R C V B N H Y U R D C F V G T V B M K O P L Q W S X N M L P (Right)

How many letters are there in the English alphabetical series between the letter which is second from the right end and third from the left end?¹¹²⁸⁵

- Ans 1. 5
 2. 7
 3. 10
 4. 9

Section : General intelligence and Reasoning Ability1

Q.1 Select the pair which follows the same pattern as that followed by the two pairs given below. Both pairs follow the same pattern.

NQT : MPS
ZAH : YZG

- Ans 1. SCX : RAW
 2. MKB : LJA
 3. OGC : MEA
 4. XDR : WBO

Q.2 Select the set in which the numbers are related in the same way as are the numbers of the following sets.

(NOTE : Operations should be performed on the whole numbers, without breaking down the numbers into their constituent digits. E.g. 13 - Operations on 13 such as adding / subtracting / multiplying etc. to 13 can be performed. Breaking down 13 into 1 and 3 and then performing mathematical operations on 1 and 3 is not allowed.)

(5,31,24)

(8,29,19)

- Ans**
- 1. (19,5,14)
 - 2. (1,3,20)
 - 3. (18,4,14)
 - 4. (4,24,18)

Q.3 Select the set in which the numbers are related in the same way as are the numbers of the following sets.

(NOTE: Operations should be performed on the whole numbers, without breaking down the numbers into its constituent digits. E.g. 13 - Operations on 13 such as adding /subtracting /multiplying etc. to 13 can be performed. Breaking down 13 into 1 and 3 and then performing mathematical operations on 1 and 3 is not allowed.)

(34,11,21)

(73,88,367)

- Ans**
- 1. (84,311,71)
 - 2. (1,61,304)
 - 3. (41,98,19)
 - 4. (92,46,99)

Q.4 What should come in place of '?' in the given series?
12 ? 44 85 166 327 648

- Ans**
- 1. 20
 - 2. 23
 - 3. 18
 - 4. 27

Q.5 Select the correct mirror image of the given figure when the mirror is placed at MN as shown below.



Ans

- 1.
- 2.
- 3.
- 4.

Q.6 What will come in the place of '?' in the following equation, if '+' and '-' are interchanged and 'x' and '÷' are interchanged?

$$4 \div 8 + 12 \times 3 - 7 = ?$$

Ans

- 1. 37
- 2. 31
- 3. 33
- 4. 35

Q.7 Select the set in which the numbers are related in the same way as are the numbers of the following sets.

(NOTE: Operations should be performed on the whole numbers, without breaking down the numbers into their constituent digits. E.g., 13 - Operations on 13 such as adding/subtracting/multiplying, etc. to 13 can be performed. Breaking down 13 into 1 and 3 and then performing mathematical operations on 1 and 3 is not allowed.)

(20, 10, 120)

(15, 14, 116)

Ans

- 1. (19,7,104)
- 2. (19,14,13)
- 3. (17,87,96)
- 4. (6,12,112)

Q.8 Read the given statement(s) and conclusions carefully. Assuming that the information given in the statements is true, even if it appears to be at variance with commonly known facts, decide which of the given conclusions logically follow(s) from the statement(s).

Statements: Some diapers are bibs. All bibs are toys.

Conclusion (I): Some diapers are toys.

Conclusion (II): No diaper is a toy.

Ans

- 1. Both conclusions (I) and (II) follow
- 2. Only conclusion (I) follows
- 3. Only conclusion (II) follows
- 4. Neither conclusion (I) nor (II) follows

Q.9 If 'A' stands for '+', 'B' stands for 'x', 'C' stands for '+' and 'D' stands for '-', what will come in place of the question mark (?) in the following equation?

$$85 D 13 C 9 B 63 A 7 = ?$$

- Ans
- 1. 105
 - 2. 135
 - 3. 155
 - 4. 153

Q.10 If 'A' stands for '+', 'B' stands for 'x', 'C' stands for '+' and 'D' stands for '-', what will come in place of the question mark (?) in the following equation?

$$118 D 11 B 9 C 143 A 11 = ?$$

- Ans
- 1. 36
 - 2. 35
 - 3. 32
 - 4. 30

Q.11 Based on the English alphabetical order, three of the following four letter-cluster pairs are alike in a certain way and thus form a group. Which is the one that does not belong to that group?

(Note: The odd one out is not based on the number of consonants/vowels or their position in the letter cluster.)

- Ans
- 1. LN - KM
 - 2. HJ - GI
 - 3. NP - MO
 - 4. OQ - PV

Q.12 Based on the English alphabetical order, three of the following four letter cluster pairs are alike in a certain way and thus form a group. Which is the one that does not belong to that group? (Note: The odd one out is not based on the number of consonants/vowels or their position in the letter cluster)

9612

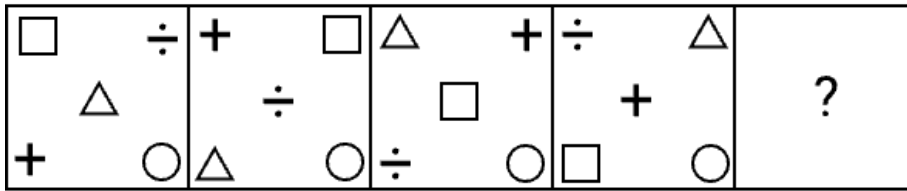
- Ans
- 1. DK - GM
 - 2. MS - PU
 - 3. BL - DN
 - 4. UJ - XL

Q.13 Based on the English alphabetical order, three of the following four are alike in a certain way and thus form a group. Which is the one that does not belong to that group?

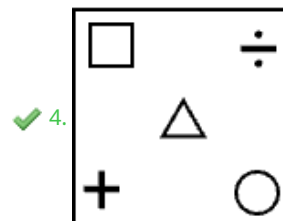
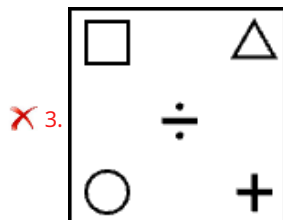
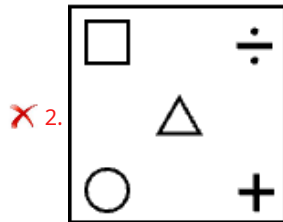
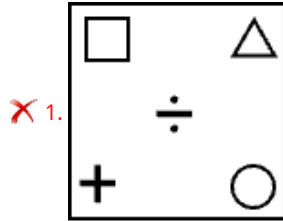
(Note: The odd one out is not based on the number of consonants/vowels or their position in the letter cluster.)

- Ans
- 1. IML
 - 2. NSR
 - 3. BGF
 - 4. CHG

Q.14 Identify the figure given in the options which when put in place of ? will logically complete the series?



Ans



Q.15 What will come in the place of '?' in the following equation, if '+' and '-' are interchanged and 'x' and '÷' are interchanged?

$$25 + 5 \div 15 \times 3 - 6 = ?$$

Ans ✗ 1. 14

✓ 2. 6

✗ 3. 8

✗ 4. 12

Q.16 CN 18 is related to FQ 22 in a certain way based on the English alphabetical order. In the same way, JS 87 is related to MV 91. To which of the given options is GL 40 related, following the same logic?

Ans ✓ 1. JO 44

✗ 2. LN 43

✗ 3. JN 34

✗ 4. JO 73

Q.17 What will come in the place of '?' in the following equation, if '+' and '-' are interchanged and 'x' and '÷' are interchanged?

$$42 \times 7 - 16 \div 3 + 15 = ?$$

- Ans
- 1. 39
 - 2. 37
 - 3. 41
 - 4. 35

Q.18 What should come in place of ? in the given series?

7 10 16 28 52 ?

- Ans
- 1. 100
 - 2. 99
 - 3. 102
 - 4. 101

Q.19 WIND is related to NDIW in a certain way based on the English alphabetical order. In the same way, FIRE is related to REIF. To which of the given options is GOLD related, following the same logic?

- Ans
- 1. LDOG
 - 2. GODL
 - 3. GOOD
 - 4. DDOG

Q.20 What should come in place of the question mark (?) in the given series?

36 37 39 43 51 ?

- Ans
- 1. 67
 - 2. 66
 - 3. 68
 - 4. 69

Section : General Awareness

Q.1 Which language, spoken in Jammu and Kashmir, is known for its unique script called Sharada and its ancient literary heritage?

- Ans
- 1. Urdu, from central India
 - 2. Punjabi, from the northwest
 - 3. Kashmiri, from the northern valley
 - 4. Hindi, from the northern plains

Q.2 What was the objective of the Cripps Mission (1942)?

- Ans
- 1. It secured full Indian cooperation and support for their efforts in World War II
 - 2. It launched the Quit India Movement
 - 3. It introduced separate electorates for Muslims
 - 4. It led to the formation of the Indian National Army

Q.3 Which Indian city hosted the Kho-Kho World Cup 2025?

- Ans
- 1. New Delhi
 - 2. Bhopal
 - 3. Mumbai
 - 4. Jaipur

Q.11 In August 2025, which Indian state capital hosted an important Film Policy Conclave, bringing together film industry stakeholders and government representatives from across the country?

- Ans
- 1. Thiruvananthapuram
 - 2. Lucknow
 - 3. Bengaluru
 - 4. Mumbai

Q.12 Which state topped the official medal tally with five gold, six silver and three bronze in the Khelo India Beach Games 2025?

- Ans
- 1. Tamil Nadu
 - 2. Manipur
 - 3. Maharashtra
 - 4. Goa

Q.13 In November 2016, the Government of India withdrew the legal tender status of ₹500 and ₹1,000 currency notes to curb black money, corruption, terrorism, and counterfeit currency. This policy initiative was known as what?

- Ans
- 1. Currency devaluation
 - 2. Demonetisation
 - 3. Monetary tightening
 - 4. Financial inclusion drive

Q.14 What term is used to describe the money that is created when banks provide loans?

- Ans
- 1. Demand Deposits
 - 2. Electronic Money
 - 3. Physical Money
 - 4. Central Bank Reserves

Q.15 The Bio-Pharma SHAKTI scheme was proposed in the Union Budget 2026-27 with an outlay of ₹10,000 crore for five years. What is the main objective of this scheme?

- Ans
- 1. To promote rural tourism development
 - 2. To boost biologics and biosimilars production
 - 3. To expand national railway infrastructure
 - 4. To provide free medicines in hospitals

Q.16 Who among the following led the revolt of 1857 at Jhansi?

- Ans
- 1. Chand Bibi
 - 2. Rani Avantibai Lodhi
 - 3. Begum Hazrat Mahal
 - 4. Rani Laxmi Bai

Q.17 In which category of the Human Development Index 2025 does India currently remain, as of the 2023 data released by UNDP?

- Ans
- 1. High Human Development
 - 2. Low Human Development
 - 3. Medium Human Development
 - 4. Very High Human Development

Q.18 The 14th edition of the India-Maldives joint military exercise "Ekuverin" in December 2025 was held in:

- Ans**
- 1. Delhi
 - 2. Kerala
 - 3. Assam
 - 4. Rajasthan

Q.19 The Rare Earth Corridors announced in Union Budget 2026 of India aim to:

- Ans**
- 1. Promote mining, processing and manufacturing
 - 2. Increase textile production clusters
 - 3. Expand metro rail connectivity
 - 4. Promote tourism in hilly regions

Q.20 How many delegates from all over the country came to the first session of the India National Congress, which was held in December 1885, and met in Bombay?

- Ans**
- 1. 172 delegates
 - 2. 72 delegates
 - 3. 54 delegates
 - 4. 154 delegates

Section : **General Awareness1**

Q.1 What is the basic unit of heredity in living organisms?

- Ans**
- 1. Cell
 - 2. Gene
 - 3. Protein
 - 4. Chromosome

Q.2 Which Indian island is a UNESCO World Heritage site for its caves?

- Ans**
- 1. Majuli
 - 2. Andaman
 - 3. Lakshadweep
 - 4. Elephanta

Q.3 Which of the following is used for mass transit?

- Ans**
- 1. Bicycle
 - 2. Walking
 - 3. Train
 - 4. Private car

Q.4 Who among the following are the members of the Parliamentary Committees?

- Ans**
- 1. Governors
 - 2. Only Ministers
 - 3. Only Judges
 - 4. Members of Parliament (MPs)

Q.5 Which of the following best describes 'age structure' of a population?

- Ans**
- 1. The distribution of people among different age groups
 - 2. The proportion of males and females in different age groups
 - 3. The number of people engaged in different economic activities
 - 4. The average age of individuals in a population

Q.6 Which of the following food groups is considered the primary source of dietary protein?

- Ans
- 1. Pulses and legumes
 - 2. Fruits and vegetables
 - 3. Sugars and sweets
 - 4. Fats and oils

Q.7 Which one of the following Articles prohibit children under the age of 14 years to work in factories or other hazardous industries?

- Ans
- 1. Article 24
 - 2. Article 21
 - 3. Article 23
 - 4. Article 22

Q.8 How does fiber in the diet contribute to good health?

- Ans
- 1. It strengthens bones
 - 2. It produces hormones
 - 3. It increases blood sugar
 - 4. It aids in digestion and prevents constipation

Q.9 In a typical human karyotype, how many pairs of autosomes are present?

- Ans
- 1. 22 pairs
 - 2. 24 pairs
 - 3. 23 pairs
 - 4. 21 pairs

Q.10 Which of the following classical Tamil texts, composed during the early historic period and structured into sections dealing with language, literature, and social conventions, is recognised as the earliest extant treatise on Tamil grammar?

- Ans
- 1. Manimekalai
 - 2. Patanjali
 - 3. Tolkappiyam
 - 4. Silappatikaram

Q.11 What is the common name for a simple shikhara that is square at the base and curves inward to a point at the top?

- Ans
- 1. Mandapa
 - 2. Jagati
 - 3. Latina
 - 4. Garbhagriha

Q.12 The Great Indian Plains are primarily composed of which geological deposits?

- Ans
- 1. Granite
 - 2. Sandstone
 - 3. Basalt
 - 4. Alluvium

Q.13 Who possesses the authority, as granted by the Indian Constitution, to dissolve the Lok Sabha prior to the conclusion of its term?

- Ans
- 1. The Chief Election Commissioner
 - 2. The President
 - 3. The President of India on the advice of the Prime Minister
 - 4. The Prime Minister

Q.14 The Santali language, spoken predominantly by the Santal tribal community in eastern and central India, belongs to which linguistic family?

- Ans**
- 1. Austroasiatic
 - 2. Indo-Aryan
 - 3. Dravidian
 - 4. Tibeto-Burman

Q.15 Which of the following NTPC-owned coal-based power stations has the highest commissioned capacity (MW)?

- Ans**
- 1. Bongaigaon
 - 2. Vindhyachal
 - 3. Gadawara
 - 4. Barauni

Q.16 The "Seven Pagodas" refer to which of the following architectural sites?

- Ans**
- 1. Mahabalipuram
 - 2. Ajanta
 - 3. Elora
 - 4. Hampi

Q.17 In which part of the Indian Constitution has protection and improvement of the natural environment — including forests, lakes, rivers and wildlife — been added as a fundamental duty?

- Ans**
- 1. Part IX
 - 2. Part VI
 - 3. Part X
 - 4. Part IV-A

Q.18 Which of the following naturally occurring monosaccharides is present in fruits, honey, and vegetables?

- Ans**
- 1. Lactose
 - 2. Trehalose
 - 3. Fructose
 - 4. Maltose

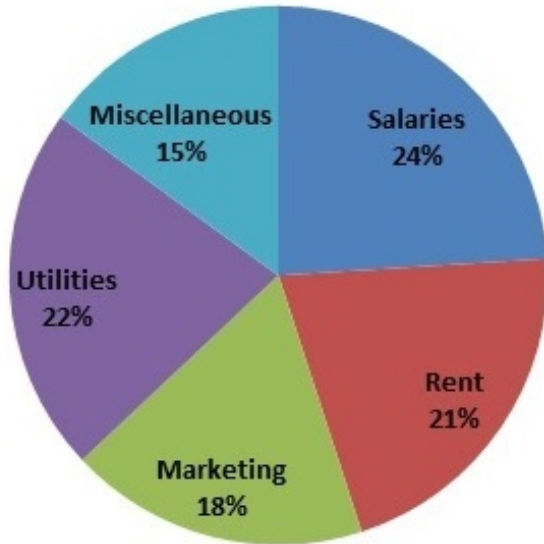
Q.19 Which type of Buddhist architecture served as a residential monastery where monks lived and meditated during the rainy season?

- Ans**
- 1. Stupa
 - 2. Pillar
 - 3. Vihara
 - 4. Chaitya

Q.20 Under which Article does the President have the power to grant pardons and commute sentences?

- Ans**
- 1. Article 52
 - 2. Article 82
 - 3. Article 62
 - 4. Article 72

- Q.1 The given pie chart shows the expenses (in percentages) of a company in different categories. The total expenses of the company are ₹11,00,000.



Find the difference between the amount spent by the company on Salaries and Utilities.

- Ans
- 1. ₹18,000
 - 2. ₹22,000
 - 3. ₹20,600
 - 4. ₹19,500

- Q.2 What is the compound interest (in ₹) on ₹5,000 for 3 years at 10% per annum, compounded annually?

- Ans
- 1. 1,655
 - 2. 1,565
 - 3. 1,656
 - 4. 1,566

- Q.3 If $\frac{574.257}{0.0041} = x$, then find the value of $\frac{574257}{41}$

- Ans
- 1. $10x$
 - 2. x
 - 3. $\frac{x}{10}$
 - 4. $100x$

- Q.4 If each side of a cube is increased by 30%, what is the percentage change in its volume?

- Ans
- 1. 119.7%
 - 2. 121.6%
 - 3. 131.6%
 - 4. 120.9%

Q.5 A person's monthly income is ₹95,000. They spend 18% on rent, 22% on education, 12% on transportation, 23% on other expenses, and remaining amount they save. Calculate the amount left for savings.

- Ans**
- 1. ₹23,150
 - 2. ₹23,750
 - 3. ₹23,350
 - 4. ₹23,550

Q.6 The average of 6.5, 10.7, 20.4 and a is 14. The value of a is:2667

- Ans**
- 1. 18.4
 - 2. 19.4
 - 3. 17.4
 - 4. 20.4

Q.7 Virendra deposited a certain sum of money at 20% per annum, compounded annually. At the end of 2 years, the total amount received was ₹84,060. Find the sum of money deposited by Virendra.

- Ans**
- 1. ₹58375
 - 2. ₹58727
 - 3. ₹58680
 - 4. ₹57959

Q.8 A vendor bought lemons at 22 for a rupee. How many must he sell for a rupee to gain 100%?

- Ans**
- 1. 13
 - 2. 12
 - 3. 15
 - 4. 11

Q.9 In what duration (in years) will ₹9,600 fetch a simple interest of ₹720 at 5% per annum rate of interest?1555

- Ans**
- 1. 3
 - 2. 1.5
 - 3. 0.5
 - 4. 2.5

Q.10 A 49-liter solution of fruit juice contains mango and orange juice in the ratio 5:2. How many liters of orange juice must be added to the mixture so that the new ratio of mango to orange juice becomes 2:1?

- Ans**
- 1. 1.5 liters
 - 2. 2.5 liters
 - 3. 4.5 liters
 - 4. 3.5 liters

Q.11 If the average of 9 consecutive numbers is 30, then find the largest of these numbers.

- Ans**
- 1. 32
 - 2. 36
 - 3. 34
 - 4. 30

Q.12 If 3 persons consume 180 kg of food in 30 days, how many people can be supported with 360 kg of food for 20 days?

- Ans 1. 9
 2. 18
 3. 12
 4. 6

Q.13 Simplify the following expression.
 $54 \div 9 + 39 \div 13 \times 5 - 6 \text{ of } 4 + 8$

- Ans 1. 7
 2. 4
 3. 6
 4. 5

Q.14 The sum of 6 numbers is 684. Find their average.1546

- Ans 1. 112
 2. 115
 3. 114
 4. 113

Q.15 A vendor bought lemons at 27 for a rupee. How many must he sell for a rupee to gain 35%?

- Ans 1. 22
 2. 21
 3. 24
 4. 20

Q.16 In the expression pq^2 , the values of both p and q are increased by 10%. By what percentage does the value of the given expression increase?

- Ans 1. 30.2%
 2. 28.5%
 3. 33.1%
 4. 31.3%

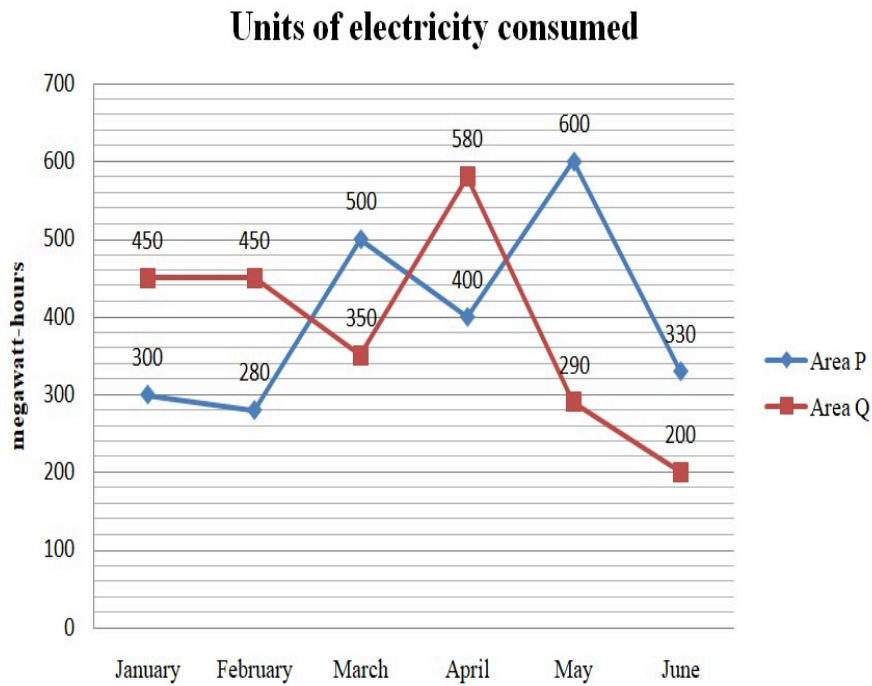
Q.17 A certain sum amounts to ₹51,712 at the rate of 33% per annum in 2 years, interest compounded 8-monthly. What will be the amount payable (in ₹, rounded off to the nearest rupee) on the same sum at the same rate and in the same time, if the interest is compounded yearly?

- Ans 1. 50,794
 2. 50,375
 3. 50,067
 4. 50,519

Q.18 A family's monthly expenditure is ₹27,000, which is 75% of their monthly income. What is their monthly income?

- Ans 1. ₹46,000
 2. ₹35,000
 3. ₹36,000
 4. ₹45,000

- Q.19 The line graph shows the number of units of electricity consumed (in megawatt-hours, MWh) by two residential areas (P and Q) over the first six months of a year.



What is the total electricity consumed by Area Q over the given six months?

- Ans 1. 2,460 MWh
 2. 2,320 MWh
 3. 2,260 MWh
 4. 2,120 MWh
- Q.20 If one student eats 2 apples per day, how many apples will be needed for 24 students over 5 days?

- Ans 1. 200
 2. 240
 3. 120
 4. 160

Section : Arithmetical and Numerical Ability1

- Q.1 The incomes of Praveen, Ranveer and Naveen are in the ratio of 11:14:15 and their savings are in the ratio 12:14:17. If Ranveer spent 50% of his income, what is the ratio of the expenditures of Praveen, Ranveer and Naveen?

- Ans 1. 7:9:13
 2. 4:7:9
 3. 7:9:11
 4. 10:14:13

- Q.2 A shopkeeper sold a book at a loss of 6%. If the selling price had been increased by ₹120, there would have been a gain of 18%. What was the cost price (in ₹) of the book?1832

- Ans 1. 505
 2. 500
 3. 495
 4. 510

Q.3 Deepak and Tappu can do a piece of work in 45 hours and 40 hours, respectively. They began the work together, but Deepak left after some hours and Tappu finished the remaining work in 23 hours. After how many hours did Deepak leave?

- Ans
- 1. 9 hours
 - 2. 6 hours
 - 3. 15 hours
 - 4. 12 hours

Q.4 A can complete a piece of work in 12 days and B can complete it in 18 days. In how many days will they complete the work?

- Ans
- 1. $7\frac{2}{5}$
 - 2. $7\frac{1}{5}$
 - 3. $7\frac{3}{5}$
 - 4. $7\frac{4}{5}$

Q.5 A grocer has 57 kg of rice, a part of which he sells at 23% profit, and the remaining quantity is sold at 61% profit. He gains 53% on the whole. What is the quantity of rice sold at 61% profit?

- Ans
- 1. 43 kg
 - 2. 48 kg
 - 3. 44 kg
 - 4. 45 kg

Q.6 If $A : B = 3 : 13$ and $B : C = 7 : 24$, find $A : C$.

- Ans
- 1. 7 : 104
 - 2. 3 : 7
 - 3. 3 : 116
 - 4. 2 : 83

Q.7 A tap M can fill a tank in 4.5 hours. But due to a leak L at the bottom of the tank, it took 6 hours to fill the tank. If the tank is full, in how much time can the leak empty it?

- Ans
- 1. 6 hours
 - 2. 18 hours
 - 3. 9 hours
 - 4. 12 hours

Q.8 A cuboid of dimension $24\text{ cm} \times 9\text{ cm} \times 8\text{ cm}$ is melted and smaller cubes of side 6 cm are formed. Find how many such cubes can be formed.

- Ans
- 1. 12
 - 2. 8
 - 3. 6
 - 4. 10

Q.9 Three numbers are in the ratio 4 : 7 : 11. If the sum of the first and third numbers is 184 more than the second number, find the sum of all three numbers.

- Ans 1. 506
 2. 564
 3. 515
 4. 532

Q.10 A shopkeeper marks the price of an item at K and offers a discount of 20% on it. He What is the value of K?

- Ans 1. 321.5
 2. 345.5
 3. 288.5
 4. 312.5

Q.11 A solid metallic sphere of radius 6 cm is melted and recast into smaller solid spheres, each of radius 2 cm. How many such smaller spheres can be formed?

- Ans 1. 27
 2. 24
 3. 64
 4. 8

Q.12 A boat takes 200 minutes to cover a distance running upstream and takes 75 minutes to cover the same distance running downstream. Find the average speed of the boat for the round trip if the speed of the stream is 10 km/hr. (Round off your answer to two decimal places.)

- Ans 1. 24.56 km/hr
 2. 17.45 km/hr
 3. 22 km/hr
 4. 20.42 km/hr

Q.13 Two trains start at the same time from stations P and Q towards each other at speeds of 75 km/h and 60 km/h, respectively. When they meet, one train has travelled 18 km more than the other. Find the distance between stations P and Q.

- Ans 1. 162 km
 2. 154 km
 3. 175 km
 4. 148 km

Q.14 Find the total surface area (in cm^2) of a closed cylinder having the diameter of the base as 14 cm and a height of 4 cm. (Use $\pi = 22/7$)

- Ans 1. 552
 2. 422
 3. 484
 4. 432

Q.15 A cyclist covers a certain distance at a certain speed. If a jogger covers three-fourths of that distance in the same amount of time, what is the ratio of the cyclist's speed to the jogger's speed?

- Ans 1. 4 : 3
 2. 3 : 4
 3. 1 : 4
 4. 4 : 1

Q.16 A spherical water tank has a surface area of $36\pi \text{ m}^2$. The tank is first painted, and then an insulation layer of thickness 0.5 m is added around it. The cost of painting is ₹5 per square meter. Find the total cost of painting both the original exterior surface of the tank and the outer surface after insulation. (Use $\pi = 3.14$, and round your answer to the nearest rupee.)

- Ans
- 1. ₹1,350
 - 2. ₹1,335
 - 3. ₹1,345
 - 4. ₹1,340

Q.17 A train travels at a speed of 84 km/h for the first 20 minutes and at a speed of 120 km/h for the next 10 minutes. Find the average speed (in km/h) of the train.

- Ans
- 1. 100
 - 2. 88
 - 3. 96
 - 4. 94

Q.18 Ammy and Bhanu can do a piece of work in 20 days and 24 days, respectively. They worked together for 8 days and then Ammy left. The remaining work was finished by Bhanu in:

- Ans
- 1. $7\frac{2}{5}$ days
 - 2. $7\frac{1}{6}$ days
 - 3. $6\frac{3}{5}$ days
 - 4. $6\frac{2}{5}$ days

Q.19 A, B and C started a business with their capitals in the ratio 4 : 5 : 4. A increased his capital by 25% after 5 months, B increased his capital by 40% after 8 months and C withdrew 75% of his capital after 6 months, from the start of the business. If the total profit at the end of a year was ₹4,84,704, then the difference (in ₹) between the shares of B and C in the profit was:

- Ans
- 1. 1,24,565
 - 2. 1,10,980
 - 3. 1,05,423
 - 4. 1,20,384

Q.20 On a map, 5 cm represents 20 km. How many kilometers does 8 cm r

- Ans
- 1. 32 km
 - 2. 23 km
 - 3. 28 km
 - 4. 16 km

Section : Test of English Language and Comprehension

Q.1 Choose the correct article from the options given to complete the sentence.

She always goes to ___ market in the evening after her college.

- Ans
- 1. an
 - 2. the
 - 3. a
 - 4. No article needed

Q.2 Complete the sentence with the contextually most suitable alternative.

The audience clapped enthusiastically when the singer ___ her final note.

- Ans
- 1. broke
 - 2. hit
 - 3. missed
 - 4. dropped

Q.3 Select the most appropriate option to fill in the blank and complete the given sentence.

The recent accident was _____ carelessness of the people.

- Ans
- 1. due to
 - 2. due
 - 3. towards
 - 4. for

Q.4 Select the most appropriate option to fill in the blank.

I think I need to take ___ vacation from work for a few days to get some rest.

- Ans
- 1. a
 - 2. an
 - 3. the
 - 4. No article required

Q.5 Complete the sentence by choosing the appropriate word from the options.

We looked ___ for the missing keys, but couldn't find them.

- Ans
- 1. everyone
 - 2. anywhere
 - 3. somewhere
 - 4. everywhere

Q.6 Select the most appropriate option to fill in the blanks.

If the researchers _____ more data and _____ it properly, the study would have yielded more accurate results.

- Ans
- 1. collected, analyzed
 - 2. collect, analyze
 - 3. had collected, had analyzed
 - 4. had collected, analyzed

Q.7 Select the most appropriate option to substitute the underlined word in the given sentence to make it correct.

O. Henry wrote a story a week above several years, such was his prolificacy and popularity.

- Ans
- 1. beneath
 - 2. within
 - 3. for
 - 4. along

Q.8 Complete the following sentence by choosing the most appropriate option provided.

The marine expedition was delayed due to a strong undercurrent moving steadily _____ the southern coast.

- Ans
- 1. onto
 - 2. beyond
 - 3. across
 - 4. along

Q.9 A grammatical error has been highlighted in the given sentence. Correct the sentence by choosing the right verb to fix the error.

The scientist **learnt** a new species of butterfly last year, and has been studying it ever since.3313

- Ans
- 1. demeaned
 - 2. redeemed
 - 3. demanded
 - 4. discovered

Q.10 Choose the word that best completes the sentence.

Everyone _____ the White House, the home of the President.4513

- Ans
- 1. were visited
 - 2. have visited
 - 3. visit
 - 4. visits

Q.11 A sentence is divided into the following different segments. Rearrange all the segments to form a coherent sentence.

have made information in multiple languages (A) / have access to these resources (B) / although technological tools (C) / around the world still do not (D) / more accessible, many teachers (E)

- Ans
- 1. CAEDB
 - 2. BDACE
 - 3. DCBAE
 - 4. ACEBD

Q.12 Select the most appropriate article for the blank in the sentence given below.

An unknown violinist left _____ audience in awe. 1504

- Ans
- 1. an
 - 2. No article
 - 3. the
 - 4. a

Q.13 A statement divided into different segments is given. Rearrange all the segments to form a coherent statement.

- P. exposing yourself to new cultures and ways of life around
- Q. creative juices flowing again
- R. you is what's really going to get those
- S. traveling abroad long-term and

- Ans**
- 1. SPRQ
 - 2. PQRS
 - 3. SPQR
 - 4. PRQS

Q.14 Select the most appropriate option to fill in the blank.

He is studying ___ biology at Delhi University.

- Ans**
- 1. a
 - 2. the
 - 3. No article required
 - 4. an

Q.15 Select the most appropriate option to fill in the blank.

The detective examined the evidence _____ before drawing a conclusion.

- Ans**
- 1. easily
 - 2. nearly
 - 3. hardly
 - 4. closely

Comprehension:

Read the following the passage and answer the given questions.

Every year, when the river near Meena's village swelled with monsoon rains, the old bamboo bridge was rebuilt by hand. Villagers gathered with ropes, logs, and laughter, tying each part carefully. Meena, just 14, had always watched from the banks. "It's too dangerous," her mother warned. But this year, when a log slipped and nearly fell, Meena dashed forward and caught it with surprising strength. The elders paused, then nodded approvingly. For the first time, she was allowed to help. Her hands shook, but her heart was steady. When the bridge was completed, Meena didn't just walk across it—she had built part of it. From then on, she stood taller, not because of pride, but because of belonging. The bridge wasn't only a way across the river. It was a link between generations, strength and trust, tradition and change.

SubQuestion No : 16

Q.16 What event allowed Meena to finally help with the bridge?

Comprehension:

Read the following the passage and answer the given questions.

Every year, when the river near Meena's village swelled with monsoon rains, the old bamboo bridge was rebuilt by hand. Villagers gathered with ropes, logs, and laughter, tying each part carefully. Meena, just 14, had always watched from the banks. "It's too dangerous," her mother warned. But this year, when a log slipped and nearly fell, Meena dashed forward and caught it with surprising strength. The elders paused, then nodded approvingly. For the first time, she was allowed to help. Her hands shook, but her heart was steady. When the bridge was completed, Meena didn't just walk across it—she had built part of it. From then on, she stood taller, not because of pride, but because of belonging. The bridge wasn't only a way across the river. It was a link between generations, strength and trust, tradition and change.

SubQuestion No : 17

Q.17 What does Meena's reaction during the bridge-building suggest about her character?

Comprehension:

Read the following the passage and answer the given questions.

Every year, when the river near Meena's village swelled with monsoon rains, the old bamboo bridge was rebuilt by hand. Villagers gathered with ropes, logs, and laughter, tying each part carefully. Meena, just 14, had always watched from the banks. "It's too dangerous," her mother warned. But this year, when a log slipped and nearly fell, Meena dashed forward and caught it with surprising strength. The elders paused, then nodded approvingly. For the first time, she was allowed to help. Her hands shook, but her heart was steady. When the bridge was completed, Meena didn't just walk across it—she had built part of it. From then on, she stood taller, not because of pride, but because of belonging. The bridge wasn't only a way across the river. It was a link between generations, strength and trust, tradition and change.

SubQuestion No : 18

Q.18 Which of the following best describes the theme of the passage?

Comprehension:

Read the following the passage and answer the given questions.

Every year, when the river near Meena's village swelled with monsoon rains, the old bamboo bridge was rebuilt by hand. Villagers gathered with ropes, logs, and laughter, tying each part carefully. Meena, just 14, had always watched from the banks. "It's too dangerous," her mother warned. But this year, when a log slipped and nearly fell, Meena dashed forward and caught it with surprising strength. The elders paused, then nodded approvingly. For the first time, she was allowed to help. Her hands shook, but her heart was steady. When the bridge was completed, Meena didn't just walk across it—she had built part of it. From then on, she stood taller, not because of pride, but because of belonging. The bridge wasn't only a way across the river. It was a link between generations, strength and trust, tradition and change.

SubQuestion No : 19

Q.19 Choose the word that is opposite in meaning to "steady" as used in the sentence:

"Her hands shook, but her heart was steady."

Comprehension:

Read the following the passage and answer the given questions.

Every year, when the river near Meena's village swelled with monsoon rains, the old bamboo bridge was rebuilt by hand. Villagers gathered with ropes, logs, and laughter, tying each part carefully. Meena, just 14, had always watched from the banks. "It's too dangerous," her mother warned. But this year, when a log slipped and nearly fell, Meena dashed forward and caught it with surprising strength. The elders paused, then nodded approvingly. For the first time, she was allowed to help. Her hands shook, but her heart was steady. When the bridge was completed, Meena didn't just walk across it—she had built part of it. From then on, she stood taller, not because of pride, but because of belonging. The bridge wasn't only a way across the river. It was a link between generations, strength and trust, tradition and change.

SubQuestion No : 20

Q.20 Which title best fits the passage?

Section : Test of English Language and Comprehension1

Q.1 Choose the correct meaning of the given proverb.

Slow and steady wins the race.

- Ans**
- 1. Speed always guarantees success
 - 2. Delays prevent achievement
 - 3. Careful and consistent effort leads to success
 - 4. Competition depends only on luck

Q.2 Read the following group of sentences. The first and last sentences (1 and 6) are fixed. Rearrange the remaining sentences (A, B, C, and D) in the correct order to form a meaningful paragraph.

- 1. Refreshment was about to be served at the annual school event.**
- A. Everyone enjoyed their food and chatted cheerfully.**
 - B. Students eagerly lined up to receive these treats.**
 - C. The aroma of fresh juice and snacks filled the hall.**
 - D. Teachers supervised the distribution to ensure fairness.**
- 6. The event was a delightful experience for all.**

- Ans**
- 1. CBDA
 - 2. ABCD
 - 3. BACD
 - 4. BDCA

Q.3 From the given options select the correct spelling of the underlined word
The actors' pronunciation of foriegn words was incorrect.

- Ans
- 1. Forien
 - 2. Foregn
 - 3. Forein
 - 4. Foreign

Q.4 Choose the correct SYNONYM of the given word.
Exuberant

- Ans
- 1. Depressed
 - 2. Subdued
 - 3. Enthusiastic
 - 4. Extreme

Q.5 A word segment has been underlined in the given sentence. Select the option that shows the most appropriate one-word substitute for the underlined segment.

The fertile and productive fields were a sight of joy and fulfillment for the farmers.

- Ans
- 1. effluent
 - 2. fecund
 - 3. foul
 - 4. vacuous

Q.6 Choose the correct meaning of the given proverb.

Every cloud has a silver lining.

- Ans
- 1. Bad times will eventually give way to better times
 - 2. Every tough situation can teach a lesson
 - 3. Every cloud brings rain
 - 4. Everyday throws one or the other challenges

Q.7 Replace the highlighted text with the correct one-word substitute given in the options.

My watch is (a/an) no longer in use.

- Ans
- 1. unabating
 - 2. famish
 - 3. candour
 - 4. obsolete

Q.8 Select the option that rectifies the incorrectly spelt word in the given sentence

The lawyer's aquiescence was essential for the case to proceed.

- Ans
- 1. aquiescence
 - 2. acquiescence
 - 3. acquiescence
 - 4. acquiesense

Q.9 Select the most appropriate ANTONYM of the given word.

Turgid

- Ans
- 1. Simple
 - 2. Pompous
 - 3. Inflated
 - 4. Swollen

Q.10 Find out the antonym of "rudimentary".

- Ans
- 1. ordinary
 - 2. temporary
 - 3. advanced
 - 4. insignificant

Q.11 Choose the meaning of the given word from the following options.

Mollify

- Ans
- 1. To avoid confrontation
 - 2. To mislead or deceive
 - 3. To calm someone down or ease their anger
 - 4. To exaggerate a situation

Q.12 Replace the highlighted text with the correct one-word substitution given in the options.

Sanjay appreciates (a/an) person who is free from all blame.

- Ans
- 1. delegate
 - 2. mercenary
 - 3. exonerate
 - 4. eccentric

Q.13 Choose the appropriate option that best expresses the meaning of the proverb 'the bigger they are, the harder they fall'.

- Ans
- 1. strength ensure a softer landing
 - 2. the more powerful or influential someone is, the more they have to lose if they fail
 - 3. the more powerful someone is, the harder it is for them to fail
 - 4. larger things always fall more easily

Q.14 Select the appropriate meaning of the given proverb:
A bird in the hand is worth two in the bush

- Ans
- 1. Better keep what you have than risk an uncertain gain
 - 2. Taking risks always leads to greater rewards
 - 3. Success depends on careful planning and teamwork
 - 4. Opportunities come only to those who wait patiently

Q.15 Choose the correct one-word substitute for the following.

Amount of money paid to release someone or something from captivity

- Ans
- 1. Gift
 - 2. Bribe
 - 3. Compensation
 - 4. Ransom

Comprehension:

Read the given passage carefully and answer the questions that follow.

Forests play a vital role in maintaining the balance of nature. They provide shelter for a wide variety of plants and animals and support rich biodiversity. Trees in forests absorb carbon dioxide from the atmosphere and release oxygen, which helps regulate the Earth's climate and maintain air quality. Forests also prevent soil erosion by holding the soil together with their roots. In addition, they influence rainfall patterns and help maintain water cycles in many regions. Millions of people around the world depend on forests for resources such as food, medicine, and raw materials. However, rapid deforestation caused by human activities such as logging, urban expansion, and agriculture has become a serious environmental concern. If forests continue to disappear at the current rate, it may lead to loss of biodiversity and climate imbalance. Therefore, protecting forests is essential for sustaining life and ensuring environmental stability for future generations.

SubQuestion No : 16

Q.16 According to the passage, what gas do trees release into the atmosphere?

Comprehension:

Read the given passage carefully and answer the questions that follow.

Forests play a vital role in maintaining the balance of nature. They provide shelter for a wide variety of plants and animals and support rich biodiversity. Trees in forests absorb carbon dioxide from the atmosphere and release oxygen, which helps regulate the Earth's climate and maintain air quality. Forests also prevent soil erosion by holding the soil together with their roots. In addition, they influence rainfall patterns and help maintain water cycles in many regions. Millions of people around the world depend on forests for resources such as food, medicine, and raw materials. However, rapid deforestation caused by human activities such as logging, urban expansion, and agriculture has become a serious environmental concern. If forests continue to disappear at the current rate, it may lead to loss of biodiversity and climate imbalance. Therefore, protecting forests is essential for sustaining life and ensuring environmental stability for future generations.

SubQuestion No : 17

Q.17 What can be inferred about the consequences of continued deforestation?

Comprehension:

Read the given passage carefully and answer the questions that follow.

Forests play a vital role in maintaining the balance of nature. They provide shelter for a wide variety of plants and animals and support rich biodiversity. Trees in forests absorb carbon dioxide from the atmosphere and release oxygen, which helps regulate the Earth's climate and maintain air quality. Forests also prevent soil erosion by holding the soil together with their roots. In addition, they influence rainfall patterns and help maintain water cycles in many regions. Millions of people around the world depend on forests for resources such as food, medicine, and raw materials. However, rapid deforestation caused by human activities such as logging, urban expansion, and agriculture has become a serious environmental concern. If forests continue to disappear at the current rate, it may lead to loss of biodiversity and climate imbalance. Therefore, protecting forests is essential for sustaining life and ensuring environmental stability for future generations.

SubQuestion No : 18

Q.18 What is the main idea of the passage?

Comprehension:

Read the given passage carefully and answer the questions that follow.

Forests play a vital role in maintaining the balance of nature. They provide shelter for a wide variety of plants and animals and support rich biodiversity. Trees in forests absorb carbon dioxide from the atmosphere and release oxygen, which helps regulate the Earth's climate and maintain air quality. Forests also prevent soil erosion by holding the soil together with their roots. In addition, they influence rainfall patterns and help maintain water cycles in many regions. Millions of people around the world depend on forests for resources such as food, medicine, and raw materials. However, rapid deforestation caused by human activities such as logging, urban expansion, and agriculture has become a serious environmental concern. If forests continue to disappear at the current rate, it may lead to loss of biodiversity and climate imbalance. Therefore, protecting forests is essential for sustaining life and ensuring environmental stability for future generations.

SubQuestion No : 19

Q.19 Choose the word that is opposite in meaning to "rapid" as used in the passage.

Comprehension:

Read the given passage carefully and answer the questions that follow.

Forests play a vital role in maintaining the balance of nature. They provide shelter for a wide variety of plants and animals and support rich biodiversity. Trees in forests absorb carbon dioxide from the atmosphere and release oxygen, which helps regulate the Earth's climate and maintain air quality. Forests also prevent soil erosion by holding the soil together with their roots. In addition, they influence rainfall patterns and help maintain water cycles in many regions. Millions of people around the world depend on forests for resources such as food, medicine, and raw materials. However, rapid deforestation caused by human activities such as logging, urban expansion, and agriculture has become a serious environmental concern. If forests continue to disappear at the current rate, it may lead to loss of biodiversity and climate imbalance. Therefore, protecting forests is essential for sustaining life and ensuring environmental stability for future generations.

SubQuestion No : 20

Q.20 Which of the following is the most appropriate title for the passage?

Section : Test of Hindi Language and Comprehension

Q.1 'आने का क्रम ना रुकना' अर्थ के लिए सही मुहावरा क्या है?

- Ans
- 1. आँख दिखाना
 - 2. तौताँ बँधना
 - 3. टाक में रहना
 - 4. खाक में मिलना

Q.2 'जिसका जन्म माँ के गर्भ से न हुआ हो' वाक्यांश के लिए सार्थक शब्द का चयन कीजिए-

- Ans
- 1. अण्डज
 - 2. अज
 - 3. द्विज
 - 4. अयोनिज

Q.3 वाक्य-विन्यास की दृष्टि से दिये गये वाक्य का शुद्ध रूप चुनें--
अच्छे विचार मनुष्य के जीवन को तरह पूरी बदल देते हैं।

- Ans
- 1. अच्छे विचार मनुष्य के जीवन को पूरी तरह बदल देते हैं।
 - 2. मनुष्य के जीवन को पूरी तरह बदल देते हैं विचार अच्छे।
 - 3. विचार अच्छे मनुष्य के जीवन को पूरी तरह बदल देते हैं।
 - 4. पूरी तरह बदल अच्छे विचार मनुष्य के जीवन को देते हैं।

Q.4 वाक्य-विन्यास की दृष्टि से दिये गये वाक्य का शुद्ध रूप चुनें--
प्रकृति हमें जीवन जीने की बहुत सुंदर सिखाती है कला।

- Ans
- 1. हमें जीवन जीने की बहुत सुंदर कला सिखाती है प्रकृति।
 - 2. जीने की जीवन प्रकृति हमें बहुत सुंदर कला सिखाती है।
 - 3. प्रकृति हमें जीवन जीने की बहुत सुंदर कला सिखाती है।
 - 4. सुंदर कला सिखाती है प्रकृति हमें जीवन जीने की बहुत।

Q.5 निम्नलिखित विकल्पों में से अतिरिक्त वाक्य का चयन करें-

- Ans
- 1. यूरोप महाद्वीप में अनेक प्रकार के खनिज पाए जाते हैं ।
 - 2. यूरोप सबसे अधिक घनी आबादी वाला महाद्वीप है ।
 - 3. वृक्ष बहुत ही मूल्यवान संसाधन है जो हमें वनों से प्राप्त होता है ।
 - 4. यूरोप महाद्वीप उत्तरी ध्रुवीय रेखा के बिलकुल निकट है ।

Q.6 निम्नलिखित वाक्य में सही कारक का चयन कर वाक्य पूरा करें।
अजरबैजान ____ राजधानी बाकू है ।

- Ans
- 1. में
 - 2. की
 - 3. का
 - 4. के

Q.7 उन्होंने बातन पूछी।
उपर्युक्त वाक्य में रिक्त स्थान की पूर्ति के लिए उचित क्रिया-विशेषण शब्द का चयन करें-

- Ans
- 1. जितना
 - 2. द्वारा
 - 3. तक
 - 4. अतिरिक्त

Q.8 निम्नलिखित में से कौन-सा वाक्य शुद्ध है?

- Ans
- 1. ये दृश्य बहुत शुन्दर है।
 - 2. प्रभा बहुत देर से रो रही है।
 - 3. बड़ी विकट समस्या है।
 - 4. वहाँ पहुँचकर पत्र लिखना।

Q.9 नीचे दिए गए वाक्यों में से अतिरिक्त वाक्य का चुनाव करें-

- Ans
- 1. सोलर पैनल एक निश्चित मात्रा में बिजली उत्पन्न करता है।
 - 2. दुनिया में ऊर्जा की भूख तेजी से बढ़ रही है।
 - 3. लेकिन ऊर्जा की कुल मांग उससे भी तेजी से बढ़ रही है।
 - 4. यह साफ है कि अक्षय ऊर्जा का दायरा तेजी से बढ़ रहा है।

Q.10 मैं कल पुस्तकालय।
उपर्युक्त वाक्य में रिक्त स्थान की पूर्ति के लिए उचित क्रिया शब्द का चयन करें-

- Ans
- 1. रही है
 - 2. जाऊँगी
 - 3. हुई
 - 4. करना

Q.11 'गाल बजाना' मुहावरे का उपयुक्त अर्थ चुनिए।

- Ans
- 1. डींग हॉकना
 - 2. बहुत अधिक शोर मचाना
 - 3. गाल पर थप्पड़ मारना
 - 4. मधुर संगीत सुनाना

Q.12 सर्वोचित क्रिया शब्द से दिये गये वाक्य का रिक्त स्थान पूर्ण करें--
पक्षी सुबह से आसमान में हैं, भोजन की तलाश में।

- Ans
- 1. उड़ रहे
 - 2. मुड़ रहे
 - 3. चहक रहे
 - 4. फुदक रहे

Q.13 निम्न वाक्य के रिक्त स्थान में कौन-सा कारक चिह्न आएगा?
'सीमा ने तनीषा पीटा।'

- Ans
- 1. ने
 - 2. को
 - 3. में
 - 4. पर

Q.14 निम्न वाक्यांश के लिए सार्थक शब्द अंकित कीजिए।

जो सुना हुआ न हो

- Ans
- 1. श्रव्य
 - 2. लक्ष्य
 - 3. अश्रव्य
 - 4. पश्य

Q.15 वाक्य-विन्यास की दृष्टि से दिये गये वाक्य का शुद्ध रूप चुनें--
अनुशासन ही विद्यार्थी को सफलता के पर ले जाता है शिखर।

- Ans
- 1. विद्यार्थी को सफलता के शिखर पर ले जाता है अनुशासन ही।
 - 2. शिखर पर ले जाता है अनुशासन ही विद्यार्थी को सफलता के।
 - 3. अनुशासन ही विद्यार्थी को सफलता के शिखर पर ले जाता है।
 - 4. अनुशासन ही सफलता के पर शिखर ले जाता है विद्यार्थी को।

Comprehension:

दिए गए गद्यांश को पढ़कर पूछे गए प्रश्नों के उत्तर दीजिए-

अक्सर हम घर को सजाने के लिए दीवारों पर सुंदर पेंटिंग्स या तस्वीरें लगा देते हैं, लेकिन क्या आप जानते हैं कि वे केवल सजावट की वस्तु नहीं हैं? वास्तु शास्त्र के अनुसार, हर तस्वीर एक विशिष्ट ऊर्जा पैदा करती है, जो आपके मानसिक स्वास्थ्य, रिश्तों और आर्थिक स्थिति पर गहरा असर डालती है। एक घर सिर्फ ईंट, पेंट और फर्नीचर से नहीं बनता। यह एक जीवंत स्थान है जो हमारी भावनाओं, यादों और प्राण-ऊर्जा से जुड़ा होता है। इस ऊर्जा को सबसे खामोश, लेकिन सबसे प्रभावशाली तरीके से प्रभावित करती हैं-हमारी दीवारों पर लगी तस्वीरें और पेंटिंग्स। अक्सर हम सजावट अनजाने में करते हैं। किसी गैलरी से पसंद आई पेंटिंग ले आए, सीढ़ियों के बगल वाली दीवार को एस्थेटिक लुक देने के लिए परिवार दोस्तों के साथ बिताए खुशनुमा पलों का कोलाज बना दिया या पूर्वजों की तस्वीरों को सहेज दिया। ये फ्रेम घर के खालीपन को तो भर देते हैं, लेकिन क्या आपने कभी सोचा है कि ये तस्वीरें आपके घर की ऊर्जा और आपके आसपास परिवेश को सकारात्मक या नकारात्मक बनाने की भी भूमिका निभाते हैं। यही कारण है कि घर में लगने वाली तस्वीरों का चुनाव खूब सोच-समझकर करने की सलाह दी जाती है।

SubQuestion No : 16

Q.16 दिए गए गद्यांश की संरचना किस प्रकार की है?

Comprehension:

दिए गए गद्यांश को पढ़कर पूछे गए प्रश्नों के उत्तर दीजिए-

अक्सर हम घर को सजाने के लिए दीवारों पर सुंदर पेंटिंग्स या तस्वीरें लगा देते हैं, लेकिन क्या आप जानते हैं कि वे केवल सजावट की वस्तु नहीं हैं? वास्तु शास्त्र के अनुसार, हर तस्वीर एक विशिष्ट ऊर्जा पैदा करती है, जो आपके मानसिक स्वास्थ्य, रिश्तों और आर्थिक स्थिति पर गहरा असर डालती है। एक घर सिर्फ ईंट, पेंट और फर्नीचर से नहीं बनता। यह एक जीवंत स्थान है जो हमारी भावनाओं, यादों और प्राण-ऊर्जा से जुड़ा होता है। इस ऊर्जा को सबसे खामोश, लेकिन सबसे प्रभावशाली तरीके से प्रभावित करती हैं-हमारी दीवारों पर लगी तस्वीरें और पेंटिंग्स। अक्सर हम सजावट अनजाने में करते हैं। किसी गैलरी से पसंद आई पेंटिंग ले आए, सीढ़ियों के बगल वाली दीवार को एस्थेटिक लुक देने के लिए परिवार दोस्तों के साथ बिताए खुशनुमा पलों का कोलाज बना दिया या पूर्वजों की तस्वीरों को सहेज दिया। ये फ्रेम घर के खालीपन को तो भर देते हैं, लेकिन क्या आपने कभी सोचा है कि ये तस्वीरें आपके घर की ऊर्जा और आपके आसपास परिवेश को सकारात्मक या नकारात्मक बनाने की भी भूमिका निभाते हैं। यही कारण है कि घर में लगने वाली तस्वीरों का चुनाव खूब सोच-समझकर करने की सलाह दी जाती है।

SubQuestion No : 17

Q.17 गद्यांश में प्रयुक्त 'विशिष्ट' शब्द का विलोम क्या होता है?

Comprehension:

दिए गए गद्यांश को पढ़कर पूछे गए प्रश्नों के उत्तर दीजिए-

अक्सर हम घर को सजाने के लिए दीवारों पर सुंदर पेंटिंग्स या तस्वीरें लगा देते हैं, लेकिन क्या आप जानते हैं कि वे केवल सजावट की वस्तु नहीं हैं? वास्तु शास्त्र के अनुसार, हर तस्वीर एक विशिष्ट ऊर्जा पैदा करती है, जो आपके मानसिक स्वास्थ्य, रिश्तों और आर्थिक स्थिति पर गहरा असर डालती है। एक घर सिर्फ ईंट, पेंट और फर्नीचर से नहीं बनता। यह एक जीवंत स्थान है जो हमारी भावनाओं, यादों और प्राण-ऊर्जा से जुड़ा होता है। इस ऊर्जा को सबसे खामोश, लेकिन सबसे प्रभावशाली तरीके से प्रभावित करती हैं-हमारी दीवारों पर लगी तस्वीरें और पेंटिंग्स। अक्सर हम सजावट अनजाने में करते हैं। किसी गैलरी से पसंद आई पेंटिंग ले आए, सीढ़ियों के बगल वाली दीवार को एस्थेटिक लुक देने के लिए परिवार दोस्तों के साथ बिताए खुशनुमा पलों का कोलाज बना दिया या पूर्वजों की तस्वीरों को सहेज दिया। ये फ्रेम घर के खालीपन को तो भर देते हैं, लेकिन क्या आपने कभी सोचा है कि ये तस्वीरें आपके घर की ऊर्जा और आपके आसपास परिवेश को सकारात्मक या नकारात्मक बनाने की भी भूमिका निभाते हैं। यही कारण है कि घर में लगने वाली तस्वीरों का चुनाव खूब सोच-समझकर करने की सलाह दी जाती है।

SubQuestion No : 18

Q.18 तस्वीरों से निकलनेवाली ऊर्जा का प्रभाव किस पर नहीं पड़ता है?

Comprehension:

दिए गए गद्यांश को पढ़कर पूछे गए प्रश्नों के उत्तर दीजिए-

अक्सर हम घर को सजाने के लिए दीवारों पर सुंदर पेंटिंग्स या तस्वीरें लगा देते हैं, लेकिन क्या आप जानते हैं कि वे केवल सजावट की वस्तु नहीं हैं? वास्तु शास्त्र के अनुसार, हर तस्वीर एक विशिष्ट ऊर्जा पैदा करती है, जो आपके मानसिक स्वास्थ्य, रिश्तों और आर्थिक स्थिति पर गहरा असर डालती है। एक घर सिर्फ ईंट, पेंट और फर्नीचर से नहीं बनता। यह एक जीवंत स्थान है जो हमारी भावनाओं, यादों और प्राण-ऊर्जा से जुड़ा होता है। इस ऊर्जा को सबसे खामोश, लेकिन सबसे प्रभावशाली तरीके से प्रभावित करती हैं-हमारी दीवारों पर लगी तस्वीरें और पेंटिंग्स। अक्सर हम सजावट अनजाने में करते हैं। किसी गैलरी से पसंद आई पेंटिंग ले आए, सीढ़ियों के बगल वाली दीवार को एस्थेटिक लुक देने के लिए परिवार दोस्तों के साथ बिताए खुशनुमा पलों का कोलाज बना दिया या पूर्वजों की तस्वीरों को सहेज दिया। ये फ्रेम घर के खालीपन को तो भर देते हैं, लेकिन क्या आपने कभी सोचा है कि ये तस्वीरें आपके घर की ऊर्जा और आपके आसपास परिवेश को सकारात्मक या नकारात्मक बनाने की भी भूमिका निभाते हैं। यही कारण है कि घर में लगने वाली तस्वीरों का चुनाव खूब सोच-समझकर करने की सलाह दी जाती है।

SubQuestion No : 19

Q.19 घर किस चीज से नहीं जुड़ा होता है?

Comprehension:

दिए गए गद्यांश को पढ़कर पूछे गए प्रश्नों के उत्तर दीजिए-

अक्सर हम घर को सजाने के लिए दीवारों पर सुंदर पेंटिंग्स या तस्वीरें लगा देते हैं, लेकिन क्या आप जानते हैं कि वे केवल सजावट की वस्तु नहीं हैं? वास्तु शास्त्र के अनुसार, हर तस्वीर एक विशिष्ट ऊर्जा पैदा करती है, जो आपके मानसिक स्वास्थ्य, रिश्तों और आर्थिक स्थिति पर गहरा असर डालती है। एक घर सिर्फ ईंट, पेंट और फर्नीचर से नहीं बनता। यह एक जीवंत स्थान है जो हमारी भावनाओं, यादों और प्राण-ऊर्जा से जुड़ा होता है। इस ऊर्जा को सबसे खामोश, लेकिन सबसे प्रभावशाली तरीके से प्रभावित करती हैं-हमारी दीवारों पर लगी तस्वीरें और पेंटिंग्स। अक्सर हम सजावट अनजाने में करते हैं। किसी गैलरी से पसंद आई पेंटिंग ले आए, सीढ़ियों के बगल वाली दीवार को एस्थेटिक लुक देने के लिए परिवार दोस्तों के साथ बिताए खुशनुमा पलों का कोलाज बना दिया या पूर्वजों की तस्वीरों को सहेज दिया। ये फ्रेम घर के खालीपन को तो भर देते हैं, लेकिन क्या आपने कभी सोचा है कि ये तस्वीरें आपके घर की ऊर्जा और आपके आसपास परिवेश को सकारात्मक या नकारात्मक बनाने की भी भूमिका निभाते हैं। यही कारण है कि घर में लगने वाली तस्वीरों का चुनाव खूब सोच-समझकर करने की सलाह दी जाती है।

SubQuestion No : 20

Q.20 गद्यांश में प्रयुक्त 'खामोश' शब्द का पर्याय क्या होता है?

Section : Test of Hindi Language and Comprehension1

Q.1 'परलोक' का विलोम शब्द होगा -

- Ans
- 1. लोकांतर
 - 2. स्वर्गलोक
 - 3. इहलोक
 - 4. अमृतलोक

Q.2 'बेइज्जत करना' किस मुहावरे का अर्थ है?

- Ans
- 1. पट्टी बैठना
 - 2. पंख न मारना
 - 3. पर न मारना
 - 4. पगड़ी उतारना

Q.3 निम्नलिखित मुहावरे का अर्थ बताएं -
'बाएं हाथ का खेल'

- Ans
- 1. बिगाड़ देना
 - 2. स्वावलंबी होना
 - 3. आदर न करना
 - 4. अति सरल काम

Q.4 'म्याऊँ के ठोर को कौन पकड़े' लोकोक्ति का सही अर्थ क्या होगा?

- Ans
- 1. कठिन काम में कोई हाथ नहीं बँटाता
 - 2. मान-सम्मान से ही जीवन का आनंद है
 - 3. झूठी बड़ाई
 - 4. पागल भी साधारण लोगों में होते हैं

Q.5 निम्न में से तत्सम शब्द पहचानें--

- Ans 1. अठारह
 2. अनार्य
 3. अनूठा
 4. अदरक

Q.6 निम्नलिखित विकल्पों में से स्तुति का विलोम शब्द पहचानें।

- Ans 1. धर्म
 2. अपुष्ट
 3. निंदा
 4. निवृत्ति

Q.7 'आविर्भाव' का विलोम शब्द होगा -

- Ans 1. अनुभाव
 2. प्रादुर्भाव
 3. तिरोभाव
 4. उद्भव

Q.8 दिए गए वाक्य के किस भाग में त्रुटि है?
संगठन ने रक्तदान शिविर में भाग लेने का आवाहन किया है।

- Ans 1. रक्तदान
 2. शिविर
 3. आवाहन
 4. संगठन

Q.9 निम्न शब्द का तद्भव चुनिए।
दुग्ध

- Ans 1. कूप
 2. भ्रमर
 3. ओष्ठ
 4. दूध

Q.10 'कामदेव' का पर्यायवाची क्या है?

- Ans 1. मन्मथ
 2. आयुष्मान
 3. कर्कश
 4. भक्ष्य

Q.11 निम्नलिखित विकल्पों में से शुद्ध वर्तनी वाले वाक्य का चयन करें -

- Ans 1. दुर्घटना इसी जगह हुई थी।
 2. दूर्घटना इसी जगह हुई थी।
 3. दुर्घटना इसी जगह हुई थी।
 4. दुर्घटना ईसी जगह हुई थी।

Q.12 निम्नलिखित में से 'दंड' का अनेकार्थी शब्द कौन सा है?

- Ans 1. सजा
 2. फिराक
 3. नजर
 4. किस्मत

Q.13 नीचे दिए वाक्य में किसी एक शब्द की वर्तनी अशुद्ध है। दिए गए विकल्पों में से शुद्ध वर्तनी वाला वाक्य चुनें-
मंत्रालय ने समाचार की पुष्टि की।

- Ans
- 1. मंत्रालय ने समाचार कि पुष्टि की।
 - 2. मंत्रालाय ने समाचार की पुष्टि की।
 - 3. मंत्रालय ने समाचार की पुष्टि कि।
 - 4. मंत्रालय ने समाचार की पुष्टि की।

Q.14 निम्नलिखित में से कौन-सा विकल्प अनेकार्थक शब्द 'उच्च' का अर्थ नहीं है?

- Ans
- 1. उठा हुआ
 - 2. श्रेष्ठ
 - 3. भ्रम
 - 4. बड़ा

Q.15 नीचे दिए गए वाक्य के किस भाग में वर्तनी संबंधी अशुद्धि है ?
होली फाल्गुण मास में मनाई जाती है ।

- Ans
- 1. होली
 - 2. मास में
 - 3. फाल्गुण
 - 4. मनाई जाती है

Comprehension:

दिए गए गद्यांश को पढ़कर पूछे गए प्रश्नों के उत्तर दीजिए-

पवित्र काशी में महाशिवरात्रि का पर्व एक साधारण धार्मिक उत्सव न होकर आध्यात्मिक महापर्व बन जाता है। फाल्गुन कृष्ण चतुर्दशी की यह रात्रि शिव और शक्ति के दिव्य मिलन की रात्रि मानी जाती है। यह वह रात्रि है जब साधक जागरण कर अपने भीतर के अज्ञान अंधकार को दूर करता है और चेतना को ऊर्ध्वगामी बनाता है। काशी की महाशिवरात्रि का दृश्य अद्वितीय होता है। विश्वनाथ धाम में रात्रि-भर जल, दूध, बेलपत्र और भस्म से अभिषेक होता है। रुद्राभिषेक, महामृत्युंजय जप, शिवपुराण पाठ और अखंड कीर्तन से पूरा वातावरण गुंजायमान हो उठता है। साधु, संत, गृहस्थ, विद्यार्थी और वृद्ध सभी हर-हर महादेव के उद्घोष में लीन दिखाई देते हैं। काशी में महाशिवरात्रि केवल एक दिन का पर्व नहीं, बल्कि एक अनुभूति है, जिसमें बाहरी और आंतरिक दोनों यात्राएं साथ-साथ चलती हैं। महाशिवरात्रि का संदेश अत्यंत गहरा है। शिव हमें सिखाते हैं कि विष को कंठ में धारण कर भी लोककल्याण किया जा सकता है, कि अहंकार का त्याग ही सच्ची साधना है और कि संतुलन ही जीवन का सार है। काशी की महाशिवरात्रि हमें स्मरण कराती है कि शिव केवल मंदिरों में नहीं, बल्कि प्रत्येक प्राणी के अंतःकरण में निवास करते हैं।

SubQuestion No : 16

Q.16 दिए गए गद्यांश के लिए उपयुक्त शीर्षक चुनें-

Comprehension:

दिए गए गद्यांश को पढ़कर पूछे गए प्रश्नों के उत्तर दीजिए-

पवित्र काशी में महाशिवरात्रि का पर्व एक साधारण धार्मिक उत्सव न होकर आध्यात्मिक महापर्व बन जाता है। फाल्गुन कृष्ण चतुर्दशी की यह रात्रि शिव और शक्ति के दिव्य मिलन की रात्रि मानी जाती है। यह वह रात्रि है जब साधक जागरण कर अपने भीतर के अज्ञान अंधकार को दूर करता है और चेतना को ऊर्ध्वगामी बनाता है। काशी की महाशिवरात्रि का दृश्य अद्वितीय होता है। विश्वनाथ धाम में रात्रि-भर जल, दूध, बेलपत्र और भस्म से अभिषेक होता है। रुद्राभिषेक, महामृत्युंजय जप, शिवपुराण पाठ और अखंड कीर्तन से पूरा वातावरण गुंजायमान हो उठता है। साधु, संत, गृहस्थ, विद्यार्थी और वृद्ध सभी हर-हर महादेव के उद्घोष में लीन दिखाई देते हैं। काशी में महाशिवरात्रि केवल एक दिन का पर्व नहीं, बल्कि एक अनुभूति है, जिसमें बाहरी और आंतरिक दोनों यात्राएं साथ-साथ चलती हैं। महाशिवरात्रि का संदेश अत्यंत गहरा है। शिव हमें सिखाते हैं कि विष को कंठ में धारण कर भी लोककल्याण किया जा सकता है, कि अहंकार का त्याग ही सच्ची साधना है और कि संतुलन ही जीवन का सार है। काशी की महाशिवरात्रि हमें स्मरण कराती है कि शिव केवल मंदिरों में नहीं, बल्कि प्रत्येक प्राणी के अंतःकरण में निवास करते हैं।

SubQuestion No : 17

Q.17 दिए गए गद्यांश की संरचना किस प्रकार की है?

Comprehension:

दिए गए गद्यांश को पढ़कर पूछे गए प्रश्नों के उत्तर दीजिए-

पवित्र काशी में महाशिवरात्रि का पर्व एक साधारण धार्मिक उत्सव न होकर आध्यात्मिक महापर्व बन जाता है। फाल्गुन कृष्ण चतुर्दशी की यह रात्रि शिव और शक्ति के दिव्य मिलन की रात्रि मानी जाती है। यह वह रात्रि है जब साधक जागरण कर अपने भीतर के अज्ञान अंधकार को दूर करता है और चेतना को ऊर्ध्वगामी बनाता है। काशी की महाशिवरात्रि का दृश्य अद्वितीय होता है। विश्वनाथ धाम में रात्रि-भर जल, दूध, बेलपत्र और भस्म से अभिषेक होता है। रुद्राभिषेक, महामृत्युंजय जप, शिवपुराण पाठ और अखंड कीर्तन से पूरा वातावरण गुंजायमान हो उठता है। साधु, संत, गृहस्थ, विद्यार्थी और वृद्ध सभी हर-हर महादेव के उद्घोष में लीन दिखाई देते हैं। काशी में महाशिवरात्रि केवल एक दिन का पर्व नहीं, बल्कि एक अनुभूति है, जिसमें बाहरी और आंतरिक दोनों यात्राएं साथ-साथ चलती हैं। महाशिवरात्रि का संदेश अत्यंत गहरा है। शिव हमें सिखाते हैं कि विष को कंठ में धारण कर भी लोककल्याण किया जा सकता है, कि अहंकार का त्याग ही सच्ची साधना है और कि संतुलन ही जीवन का सार है। काशी की महाशिवरात्रि हमें स्मरण कराती है कि शिव केवल मंदिरों में नहीं, बल्कि प्रत्येक प्राणी के अंतःकरण में निवास करते हैं।

SubQuestion No : 18

Q.18 गद्यांश के अनुसार वातावरण के गुंजायमान होने का कारण क्या नहीं है?

Comprehension:

दिएं गए गद्यांश को पढ़कर पूछे गए प्रश्नों के उत्तर दीजिए-

पवित्र काशी में महाशिवरात्रि का पर्व एक साधारण धार्मिक उत्सव न होकर आध्यात्मिक महापर्व बन जाता है। फाल्गुन कृष्ण चतुर्दशी की यह रात्रि शिव और शक्ति के दिव्य मिलन की रात्रि मानी जाती है। यह वह रात्रि है जब साधक जागरण कर अपने भीतर के अज्ञान अंधकार को दूर करता है और चेतना को ऊर्ध्वगामी बनाता है। काशी की महाशिवरात्रि का दृश्य अद्वितीय होता है। विश्वनाथ धाम में रात्रि-भर जल, दूध, बेलपत्र और भस्म से अभिषेक होता है। रुद्राभिषेक, महामृत्युंजय जप, शिवपुराण पाठ और अखंड कीर्तन से पूरा वातावरण गुंजायमान हो उठता है। साधु, संत, गृहस्थ, विद्यार्थी और वृद्ध सभी हर-हर महादेव के उद्घोष में लीन दिखाई देते हैं। काशी में महाशिवरात्रि केवल एक दिन का पर्व नहीं, बल्कि एक अनुभूति है, जिसमें बाहरी और आंतरिक दोनों यात्राएं साथ-साथ चलती हैं। महाशिवरात्रि का संदेश अत्यंत गहरा है। शिव हमें सिखाते हैं कि विष को कंठ में धारण कर भी लोककल्याण किया जा सकता है, कि अहंकार का त्याग ही सच्ची साधना है और कि संतुलन ही जीवन का सार है। काशी की महाशिवरात्रि हमें स्मरण कराती है कि शिव केवल मंदिरों में नहीं, बल्कि प्रत्येक प्राणी के अंतःकरण में निवास करते हैं।

SubQuestion No : 19

Q.19 शिव हमें क्या नहीं सिखाते हैं?

Comprehension:

दिएं गए गद्यांश को पढ़कर पूछे गए प्रश्नों के उत्तर दीजिए-

पवित्र काशी में महाशिवरात्रि का पर्व एक साधारण धार्मिक उत्सव न होकर आध्यात्मिक महापर्व बन जाता है। फाल्गुन कृष्ण चतुर्दशी की यह रात्रि शिव और शक्ति के दिव्य मिलन की रात्रि मानी जाती है। यह वह रात्रि है जब साधक जागरण कर अपने भीतर के अज्ञान अंधकार को दूर करता है और चेतना को ऊर्ध्वगामी बनाता है। काशी की महाशिवरात्रि का दृश्य अद्वितीय होता है। विश्वनाथ धाम में रात्रि-भर जल, दूध, बेलपत्र और भस्म से अभिषेक होता है। रुद्राभिषेक, महामृत्युंजय जप, शिवपुराण पाठ और अखंड कीर्तन से पूरा वातावरण गुंजायमान हो उठता है। साधु, संत, गृहस्थ, विद्यार्थी और वृद्ध सभी हर-हर महादेव के उद्घोष में लीन दिखाई देते हैं। काशी में महाशिवरात्रि केवल एक दिन का पर्व नहीं, बल्कि एक अनुभूति है, जिसमें बाहरी और आंतरिक दोनों यात्राएं साथ-साथ चलती हैं। महाशिवरात्रि का संदेश अत्यंत गहरा है। शिव हमें सिखाते हैं कि विष को कंठ में धारण कर भी लोककल्याण किया जा सकता है, कि अहंकार का त्याग ही सच्ची साधना है और कि संतुलन ही जीवन का सार है। काशी की महाशिवरात्रि हमें स्मरण कराती है कि शिव केवल मंदिरों में नहीं, बल्कि प्रत्येक प्राणी के अंतःकरण में निवास करते हैं।

SubQuestion No : 20

Q.20 विष का पान कर कंठ में धारण करने वाले को क्या कहा जाता है?