



GOVT. OF NCT OF DELHI  
Delhi Subordinate Services Selection Board  
FC-18, Institutional Area, Karkardooma, Delhi – 110092.  
[www.dsssb.delhigovt.nic.in](http://www.dsssb.delhigovt.nic.in)

Participant Name	Nishant Ranjan
Test Center Name	Aadarsh Pariksha Kendra CENTER C - Gate No 2 - Noida Sector 64
Test Date	27/03/2026
Test Time	9:00 AM - 11:00 AM
Subject	Multi Tasking Staff

Section : General intelligence and Reasoning Ability

**Q.1** A statement is given followed by two conclusions. Find out which conclusion(s) is/are true based on the given statement.

**Statement:**  $S < D < L < B > Q$

**Conclusions:**

I.  $Q > D$

II.  $S < B$

- Ans**
- 1. Neither I nor II is true
  - 2. Both I and II are true
  - 3. Only II is true
  - 4. Only I is true

**Q.2** Refer to the following series and answer the question.  
(Left)

**M S A T R C L S S A W O R K I N G E N V I R O M E N T A L**  
**S T U** (Right)

How many letters are there in the English alphabetical order between the letter which is seventh from the right end and eighth from the left end of the series?  
15760

- Ans**
- 1. SIX
  - 2. THREE
  - 3. FIVE
  - 4. FOUR

**Q.3** Each letter in the word CONJURE is changed to the letter immediately following it in the English alphabetical order and then all the letters thus formed are arranged in alphabetical order. Which of the following letters will be fourth from the right in the new group of letters thus formed? 11073

- Ans**
- 1. K
  - 2. O
  - 3. P
  - 4. F

Q.4 Refer to the following series and answer the question

(Left) **Y U O Y E K Y A K R F D G H Y G T R D E S W D E F T F**  
**G D F G** (Right)

How many letters are there in the English alphabetical order between the letter which is eighth from the right end and the letter which is third from the left end of the series?15755

- Ans
- 1. SIX
  - 2. EIGHT
  - 3. NINE
  - 4. TEN

Q.5 L, M, N, R, S and T live on six different floors of the same building. The lowermost floor in the building is numbered 1, the floor above it is numbered 2 and so on, till the topmost floor is numbered 6. No one lives below N. Only two people live between M and N. Only T lives between M and R. L lives immediately below M. How many people live between S and R?

- Ans
- 1. Two
  - 2. One
  - 3. Four
  - 4. Three

Q.6 Read the given statements and conclusions carefully. Assuming that the information given in the statements is true, even if it appears to be at variance with commonly known facts, decide which of the given conclusion(s) logically follow(s) from the statements.

**Statements:**

Some Sparrows are Storks.  
Some Storks are Pigeons.

**Conclusions:**

I) Some Sparrows are Pigeons.  
II) No Sparrows are Pigeons.

- Ans
- 1. Neither conclusion (I) nor (II) follows.
  - 2. Both conclusions (I) and (II) follow.
  - 3. Only conclusion (II) follows.
  - 4. Only conclusion (I) follows.

Q.7 Suyash ranked 5th from the top and 16th from the bottom in his class. How many students are there in the class?

- Ans
- 1. 21
  - 2. 22
  - 3. 20
  - 4. 19

Q.8 In this question, a statement is followed by two conclusions. Find out which conclusion is true based on the given statement.

Statement :  $Y > R > T < S = W$

**Conclusions:**

I.  $Y < S$   
II.  $W > T$

- Ans
- 1. Neither I nor II is true
  - 2. Only I is true
  - 3. Both I and II are true
  - 4. Only II is true

Q.9 Seven people, E, F, G, S, T, U and V are sitting in a row, facing north. Only two people sit between S and E. Only U sits to the right of G. Only one person sits between E and G. V sits at some place to the right of F but at some place to the left of T. How many people sit between T and F?

- Ans
- 1. One
  - 2. Three
  - 3. Two
  - 4. Four

Q.10 A is the wife of Z. V is the husband of M. Z is the father of M. How is A related to V?

- Ans
- 1. Mother
  - 2. Wife's mother
  - 3. Wife
  - 4. Brother's wife

Q.11 In a certain code language, 'LATH' is coded as '8106' and 'HAST' is coded as '0986'. What is the code for 'S' in the given code language?732

- Ans
- 1. 6
  - 2. 0
  - 3. 9
  - 4. 8

Q.12 Seven boxes A, B, C, D, F, G and H are kept one over the other but not necessarily in the same order. Only F is kept above A. Only two boxes are kept between A and G. Only B is kept below C. D is not kept immediately above G. Which box is kept second above H?

- Ans
- 1. D
  - 2. F
  - 3. G
  - 4. A

Q.13 Refer to the following series and answer the question.  
(Left)

**S H I N H C N A H I N S P Y A R A W I C K E D P E R A D I  
S E Q** (Right)

How many letters are there in the English alphabetical order between the letter which is tenth from the left end and seventh from the right end of the series?15758

- Ans
- 1. FIVE
  - 2. SIX
  - 3. SEVEN
  - 4. EIGHT

Q.14 Seven people, E, F, G, S, T, U and V, are sitting in a row, facing north. Only two people sit to the right of F. Only two people sit between F and U. Only two people sit between S and V. V sits to the immediate left of F. T sits to the immediate right of G. Who sits at the third position from the left end of the line?

- Ans
- 1. S
  - 2. E
  - 3. U
  - 4. G

Q.15 In a certain code language, 'BLOW' is coded as '2491' and 'BLEW' is coded as '4926'. What is the code for 'E' in the given code language?

- Ans
- 1. 4
  - 2. 1
  - 3. 2
  - 4. 6

Q.16 Seven boxes W, X, Y, Z, G, H and I are kept one over the other but not necessarily in the same order. Only three boxes are kept between Y and X. Only three boxes are kept above I. Only one box is kept between Y and I. X is kept at some place above I. G is kept immediately below X. W is kept at one of the places above H. Z is not kept immediately above or below Y. Which box is kept at the lowermost position?

- Ans
- 1. G
  - 2. Y
  - 3. H
  - 4. X

Q.17 Refer to the following number, symbol series and answer the question. Counting to be done from left to right only. (all numbers are single digit numbers only)  
(Left)  $7 + 8 \geq 6 \Omega 9 \# 2 5 7 @ 8 \% 4 \# \div 8 \$ 4 ? 9 \% 2 5 \% 5 4 \in 1 \& 8$  (Right)  
How many such symbols are there each of which are immediately preceded by a number and also immediately followed by a perfect square? 10228

- Ans
- 1. Four
  - 2. Five
  - 3. Two
  - 4. Three

Q.18 In this question, a question is followed by two statements numbered (I) and (II). You have to decide whether the data provided in the statements are sufficient to answer the question. Read both the statements and decide the appropriate answer.

**Question:**

L, M, N, O, and P have different ages. Who is the second youngest?

**Statements:**

(I) N is older than L and M but younger than O.

(II) P is older than M but younger than N.

- Ans
- 1. Data in Statement II alone is sufficient to answer the question while data in statement I is not
  - 2. Both statements I and II together (and not statement I alone or statement II alone) are sufficient to answer the question.
  - 3. Both statements I and II together are NOT sufficient to answer the question
  - 4. Data in Statement I alone is sufficient to answer the question while data in statement II is not

Q.19 In a certain code language, 'EARS' is coded as '9517' and 'RIFT' is coded as '3458'. What is the code for 'R' in the given code language?531

- Ans
- 1. 8
  - 2. 3
  - 3. 1
  - 4. 5

Q.20 Refer to the following letter series and answer the question that follows.

Left) L S D F N M J U T G F V H J U R F D C B H N M K E D C V B L P (Right)

How many letters are there in the letter string between the letter which is sixth from the right end and the letter which is sixth from left end of the series?11314

- Ans
- 1. 21
  - 2. 20
  - 3. 19
  - 4. 17

Section : General intelligence and Reasoning Ability1

Q.1 Select the set in which the numbers are related in the same way as are the numbers of the following sets.

(NOTE : Operations should be performed on the whole numbers, without breaking down the numbers into its constituent digits. E.g. 13 - Operations on 13 such as adding /deleting /multiplying etc. to 13 can be performed. Breaking down 13 into 1 and 3 and then performing mathematical operations on 1 and 3 is not allowed)  
(77,73,50)  
(218,37,85)

- Ans
- 1. (70,114,28)
  - 2. (161,88,33)
  - 3. (119,31,50)
  - 4. (151,15,52)

Q.2 Select the set in which the numbers are related in the same way as are the numbers of the following sets.

(NOTE : Operations should be performed on the whole numbers, without breaking down the numbers into its constituent digits. E.g. 13 - Operations on 13 such as adding /deleting /multiplying etc. to 13 can be performed. Breaking down 13 into 1 and 3 and then performing mathematical operations on 1 and 3 is not allowed)  
(85,165,76)  
(20,64,40)

- Ans
- 1. (78,120,38)
  - 2. (53,88,91)
  - 3. (70,157,33)
  - 4. (76,119,89)

Q.3 What should come in place of '?' in the given series?

29 58 87 116 145 ?

- Ans
- 1. 173
  - 2. 176
  - 3. 175
  - 4. 174

Q.4 If 'A' stands for '+', 'B' stands for 'x', 'C' stands for '+' and 'D' stands for '-', what will come in place of the question mark '?' in the following equation?

15 B 3 C (34 A 2) B 4 D 38 C 21 A 3 B 6 D 22 =?4732

- Ans
- 1. 140
  - 2. 110
  - 3. 95
  - 4. 75

Q.5 What should come in place of the '?' in the given series?

60, 66, 72, 78, 84, ?, 96

- Ans
- 1. 90
  - 2. 88
  - 3. 92
  - 4. 93

Q.6 Select the set in which the numbers are related in the same way as are the numbers of the following sets.

(NOTE : Operations should be performed on the whole numbers, without breaking down the numbers into its constituent digits. E.g. 13 - Operations on 13 such as adding /deleting /multiplying etc. to 13 can be performed. Breaking down 13 into 1 and 3 and then performing mathematical operations on 1 and 3 is not allowed)

(73,50,77)

(37,85,218)

- Ans
- 1. (14,28,70)
  - 2. (88,83,98)
  - 3. (5,52,59)
  - 4. (31,50,79)

Q.7 If 'A' stands for '-', 'B' stands for '+', 'C' stands for '×', and 'D' stands for '÷', what will come in place of the question mark '?' in the following equation?

36 D 6 C 5 A 4 B 8 = ?

- Ans
- 1. 38
  - 2. 34
  - 3. 32
  - 4. 35

Q.8 Based on the English alphabetical order, three of the following four letter cluster pairs are alike in a certain way and thus form a group. Which is the one that does not belong to that group?

(Note: The odd one out is not based on the number of consonants/vowels or their position in the letter cluster)9863

- Ans
- 1. EF - GH
  - 2. AB - CA
  - 3. IJ - KL
  - 4. MN - OP

Q.9 RILE is related to UMOI in a certain way based on the English alphabetical order. In the same way, VAMJ is related to YEPN. To which of the following is WEOT related, following the same logic?3586

- Ans
- 1. YHSW
  - 2. ZIRX
  - 3. AFSY
  - 4. XGTZ

Q.10 Select the pair which follows the same pattern as that followed by the two set of pairs given below. Both pairs follow the same pattern.

TVS : VXU

HJG : JLI

Ans  1. ZAW : ACZ

2. SUR : UWT

3. ZBY : ADZ

4. ZAW : BDA

Q.11 If + means  $\times$ ,  $\times$  means  $\div$ ,  $\div$  means  $+$ , then what will come in place of the question mark (?) in the following equation?

$$9 - 48 \times 8 \div 12 + 15 = ?$$

Ans  1. 49

2. 51

3. 53

4. 54

Q.12 Based on the English alphabetical order, three of the following four letter cluster pairs are alike in a certain way and thus form a group. Which is the one that does not belong to that group?

(Note: The odd one out is not based on the number of consonants/vowels or their position in the letter cluster)

Ans  1. QV - TY

2. OT - RW

3. RW - UZ

4. YN - BL

Q.13 What should come in place of the question mark (?) in the given series?

95 101 89 107 ? 113

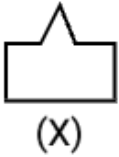
Ans  1. 80

2. 87

3. 82

4. 83

Q.14 Select the option figure in which the given figure (X) is embedded as its part (rotation is not allowed).

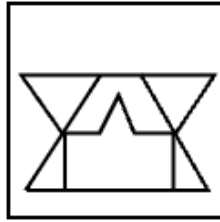


Ans

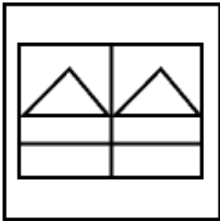
1.



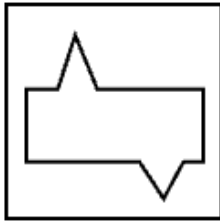
2.



3.



4.



Q.15 What will come in the place of '?' in the following equation, if '+' and '-' are interchanged and 'x' and '÷' are interchanged?

$$5 \div 7 + 21 \times 3 - 7 = ?$$

Ans  1. 31

2. 33

3. 35

4. 37

Q.16 If 'K' stands for '+', 'L' stands for 'x', 'M' stands for '÷', and 'N' stands for '-', what will come in place of the question mark '?' in the following equation?

$$9L2N6M3K10 = ?$$

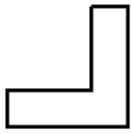
Ans  1. 18

2. 22

3. 26

4. 16

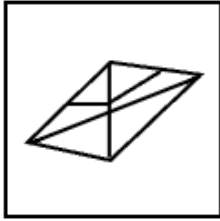
Q.17 Select the option figure in which the given figure (X) is embedded as its part (rotation is not allowed).



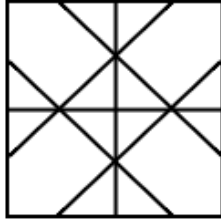
(X)

Ans

✗ 1.



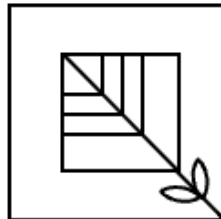
✗ 2.



✗ 3.



✓ 4.



Q.18 Select the pair which follows the same pattern as that followed by the two set of pairs given below. Both pairs follow the same pattern.

NKM : QNP

BYA : EBD

Ans

✓ 1. X UW : AXZ

✗ 2. XTU : AXZ

✗ 3. XTU : ZWY

✗ 4. XUW : ZXY

Q.19 Based on the English alphabetical order, three of the following four letter cluster pairs are alike in a certain way and thus form a group. Which is the one that does not belong to that group?

(Note: The odd one out is not based on the number of consonants/vowels or their position in the letter cluster)

Ans

✗ 1. NR-JF

✓ 2. GK - DY

✗ 3. MQ-IE

✗ 4. YC - UQ

**Q.20** Read the given statements and conclusions carefully. Assuming that the information given in the statements is true, even if it appears to be at variance with commonly known facts, decide which of the given conclusion(s) logically follow(s) from the statements.

**Statements:**

All Crocodiles are Lions.

No Lions are Leopards.

**Conclusions:**

**I) No Leopards are Crocodiles.**

**II) Some Leopards are Crocodiles.**

- Ans**
- 1. Only conclusion (II) follows.
  - 2. Only conclusion (I) follows.
  - 3. Both conclusions (I) and (II) follow.
  - 4. Neither conclusion (I) nor (II) follows.

Section : **General Awareness**

**Q.1** Who was the sole nominee recommended for the Major Dhyan Chand Khel Ratna Award in December 2025?

- Ans**
- 1. Hardik Singh
  - 2. D Gukesh
  - 3. Manu Bhaker
  - 4. Tejaswin Shankar

**Q.2** Who among the following formed the Forward Bloc after resigning from the presidency of the Indian National Congress?

- Ans**
- 1. Subhas Chandra Bose
  - 2. Madan Mohan Malviya
  - 3. Chittaranjan Das
  - 4. MK Gandhi

**Q.3** Under the Employment-Linked Incentive (ELI) scheme approved in July 2025, employers can receive up to \_\_\_ per additional employee, per month for two years.

- Ans**
- 1. ₹1,000
  - 2. ₹3,000
  - 3. ₹2,000
  - 4. ₹5,000

**Q.4** What is the significance of subtracting depreciation from GDP when calculating National Income?

- Ans**
- 1. It accounts for the wear and tear on capital goods
  - 2. It increases government revenue
  - 3. It measures the net increase in a country's savings
  - 4. It adjusts GDP for inflation

**Q.5** Who among the following was one of those early pioneers who recognized the critical role of education in the empowerment of the poor and backward Muslim community?

- Ans**
- 1. Muhammad Ali Jinnah
  - 2. Shaukat Ali
  - 3. Ashfaquallah Khan
  - 4. Syed Ahmed Khan

**Q.6** Who was the general of Nana Saheb who continued to fight a guerrilla war in the jungles of central India until his capture in 1859?

- Ans**
- 1. Kunwar Singh
  - 2. Tantia Tope
  - 3. Birjis Qadar
  - 4. Bakht Khan

**Q.7** Which of the following temples is an example of the Panchayatana style of architecture?

- Ans**
- 1. Dashavatara
  - 2. Somnath
  - 3. Sibsagar
  - 4. Laxmana

**Q.8** By which year does India aim to land an Indian astronaut on the Moon?

- Ans**
- 1. 2030
  - 2. 2035
  - 3. 2040
  - 4. 2045

**Q.9** Which of the following initiatives was announced by the Prime Minister on 15th August 2025, to develop an indigenous aerial defence system by 2035?

- Ans**
- 1. Mission Sudarshan Chakra
  - 2. Project Kusha
  - 3. Mission Ghatak
  - 4. Mission Divyastra

**Q.10** Who won the silver medal in Women's 10 m Air Pistol SH1 in Para Shooting World Cup at Changwon, Korea, in May-June 2025?

- Ans**
- 1. Avani Lekhara
  - 2. Deepak Saini
  - 3. Mona Agarwal
  - 4. Sumedha Pathak

**Q.11** The scheme "Mission Shakti" in Budget 2025-26 received how much funding for women empowerment initiatives?

- Ans**
- 1. ₹2,500 crore
  - 2. ₹3,150 crore
  - 3. ₹1,750 crore
  - 4. ₹4,000 crore

**Q.12** Which institution is responsible for supervising banks to ensure that they maintain the mandated minimum cash balance out of the deposits they receive?

- Ans**
- 1. Reserve Bank of India
  - 2. Securities and Exchange Board of India
  - 3. State Bank of India
  - 4. Ministry of Finance

Q.13 Which types of schools/institutions are included in the Pradhan Mantri Poshan Shakti Abhiyan (PM Poshan) scheme?

- Ans
- 1. Only vocational colleges
  - 2. Only private coaching centers
  - 3. Only private international schools
  - 4. Government and Government-aided schools

Q.14 Which athlete won both the 'Sportstar of the Year (Female)' and 'Sportswoman of the Year' awards at the 2025 Sportstar Aces Awards?

- Ans
- 1. Mirabai Chanu
  - 2. P.V. Sindhu
  - 3. Manu Bhaker
  - 4. Saina Nehwal

Q.15 In 2024, which of the following state legislative assembly elections was conducted in multiple phases?

- Ans
- 1. Odisha
  - 2. Haryana
  - 3. Maharashtra
  - 4. Arunachal Pradesh

Q.16 Match the following.

Socio-Religious Movement	Founders
A. Arya Samaj	1. Atmaram Pandurang
B. Prarthana Samaj	2. Swami Vivekananda
C. Ram Krishna Mission	3. Dayanand Saraswati
D. Brahmo Samaj	4. Raja Ram Mohan Roy

- Ans
- 1. A-4, B-2, C-3, D-1
  - 2. A-4, B-2, C-1, D-3
  - 3. A-3, B-1, C-2, D-4
  - 4. A-1, B-2, C-3, D-4

Q.17 The freedom fighter who designed the Indian National Tricolour and contributed to the design of the Indian national flag was \_\_\_\_\_.

- Ans
- 1. Mahatma Gandhi
  - 2. Lakshmi Sahgal
  - 3. Pingali Venkayya
  - 4. Subramaniam Bharati

Q.18 Ayushman Bharat was launched in 2018 to achieve the vision of Universal Health Coverage (UHC) in alignment with which national policy?

- Ans
- 1. National Health Policy 2017
  - 2. National Population Policy 2000
  - 3. National Education Policy 2020
  - 4. Ayushman Bharat PM-JAY, 2018

Q.19 Who is included in the 'labour force' of a country?

- Ans
- 1. Only government employees
  - 2. Only school-going children
  - 3. Only those who are employed
  - 4. People working or seeking work

**Q.20** A situation in which all available labour resources are utilised except for voluntary unemployment is termed:

- Ans**
- 1. Labour Force Participation
  - 2. Natural Rate of Employment
  - 3. Maximum Output Equilibrium
  - 4. Full Employment

Section : General Awareness1

**Q.1** What is the educational indicator that measures the proportion of total enrollment at a given level against the population of the official age group for that same level?

- Ans**
- 1. Gross Enrollment Ratio
  - 2. Gender Parity Index
  - 3. Student-Teacher Ratio
  - 4. Net Enrollment Ratio

**Q.2** Why do trees in thorn forests have long roots?

- Ans**
- 1. To trap insects for composting
  - 2. To anchor against strong wind
  - 3. To get moisture from deep soil
  - 4. To reach sunlight during the day

**Q.3** What is the basic unit of the Panchayati Raj system in India?

- Ans**
- 1. Municipality
  - 2. Zila Parishad
  - 3. Gram Sabha
  - 4. Gram Panchayat

**Q.4** Which group of plants is characterized by the presence of flowers and seeds enclosed within fruits?

- Ans**
- 1. Bryophytes
  - 2. Angiosperms
  - 3. Algae
  - 4. Gymnosperms

**Q.5** Which ancient Indian language was used extensively in the composition of Vedic hymns and is considered the foundation of many classical Indian texts?

- Ans**
- 1. Tamil
  - 2. Prakrit
  - 3. Pali
  - 4. Sanskrit

**Q.6** Which Schedule of the Indian Constitution outlines the powers, authority, and responsibilities of the Panchayati Raj?

- Ans**
- 1. Tenth Schedule
  - 2. Ninth Schedule
  - 3. Twelfth Schedule
  - 4. Eleventh Schedule



**Q.7 Which temple is often called the "Black Pagoda" due to its dark colour and design resembling a chariot?**

- Ans
- 1. Brihadeeswara Temple, Thanjavur
  - 2. Shore Temple, Mahabalipuram
  - 3. Sun Temple, Modhera
  - 4. Sun Temple, Konark

**Q.8 Which of the following is described as the swollen tip of an underground lateral branch of the stem that stores food as starch and bears "eyes," where each eye represents a node with a bud and scar of scale leaves?**

- Ans
- 1. Tuber
  - 2. Corm
  - 3. Bulb
  - 4. Rhizome

**Q.9 Which Hindu festival specifically commemorates the victory of Lord Rama over Ravana, symbolising the triumph of good over evil, and is traditionally observed by the public burning of large effigies of Ravana across various parts of India?**

- Ans
- 1. Holi
  - 2. Diwali
  - 3. Navratri
  - 4. Dussehra

**Q.10 Which language, spoken in West Bengal, is known for its rich literary tradition, including works by the famous poet Rabindranath Tagore?**

- Ans
- 1. Bengali, from the eastern region
  - 2. Punjabi, from the northwest
  - 3. Hindi, from the northern plains
  - 4. Urdu, from central India

**Q.11 Inclusive digital access to e-governance and welfare systems, including directions to make the digital Know Your Customer (KYC) process accessible for persons with disabilities, has been judicially recognised as an integral part of which Fundamental Right under the Constitution of India?**

- Ans
- 1. Article 21
  - 2. Article 19
  - 3. Article 20
  - 4. Article 14

**Q.12 Diarrhea in children can cause dehydration and requires rapid fluid replacement. As per the standard clinical recipe, oral rehydration solution (ORS) can be prepared at home by mixing clean water with which of the following?**

- Ans
- 1. A teaspoon of honey and a slice of lemon
  - 2. A pinch of baking soda and a drop of ginger juice
  - 3. A tablespoon of glucose and a cup of milk
  - 4. A pinch of salt and a teaspoon of sugar

**Q.13 With reference to Article 78 of the Constitution, which of the following duties is specifically assigned to the Prime Minister of India?**

- Ans
- 1. Approve all bills before assent
  - 2. Preside over joint sittings
  - 3. Inform the President of Cabinet decisions
  - 4. Issue ordinances independently

**Q.14** Which of following Indian states has its coastal plains along the Bay of Bengal?

- Ans**
- 1. Chhattisgarh
  - 2. Rajasthan
  - 3. Delhi
  - 4. Odisha

**Q.15** The Right to Property under the Indian Constitution is:

- Ans**
- 1. A Legal Right under Article 300A
  - 2. A Fundamental Right under Article 19
  - 3. A Constitutional Right under Article 21
  - 4. A Directive Principle of State Policy under Article 39

**Q.16** Which of the following states in India had the highest production in horticulture for the year 2023-2024?

- Ans**
- 1. Andhra Pradesh
  - 2. Uttar Pradesh
  - 3. Madhya Pradesh
  - 4. Maharashtra

**Q.17** Which among the following atomic power stations is located in Tamil Nadu?

- Ans**
- 1. Kudankulam
  - 2. Kakrapar
  - 3. Kaiga
  - 4. Tarapur

**Q.18** What is the entrance gateway of a Dravida temple called?

- Ans**
- 1. Mandapa
  - 2. Vimana
  - 3. Gopuram
  - 4. Shikhara

**Q.19** Absence of iodine in the diet mainly causes which health problem?

- Ans**
- 1. Goitre
  - 2. Rickets
  - 3. Beriberi
  - 4. Scurvy

**Q.20** Which of the following is a function of the human kidney?

- Ans**
- 1. Regulating water balance
  - 2. Pumping blood
  - 3. Transmitting impulses
  - 4. Digesting food

Section : **Arithmetical and Numerical Ability**

Q.1 Mahesh has ₹1,722. He divided this sum between his two sons, Vijay and Ajay, and asked them to invest their respective shares at 10% per annum, compounded annually. It was found that the amounts received by Vijay after 13 years and by Ajay after 14 years were equal. Find how much (in ₹) Mahesh gave to Vijay.

Ans  1. 902

2. 752

3. 920

4. 820

Q.2 Alloy A contains iron, copper and aluminum in the ratio 7:2:1 and alloy B contains same metals in the ratio 10:3:2. Equal weights of both the alloy are melted together to form a new alloy, C. The weight of aluminum in alloy C is:

Ans  1.  $\frac{7}{60}$

2.  $\frac{7}{30}$

3.  $\frac{1}{5}$

4.  $\frac{3}{25}$

Q.3 Deepti appeared for a competitive exam which consisted of 300 questions. During the first attempt, she could answer 60% of the questions correctly. She reappeared for the same exam after one year. This time, she answered 20 questions more correctly. What is the percentage increase in the number of questions answered correctly?

Ans  1.  $18\frac{1}{9}\%$

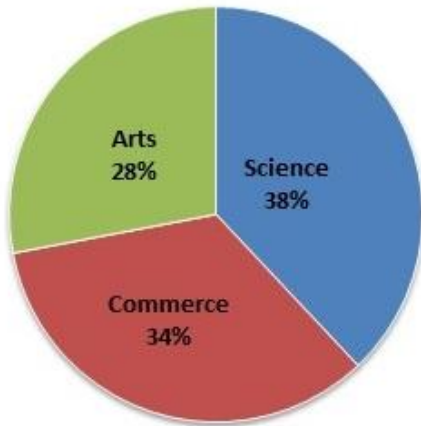
2.  $20\frac{1}{9}\%$

3.  $9\frac{1}{9}\%$

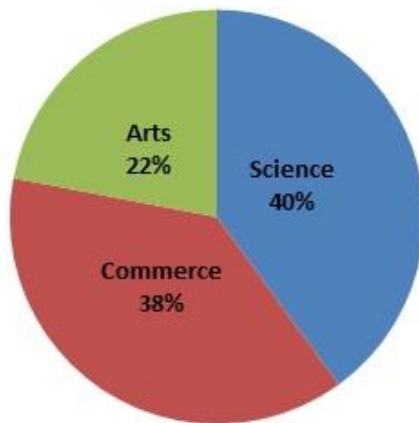
4.  $11\frac{1}{9}\%$

- Q.4 The given pie charts show the distribution of students across different streams in two colleges, P and Q. The total number of students in College P is 1,000, and in College Q is 1,400.

**School P**



**School Q**



Find the total number of students of Arts stream in College P and in College Q.

- Ans  1. 588  
 2. 485  
 3. 463  
 4. 526

- Q.5 Three typists complete 600 pages in 5 days. How many pages does one typist complete in one day?

- Ans  1. 30  
 2. 50  
 3. 40  
 4. 20

Q.6 R sells an item to S, making a profit of 10%. S then sells the same item to T, earning a profit (in ₹) that is double the profit made by R. If T buys the item for ₹260, then what was the cost price (in ₹) of the item for R?

- Ans
- 1. 210
  - 2. 180
  - 3. 220
  - 4. 200

Q.7 If the number  $81xy18$  is divisible by 99, then what is the value of  $x + y$  given that  $x$  and  $y$  are non-zero digits?

- Ans
- 1. 18
  - 2. 12
  - 3. 6
  - 4. 9

Q.8 The number 4205 is divisible by which of the following numbers?

- Ans
- 1. 29
  - 2. 26
  - 3. 25
  - 4. 38

Q.9 In what duration (in years) will ₹9,600 fetch a simple interest of ₹960 at 5% per annum rate of interest?<sup>1551</sup>

- Ans
- 1. 1
  - 2. 3
  - 3. 4
  - 4. 2

Q.10 A certain sum of money amounts to ₹81,174 in 2 years at the rate of 21% per annum, when the interest is compounded every 8 months. Find the amount payable (in ₹, rounded off to the nearest rupee) on the same sum for the same period and at the same rate, if the interest is compounded annually.

- Ans
- 1. 79,648
  - 2. 80,218
  - 3. 79,607
  - 4. 79,376

Q.11 Gopal bought 51 books for ₹1,150 from one shop and 49 books for ₹905 from another. What is the average price (in ₹) did he pay per book?

- Ans
- 1. 20.55
  - 2. 23.55
  - 3. 22.55
  - 4. 21.55

Q.12 A student's marks were incorrectly entered as 43 instead of 85. Due to

What is the number of students in the class?

- Ans
- 1. 30
  - 2. 28
  - 3. 21
  - 4. 27

Q.13 If the marks scored by Rohan are 12.5% less than the marks scored by Sohan, then by what percentage are Sohan's marks more than those of Rohan?

- Ans
- 1. 10%
  - 2. 15%
  - 3.  $14\frac{2}{7}\%$
  - 4. 13%

Q.14 The monthly expenditure of Reshu is 70% of their monthly income. If the monthly savings are ₹15,000, calculate the monthly income.

- Ans
- 1. ₹50,000
  - 2. ₹45,000
  - 3. ₹48,000
  - 4. ₹42,000

Q.15 Arvind bought a second-hand bike for ₹63,000. He spent ₹2,000 on its servicing and then sold it to Bhushan at a profit of 20%. Bhushan then spent ₹1,500 on repainting and sold it to Chetan at a loss of 10%. What was the cost price of the bike for Chetan?

- Ans
- 1. ₹75,550
  - 2. ₹73,850
  - 3. ₹71,800
  - 4. ₹71,550

Q.16 The average of five numbers is 20. If four of the numbers are 18, 25, 19, and 21, then the fifth number is:

- Ans
- 1. 2 more than average
  - 2. 3 more than average
  - 3. 2 less than average
  - 4. 3 less than average

Q.17 Simplify:  $(((-2)^2)^{-1})^3$

- Ans
- 1. 1
  - 2.  $\frac{1}{64}$
  - 3. 64
  - 4.  $\frac{2}{64}$

Q.18 The monthly income of Madhusri is ₹19,500. She spends 26% of her income on rent, 13% on food, 30% on other household items, and saves the remaining income. Find her monthly savings.

- Ans
- 1. ₹7045
  - 2. ₹5545
  - 3. ₹6045
  - 4. ₹6000

Q.19 Find the compound interest on ₹500 at the rate of 20% per annum for 12 months when interest is compounded half-yearly.

- Ans
- 1. ₹115
  - 2. ₹110
  - 3. ₹120
  - 4. ₹105

Q.20 Ashok has ₹1000 and he spent ₹320 on milk, ₹80 on bread, ₹450 on flour and ₹150 on sugar. A pie chart is to be drawn for this data. What is the central angle for milk?

- Ans
- 1.  $120^\circ$
  - 2.  $32^\circ$
  - 3.  $115.2^\circ$
  - 4.  $57.6^\circ$

Section : Arithmetical and Numerical Ability1

Q.1 Sunil travels 30 km at an average speed of 20 km/hr, then 40 km at an average speed of 30 km/hr, and finally 25 km at an average speed of 40 km/hr. Find the average speed of Sunil for the entire distance. (Round off your answer to two decimal places.)

- Ans
- 1. 30.25 km/hr
  - 2. 28.62 km/hr
  - 3. 32.45 km/hr
  - 4. 27.47 km/hr

Q.2 A bioinformatics researcher is analysing the ratio of two specific genetic markers. If the ratio of markers x to y is 3 : 5, and the ratio of  $(3x-1)$  to  $(2y+3)$  is 8 : 15, what is the value of y?

- Ans
- 1.  $\frac{39}{11}$
  - 2.  $\frac{27}{7}$
  - 3. 3
  - 4. 4

Q.3 Two trains of length 150 m and 200 m are moving in opposite directions at speeds of 60 km/hr and 40 km/hr, respectively. How much time (in seconds) will they take to cross each other?

- Ans
- 1. 10
  - 2. 15.8
  - 3. 25
  - 4. 12.6

Q.4 A solid metallic sphere of radius 10 cm is melted and recast into smaller spherical balls, each of radius 2 cm. Assuming no wastage of material, what is the total surface area of all the small spherical balls formed? (Use  $\pi = 3.14$ )

- Ans
- 1.  $6280 \text{ cm}^2$
  - 2.  $2512 \text{ cm}^2$
  - 3.  $3140 \text{ cm}^2$
  - 4.  $5024 \text{ cm}^2$

Q.5 The odometer of a car shows 28,512 km at the beginning of the journey and 29,160 km at the end of the journey. If the journey takes 12 hours, then find the average speed of the car (in m/sec).

- Ans
- 1. 5
  - 2. 8
  - 3. 12
  - 4. 15

Q.6 A trader marks his goods at 20% above the cost price and allows a discount of 11% on it. If he gains  $x\%$ , then the value of  $x$  is:

- Ans
- 1. 8.8
  - 2. 7.8
  - 3. 6.8
  - 4. 5.8

Q.7 If  $\sqrt{12 \times 147} : \sqrt{24 \times 54} = M:N$ , find the value of  $(3M + 4N) : (4M - 3$

- Ans
- 1. 7:3
  - 2. 5:2
  - 3. 7:1
  - 4. 9:2

Q.8 A and B together can complete a piece of work in 16 days. A alone can complete it in 20 days. If B does the work only half a day daily, then in how many days A and B together will complete the work?

- Ans
- 1.  $17\frac{7}{9}$
  - 2.  $14\frac{8}{11}$
  - 3.  $15\frac{8}{11}$
  - 4.  $16\frac{6}{11}$

Q.9 What will be the difference between a discount of 20% and two successive discounts of 10% each on ₹5,000?

- Ans
- 1. ₹50
  - 2. ₹19
  - 3. ₹25
  - 4. ₹100

Q.10 If the surface area of a sphere is 616 square centimeters, what is its volume (in cubic centimeters)? (Take  $\pi = \frac{22}{7}$ )

- Ans
- 1.  $\frac{4312}{3}$
  - 2.  $115\sqrt{5}$
  - 3. 1536
  - 4. 1232.25

Q.11 Calculate the volume (rounded to 2 decimal places) of a sphere having diameter 24 cm.

(Take  $\pi = 3.1415$ )

- Ans
- 1. 7814.02 cm<sup>3</sup>
  - 2. 7348.02 cm<sup>3</sup>
  - 3. 7238.02 cm<sup>3</sup>
  - 4. 7388.02 cm<sup>3</sup>

Q.12 A man bought an old typewriter for ₹1600 and spent ₹200 on its rep  
3022

- Ans
- 1. 40%
  - 2. 10%
  - 3. 45%
  - 4. 30%

Q.13 A can build a wall in 15 days, B can build it in 10 days, and C can completely destroy the wall in 20 days. If they all start working at the same time, in how many days will the wall be completed?

- Ans
- 1.  $8\frac{3}{7}$
  - 2.  $7\frac{3}{7}$
  - 3.  $8\frac{4}{7}$
  - 4.  $7\frac{4}{7}$

Q.14 A purse contains coins of denominations ₹2, ₹1 and 50 paise in the ratio 3 : 5 : 4. If the total value of the coins is ₹91, find the number of ₹1 coins in the purse.

- Ans
- 1. 28
  - 2. 30
  - 3. 32
  - 4. 35

Q.15 The cost price of an article is ₹800. A shopkeeper allows two successive discounts of 5% each on the cost price of the article. Find his selling price.

- Ans
- 1. ₹744
  - 2. ₹788
  - 3. ₹722
  - 4. ₹766

Q.16 Two partners X and Y started a business by investing in the ratio of 9 : 8. Z joined them after 8 months, investing an amount equal to half that Y invested in the beginning. At the end of the year, 40% of the profit earned was equal to ₹53,900. Find the profit (in ₹) earned by Z.

- Ans
- 1. 9,800
  - 2. 8,900
  - 3. 9,900
  - 4. 8,800

Q.17 Sanjay left city X for city Y at 8:00 p.m., travelling at a speed of 50 km/hr. An hour later, Ramesh also left city X for city Y at a speed of 70 km/hr. If the distance between city X and city Y is 900 km, at what time will Ramesh catch up with Sanjay?

- Ans
- 1. 11:20 p.m.
  - 2. 11:00 p.m.
  - 3. 11:30 p.m.
  - 4. 11:45 p.m.

**Q.18** Pipe A can fill a tank in 12 hours and Pipe B can fill it in 15 hours. Pipe C can empty the full tank in 18 hours. All three pipes are opened together. After 4 hours, Pipe B is closed but Pipe A and C continue working. After 6 hours from the beginning, Pipe C is also closed and Pipe A continues working alone. Find the time required for Pipe A to completely fill the remaining part of the tank.

- Ans**
- 1. 6 hours 48 minutes
  - 2. 4 hours 15 minutes
  - 3. 5 hours 47 minutes
  - 4. 3 hours 24 minutes

**Q.19** The capacity of a cuboid tank of water is 76,000 litres. Find the breadth of the tank, if its length and depth are 4 m and 10 m, respectively.

- Ans**
- 1. 1.7 m
  - 2. 1.6 m
  - 3. 1.9 m
  - 4. 1.8 m

**Q.20** P alone can finish a work in 42 days. Q is 40% more efficient than P. How long would Q alone take to finish the work?

- Ans**
- 1. 18 days
  - 2. 30 days
  - 3. 28 days
  - 4. 35 days

Section : Test of English Language and Comprehension

**Q.1** Arrange the sentence parts to form a meaningful sentence.

A. after the heavy rain B. flooding nearby fields C. and damaging crops D. the river overflowed

- Ans**
- 1. A C B D
  - 2. A D B C
  - 3. A B C D
  - 4. B A C D

**Q.2** Complete the sentence with the suitable option.

The Mughal garden is \_\_\_\_\_.<sup>254</sup>

- Ans**
- 1. beautiful
  - 2. less beautiful
  - 3. most beautiful
  - 4. more beautiful

**Q.3** Select the most appropriate option to fill in the blank.

The government must take action to prevent chemicals from seeping \_\_\_\_ the groundwater.

- Ans**
- 1. along
  - 2. across
  - 3. into
  - 4. onto

**Q.4 Rectify the given sentence by choosing the correct option.**

The police carried along a thorough search of the premises, but failed to find any drugs.

- Ans
- 1. The police carried out a thorough search of the premises, but failed to find any drugs.
  - 2. The police carried away a thorough search of the premises, but failed to find any drugs.
  - 3. The police carried up a thorough search of the premises, but failed to find any drugs.
  - 4. The police carried over a thorough search of the premises, but failed to find any drugs.

**Q.5 Complete the sentence with the appropriate article.**

She visited \_\_\_ Louvre Museum during her trip to Paris.  
1485

- Ans
- 1. a
  - 2. the
  - 3. an
  - 4. No article needed

**Q.6 Choose the correct article from the options given to complete the sentence.**  
I saw \_\_\_\_\_ movie last night, which was very boring.

- Ans
- 1. the
  - 2. No article needed
  - 3. an
  - 4. a

**Q.7 Select the most appropriate preposition to fill in the blank.**

A hunting knife was strapped tightly \_\_\_\_\_ the leather belt, ready for any sudden danger.

- Ans
- 1. by
  - 2. during
  - 3. to
  - 4. after

**Q.8 Select the most appropriate article to fill in the blank. If no article is needed, select 'No article required'.**

Of all the boys in the class, he is \_\_\_\_\_ cleverest.

- Ans
- 1. a
  - 2. No article required
  - 3. an
  - 4. the

**Q.9 Identify the grammatically correct sentence:**

- Ans
- 1. The new policy will come on effect next month.
  - 2. The new policy will come in effect next month.
  - 3. The new policy will come into effect next month.
  - 4. The new policy will come to effect next month.

Q.10 Complete the sentence with the most appropriate word from the given options.

In order to promote creativity and collaboration, the headmaster \_\_\_\_\_ the pupils to take part in the interschool science fair.

- Ans
- 1. opposed
  - 2. encouraged
  - 3. discouraged
  - 4. ignored

Q.11 Select the most appropriate word for the blank in the sentence given below.

Please write your name \_\_\_\_\_ the top of the page. 4462

- Ans
- 1. in
  - 2. at
  - 3. by
  - 4. on

Q.12 In the given question, a statement divided into different segments is given. The first segment is fixed, rearrange the other segments to form a coherent statement. Flying an aircraft smoothly through / Eddies, vortices, and updrafts demands (P) / Mathematics and fluid dynamics analysis, (Q) / Precision engineering supported by advanced (R) / Given that air behaves as a fluid (S)

- Ans
- 1. PSQR
  - 2. QSPR
  - 3. SRQP
  - 4. PRQS

Q.13 Select the most appropriate article for the blank in the sentence given below.

A traveller ventured into \_\_\_\_\_ hot desert of Sahara. 1503

- Ans
- 1. the
  - 2. an
  - 3. a
  - 4. No article required

Q.14 Identify the error in the following sentence and choose the correct revision from the given options.

If I was you, I would apologize.

- Ans
- 1. If I have been you, I would apologize.
  - 2. If I am you, I would apologize.
  - 3. If I were you, I would apologize.
  - 4. If I had you, I would apologize.

Q.15 Choose the correct option to fill in the blanks.

Not only \_\_\_\_\_ the award, but was also \_\_\_\_\_ to represent the country in the international competition.

- Ans
- 1. did she win, has selected
  - 2. did she win, selected
  - 3. she won, was selected
  - 4. she won, selected

**Comprehension:**

Read the given passage carefully and answer the questions that follow.

For a long time, museums were seen as the ultimate experts on history. They decided which stories were important, often focusing only on powerful cultures. Today, however, many people are questioning whose history is being told and whose is being ignored. This has forced museums to rethink how they show the past.

One major debate is about repatriation or returning items to their original homes. Many artifacts were taken during colonial times. To the cultures they came from, these items are more than just art; they are part of their identity and spirit. Museums are now learning to share ownership or return these items, proving that "keeping things safe" is not always a good enough reason to own them forever. Museums are also becoming more interactive. Visitors want to participate in the story, not just look at objects. Using digital tools and community-made exhibits, museums are trying to make history more inclusive. While some worry this makes museums less "serious", others believe it makes them more relevant. Museums are moving from being quiet monuments of the past to active spaces for conversation.

**SubQuestion No : 16**

**Q.16 Which title best reflects the focus of the passage?**

**Comprehension:**

Read the given passage carefully and answer the questions that follow.

For a long time, museums were seen as the ultimate experts on history. They decided which stories were important, often focusing only on powerful cultures. Today, however, many people are questioning whose history is being told and whose is being ignored. This has forced museums to rethink how they show the past.

One major debate is about repatriation or returning items to their original homes. Many artifacts were taken during colonial times. To the cultures they came from, these items are more than just art; they are part of their identity and spirit. Museums are now learning to share ownership or return these items, proving that "keeping things safe" is not always a good enough reason to own them forever. Museums are also becoming more interactive. Visitors want to participate in the story, not just look at objects. Using digital tools and community-made exhibits, museums are trying to make history more inclusive. While some worry this makes museums less "serious", others believe it makes them more relevant. Museums are moving from being quiet monuments of the past to active spaces for conversation.

**SubQuestion No : 17**

**Q.17 According to the passage, why is repatriation significant?**

**Comprehension:**

Read the given passage carefully and answer the questions that follow.

For a long time, museums were seen as the ultimate experts on history. They decided which stories were important, often focusing only on powerful cultures. Today, however, many people are questioning whose history is being told and whose is being ignored. This has forced museums to rethink how they show the past.

One major debate is about repatriation or returning items to their original homes. Many artifacts were taken during colonial times. To the cultures they came from, these items are more than just art; they are part of their identity and spirit. Museums are now learning to share ownership or return these items, proving that "keeping things safe" is not always a good enough reason to own them forever. Museums are also becoming more interactive. Visitors want to participate in the story, not just look at objects. Using digital tools and community-made exhibits, museums are trying to make history more inclusive. While some worry this makes museums less "serious", others believe it makes them more relevant. Museums are moving from being quiet monuments of the past to active spaces for conversation.

**SubQuestion No : 18**

**Q.18 What inference can be drawn about modern museum audiences?**

**Comprehension:**

Read the given passage carefully and answer the questions that follow.

For a long time, museums were seen as the ultimate experts on history. They decided which stories were important, often focusing only on powerful cultures. Today, however, many people are questioning whose history is being told and whose is being ignored. This has forced museums to rethink how they show the past.

One major debate is about repatriation or returning items to their original homes. Many artifacts were taken during colonial times. To the cultures they came from, these items are more than just art; they are part of their identity and spirit. Museums are now learning to share ownership or return these items, proving that "keeping things safe" is not always a good enough reason to own them forever. Museums are also becoming more interactive. Visitors want to participate in the story, not just look at objects. Using digital tools and community-made exhibits, museums are trying to make history more inclusive. While some worry this makes museums less "serious", others believe it makes them more relevant. Museums are moving from being quiet monuments of the past to active spaces for conversation.

**SubQuestion No : 19**

**Q.19 How is the argument structured in the passage?**

### Comprehension:

Read the given passage carefully and answer the questions that follow.

For a long time, museums were seen as the ultimate experts on history. They decided which stories were important, often focusing only on powerful cultures. Today, however, many people are questioning whose history is being told and whose is being ignored. This has forced museums to rethink how they show the past.

One major debate is about repatriation or returning items to their original homes. Many artifacts were taken during colonial times. To the cultures they came from, these items are more than just art; they are part of their identity and spirit. Museums are now learning to share ownership or return these items, proving that "keeping things safe" is not always a good enough reason to own them forever. Museums are also becoming more interactive. Visitors want to participate in the story, not just look at objects. Using digital tools and community-made exhibits, museums are trying to make history more inclusive. While some worry this makes museums less "serious", others believe it makes them more relevant. Museums are moving from being quiet monuments of the past to active spaces for conversation.

SubQuestion No : 20

Q.20 Which words best describe the tone of the passage?

Section : Test of English Language and Comprehension1

Q.1 Select the option that best explains the given proverb.

Strike while the iron is hot.

- Ans
- 1. Avoid making decision in haste lest it spoils the work.
  - 2. Take action immediately when the opportunity arises.
  - 3. Learn from your past mistakes and improve the future.
  - 4. Be patient and wait for the right moment.

Q.2 Choose the correct one-word substitution for the given sentence.

One who studies the stars and planets

- Ans
- 1. Geologist
  - 2. Biologist
  - 3. Meteorologist
  - 4. Astronomer

Q.3 In the sentence below, identify the misspelled word.

The old house had a dillapidated appearance, with vines encroaching upon its walls.

- Ans
- 1. appearance
  - 2. vines
  - 3. encroaching
  - 4. dillapidated

Q.4 Choose from the options the word that correctly substitutes the word segment given.

Very particular about details

- Ans
- 1. slipshod
  - 2. punctilious
  - 3. idle
  - 4. lackadaisical

Q.5 Find out the antonym of " Peripheral".

- Ans
- 1. free
  - 2. clear
  - 3. chief
  - 4. outward

**Q.6** Select the most appropriate meaning of the given proverb.

**Rome wasn't built in a day**

- Ans**
- 1. Success comes quickly with hard work
  - 2. Rome is a very old city
  - 3. Building requires a lot of effort
  - 4. Great things take time to achieve

**Q.7** Choose the correct option.

**An instrument for measuring atmospheric pressure is \_\_\_\_\_.**

- Ans**
- 1. barometer
  - 2. hydrometer
  - 3. thermometer
  - 4. altimeter

**Q.8** Choose the correct one-word substitute for the following.

**A word that is the same in sound as another but different in meaning**

- Ans**
- 1. Antonym
  - 2. Homonym
  - 3. Homophone
  - 4. Synonym

**Q.9** Choose the word that is most similar in meaning to "taciturn".

- Ans**
- 1. Outspoken
  - 2. Talkative
  - 3. Reserved
  - 4. Friendly

**Q.10** Choose the appropriate option that best expresses the meaning of the proverb 'there are plenty of fish in the sea'.

- Ans**
- 1. Opportunities are hard and rare to find
  - 2. There are many other opportunities or people out there
  - 3. There are limited options available
  - 4. You only get one chance at something

**Q.11** Rearrange the following segments to form a coherent and meaningful sentence.

transforming the modern workplace structure (A) / remote working models (B) / have gained popularity in recent years (C) / allowing employees greater flexibility (D) /

- Ans**
- 1. B - C - D - A
  - 2. A - B - C - D
  - 3. D - A - C - B
  - 4. C - B - A - D

**Q.12** Choose the correct SYNONYM of the given word.

**Substantiate**

- Ans**
- 1. Validate
  - 2. Speculate
  - 3. Augment
  - 4. Refute

**Q.13 Choose the appropriate option that best expresses the meaning of the following proverb.**

**It takes two to tango.**

- Ans**
- 1. Both parties involved in a situation or activity are equally responsible for it.
  - 2. Only one person is responsible for a situation.
  - 3. A single person can handle any problem.
  - 4. A task can be done by one person alone.

**Q.14 Identify and correct the incorrectly spelt word in the given sentence.**

**Characterized by severe self-discipline and abstention from all forms of indulgence.**

- Ans**
- 1. indulgence
  - 2. abstention
  - 3. Charecterized
  - 4. self-discipline

**Q.15 Select the most appropriate ANTONYM of the given word.**

**Perspicacious**

- Ans**
- 1. Discerning
  - 2. Astute
  - 3. Foolish
  - 4. Wise

**Comprehension:**

Read the passage carefully and answer the questions that follow:

For years, a long, dull grey wall separated the school from the marketplace. Students passed it daily, barely noticing its presence. One morning, a teacher brought cans of paint and brushes, inviting students to paint anything they wished. At first hesitant, a few students began sketching trees, birds, and stars. Within a week, the wall had become a riot of colours—depicting local heroes, folk tales, and dreams. The community stopped to look. Shopkeepers smiled. Even strangers paused to take photos. The wall, once ignored, became a symbol of imagination. "It's still a wall," said the headmaster, "but now, it speaks." More than decoration, it inspired students to express themselves and reminded adults that creativity doesn't need permission. What was once silent now told a story—not in words, but in colour.

**SubQuestion No : 16**

**Q.16 What change occurred to the school wall?**

**Comprehension:**

Read the passage carefully and answer the questions that follow:

For years, a long, dull grey wall separated the school from the marketplace. Students passed it daily, barely noticing its presence. One morning, a teacher brought cans of paint and brushes, inviting students to paint anything they wished. At first hesitant, a few students began sketching trees, birds, and stars. Within a week, the wall had become a riot of colours—depicting local heroes, folk tales, and dreams. The community stopped to look. Shopkeepers smiled. Even strangers paused to take photos. The wall, once ignored, became a symbol of imagination. "It's still a wall," said the headmaster, "but now, it speaks." More than decoration, it inspired students to express themselves and reminded adults that creativity doesn't need permission. What was once silent now told a story—not in words, but in colour.

**SubQuestion No : 17**

**Q.17 What does the initial hesitation of the students suggest?**

**Comprehension:**

Read the passage carefully and answer the questions that follow:

For years, a long, dull grey wall separated the school from the marketplace. Students passed it daily, barely noticing its presence. One morning, a teacher brought cans of paint and brushes, inviting students to paint anything they wished. At first hesitant, a few students began sketching trees, birds, and stars. Within a week, the wall had become a riot of colours—depicting local heroes, folk tales, and dreams. The community stopped to look. Shopkeepers smiled. Even strangers paused to take photos. The wall, once ignored, became a symbol of imagination. "It's still a wall," said the headmaster, "but now, it speaks." More than decoration, it inspired students to express themselves and reminded adults that creativity doesn't need permission. What was once silent now told a story—not in words, but in colour.

**SubQuestion No : 18**

**Q.18 What is the central theme of the passage?**

**Comprehension:**

Read the passage carefully and answer the questions that follow:

For years, a long, dull grey wall separated the school from the marketplace. Students passed it daily, barely noticing its presence. One morning, a teacher brought cans of paint and brushes, inviting students to paint anything they wished. At first hesitant, a few students began sketching trees, birds, and stars. Within a week, the wall had become a riot of colours—depicting local heroes, folk tales, and dreams. The community stopped to look. Shopkeepers smiled. Even strangers paused to take photos. The wall, once ignored, became a symbol of imagination. "It's still a wall," said the headmaster, "but now, it speaks." More than decoration, it inspired students to express themselves and reminded adults that creativity doesn't need permission. What was once silent now told a story—not in words, but in colour.

**SubQuestion No : 19**

**Q.19 Choose the word that is opposite in meaning to "hesitant" as used in the line: "At first hesitant, a few students began sketching..."**

**Comprehension:**

Read the passage carefully and answer the questions that follow:

For years, a long, dull grey wall separated the school from the marketplace. Students passed it daily, barely noticing its presence. One morning, a teacher brought cans of paint and brushes, inviting students to paint anything they wished. At first hesitant, a few students began sketching trees, birds, and stars. Within a week, the wall had become a riot of colours—depicting local heroes, folk tales, and dreams. The community stopped to look. Shopkeepers smiled. Even strangers paused to take photos. The wall, once ignored, became a symbol of imagination. "It's still a wall," said the headmaster, "but now, it speaks." More than decoration, it inspired students to express themselves and reminded adults that creativity doesn't need permission. What was once silent now told a story—not in words, but in colour.

**SubQuestion No : 20**

**Q.20 Which of the following is the most suitable title for the passage?**

**Section : Test of Hindi Language and Comprehension**

**Q.1 'केवल दिखावा होना' किस लोकोक्ति का अर्थ है?**

- Ans**
- 1. औंधी खोपड़ी उल्टा मत
  - 2. ऊँट के गले में बिल्ली
  - 3. ऊँची दुकान फीके पकवान
  - 4. काला अक्षर भैंस बराबर

**Q.2 निम्नलिखित वाक्य के रिक्त स्थान में कारक चिह्न का प्रयोग करें -  
'सोनम ने छत सामान रखा।'**

- Ans**
- 1. ने
  - 2. में
  - 3. पर
  - 4. से

Q.3 मेरा हाल .....आप लोग जानते हैं।  
उपर्युक्त वाक्य में रिक्त स्थान की पूर्ति के लिए उचित क्रिया-विशेषण शब्द का चयन करें-

- Ans
- 1. इतना
  - 2. कितना
  - 3. तो
  - 4. कब

Q.4 निम्नलिखित विकल्पों में से अतिरिक्त वाक्य का चयन कीजिए-

- Ans
- 1. प्रतापनारायण श्रीवास्तव कृत 'विदा' और 'विजय' आदर्शवादी उपन्यास हैं।
  - 2. सुभद्राकुमारी चौहान की कविता 'झांसी की रानी' सामान्य जनता तक प्रसिद्ध है।
  - 3. इनकी कविताएं 'त्रिधारा' और 'मुकुल' में संकलित हैं।
  - 4. सुभद्राकुमारी चौहान का जन्म प्रयागराज जनपद में हुआ था।

Q.5 दिए गए वाक्यों को लिखने का सही क्रम चुनें-

- (1) इनमें 'रामचरितमानस' सत्रहवीं सदी की रचना है।
- (2) आल्हा की सबसे बड़ी विशेषता उसके रचयिता का भविष्य-द्रष्टा होना है।
- (3) आल्हा लोकप्रिय प्राचीनतम हिन्दी महाकाव्य है।
- (4) हिन्दी की दो रचनाएं 'आल्हा' तथा 'रामचरितमानस' लोकप्रिय हुई हैं।

- Ans
- 1. 3421
  - 2. 1234
  - 3. 4132
  - 4. 2431

Q.6 निम्नलिखित विकल्पों में से उपयुक्त क्रिया का चयन कर वाक्य को पूर्ण कीजिए-  
'वह लड़का अपना सर\_\_\_\_ रहा है।'

- Ans
- 1. उड़ा
  - 2. खुजला
  - 3. चूस
  - 4. चबा

Q.7 दिए गए वाक्यों के लिखने का सही क्रम चुनें-

- (1) महाकाव्य प्रमुखतः कथा-काव्य होता है और
- (2) उसमें कथानक-योजना, जन-जीवन और कलात्मकता अनिवार्य है
- (3) इसलिए महाकाव्य में जीवन का सर्वांगीण चित्रण होता है
- (4) इसके साथ ही चूंकि महाकाव्य में युग जीवन का व्यापक चित्र होता है

- Ans
- 1. 4213
  - 2. 4123
  - 3. 1234
  - 4. 1243

Q.8 'आँखें पथरा जाना' मुहावरे का सही अर्थ क्या होगा?

- Ans
- 1. प्रतिकूल होना
  - 2. झपकी आना
  - 3. आँखें थक जाना
  - 4. निर्लज्ज होना

Q.9 निम्नलिखित वाक्यांश के लिए सार्थक शब्द बताएं -  
'भला या हित चाहने वाला'

- Ans
- 1. त्रिगुण
  - 2. हितैषी
  - 3. हस्तक्षेप
  - 4. हौदा

Q.10 कृष्णचंद्र का मुख .....पड़ गया।  
उपर्युक्त वाक्य में रिक्त स्थान की पूर्ति के लिए उचित विशेषण शब्द का चयन करें-

- Ans
- 1. मोटा
  - 2. विद्वान
  - 3. स्वस्थ
  - 4. पीला

Q.11 दिए गए वाक्यों के लिखने का सही क्रम चुनें-  
(1) एक-एक को छठी का दूध याद दिला देती।  
(2) वह किसी से भी कम नहीं थी।  
(3) मुहल्ले में सबकी जुबान पर एक ही नाम था।  
(4) यह सनीचरी नाम उसके बाप ने ही रखा था।

- Ans
- 1. 1243
  - 2. 3421
  - 3. 2143
  - 4. 3124

Q.12 निम्नलिखित वाक्य के रिक्त स्थान में क्रिया-विशेषण शब्द का प्रयोग करें -  
'राजेश वाली मंजिल पर रहता है।'

- Ans
- 1. ऊपर
  - 2. धीरे-धीरे
  - 3. प्रतिदिन
  - 4. कब

Q.13 निम्नलिखित वाक्यांशों में से एक अशुद्ध वाक्य का चयन कीजिए-

- Ans
- 1. मुझे दूध पीना है।
  - 2. हम स्कूल जाता है।
  - 3. तुम कहाँ जा रहे हो?
  - 4. वह पुस्तक पढ़ रहा है।

Q.14 रेखांकित वाक्यांश के लिए सही शब्द क्या है?  
न्यायालय में केवल वही तर्क मान्य होते हैं जो प्रमाण द्वारा सिद्ध करने योग्य हो।

- Ans
- 1. परमार्थी
  - 2. निरामिष
  - 3. प्रमेय
  - 4. अनुदान

Q.15 निम्नलिखित वाक्यों में से अतिरिक्त वाक्य का चयन करें-

- Ans
- 1. देवों का सहारा मूर्ख लोग लेते हैं।
  - 2. कर्महीन मनुष्य ही दुखी होता है।
  - 3. कर्म ही पूजा है।
  - 4. कर्म से आनंद अनुभव करने वाले को ही कर्मण कहते हैं।

### Comprehension:

दिए गए गद्यांश को पढ़कर पूछे गए प्रश्नों के उत्तर दीजिए:

अपने कदमों से बुलंदियाँ हासिल करने का सपना देखने वाली अरुणि साल 2012 में हुई दुर्घटना के चलते सीधे व्हीलचेयर (Wheelchair) पर आ गई। नियति को तो शायद कुछ और ही मंजूर था। पर 12 साल की उम्र में पैरालिसिस का दंश झेलने वाली अरुणि यहाँ रुकने वाली नहीं थी। दुर्घटना के महज तीन साल बाद ही अरुणि ने अभिनव बिंद्रा से प्रेरित होकर शूटिंग को अपने जीवन का लक्ष्य बनाया और 5 साल के अंतराल में ही उसने 'गोल्डन गर्ल' का तमगा हासिल कर लिया। राजधानी जयपुर की रहने वाली, पिज्जा, चॉकलेट, आइसक्रीम की शौकीन अरुणि को गोवा, दुबई जैसी जगहों में घूमना बहुत पसंद है। दुर्घटना से पहले वह बहुत सक्रिय थी और स्कूल की हर गतिविधि में भाग लेती थी, पर दुर्घटना ने उसकी जिंदगी बदल दी। उसने स्वयं को एक कमरे में बंद कर लिया था। उसका आत्मविश्वास लगभग समाप्त हो चुका था। वह अपनी हालत पर गुस्से में थी और किसी से बात नहीं करना चाहती थी। किंतु उसके माता-पिता ने हार नहीं मानी और उसे निरंतर प्रेरित करते रहे। उसके पिता ने अभिनव बिंद्रा की बायोग्राफी लाकर उसे दी। बदलाव के लिए, उसे जयपुर के जगतपुरा में जेडीए शूटिंग रेंज में ले जाया गया। यह उसे मिली निरंतर प्रेरणा तथा प्रोत्साहन का ही परिणाम था कि उसकी रुचि शूटिंग में पैदा हुई।

### SubQuestion No : 16

Q.16 गद्यांश में प्रयुक्त 'सक्रिय' शब्द का विलोम क्या होता है?

## Comprehension:

दिए गए गद्यांश को पढ़कर पूछे गए प्रश्नों के उत्तर दीजिए:

अपने कदमों से बुलंदियाँ हासिल करने का सपना देखने वाली अविनी साल 2012 में हुई दुर्घटना के चलते सीधे व्हीलचेयर (Wheelchair) पर आ गई। नियति को तो शायद कुछ और ही मंजूर था। पर 12 साल की उम्र में पैरालिसिस का दंश झेलने वाली अविनी यहाँ रुकने वाली नहीं थी। दुर्घटना के महज तीन साल बाद ही अविनी ने अभिनव बिंद्रा से प्रेरित होकर शूटिंग को अपने जीवन का लक्ष्य बनाया और 5 साल के अंतराल में ही उसने 'गोल्डन गर्ल' का तमगा हासिल कर लिया। राजधानी जयपुर की रहने वाली, पिज्जा, चॉकलेट, आइसक्रीम की शौकीन अविनी को गोवा, दुबई जैसी जगहों में घूमना बहुत पसंद है। दुर्घटना से पहले वह बहुत सक्रिय थी और स्कूल की हर गतिविधि में भाग लेती थी, पर दुर्घटना ने उसकी जिंदगी बदल दी। उसने स्वयं को एक कमरे में बंद कर लिया था। उसका आत्मविश्वास लगभग समाप्त हो चुका था। वह अपनी हालत पर गुस्से में थी और किसी से बात नहीं करना चाहती थी। किंतु उसके माता-पिता ने हार नहीं मानी और उसे निरंतर प्रेरित करते रहे। उसके पिता ने अभिनव बिंद्रा की बायोग्राफी लाकर उसे दी। बदलाव के लिए, उसे जयपुर के जगतपुरा में जेडीए शूटिंग रेंज में ले जाया गया। यह उसे मिली निरंतर प्रेरणा तथा प्रोत्साहन का ही परिणाम था कि उसकी रुचि शूटिंग में पैदा हुई।

### SubQuestion No : 17

Q.17 दिए गए गद्यांश की संरचना किस प्रकार की है?

## Comprehension:

दिए गए गद्यांश को पढ़कर पूछे गए प्रश्नों के उत्तर दीजिए:

अपने कदमों से बुलंदियाँ हासिल करने का सपना देखने वाली अविनी साल 2012 में हुई दुर्घटना के चलते सीधे व्हीलचेयर (Wheelchair) पर आ गई। नियति को तो शायद कुछ और ही मंजूर था। पर 12 साल की उम्र में पैरालिसिस का दंश झेलने वाली अविनी यहाँ रुकने वाली नहीं थी। दुर्घटना के महज तीन साल बाद ही अविनी ने अभिनव बिंद्रा से प्रेरित होकर शूटिंग को अपने जीवन का लक्ष्य बनाया और 5 साल के अंतराल में ही उसने 'गोल्डन गर्ल' का तमगा हासिल कर लिया। राजधानी जयपुर की रहने वाली, पिज्जा, चॉकलेट, आइसक्रीम की शौकीन अविनी को गोवा, दुबई जैसी जगहों में घूमना बहुत पसंद है। दुर्घटना से पहले वह बहुत सक्रिय थी और स्कूल की हर गतिविधि में भाग लेती थी, पर दुर्घटना ने उसकी जिंदगी बदल दी। उसने स्वयं को एक कमरे में बंद कर लिया था। उसका आत्मविश्वास लगभग समाप्त हो चुका था। वह अपनी हालत पर गुस्से में थी और किसी से बात नहीं करना चाहती थी। किंतु उसके माता-पिता ने हार नहीं मानी और उसे निरंतर प्रेरित करते रहे। उसके पिता ने अभिनव बिंद्रा की बायोग्राफी लाकर उसे दी। बदलाव के लिए, उसे जयपुर के जगतपुरा में जेडीए शूटिंग रेंज में ले जाया गया। यह उसे मिली निरंतर प्रेरणा तथा प्रोत्साहन का ही परिणाम था कि उसकी रुचि शूटिंग में पैदा हुई।

### SubQuestion No : 18

Q.18 अभिनव बिंद्रा की किस चीज ने अविनी को प्रेरित किया था?

## Comprehension:

दिए गए गद्यांश को पढ़कर पूछे गए प्रश्नों के उत्तर दीजिए:

अपने कदमों से बुलंदियाँ हासिल करने का सपना देखने वाली अविनी साल 2012 में हुई दुर्घटना के चलते सीधे व्हीलचेयर (Wheelchair) पर आ गई। नियति को तो शायद कुछ और ही मंजूर था। पर 12 साल की उम्र में पैरालिसिस का दंश झेलने वाली अविनी यहाँ रुकने वाली नहीं थी। दुर्घटना के महज तीन साल बाद ही अविनी ने अभिनव बिंद्रा से प्रेरित होकर शूटिंग को अपने जीवन का लक्ष्य बनाया और 5 साल के अंतराल में ही उसने 'गोल्डन गर्ल' का तमगा हासिल कर लिया। राजधानी जयपुर की रहने वाली, पिज्जा, चॉकलेट, आइसक्रीम की शौकीन अविनी को गोवा, दुबई जैसी जगहों में घूमना बहुत पसंद है। दुर्घटना से पहले वह बहुत सक्रिय थी और स्कूल की हर गतिविधि में भाग लेती थी, पर दुर्घटना ने उसकी जिंदगी बदल दी। उसने स्वयं को एक कमरे में बंद कर लिया था। उसका आत्मविश्वास लगभग समाप्त हो चुका था। वह अपनी हालत पर गुस्से में थी और किसी से बात नहीं करना चाहती थी। किंतु उसके माता-पिता ने हार नहीं मानी और उसे निरंतर प्रेरित करते रहे। उसके पिता ने अभिनव बिंद्रा की बायोग्राफी लाकर उसे दी। बदलाव के लिए, उसे जयपुर के जगतपुरा में जेडीए शूटिंग रेंज में ले जाया गया। यह उसे मिली निरंतर प्रेरणा तथा प्रोत्साहन का ही परिणाम था कि उसकी रुचि शूटिंग में पैदा हुई।

### SubQuestion No : 19

Q.19 अविनी लखेरा को कितने वर्ष में पैरालिसिस अटैक हुआ था?

## Comprehension:

दिए गए गद्यांश को पढ़कर पूछे गए प्रश्नों के उत्तर दीजिए:

अपने कदमों से बुलंदियाँ हासिल करने का सपना देखने वाली अविनी साल 2012 में हुई दुर्घटना के चलते सीधे व्हीलचेयर (Wheelchair) पर आ गई। नियति को तो शायद कुछ और ही मंजूर था। पर 12 साल की उम्र में पैरालिसिस का दंश झेलने वाली अविनी यहाँ रुकने वाली नहीं थी। दुर्घटना के महज तीन साल बाद ही अविनी ने अभिनव बिंद्रा से प्रेरित होकर शूटिंग को अपने जीवन का लक्ष्य बनाया और 5 साल के अंतराल में ही उसने 'गोल्डन गर्ल' का तमगा हासिल कर लिया। राजधानी जयपुर की रहने वाली, पिज्जा, चॉकलेट, आइसक्रीम की शौकीन अविनी को गोवा, दुबई जैसी जगहों में घूमना बहुत पसंद है। दुर्घटना से पहले वह बहुत सक्रिय थी और स्कूल की हर गतिविधि में भाग लेती थी, पर दुर्घटना ने उसकी जिंदगी बदल दी। उसने स्वयं को एक कमरे में बंद कर लिया था। उसका आत्मविश्वास लगभग समाप्त हो चुका था। वह अपनी हालत पर गुस्से में थी और किसी से बात नहीं करना चाहती थी। किंतु उसके माता-पिता ने हार नहीं मानी और उसे निरंतर प्रेरित करते रहे। उसके पिता ने अभिनव बिंद्रा की बायोग्राफी लाकर उसे दी। बदलाव के लिए, उसे जयपुर के जगतपुरा में जेडीए शूटिंग रेंज में ले जाया गया। यह उसे मिली निरंतर प्रेरणा तथा प्रोत्साहन का ही परिणाम था कि उसकी रुचि शूटिंग में पैदा हुई।

### SubQuestion No : 20

Q.20 खेल में अविनी लखेरा ने कौन सा तमगा हासिल कर लिया था?

## Section : Test of Hindi Language and Comprehension1

Q.1 अनेकार्थी शब्द 'अब्ज' के गलत विकल्प का चयन कीजिए-

- Ans
- 1. चंद्रमा
  - 2. कपूर
  - 3. मेघ
  - 4. शंख

Q.2 निम्नलिखित वाक्य में अशुद्ध शब्द की पहचान कीजिए-  
युद्धभूमि में अक्षौहीणी सेना की गर्जना से शत्रु भयभीत हो उठे।

- Ans
- 1. युद्धभूमि
  - 2. अक्षौहीणी
  - 3. भयभीत
  - 4. शत्रु

Q.3 निम्नलिखित वाक्य में अशुद्ध शब्द की पहचान कीजिए-  
चैत्र मास की त्रितीया तिथि को गाँव के मंदिर में विशेष पूजा-अर्चना का आयोजन किया गया, जिसमें सभी ग्रामीणों ने श्रद्धा और उत्साह के साथ भाग लिया।

- Ans
- 1. श्रद्धा
  - 2. अर्चना
  - 3. उत्साह
  - 4. त्रितीया

Q.4 'हर प्रकार आनंद होना' किस लोकोक्ति का अर्थ है?

- Ans
- 1. पाँचों उँगली घी में
  - 2. पुण्य की जड़ सदा हरी
  - 3. पाप का घड़ा फूटता है
  - 4. पानी मथे घी नहीं निकलता

Q.5 निम्नलिखित वाक्य में अशुद्ध शब्द की पहचान कीजिए-  
उसने अपने जीवन का इप्सित लक्ष्य कठिन परिश्रम से प्राप्त किया है।

- Ans
- 1. कठिन
  - 2. परिश्रम
  - 3. जीवन
  - 4. इप्सित

Q.6 'लक्ष्मण' के उचित पर्यायवाची शब्द का चयन करें-651

- Ans
- 1. दनुज
  - 2. पामर
  - 3. शुकप्रिय
  - 4. सौमित्र

Q.7 'प्रकृत' का विलोम शब्द है-

- Ans
- 1. अप्रकृत
  - 2. प्रवर
  - 3. प्रयुक्त
  - 4. अप्रवृत्त

Q.8 जननी का विलोम शब्द होगा -

- Ans
- 1. अजेय
  - 2. जाली
  - 3. जनक
  - 4. शांति

Q.9 'लंगोटी में फाग खेलना'- मुहावरे का उपयुक्त अर्थ चुनिए।

- Ans
- 1. होली मनाना
  - 2. दरिद्रता में आनंद मनाना
  - 3. गरीबी का मजाक उड़ाना
  - 4. अखाड़े में कुश्ती लड़ना

Q.10 निम्नलिखित वाक्य में अशुद्ध शब्द की पहचान कीजिए-  
सरकार ने किसानों की सभी मांगों की पूर्ती करने का आश्वासन दिया।

- Ans
- 1. पूर्ती
  - 2. किसानों
  - 3. माँगों
  - 4. आश्वासन

Q.11 अनेकार्थी शब्द अंतर का एक अर्थ नहीं है ?

- Ans
- 1. समय
  - 2. फ़र्क
  - 3. सिन्दूर
  - 4. भीतर

Q.12 घोषित का विलोम शब्द होगा -

- Ans
- 1. अघोषित
  - 2. विवादित
  - 3. अनुमोदित
  - 4. कुपोषित

Q.13 निम्न विकल्पों में तद्भव शब्द चुनिए ।

- Ans
- 1. गौर
  - 2. वानर
  - 3. मयूर
  - 4. मोर

Q.14 निम्नलिखित मुहावरे के सही अर्थ की पहचान कीजिए-  
'काजल की कोठरी'

- Ans
- 1. कलंक का स्थान
  - 2. शृंगार कक्ष
  - 3. अंधकार में जाना
  - 4. कोप भवन में जाना

Q.15 'छत्रक' का तद्भव शब्द होगा -

- Ans
- 1. छेद
  - 2. छाया
  - 3. छुरी
  - 4. छाता

### Comprehension:

दिए गए गद्यांश के आधार पर निम्नांकित प्रश्नों के उत्तर दीजिए--

सृजनात्मक साहित्य में लेखक मुहावरों और लोकोक्तियों द्वारा भी भाषा की अभिव्यंजना में श्रीवृद्धि करता है। मुहावरे एवं लोकोक्तियों का मूल स्रोत उस देश अथवा भाषा की संस्कृति विशेष हुआ करती है। ये उस देश अथवा भाषा की सांस्कृतिक चेतना के वाहक होते हैं और भाषा की अभिव्यक्ति को एक विशिष्टता प्रदान करते हुए उसे सशक्त स्वरूप प्रदान करते हैं। मुहावरों एवं लोकोक्तियों जैसे लोकाश्रित अभिव्यक्तियों के प्रयोग से भाषा की अभिव्यंजना जितनी अधिक होगी उसका अनुवाद उतना ही कठिन होता जाएगा। सफल अनुवाद के लिए आवश्यक है कि भाव के साथ मूल कृति की शैलीपरक विशेषताओं को भी लक्ष्य भाषा में अवतरित किया जाए। सफल अनुवाद का मूल मंत्र यह है कि अनुवादक में ऐसी क्षमता होनी चाहिए जिससे वह इन सभी प्रकार की विशेषताओं को लक्ष्य भाषा में सुरक्षित रख सके। किंतु अनुवादक को कई कारणों से इनका अनुपात भी बदलना पड़ता है। कई बार मूल अभिव्यक्ति व्याकरणिक अभिधा के सहारे करनी पड़ती है।

### SubQuestion No : 16

Q.16 निम्न में से 'श्रीवृद्धि' का अर्थ नहीं है-

