



GOVT. OF NCT OF DELHI
Delhi Subordinate Services Selection Board
FC-18, Institutional Area, Karkardooma, Delhi – 110092.
www.dsssb.delhigovt.nic.in

Participant Name	Sahil Saini
Test Center Name	Adarsh Pariksha Kendra CENTER C - Gate No 2 - Noida Sector 64
Test Date	27/03/2026
Test Time	5:00 PM - 7:00 PM
Subject	Multi Tasking Staff

Section : General intelligence and Reasoning Ability

Q.1 Refer to the following letter series and answer the question.

(Left) E F R T G B H N J M K L O P Y T R F C D E R F S X V M K L P L E R (Right)

How many letters are there in the English alphabetical series between the letter which is third from the right end and third from the left end?11310

- Ans
- 1. 7
 - 2. 4
 - 3. 5
 - 4. 6

Q.2 Each of P, Q, R, S, X, Y and Z has an exam on a different day of a week starting from Monday and ending on Sunday of the same week.

Only two people have exam before X. Only one person has exam after P. Only three people have exam between X and S. Only one person has exam between Y and R. Q has exam immediately before Y.

How many people have exam between Z and Y?

- Ans
- 1. Two
 - 2. Four
 - 3. Three
 - 4. One

Q.3 A,B,C,D,E,F and G are sitting around a circular table facing the centre.

Only one person sits between E and F when counted from the right of E.

Only one person sits between F and B. Only one person sits between E and C.Only

two people sit between G and B. Only one person sits between D and C.

How many people sit between A and E when counted from the right of E?

- Ans
- 1. 3
 - 2. 0
 - 3. 2
 - 4. 5

Q.4 Refer to the following series and answer the question.

(Left)

I A Y E I A H O Y E O H E Y B O B D I B D O A K H H H F

D S D (Right)

How many letters are there in the English alphabetical order between the letter which is fifth from the right end and third from the left end of the series?15759

- Ans
- 1. 13
 - 2. 14
 - 3. 15
 - 4. 16

Q.5 Read the given statements and conclusions carefully. Assuming that the information given in the statements is true, even if it appears to be at variance with commonly known facts, decide which of the given conclusions logically follow(s) from the statements.

Statements:

No drums are rings.

No logs are rings.

Conclusions:

(I): No logs are drums.

(II): Some drums are logs.

- Ans
- 1. Neither conclusion (I) nor (II) follows
 - 2. Both conclusions (I) and (II) follow
 - 3. Only conclusion (I) follows
 - 4. Only conclusion (II) follows

Q.6 In a certain code language, 'her white shirt' is coded as 'yr op hz' and 'white looks clean' is coded as 'tf ae yr'. How is 'white' coded in the given language?

- Ans
- 1. yr
 - 2. op
 - 3. tf
 - 4. ae

Q.7 Select the option that represents the correct order of the given words as they would appear in an English dictionary.

1. Ephemeral
2. Escaping
3. Established
4. Employer
5. Elective

- Ans
- 1. 1, 2, 3, 5, 4
 - 2. 2, 3, 5, 1, 4
 - 3. 2, 1, 3, 5, 4
 - 4. 5, 4, 1, 2, 3

Q.8 N is the father of T. L is the daughter of Q. R is the wife of Q. T is the brother of R. How is N related to L?

- Ans
- 1. Wife's father
 - 2. Daughter's husband
 - 3. Mother's father
 - 4. Father's father

Q.9 Refer to the following number series and answer the question that follows.
Counting to be done from left to right only. (All numbers are single-digit numbers only.)

(Left) 2 3 6 2 5 6 2 1 5 9 4 5 6 3 2 1 5 9 8 7 5 3 6 2 1 5 9 8 7 4 5 1 6 2 3 9 5 4 1 5 6 2 3 6
(Right)

How many such even digits are there each of which is immediately preceded by an even digit and immediately followed by an odd digit?³⁶⁵⁶

- Ans 1. 5
 2. 7
 3. 6
 4. 3

Q.10 Select the option that represents the correct order of the given words as they would appear in an English dictionary.

1. Spending
2. Spectral
3. Specimen
4. Safeguard
5. Stardust

- Ans 1. 4, 3, 2, 1, 5
 2. 3, 5, 2, 1, 4
 3. 5, 2, 1, 3, 4
 4. 3, 5, 1, 4, 2

Q.11 In this question, a statement is followed by two conclusions. Find out which conclusion is true based on the given statement.

Statement: $A = B < C \leq D < E$

Conclusions:

I. $A < D$

II. $B < E$

- Ans 1. Both I and II are true
 2. Neither I nor II is true
 3. Only II is true
 4. Only I is true

Q.12 A, B, C, J, K, L and I are sitting around a circular table, facing the centre of the table. Only one person sits between L and A, when counted from the right of L. Only one person sits between A and C, when counted from the left of C. Only one person sits between L and K, when counted from the right of K. Only two people sit between I and C, when counted from the left of C. Only one person sits between J and K, when counted from the left of K. Who sits third to the right of B?

- Ans 1. L
 2. C
 3. A
 4. J

Q.13 In a certain code language, 'LATE' is coded as '3517' and 'TURN' is coded as '6438'. What is the code for 'T' in the given code language?⁵³³

- Ans 1. 1
 2. 6
 3. 8
 4. 3

Q.14 In this question, a statement is followed by two conclusions. Find out which conclusion is true based on the given statement.

Statement: $S > W > T < R \leq Y$

Conclusions:

I. $T < Y$

II. $R < S$

- Ans
- 1. Neither I nor II is true
 - 2. Only I is true
 - 3. Only II is true
 - 4. Both I and II are true

Q.15 In a certain code language, 'KIND' is coded as '42' and 'FORM' is coded as '56'. What is the code for 'ONTO' in the given code language?

- Ans
- 1. 64
 - 2. 68
 - 3. 62
 - 4. 60

Q.16 F is the son of G. G is the daughter of R. R is the father of S. S is the brother of T. How is F related to T?

- Ans
- 1. Sister's son
 - 2. Father
 - 3. Brother
 - 4. Son

Q.17 Deepa ranked 13th from the top and 7th from the bottom in her class. How many students are there in her class?

- Ans
- 1. 21
 - 2. 19
 - 3. 20
 - 4. 18

Q.18 A certain number of people are standing in a row facing north. If Neha is 15th from the left end and 11th from the right end of the row, how many people are there in the row?

- Ans
- 1. 26
 - 2. 27
 - 3. 25
 - 4. 24

Q.19 Seven boxes W, X, Y, Z, G, H and I are kept one over the other but not necessarily in the same order. X is kept immediately above Y. No box is kept above G. Only three boxes are kept between G and Y. Only one box is kept between I and X. Only four boxes are kept between I and W. Z is kept at some place above H. Which box is kept second below Z?

- Ans
- 1. W
 - 2. I
 - 3. Y
 - 4. X

Q.20 If each letter in the word BACKGROUND is changed to the letter immediately following it in the English alphabetical order, then how many letters are there in the English alphabetical series between the letter which is second from the left end and second from the right end in the new letter-cluster thus formed?¹¹²⁰⁸

- Ans
- 1. 13
 - 2. 11
 - 3. 10
 - 4. 12

Section : General intelligence and Reasoning Ability¹

Q.1 Based on the English alphabetical order, three of the following four letter-cluster pairs are alike in a certain way and thus form a group. Which is the one that does not belong to that group?

(Note: The odd one out is not based on the number of consonants/vowels or their position in the letter cluster.)⁷⁰³⁰

- Ans
- 1. AG-XW
 - 2. QW-NM
 - 3. HN-ED
 - 4. CJ-ZY

Q.2 CFGM is related to FIJP in a certain way based on the English alphabetical order. In the same way, SBKT is related to VENW. To which of the given options is RIJL related, following the same logic?³³³⁷

- Ans
- 1. SLMO
 - 2. ULMO
 - 3. UJNM
 - 4. TJNM

Q.3 What should come in place of the '?' in the given series?

150, 153, 156, 159, ?, 165

- Ans
- 1. 163
 - 2. 164
 - 3. 161
 - 4. 162

Q.4 Based on the English alphabetical order, three of the following four letter cluster pairs are alike in a certain way and thus form a group. Which is the one that does not belong to that group?

(Note: The odd one out is not based on the number of consonants/vowels or their position in the letter cluster.)⁷⁰²⁸

- Ans
- 1. CM - TQ
 - 2. WG - NK
 - 3. NW - DA
 - 4. ZJ - QN

Q.5 What will come in place of the '?' in the following equation, if '+' and '-' are interchanged?

$$15 + 6 - 8 \times 2 = ?$$

- Ans
- 1. 25
 - 2. 35
 - 3. 28
 - 4. 18

Q.6 Select the set in which the numbers are related in the same way as are the numbers of the following sets.

(NOTE : Operations should be performed on the whole numbers, without breaking down the numbers into its constituent digits. E.g. 13 - Operations on 13 such as adding /deleting /multiplying etc. to 13 can be performed. Breaking down 13 into 1 and 3 and then performing mathematical operations on 1 and 3 is not allowed)
(30,62,154)
(88,66,220)

- Ans
- 1. (70,14,98)
 - 2. (77,55,87)
 - 3. (23,17,67)
 - 4. (48,35,98)

Q.7 What should come in place of the '?' in the given series?

1, 3, 7, 13, 21, ?

- Ans
- 1. 33
 - 2. 32
 - 3. 31
 - 4. 30

Q.8 What should come in place of '?' in the given series?

56 46 38 32 28 ?

- Ans
- 1. 30
 - 2. 26
 - 3. 24
 - 4. 28

Q.9 Identify the figure given in the options which when put in place of ? will logically complete the series.

←	↑	↑	@	@	?
+	@	←	@	↑	+
		←	+	←	

Ans

✗ 1.

↑	@
+	→

✗ 2.

+	@
↑	←

✗ 3.

↑	←
@	+

✓ 4.

@	+
↑	←

Q.10 Read the given statements and conclusions carefully. Assuming that the information given in the statements is true, even if it appears to be at variance with commonly known facts, decide which of the given conclusion(s) logically follow(s) from the statements.

Statements:

No Helicopters are Ships.

All Ships are Skateboards.

Conclusions:

I) No Skateboards are Helicopters.

II) Some Helicopters are Skateboards.

- Ans
- ✗ 1. Only conclusion (I) follows.
 - ✗ 2. Both conclusions (I) and (II) follow.
 - ✗ 3. Only conclusion (II) follows.
 - ✓ 4. Neither conclusion (I) nor (II) follows.

Q.11 Each of the digits in the number 7854316 is arranged in ascending order from left to right. What will be the sum of the digits which are second from the left and second from the right in the new number thus formed?

- Ans
- ✓ 1. 10
 - ✗ 2. 8
 - ✗ 3. 9
 - ✗ 4. 7

Q.12 Based on the English alphabetical order, three of the following four letter-cluster pairs are alike in a certain way and thus form a group. Which is the one that does not belong to that group?
(Note: The odd one out is not based on the number of consonants/vowels or their position in the letter cluster.)

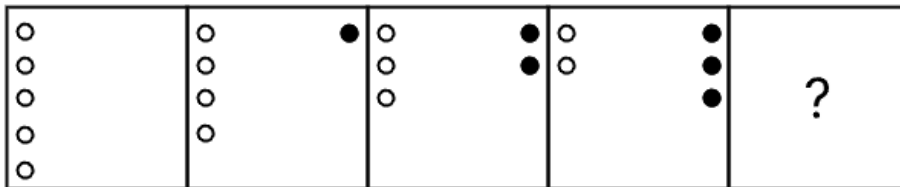
- Ans
- 1. JO - NS
 - 2. KS - RL
 - 3. QV - UZ
 - 4. CH - GL

Q.13 Select the pair which follows the same pattern as that followed by the two pairs given below. Both pairs follow the same pattern.

IKG : FHD
BDZ : YAW

- Ans
- 1. STO : OQM
 - 2. STO : PRN
 - 3. SUQ : ORM
 - 4. TVR : QSO

Q.14 Identify the figure given in the options which when put in place of ? will logically complete the series?



Ans

- 1.
- 2.
- 3.
- 4.

Q.15 Select the set in which the numbers are related in the same way as are the numbers of the following sets.

(NOTE : Operations should be performed on the whole numbers, without breaking down the numbers into its constituent digits. E.g. 13 - Operations on 13 such as adding /deleting /multiplying etc. to 13 can be performed. Breaking down 13 into 1 and 3 and then performing mathematical operations on 1 and 3 is not allowed)
(85, 76, 165)
(20, 40, 64)

- Ans 1. (76, 39, 99)
 2. (70, 83, 157)
 3. (53, 11, 88)
 4. (78, 38, 98)

Q.16 If L stands for \div , M stands for \times , N stands for $+$, and O stands for $-$, what will come in place of the question mark (?) in the following equation?
12 M 4 N 20 L 5 O 10 = ?

- Ans 1. 42
 2. 51
 3. 40
 4. 45

Q.17 What will come in the place of '?' in the following equation, if '+' and '-' are interchanged and ' \times ' and ' \div ' are interchanged?
 $32 + 18 \div 4 \times 6 - 3 = ?$

- Ans 1. 22
 2. 21
 3. 23
 4. 25

Q.18 What will come in the place of '?' in the following equation, if '+' and '-' are interchanged and ' \times ' and ' \div ' are interchanged?
 $30 \div 3 + 8 \times 2 - 4 = ?$

- Ans 1. 75
 2. 83
 3. 90
 4. 93

Q.19 SWXY is related to WABC in a certain way based on the English alphabetical order. In the same way, HLMN is related to LPQR. To which of the following is NRST related, following the same logic?4638

- Ans 1. RVWX
 2. RWVB
 3. RVVX
 4. RUVX

Q.20 Select the set in which the numbers are related in the same way as are the numbers of the following sets.

(NOTE : Operations should be performed on the whole numbers, without breaking down the numbers into their constituent digits. E.g. 13 - Operations on 13 such as adding / subtracting / multiplying etc. to 13 can be performed. Breaking down 13 into 1 and 3 and then performing mathematical operations on 1 and 3 is not allowed.)

(21,17,46)

(20,16,44)

- Ans**
- 1. (2,10,4)
 - 2. (15,18,37)
 - 3. (18,10,36)
 - 4. (9,12,5)

Section : **General Awareness**

Q.1 In July 2025, which of the following was commissioned by the Indian Navy to enhance maritime command?

- Ans**
- 1. INS Kalvari
 - 2. INS Vikrant
 - 3. INS Trikand
 - 4. INS Tamal

Q.2 At which of the following cities was Khelo India Water Sports Festival 2025 held?

- Ans**
- 1. Patna
 - 2. Srinagar
 - 3. Guwhati
 - 4. Jaipur

Q.3 Which leader founded the All-India Home Rule League in 1916 to demand self-government for India?

- Ans**
- 1. Annie Besant
 - 2. Jawaharlal Nehru
 - 3. Subhas Chandra Bose
 - 4. C. Rajagopalachari

Q.4 In macroeconomics, what is the term for the aggregate of wages, rent, interest, and profits earned by the normal residents of a country during a given period?

- Ans**
- 1. Disposable Income
 - 2. Private Income
 - 3. National Income
 - 4. Personal Income

Q.5 In the 5th Soft Hockey National Championship 2025-26 senior men's final, which team won gold?

- Ans**
- 1. Rajasthan
 - 2. Punjab
 - 3. Maharashtra
 - 4. Bihar

Q.6 In how many low-crop-productivity districts will the 'Prime Minister Dhan-Dhaanya Krishi Yojana' be launched in 2025?

- Ans
- 1. 25
 - 2. 50
 - 3. 75
 - 4. 100

Q.7 Who is attributed with the following slogans urging Indians to fight for independence?

1. "Jai Hind" (Victory to India)
2. "Delhi Chalo" (Let's march to Delhi)

- Ans
- 1. VD Savarkar
 - 2. Subhash Chandra Bose
 - 3. Ram Prasad Bismil
 - 4. Ashfaqullah Khan

Q.8 What does the term "National Income" refer to?

- Ans
- 1. The total monetary value of intermediate goods used in production during a financial year
 - 2. The total earnings from international trade (exports minus imports) of a country in a financial year
 - 3. The total monetary value of all final goods and services produced by the normal residents of a country in a financial year
 - 4. The total value of goods and services produced within a country's geographical borders, including by foreigners

Q.9 Who won the 'Sportstar of the Year (Male)' award at the 2025 Sportstar Aces Awards?

- Ans
- 1. Swapnil Kusale
 - 2. Jay Shah
 - 3. Neeraj Chopra
 - 4. P.R. Sreejesh

Q.10 In macroeconomic analysis, what is the term for a situation in which overall output increases while the employment does not increase proportionately?

- Ans
- 1. Underemployment
 - 2. Jobless Growth
 - 3. Full Employment
 - 4. Labour Expansion

Q.11 Which language is traditionally used in Vedic texts like the R̥gveda and Upaniṣhads?

- Ans
- 1. Prakrit
 - 2. Pali
 - 3. Tamil
 - 4. Sanskrit

Q.12 What does the Viksit Bharat-Guarantee for Rozgar and Ajeevika Mission (Gramin) Act, 2025, primarily guarantee?

- Ans
- 1. Subsidies for agritech startups to generate employment
 - 2. Free healthcare and employment for all rural citizens
 - 3. 125 days of wage employment for rural households
 - 4. Employment for the head of each urban household

Q.13 What is the specific age group of children for whom the Right to Education Act (2009) mandates free and compulsory education?

- Ans
- 1. Children between 6 and 14 years
 - 2. Children between 3 and 10 years
 - 3. Children between 5 and 15 years
 - 4. Children between 6 and 18 years

Q.14 According to election calendars, which Union Territory is scheduled for elections in 2026?

- Ans
- 1. Daman & Diu
 - 2. Puducherry
 - 3. Chandigarh
 - 4. Lakshadweep

Q.15 Bharatmala Pariyojana is related to which sector?

- Ans
- 1. Highways
 - 2. Communication
 - 3. Railways
 - 4. School education

Q.16 Which major defence procurement package was approved by the Government of India in February 2026 (approx. ₹3.6 lakh crore)?

- Ans
- 1. 114 Rafale jets
 - 2. New nuclear submarines
 - 3. Basic infantry gear modernization
 - 4. INS Vikrant upgrade

Q.17 Sardar Vallabhbhai Patel is known as ____.

- Ans
- 1. the Grand Old Man of India
 - 2. Sir Patel
 - 3. the Iron Man of India
 - 4. Chacha Patel

Q.18 The Swadeshi Movement began as a response to which of the following British Indian Government's actions?

- Ans
- 1. Hunter Commission Report
 - 2. Partition of Bengal
 - 3. Introduction of Rowlatt Act
 - 4. Jallianwala Bagh Massacre

Q.19 The Salt March, also known as the Dandi March, was led in 1930 by whom?

- Ans
- 1. Mahatma Gandhi
 - 2. Pyarelal Nayyar
 - 3. Jawaharlal Nehru
 - 4. Rajendra Prasad

Q.20 The requirement that a bank must keep a fixed percentage of its total deposits as cash reserves with the central bank is known as what?

- Ans
- 1. Statutory Liquidity Ratio
 - 2. Bank Rate
 - 3. Cash Reserve Ratio
 - 4. Repo Rate

Section : General Awareness1

Q.1 Which architectural feature of the Sun Temple at Konark reflects its design as a colossal stone chariot of the Sun God?

- Ans**
- 1. The incorporation of twenty-four massive stone wheels
 - 2. The adoption of a circular ground plan
 - 3. The use of wooden structural elements
 - 4. The absence of exterior sculptural decoration

Q.2 Which of the given options is NOT a coastal state of India?

- Ans**
- 1. Gujarat
 - 2. Kerala
 - 3. Madhya Pradesh
 - 4. Tamil Nadu

Q.3 As per the census of 2011, what percentage of India's population in 2011 were Buddhists?

- Ans**
- 1. 1.2%
 - 2. 0.7%
 - 3. 0.4%
 - 4. 2.0%

Q.4 During dental caries, bacteria break down which substance to form acids that damage the teeth?

- Ans**
- 1. Fats
 - 2. Starch
 - 3. Proteins
 - 4. Sugars

Q.5 Which of the following is classified as a carbohydrate in living organisms?

- Ans**
- 1. Enzymes
 - 2. Glucose
 - 3. Cholesterol
 - 4. Amino acids

Q.6 Which among the following rulers built the Khajuraho group of monuments?

- Ans**
- 1. Pallavas
 - 2. Chandelas
 - 3. Chalukyas
 - 4. Bundelas

Q.7 Which nutrient helps in the growth and repair of body tissues?

- Ans**
- 1. Water
 - 2. Proteins
 - 3. Carbohydrates
 - 4. Fats

Q.8 Which condition results from the presence of an extra chromosome 21?

- Ans**
- 1. Haemophilia
 - 2. Colour blindness
 - 3. Sickle cell anemia
 - 4. Down syndrome

Q.9 Which organ in the human digestive system is mainly responsible for nutrient absorption?

- Ans**
- 1. Esophagus
 - 2. Large intestine
 - 3. Small intestine
 - 4. Stomach

Q.10 Which Article imposes the duty on the State to apply Directive Principles in making laws?

- Ans**
- 1. Article 31
 - 2. Article 37
 - 3. Article 35
 - 4. Article 27

Q.11 How do Fundamental Rights and Fundamental Duties work together?

- Ans**
- 1. Fundamental Rights can be ignored, but Duties must be followed
 - 2. Fundamental Duties guide citizens to exercise their Rights responsibly
 - 3. Fundamental Rights are given to children, Duties are for senior citizens
 - 4. Fundamental Duties apply only to government officials

Q.12 A fort in Hyderabad is known for its acoustic features, massive gates, and historical association with the Qutb Shahi dynasty. Which fort is this?

- Ans**
- 1. Daulatabad Fort
 - 2. Mehrangarh Fort
 - 3. Golconda Fort
 - 4. Chittorgarh Fort

Q.13 What is an important consideration for evaluating proposals and plans related to energy infrastructure development?

- Ans**
- 1. Ignoring public participation
 - 2. Environmental impact and public welfare
 - 3. Limited to specific stakeholders
 - 4. Only economic benefits

Q.14 Which among the following atomic power stations is situated near the Arabian Sea coast in Maharashtra?

- Ans**
- 1. Narora
 - 2. Rawatbhata
 - 3. Kalpakkam
 - 4. Tarapur

Q.15 What is the primary purpose of Parliamentary Committees?

- Ans**
- 1. To recommend the dissolution of the Lok Sabha
 - 2. To supervise judicial appointments
 - 3. To reduce the burden of legislative work on Parliament
 - 4. To approve all laws before they are introduced

Q.16 Which of the following is NOT a typical characteristic of Hindu temple architecture?

- Ans**
- 1. Garbhagriha
 - 2. Mandapa
 - 3. Shikhara
 - 4. Dome

Q.17 Which river does NOT originate from the Peninsular Plateau?

- Ans
- 1. Ganga
 - 2. Godavari
 - 3. Krishna
 - 4. Narmada

Q.18 What is the minimum percentage of seats reserved for women at each level of Panchayati Raj Institutions (PRIs) in India?

- Ans
- 1. 50.33%
 - 2. 25%
 - 3. 33.33%
 - 4. 66.66%

Q.19 What happens if the Prime Minister of India resigns?

- Ans
- 1. The President continues governance
 - 2. The Supreme Court takes over
 - 3. The entire Council of Ministers must resign
 - 4. Elections are held immediately

Q.20 The Tirukkural, a classical Tamil ethical text consisting of 1330 couplets and regarded as a foundational contribution to Tamil's recognition as a Classical Language, is traditionally attributed to which ancient Tamil poet?

- Ans
- 1. Tiruvalluvar
 - 2. Ilango Adigal
 - 3. Subramania Bharati
 - 4. Kambar

Section : Arithmetical and Numerical Ability

Q.1 The average of all prime numbers between 30 and 66 is:

- Ans
- 1. 48
 - 2. 47
 - 3. 48.6
 - 4. 46.5

Q.2 Find the square root of 0.000081.

- Ans
- 1. 0.009
 - 2. 0.006
 - 3. 0.003
 - 4. 0.081

Q.3 The height of a tree increases at a rate of 20% per year. If it is now 25 feet tall, how tall (in feet) will it be after 2 years?

- Ans
- 1. 34
 - 2. 30
 - 3. 36
 - 4. 32

Q.4 Harbhajan deposited a certain sum of money at 20% per annum, compounded annually. At the end of 2 years, the total amount received was ₹26,244. Find the sum of money deposited by Harbhajan.

- Ans
- 1. ₹18,225
 - 2. ₹18,440
 - 3. ₹18,065
 - 4. ₹18,191

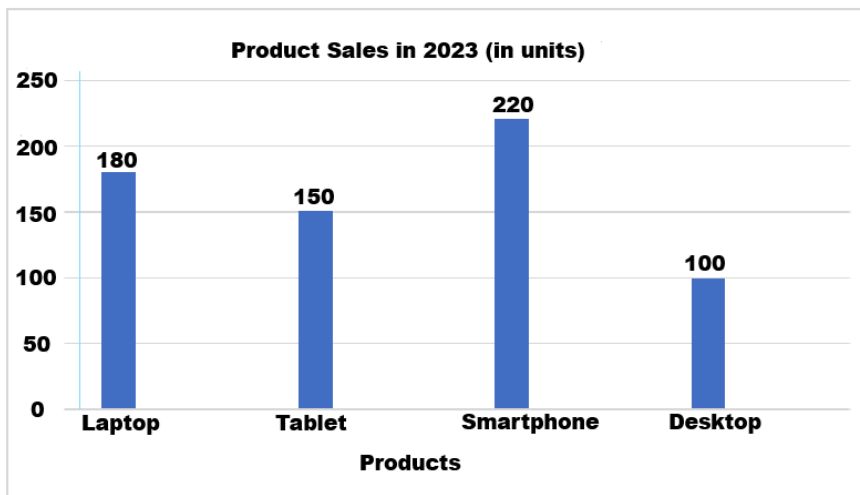
Q.5 If p and q are prime numbers such that $p^2 + q^2 = 74$. Then what is the value of $p + q$?

- Ans
- 1. 12
 - 2. 9
 - 3. 10
 - 4. 8

Q.6 In a club where 60% of the members are male and 40% are female, what is the average age (in years) of all the members, if the average age of the men is 30 years and that of the women is 35 years?

- Ans
- 1. 32
 - 2. 34
 - 3. 33
 - 4. 31

Q.7 The bar graph shows product sales in 2023.

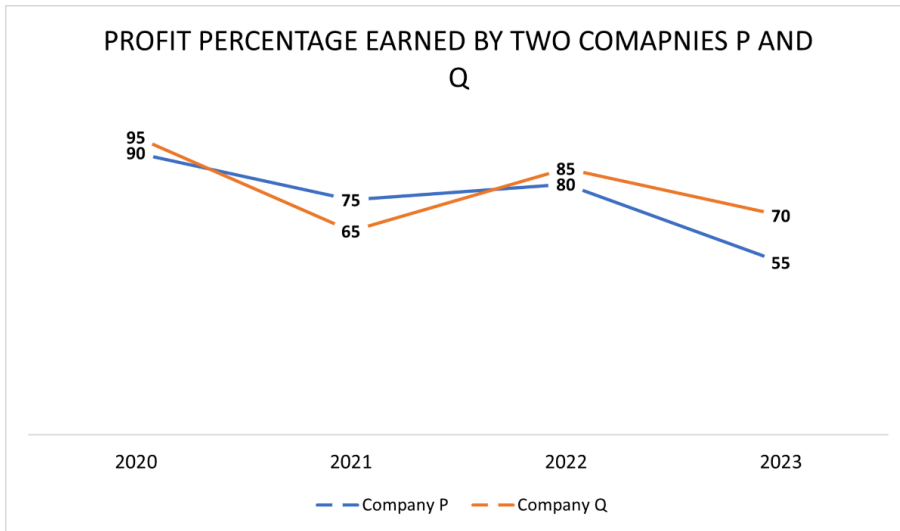


What is the difference between the maximum and minimum sales (in units)?

- Ans
- 1. 150
 - 2. 200
 - 3. 100
 - 4. 120

Q.8 Study the given graph and answer the question that follows.

The following line graph represents the profit percentage earned by two companies P and Q on their investment.



In which year is the ratio of investment to profit maximum for company Q?

- Ans
- 1. 2020
 - 2. 2023
 - 3. 2021
 - 4. 2022

Q.9 The length of a wooden stick is first decreased by 10% and the resulting length is again decreased by 40%. The overall percentage change in the length of the wooden stick is:

- Ans
- 1. 46%, Increase
 - 2. 42%, Increase
 - 3. 46%, Decrease
 - 4. 42%, Decrease

Q.10 A cricketer had an average score over 53 innings. In his 54th inning, he was dismissed for zero, which caused his average to decrease by 5 runs. What is his new average (in runs) after 54 innings?

- Ans
- 1. 260
 - 2. 275
 - 3. 265
 - 4. 270

Q.11 A sells an article to B at 20% profit. B spends ₹400 on its maintenance and is sold to C at a 10% loss. Further, C sold this article at a 25% profit to D. If D paid ₹34,200 to C, then the amount received by A was:

- Ans
- 1. ₹32,000
 - 2. ₹30,000
 - 3. ₹27,000
 - 4. ₹25,000

Q.12 Find x, if $\frac{2^3 \times 4^5}{(0.2)^3} = 2^x \times 10^3$

- Ans
- 1. 10
 - 2. 12
 - 3. -10
 - 4. 14

Q.13 In what duration (in years) will ₹9,600 fetch a simple interest of ₹1,080 at 3% per annum rate of interest?

- Ans
- 1. 2.75
 - 2. 4.75
 - 3. 3.75
 - 4. 7.5

Q.14 f 79. Due to this, the average marks of the class got decreased by $\frac{5}{4}$.

- Ans
- 1. 31
 - 2. 40
 - 3. 41
 - 4. 47

Q.15 Find x, if $0.03 \times x = \frac{121}{0.121} \times 0.21$.

- Ans
- 1. 70000
 - 2. 7000
 - 3. 70
 - 4. 700

Q.16 Rohit deposited a certain sum of money at 20% per annum, compounded annually. At the end of 2 years, the total amount received was ₹13,824. Find the sum of money deposited by Rohit.

- Ans
- 1. ₹9,404
 - 2. ₹9,603
 - 3. ₹9,248
 - 4. ₹9,600

Q.17 A vendor bought lemons at 21 for a rupee. How many must he sell for a rupee to gain 50%?

- Ans
- 1. 16
 - 2. 18
 - 3. 14
 - 4. 15

Q.18 The population of a town was 1,80,000 three years ago. It increased by 2.5%, 3% and 5% in the last three years. Find the present population (rounded off to the nearest integer) of the town.

- Ans
- 1. 1,99,357
 - 2. 1,97,890
 - 3. 1,99,537
 - 4. 1,98,357

Q.19 A factory's production in 2009 was 55,600. In 2010, the production increased by 13%. What was the production of the factory in 2010?⁵⁷

- Ans
- 1. 62,828
 - 2. 62,516
 - 3. 62,735
 - 4. 62,419

Q.20 What will be the compound interest on a sum of ₹5,000 after 2 years at the rate of 25% per annum?

- Ans
- 1. ₹2,612.5
 - 2. ₹2,912.5
 - 3. ₹2,812.5
 - 4. ₹2,712.5

Section : Arithmetical and Numerical Ability1

Q.1 A milk distributor buys milk from three milkmen in the ratio 4:7:10. All three add water to their milk. The ratio of water to milk in the milk supplied by the three milkmen is 1:3, 2:5 and 3:7 respectively. The milk thus supplied is mixed by the distributor and sold further. What is the quantity of milk (in litres) in 105 litres of such a mixture of milk and water?

- Ans
- 1. 82
 - 2. 84
 - 3. 75
 - 4. 72

Q.2 A well with 4.3 m radius is dug 63 m deep. Find the volume (in m³) of the earth taken out of it. (Use $\pi = 22/7$)

- Ans
- 1. 3836.97
 - 2. 3344.07
 - 3. 3212.14
 - 4. 3661.02

Q.3 A cone is hollowed out from a solid cylinder, both having the same base radius and height. The height of the cylinder is 28 cm and the radius is 7 cm. The remaining solid is melted to form solid spherical balls of the same radius (7 cm) and there is no wastage in the process. If each ball is sold for ₹125 and the cost of the original cylinder is ₹175, then how much profit (in percentage) is earned by selling the spherical balls?

- Ans
- 1. $42\frac{5}{7}\%$
 - 2. $44\frac{4}{7}\%$
 - 3. $44\frac{5}{7}\%$
 - 4. $42\frac{6}{7}\%$

Q.4 A cistern is 30% full. Tap X can fill the empty cistern in 28 minutes, while tap Y can empty the full cistern in 20 minutes. If both the taps are opened together, then in how much time will it be empty?

- Ans
- 1. 18 minutes
 - 2. 21 minutes
 - 3. 15 minutes
 - 4. 20 minutes

Q.5 A man rows 56 km upstream in 8 hours and 99 km downstream in 9 hours. What is the speed (in km/h) of the man in still water?

- Ans
- 1. 10
 - 2. 9
 - 3. 8
 - 4. 11

Q.6 The ratio of Seema's to Manisha's present age is 5 : 7. After 4 years, the ratio of th

- Ans
- 1. 10 years
 - 2. 5 years
 - 3. 15 years
 - 4. 20 years

Q.7 Certain amount was distributed among Anand, Bhaskar and Sunder. After deducting a commission of ₹260, ₹280 and ₹320 from them respectively, they have their amounts in the ratio 9 : 13 : 8. If Anand has an amount of ₹63,260, what is the total amount distributed to all of them?

- Ans
- 1. ₹2,01,860
 - 2. ₹2,10,680
 - 3. ₹2,10,806
 - 4. ₹2,10,860

Q.8 Mukesh starts a business with ₹3,19,20 and, after 8 months, Nitin joins the ratio 7 : 11. What is Nitin's contribution to the capital?

- Ans
- 1. ₹3,50,480
 - 2. ₹4,50,480
 - 3. ₹1,50,480
 - 4. ₹2,50,480

Q.9 A shopkeeper marks an article 25% above the cost price. During a festival sale, he gives a discount of 20% on the marked price. If the final selling price is ₹960, what is the cost price of the article?

- Ans
- 1. ₹980
 - 2. ₹1,050
 - 3. ₹960
 - 4. ₹1,020

Q.10 A and B can do a piece of work in 18 days, B and C in 24 days and C and A in 54 days. In how many days will they finish the work together?

- Ans
- 1. $15\frac{4}{23}$
 - 2. $19\frac{8}{21}$
 - 3. $20\frac{3}{14}$
 - 4. $17\frac{7}{25}$

Q.11 Two trains of lengths 120 m and 180 m are running in opposite directions at speeds 45 km/h and 63 km/h. How much time will they take to cross each other?

- Ans
- 1. 10 seconds
 - 2. 6 seconds
 - 3. 8 seconds
 - 4. 12 seconds

Q.12 A train, 300 metres long, comes from behind and overtakes another train, $(300 - x)$ metres long and travelling in the same direction, in 30 seconds. If the speed of the slower train is 54 km/hr and that of the faster train is 114 km/hr, then what is the value of x ?

- Ans
- 1. 50
 - 2. 150
 - 3. 100
 - 4. 200

Q.13 Amit buys mangoes at the rate of 3 kg for ₹15 and sells them at 5 kg for ₹50. To earn ₹105 as profit, how many kilograms of mangoes must he sell?

- Ans
- 1. 24
 - 2. 22
 - 3. 23
 - 4. 21

Q.14 Two trains start from the same station at the same time, one going east and the other going north. The speed of the eastbound train is 54 km/hr and the speed of the northbound train is 72 km/hr. After how much time will they be 300 km apart?

- Ans
- 1. 3 hrs 20 min
 - 2. 3 hrs
 - 3. 4 hrs
 - 4. 3 hrs 40 min

Q.15 Two pipes, P and Q, when each is working alone, can fill an empty tank in 36 hours and 45 hours, respectively. A waste pipe, R, can empty the completely filled tank in 30 hours. Initially only pipes P and Q are opened. After 10 hours, R is also opened. In how much time from the start will the tank be full?"

- Ans
- 1. 35 hours
 - 2. 30 hours
 - 3. 45 hours
 - 4. 40 hours

Q.16 The volume (in m^3) of a cube, each of whose edges is 46 m, is:285

- Ans
- 1. 97336
 - 2. 97421
 - 3. 97327
 - 4. 97185

Q.17 A can build a wall in 12 days, while B can build it in 18 days. They work together for 4 days, then B leaves. In how many days can A alone complete the remaining work?

- Ans
- 1. $6\frac{1}{3}$
 - 2. $5\frac{1}{3}$
 - 3. $5\frac{2}{3}$
 - 4. $6\frac{2}{3}$

Q.18 A shop offers "Buy 5 kg rice and get 1 kg free". If the price per kg of

- Ans
- 1. ₹680
 - 2. ₹660
 - 3. ₹600
 - 4. ₹650

Q.19 A solid metallic sphere of radius 6 cm is melted and recast into a cylinder with a height of 8 cm. What will be the radius of the cylinder?

- Ans
- 1. 8 cm
 - 2. 7 cm
 - 3. 5 cm
 - 4. 6 cm

Q.20 If Raman had sold his bicycle for ₹546 more, he would have made a profit of 4% instead of a 10% loss. Find the selling price of the bicycle so that he could make a 15% profit. 3137

- Ans
- 1. ₹4485
 - 2. ₹4050
 - 3. ₹3600
 - 4. ₹4245

Section : Test of English Language and Comprehension

Q.1 Select the most appropriate option to fill in the blanks.

___ Taj Mahal stands on ___ banks of the Yamuna.

- Ans
- 1. A, an
 - 2. The, the
 - 3. A, no article required
 - 4. The, a

Q.2 In the given question, a sentence divided into different segments is given. The first segment is fixed, rearrange the other segments to form a coherent statement.

Written with a tea garden as the backdrop, the novel 'Dawor Aru Nai' by Jogesh Das (1955)/ on the society and the economy of Assam at (A)/ life of the tea labourers in the given scenario (B)/ the same time also looking into the struggling (C)/ dwelt largely on the impact of the Second World War (D)

- Ans
- 1. DACB
 - 2. BDAC
 - 3. DCAB
 - 4. BADC

Q.3 Complete the following sentence choosing the appropriate option relating to the use of articles.

_____ hour's treatment at _____ prestigious hospital costs one _____ fortune.1353

- Ans
- 1. an, an, a
 - 2. an, a, a
 - 3. a, an, a
 - 4. a, a, a

Q.4 Identify the most suitable word to complete the sentence.

They _____ to the store every Saturday.

- Ans
- 1. goes
 - 2. go
 - 3. went
 - 4. going

Q.5 Fill in the blank with the suitable article.

We had Indian summer last year, very warm until October.1432

- Ans
- 1. an
 - 2. the
 - 3. a
 - 4. No article

Q.6 Rectify the given sentence by choosing the correct option.

Properly speaking, older, people are less able to speak up for their rights.2923

- Ans
- 1. Generally speaking, older, people are less able to speak up for their rights.
 - 2. Quietly speaking, older, people are less able to speak up for their rights.
 - 3. Loudly speaking, older, people are less able to speak up for their rights.
 - 4. Carefully speaking, older, people are less able to speak up for their rights.

Q.7 Select the most appropriate adverb to fill in the blank.

She was _____ pleased by the compliments received last evening.

- Ans
- 1. usually
 - 2. often
 - 3. much
 - 4. early

Q.8 Choose the most appropriate option to fill in the blank.

Yesterday, the Prime minister with all his ministers _____ present at the meeting.

- Ans
- 1. are
 - 2. is
 - 3. were
 - 4. was

Q.9 Select the most appropriate article for the blank in the sentence given below.

He went for an adventurous ride in _____ night. 1506

- Ans
- 1. an
 - 2. a
 - 3. the
 - 4. No article required

Q.10 A sentence with a grammatical error is given below. Identify the error and select the sentence which is error-free and grammatically correct.

Charlie jumped under the car when he suddenly saw a huge pit before him. 4119

- Ans
- 1. Charlie jumped at the car when he suddenly saw a pit before him.
 - 2. Charlie jumped under the car when he suddenly saw a pit before him.
 - 3. Charlie jumped off the car when he suddenly saw a pit before him.
 - 4. Charlie jumped above the car when he suddenly saw a huge pit before him.

Q.11 Identify the error in the following sentence and choose the correct revision from the given options.

He was accused on stealing the documents from the office.

- Ans
- 1. He was accused by stealing the documents from the office.
 - 2. He was accused of stealing the documents from the office.
 - 3. He was accused for stealing the documents from the office.
 - 4. He was accused at stealing the documents from the office.

Q.12 Choose the most appropriate option to substitute the underlined word segment in the given sentence to correct it.

Meera found all the yoga poses in the class manageable and enjoyable, except in the challenging headstand.4092

- Ans
- 1. except that the challenging
 - 2. except from the challenging
 - 3. except to the challenging
 - 4. except for the challenging

Q.13 Select the proper arrangement of the following to make a meaningful and coherent sentence.

A. the artist completed B. after weeks of hard work C. her masterpiece D. and exhibited it at the gallery

- Ans
- 1. A B D C
 - 2. B A C D
 - 3. C A D B
 - 4. A C B D

Q.14 Correct the following sentence by replacing the underlined word from the options in order to correct the sentence:

Ghana had to increase food imports to meet the needs of a speedy growing population.

- Ans
- 1. fast
 - 2. hurried
 - 3. long
 - 4. slow

Q.15 Select the appropriate verb to complete the sentence.

The company is _____ the launch of its new product until the market conditions improve.⁵¹⁰⁶

- Ans**
- 1. accelerating
 - 2. considering
 - 3. postponing
 - 4. approving

Comprehension:

Read the given passage carefully and answer the questions that follow.

Inflation is often discussed using numbers, but its effects are deeply personal. When prices rise, households are affected in different ways. While general statistics might show a stable economy, individual experiences tell a different story. For low- and middle-income families, essential costs like food and housing take up a larger portion of their paycheck, making them more vulnerable. Many people view inflation as a temporary problem caused by outside events. However, internal factors like supply chain issues and government policy also matter. When wages do not grow as fast as prices, purchasing power erodes. This leads to more debt and higher stress, affecting social wellbeing. Governments often try to control inflation by changing interest rates. While this can slow down rising prices, it can also make it harder for people to find jobs or get loans. If leaders only look at the "big picture" of the economy, they may ignore how their choices increase inequality. Understanding inflation requires more than just looking at math; it requires looking at how wealth is distributed and how policies affect everyday life.

SubQuestion No : 16

Q.16 What is the central theme of the passage?

Comprehension:

Read the given passage carefully and answer the questions that follow.

Inflation is often discussed using numbers, but its effects are deeply personal. When prices rise, households are affected in different ways. While general statistics might show a stable economy, individual experiences tell a different story. For low- and middle-income families, essential costs like food and housing take up a larger portion of their paycheck, making them more vulnerable. Many people view inflation as a temporary problem caused by outside events. However, internal factors like supply chain issues and government policy also matter. When wages do not grow as fast as prices, purchasing power erodes. This leads to more debt and higher stress, affecting social wellbeing. Governments often try to control inflation by changing interest rates. While this can slow down rising prices, it can also make it harder for people to find jobs or get loans. If leaders only look at the "big picture" of the economy, they may ignore how their choices increase inequality. Understanding inflation requires more than just looking at math; it requires looking at how wealth is distributed and how policies affect everyday life.

SubQuestion No : 17

Q.17 Which fact is explicitly stated in the passage?

Comprehension:

Read the given passage carefully and answer the questions that follow.

Inflation is often discussed using numbers, but its effects are deeply personal. When prices rise, households are affected in different ways. While general statistics might show a stable economy, individual experiences tell a different story. For low- and middle-income families, essential costs like food and housing take up a larger portion of their paycheck, making them more vulnerable. Many people view inflation as a temporary problem caused by outside events. However, internal factors like supply chain issues and government policy also matter. When wages do not grow as fast as prices, purchasing power erodes. This leads to more debt and higher stress, affecting social wellbeing. Governments often try to control inflation by changing interest rates. While this can slow down rising prices, it can also make it harder for people to find jobs or get loans. If leaders only look at the "big picture" of the economy, they may ignore how their choices increase inequality. Understanding inflation requires more than just looking at math; it requires looking at how wealth is distributed and how policies affect everyday life.

SubQuestion No : 18

Q.18 What inference can be drawn about policy responses?

Comprehension:

Read the given passage carefully and answer the questions that follow.

Inflation is often discussed using numbers, but its effects are deeply personal. When prices rise, households are affected in different ways. While general statistics might show a stable economy, individual experiences tell a different story. For low- and middle-income families, essential costs like food and housing take up a larger portion of their paycheck, making them more vulnerable.

Many people view inflation as a temporary problem caused by outside events. However, internal factors like supply chain issues and government policy also matter. When wages do not grow as fast as prices, purchasing power erodes. This leads to more debt and higher stress, affecting social wellbeing.

Governments often try to control inflation by changing interest rates. While this can slow down rising prices, it can also make it harder for people to find jobs or get loans. If leaders only look at the "big picture" of the economy, they may ignore how their choices increase inequality. Understanding inflation requires more than just looking at math; it requires looking at how wealth is distributed and how policies affect everyday life.

SubQuestion No : 19

Q.19 How does the author connect economics to society?

Comprehension:

Read the given passage carefully and answer the questions that follow.

Inflation is often discussed using numbers, but its effects are deeply personal. When prices rise, households are affected in different ways. While general statistics might show a stable economy, individual experiences tell a different story. For low- and middle-income families, essential costs like food and housing take up a larger portion of their paycheck, making them more vulnerable.

Many people view inflation as a temporary problem caused by outside events. However, internal factors like supply chain issues and government policy also matter. When wages do not grow as fast as prices, purchasing power erodes. This leads to more debt and higher stress, affecting social wellbeing.

Governments often try to control inflation by changing interest rates. While this can slow down rising prices, it can also make it harder for people to find jobs or get loans. If leaders only look at the "big picture" of the economy, they may ignore how their choices increase inequality. Understanding inflation requires more than just looking at math; it requires looking at how wealth is distributed and how policies affect everyday life.

SubQuestion No : 20

Q.20 The word "erosion" most nearly means:

Section : Test of English Language and Comprehension1

Q.1 Select the most appropriate synonym of the given word.

Persistent

- Ans**
- 1. Changeable
 - 2. Corporal
 - 3. Composed
 - 4. Continuous

Q.2 Select the option that best explains the given proverb.

A feather in your cap

- Ans**
- 1. A difficult task to be accomplished
 - 2. A hidden advantage for success
 - 3. An embarrassing mistake to be avoided
 - 4. An achievement to be proud of

Q.3 Which of the following is a one-word substitute for 'A statement that appears contradictory but reveals a truth'?

- Ans**
- 1. Euphemism
 - 2. Paradox
 - 3. Axiom
 - 4. Oxymoron

Q.4 Choose the correct option.

One who collects coins is a/an _____.

- Ans
- 1. archivist
 - 2. numismatist
 - 3. philatelist
 - 4. cartographer

Q.5 Which of the following words is the correct substitute for the word segment given below?

Stubborn and uncooperative

- Ans
- 1. amiable
 - 2. affable
 - 3. cantankerous
 - 4. amicable

Q.6 Select the INCORRECTLY spelt word in the given sentence.

The accomodation looked clean, but the restaurant charged an unnecessary fee for separate service.

- Ans
- 1. unnecessary
 - 2. restaurant
 - 3. separate
 - 4. accomodation

Q.7 Find out the antonym of "rebellious".

- Ans
- 1. forgiven
 - 2. obedient
 - 3. skillful
 - 4. aggressive

Q.8 Replace the highlighted text with the correct one-word substitution given in the options.

Rajesh has an **unreasonable fear of open spaces**.

- Ans
- 1. Agoraphobia
 - 2. Astraphobia
 - 3. Anglophobia
 - 4. Atelophobia

Q.9 Choose the appropriate option that best expresses the meaning of the proverb 'it takes a thief to catch a thief'.

- Ans
- 1. A law-abiding citizen is best at catching wrongdoers
 - 2. A person with a clear conscience can apprehend a criminal
 - 3. Anyone with dedication can solve a crime
 - 4. Only a similar expert can catch another thief

Q.10 Find out the antonym of "intermediate".

- Ans
- 1. Temporary
 - 2. Extreme
 - 3. Impartial
 - 4. Normal

Q.11 Select the most appropriate meaning of the proverb:
Always put your best foot forward.

- Ans**
- 1. Always lead others with your best foot when walking.
 - 2. Always walk confidently and smartly to make an impression.
 - 3. Work hard and present yourself in the best possible way.
 - 4. Make sure you are always in your most comfortable shoes and dress.

Q.12 Select the word that is the most appropriate antonym of "meandering".

- Ans**
- 1. Leisurely
 - 2. Direct
 - 3. Wandering
 - 4. Winding

Q.13 Choose the appropriate option that best expresses the meaning of the proverb 'pride comes before a fall'.

- Ans**
- 1. Being proud always leads to good things
 - 2. People like to be full of pride before they can fall
 - 3. Confidence assures that everything will go well
 - 4. Being too proud can lead to mistakes and problems

Q.14 Rearrange the following segments to form a coherent and meaningful statement.
Raising serious concerns among experts and researchers (A) / Rapid growth in artificial intelligence (B) / has changed many industries and services (C) / while creating questions about data safety and job loss (D) /

- Ans**
- 1. A - B - C - D
 - 2. C - B - A - D
 - 3. D - A - C - B
 - 4. B - C - D - A

Q.15 Rectify the sentence by selecting the correct spelling of the highlighted word from the options.

The festival was filled with **effervesence** and excitement.

- Ans**
- 1. Effarvescence
 - 2. Effervesance
 - 3. Effervescance
 - 4. Effervescence

Comprehension:

Read the given passage carefully and answer the following questions.

Mobile phones have become an integral part of modern childhood, with many children using them at a very early age. Since most households rely on mobile devices for daily communication, children naturally gain access to these devices. Beyond making calls, children use phones for entertainment, such as playing games, listening to music, and watching videos.

While mobile phones help parents stay connected and ensure their child's safety, experts warn that unrestricted use can have harmful effects. Excessive screen time may reduce focus on schoolwork, limit physical activity, and disturb sleep patterns. These devices can also shorten attention spans and weaken real-life social skills.

For this reason, parental supervision is essential. Parents should establish clear boundaries, regularly monitor their children's online activities, and encourage responsible use of technology. By offering guidance and support, families can ensure that mobile phones serve as valuable resources instead of distractions.

SubQuestion No : 16

Q.16 Which option best describes the overall tone of the passage?

Comprehension:

Read the given passage carefully and answer the following questions.

Mobile phones have become an integral part of modern childhood, with many children using them at a very early age. Since most households rely on mobile devices for daily communication, children naturally gain access to these devices. Beyond making calls, children use phones for entertainment, such as playing games, listening to music, and watching videos.

While mobile phones help parents stay connected and ensure their child's safety, experts warn that unrestricted use can have harmful effects. Excessive screen time may reduce focus on schoolwork, limit physical activity, and disturb sleep patterns. These devices can also shorten attention spans and weaken real-life social skills.

For this reason, parental supervision is essential. Parents should establish clear boundaries, regularly monitor their children's online activities, and encourage responsible use of technology. By offering guidance and support, families can ensure that mobile phones serve as valuable resources instead of distractions.

SubQuestion No : 17

Q.17 Identify the central theme of the passage from the options.

Comprehension:

Read the given passage carefully and answer the following questions.

Mobile phones have become an integral part of modern childhood, with many children using them at a very early age. Since most households rely on mobile devices for daily communication, children naturally gain access to these devices. Beyond making calls, children use phones for entertainment, such as playing games, listening to music, and watching videos.

While mobile phones help parents stay connected and ensure their child's safety, experts warn that unrestricted use can have harmful effects. Excessive screen time may reduce focus on schoolwork, limit physical activity, and disturb sleep patterns. These devices can also shorten attention spans and weaken real-life social skills.

For this reason, parental supervision is essential. Parents should establish clear boundaries, regularly monitor their children's online activities, and encourage responsible use of technology. By offering guidance and support, families can ensure that mobile phones serve as valuable resources instead of distractions.

SubQuestion No : 18

Q.18 Which option describes the correct structure of the passage?

Comprehension:

Read the given passage carefully and answer the following questions.

Mobile phones have become an integral part of modern childhood, with many children using them at a very early age. Since most households rely on mobile devices for daily communication, children naturally gain access to these devices. Beyond making calls, children use phones for entertainment, such as playing games, listening to music, and watching videos.

While mobile phones help parents stay connected and ensure their child's safety, experts warn that unrestricted use can have harmful effects. Excessive screen time may reduce focus on schoolwork, limit physical activity, and disturb sleep patterns. These devices can also shorten attention spans and weaken real-life social skills.

For this reason, parental supervision is essential. Parents should establish clear boundaries, regularly monitor their children's online activities, and encourage responsible use of technology. By offering guidance and support, families can ensure that mobile phones serve as valuable resources instead of distractions.

SubQuestion No : 19

Q.19 Which of the following is not mentioned as an effect of excessive screen time?

Comprehension:

Read the given passage carefully and answer the following questions.

Mobile phones have become an integral part of modern childhood, with many children using them at a very early age. Since most households rely on mobile devices for daily communication, children naturally gain access to these devices. Beyond making calls, children use phones for entertainment, such as playing games, listening to music, and watching videos.

While mobile phones help parents stay connected and ensure their child's safety, experts warn that unrestricted use can have harmful effects. Excessive screen time may reduce focus on schoolwork, limit physical activity, and disturb sleep patterns. These devices can also shorten attention spans and weaken real-life social skills.

For this reason, parental supervision is essential. Parents should establish clear boundaries, regularly monitor their children's online activities, and encourage responsible use of technology. By offering guidance and support, families can ensure that mobile phones serve as valuable resources instead of distractions.

SubQuestion No : 20

Q.20 What does the author imply about the role of parents in the digital age?

Section : Test of Hindi Language and Comprehension

Q.1 निम्नलिखित वाक्य को ध्यानपूर्वक पढ़ें और वाक्य में त्रुटि की पहचान कर वाक्य शुद्ध करें।

सोचने किसी समस्या के भी बारे में अधिक से हल समस्या नहीं हो जाती।

- Ans
- 1. किसी भी समस्या के हो जाती बारे में अधिक सोचने से समस्या हल नहीं।
 - 2. किसी भी समस्या के बारे में अधिक सोचने से समस्या हल नहीं हो जाती।
 - 3. समस्या के बारे हल में अधिक किसी भी सोचने से समस्या नहीं हो जाती।
 - 4. किसी भी हल नहीं समस्या के बारे समस्या में अधिक सोचने से हो जाती।

Q.2 उपयुक्त क्रिया-विशेषण का चयनकर दिए गए वाक्य को पूर्ण कीजिए।
सुभाष से बोलता है ।

- Ans
- 1. यहाँ
 - 2. दायें
 - 3. जोर-जोर
 - 4. आज

Q.3 'युद्ध करने की प्रबल इच्छा'
उपर्युक्त वाक्यांश के लिए एक सार्थक शब्द चुनें-

- Ans
- 1. युयुत्सा
 - 2. प्रतिपक्षी
 - 3. युयुत्सु
 - 4. प्रतिवादी

Q.4 'खिसियानी बिल्ली खंभा नोचे' लोकोक्ति का सही अर्थ क्या होगा?

- Ans
- 1. अकेला व्यक्ति कोई बड़ा काम नहीं कर सकता
 - 2. शर्म के मारे क्रोध करने लगना
 - 3. अनायास कोई वस्तु मिल जाना
 - 4. एक की मजबूरी से दूसरे को लाभ मिल जाता है

Q.5 निम्न विकल्पों में अतिरिक्त वाक्य अंकित कीजिए।

- Ans
- 1. कविता भावनाओं की सुंदर अभिव्यक्ति होती है।
 - 2. जल, ठोस, द्रव और गैस — तीनों रूपों में पाया जाता है।
 - 3. ध्वनि एक तरंग है जो माध्यम में कंपन से उत्पन्न होती है।
 - 4. सूर्य से प्रकाश और ऊष्मा प्राप्त होती है।

Q.6 कोमल स्नानरही है ।

उपर्युक्त वाक्य में रिक्त स्थान की पूर्ति के लिए उचित क्रिया शब्द का चयन करें-

- Ans
- 1. बर्बाद
 - 2. नहा
 - 3. बहस करना
 - 4. कर

Q.7 राधा चाकू.....सब्जी काट रही है ।

उपर्युक्त वाक्य में रिक्त स्थान की पूर्ति के लिए उचित कारक शब्द का चयन करें-

- Ans
- 1. के
 - 2. ने
 - 3. की
 - 4. से

Q.8 निम्नलिखित विकल्पों में से उपयुक्त क्रिया का चयन कर वाक्य को पूर्ण कीजिए-
'वह लड़की किसी भी विपदा से अत्यधिक _____ है।'

- Ans
- 1. लुभाती
 - 2. बुझाती
 - 3. लुटाती
 - 4. घबराती

Q.9 निम्नलिखित वाक्यों में से अतिरिक्त वाक्य का चयन करें -

- Ans
- 1. यदि हम विज्ञान का प्रयोग केवल लाभ कमाने और शक्ति बढ़ाने के लिए करेंगे, तो इससे मानवता को नुकसान हो सकता है।
 - 2. पेड़ों की कटाई और प्रदूषण ने हमारे पर्यावरण को गंभीर संकट में डाल दिया है।
 - 3. प्रत्येक व्यक्ति का कर्तव्य है कि वह पौधे लगाए, पानी की बर्बादी न करे और प्रदूषण कम करने के प्रयास करे।
 - 4. यदि हम आज कदम नहीं उठाएंगे, तो आने वाली पीढ़ियों के लिए शुद्ध पर्यावरण एक सपना बन जाएगा।

Q.10 निम्नलिखित में से शुद्ध वाक्य का चयन कीजिए-

- Ans
- 1. मैंने उड़्ड था बचपन में।
 - 2. मैं बचपन में बहुत उड़्ड था।
 - 3. उड़्ड था मैंने बचपन में।
 - 4. उड़्ड था मैं बचपन में।

Q.11 निम्नलिखित वाक्यांश के लिए सार्थक शब्द बताएं -
'युद्ध करने की प्रबल इच्छा'

- Ans
- 1. युयुत्सा
 - 2. यायावर
 - 3. युद्धपोत
 - 4. याक्षुष

Q.12 मोहन.....बाहर आकर देखा ।

उपर्युक्त वाक्य में रिक्त स्थान की पूर्ति के लिए उचित कारक शब्द का चयन करें-

- Ans
- 1. पर
 - 2. का
 - 3. से
 - 4. ने

Q.13 'बढ़ा-चढ़ाकर कहना' किस मुहावरे का अर्थ है?

- Ans
- 1. नाक का बाल होना
 - 2. नब्ज पहचानना
 - 3. नमक-मिर्च लगाना
 - 4. नाच नचाना

- Q.14 दिए गए वाक्यों के लिखने का सही क्रम चुनें-
- (1) मानस में पात्रों का चरित्र-विन्यास सटीक है और उसमें आए
 - (2) पात्रों का चरित्र-विन्यास मनोविज्ञान की दृष्टि से भी स्वाभाविक है
 - (3) उसमें व्यक्तिगत तथा समुदायगत पात्रों के चरित्र-विन्यास का भी अपूर्व चित्रण है
 - (4) इसके साथ ही मानस में संतुलन एवं समरसता की स्थापना भी साथ-साथ हुई है

- Ans
- 1. 3124
 - 2. 1234
 - 3. 3412
 - 4. 3241

Q.15 निम्नलिखित में से कौन सा वाक्य शुद्ध है?

- Ans
- 1. उनके पराजय हुए।
 - 2. उनकी पराजय हुआ।
 - 3. उनका पराजय हुआ।
 - 4. उनकी पराजय हुई।

Comprehension:

दिए गए गद्यांश को पढ़कर पूछे गए प्रश्नों के उत्तर दीजिए:

23 अक्टूबर, 1938 ई. को हजारों की संख्या में सफ़ेद खादी के वस्त्र और टोपी पहने प्रदर्शनकारियों का एक समूह जेल में डाले गए नेताओं को रिहा कराने की माँग को लेकर त्रावणकोर के कोडियार महल की तरफ मार्च कर रहा था। उसे रोकने के लिए ब्रिटिश पुलिस अफसर ने जवानों को उन सब पर गोली चलाने का आदेश दिया। यह आदेश सुनते ही एक खुली जीप से एक महिला ने उतरकर अफसर को ललकारते हुए कहा, "मैं इनकी नेता हूँ। दूसरों को गोली मारने से पहले मुझे गोली मारो।" इतनी दिलेरी। पुलिस प्रशासन शायद इसके लिए तैयार न था, उसे अपना आदेश वापस लेना पड़ा और इतना बड़ा नरसंहार टल गया। यह वीरांगना थी- अक्कम्मा चेरियन। देश भर में उनके साहस की धूम मच गई और गांधी जी ने उन्हें 'त्रावणकोर की झाँसी की रानी' की उपाधि दी। भारत को स्वतंत्र देखने की इच्छा मन में सँजोए अक्कम्मा ने एक दिन अपनी प्रतिष्ठित नौकरी छोड़ दी और वर्ष 1938 में 'आवणकोर राज्य काँग्रेस' की सक्रिय सदस्य बन गईं। अक्कम्मा ने महिला स्वयंसेवी समूह 'देशसेविका संभ' की स्थापना की और महिलाओं को स्वतंत्रता आंदोलन में शामिल होने के लिए प्रेरित करना शुरू किया। अपनी आत्मकथा 'जीविथम ओरू समारम' (जीवन एक संघर्ष) की भूमिका में वे लिखती हैं- 'मेरे लिए यह जीवन, जो अन्यायपूर्ण और बेईमान है, उसके विरुद्ध संघर्ष है।'

SubQuestion No : 16

Q.16 प्रदर्शनकारियों का समूह किस महल की ओर मार्च कर रहा था?

Comprehension:

दिए गए गद्यांश को पढ़कर पूछे गए प्रश्नों के उत्तर दीजिए:

23 अक्टूबर, 1938 ई. को हजारों की संख्या में सफ़ेद खादी के वस्त्र और टोपी पहने प्रदर्शनकारियों का एक समूह जेल में डाले गए नेताओं को रिहा कराने की माँग को लेकर त्रावणकोर के कोडियार महल की तरफ मार्च कर रहा था। उसे रोकने के लिए ब्रिटिश पुलिस अफसर ने जवानों को उन सब पर गोली चलाने का आदेश दिया। यह आदेश सुनते ही एक खुली जीप से एक महिला ने उतरकर अफसर को ललकारते हुए कहा, "मैं इनकी नेता हूँ। दूसरों को गोली मारने से पहले मुझे गोली मारो।" इतनी दिलेरी। पुलिस प्रशासन शायद इसके लिए तैयार न था, उसे अपना आदेश वापस लेना पड़ा और इतना बड़ा नरसंहार टल गया। यह वीरांगना थी- अक्कम्मा चेरियन। देश भर में उनके साहस की धूम मच गई और गांधी जी ने उन्हें 'त्रावणकोर की झाँसी की रानी' की उपाधि दी। भारत को स्वतंत्र देखने की इच्छा मन में सँजोए अक्कम्मा ने एक दिन अपनी प्रतिष्ठित नौकरी छोड़ दी और वर्ष 1938 में 'आवणकोर राज्य काँग्रेस' की सक्रिय सदस्य बन गईं। अक्कम्मा ने महिला स्वयंसेवी समूह 'देशसेविका संभ' की स्थापना की और महिलाओं को स्वतंत्रता आंदोलन में शामिल होने के लिए प्रेरित करना शुरू किया। अपनी आत्मकथा 'जीविथम ओरू समारम' (जीवन एक संघर्ष) की भूमिका में वे लिखती हैं- 'मेरे लिए यह जीवन, जो अन्यायपूर्ण और बेईमान है, उसके विरुद्ध संघर्ष है।'

SubQuestion No : 17

Q.17 अक्कम्मा चेरियन ने क्या कहा था?

Comprehension:

दिए गए गद्यांश को पढ़कर पूछे गए प्रश्नों के उत्तर दीजिए:

23 अक्टूबर, 1938 ई. को हजारों की संख्या में सफ़ेद खादी के वस्त्र और टोपी पहने प्रदर्शनकारियों का एक समूह जेल में डाले गए नेताओं को रिहा कराने की माँग को लेकर त्रावणकोर के कोडियार महल की तरफ मार्च कर रहा था। उसे रोकने के लिए ब्रिटिश पुलिस अफसर ने जवानों को उन सब पर गोली चलाने का आदेश दिया। यह आदेश सुनते ही एक खुली जीप से एक महिला ने उतरकर अफसर को ललकारते हुए कहा, "मैं इनकी नेता हूँ। दूसरों को गोली मारने से पहले मुझे गोली मारो।" इतनी दिलेरी। पुलिस प्रशासन शायद इसके लिए तैयार न था, उसे अपना आदेश वापस लेना पड़ा और इतना बड़ा नरसंहार टल गया। यह वीरांगना थी- अक्कम्मा चेरियन। देश भर में उनके साहस की धूम मच गई और गांधी जी ने उन्हें 'त्रावणकोर की झाँसी की रानी' की उपाधि दी। भारत को स्वतंत्र देखने की इच्छा मन में सँजोए अक्कम्मा ने एक दिन अपनी प्रतिष्ठित नौकरी छोड़ दी और वर्ष 1938 में 'आवणकोर राज्य काँग्रेस' की सक्रिय सदस्य बन गईं। अक्कम्मा ने महिला स्वयंसेवी समूह 'देशसेविका संभ' की स्थापना की और महिलाओं को स्वतंत्रता आंदोलन में शामिल होने के लिए प्रेरित करना शुरू किया। अपनी आत्मकथा 'जीविथम ओरू समारम' (जीवन एक संघर्ष) की भूमिका में वे लिखती हैं- 'मेरे लिए यह जीवन, जो अन्यायपूर्ण और बेईमान है, उसके विरुद्ध संघर्ष है।'

SubQuestion No : 18

Q.18 'त्रावणकोर की झाँसी की रानी' अक्कम्मा चेरियन को किसने कहा था?

Comprehension:

दिए गए गद्यांश को पढ़कर पूछे गए प्रश्नों के उत्तर दीजिए:

23 अक्टूबर, 1938 ई. को हजारों की संख्या में सफ़ेद खादी के वस्त्र और टोपी पहने प्रदर्शनकारियों का एक समूह जेल में डाले गए नेताओं को रिहा कराने की माँग को लेकर त्रावणकोर के कोडियार महल की तरफ मार्च कर रहा था। उसे रोकने के लिए ब्रिटिश पुलिस अफसर ने जवानों को उन सब पर गोली चलाने का आदेश दिया। यह आदेश सुनते ही एक खुली जीप से एक महिला ने उतरकर अफसर को ललकारते हुए कहा, "मैं इनकी नेता हूँ। दूसरों को गोली मारने से पहले मुझे गोली मारो।" इतनी दिलेरी। पुलिस प्रशासन शायद इसके लिए तैयार न था, उसे अपना आदेश वापस लेना पड़ा और इतना बड़ा नरसंहार टल गया। यह वीरांगना थी- अक्कम्मा चेरियन। देश भर में उनके साहस की धूम मच गई और गांधी जी ने उन्हें 'त्रावणकोर की झाँसी की रानी' की उपाधि दी। भारत को स्वतंत्र देखने की इच्छा मन में सँजोए अक्कम्मा ने एक दिन अपनी प्रतिष्ठित नौकरी छोड़ दी और वर्ष 1938 में 'आवणकोर राज्य काँग्रेस' की सक्रिय सदस्य बन गईं। अक्कम्मा ने महिला स्वयंसेवी समूह 'देशसेविका संभ' की स्थापना की और महिलाओं को स्वतंत्रता आंदोलन में शामिल होने के लिए प्रेरित करना शुरू किया। अपनी आत्मकथा 'जीविथम ओरू समारम' (जीवन एक संघर्ष) की भूमिका में वे लिखती हैं- 'मेरे लिए यह जीवन, जो अन्यायपूर्ण और बेईमान है, उसके विरुद्ध संघर्ष है।'

SubQuestion No : 19

Q.19 गद्यांश में प्रयुक्त 'दिलेरी' का विलोम क्या होता है?

Comprehension:

दिए गए गद्यांश को पढ़कर पूछे गए प्रश्नों के उत्तर दीजिए:

23 अक्टूबर, 1938 ई. को हजारों की संख्या में सफ़ेद खादी के वस्त्र और टोपी पहने प्रदर्शनकारियों का एक समूह जेल में डाले गए नेताओं को रिहा कराने की माँग को लेकर त्रावणकोर के कोडियार महल की तरफ मार्च कर रहा था। उसे रोकने के लिए ब्रिटिश पुलिस अफसर ने जवानों को उन सब पर गोली चलाने का आदेश दिया। यह आदेश सुनते ही एक खुली जीप से एक महिला ने उतरकर अफसर को ललकारते हुए कहा, "मैं इनकी नेता हूँ। दूसरों को गोली मारने से पहले मुझे गोली मारो।" इतनी दिलेरी। पुलिस प्रशासन शायद इसके लिए तैयार न था, उसे अपना आदेश वापस लेना पड़ा और इतना बड़ा नरसंहार टल गया। यह वीरांगना थी- अक्कम्मा चेरियन। देश भर में उनके साहस की धूम मच गई और गांधी जी ने उन्हें 'त्रावणकोर की झाँसी की रानी' की उपाधि दी। भारत को स्वतंत्र देखने की इच्छा मन में सँजोए अक्कम्मा ने एक दिन अपनी प्रतिष्ठित नौकरी छोड़ दी और वर्ष 1938 में 'आवणकोर राज्य काँग्रेस' की सक्रिय सदस्य बन गईं। अक्कम्मा ने महिला स्वयंसेवी समूह 'देशसेविका संभ' की स्थापना की और महिलाओं को स्वतंत्रता आंदोलन में शामिल होने के लिए प्रेरित करना शुरू किया। अपनी आत्मकथा 'जीविथम ओरू समारम' (जीवन एक संघर्ष) की भूमिका में वे लिखती हैं- 'मेरे लिए यह जीवन, जो अन्यायपूर्ण और बेईमान है, उसके विरुद्ध संघर्ष है।'

SubQuestion No : 20

Q.20 गद्यांश में प्रयुक्त 'स्वतंत्रता' शब्द का पर्याय क्या नहीं होता है?

Section : Test of Hindi Language and Comprehension1

Q.1 'सृजन' का विलोम शब्द क्या है?

- Ans
- 1. सौम्य
 - 2. संस्कार
 - 3. सुलभ
 - 4. संहार

Q.2 दिए गए वाक्य में वर्तनी सम्बंधी अशुद्धि किस अंश में है?
अपने बल-बूटे पर खड़े होने वाले लोग जीवन में सफल होते हैं।

- Ans
- 1. लोग जीवन में
 - 2. खड़े होने वाले
 - 3. अपने बल-बूटे पर
 - 4. सफल होते हैं।

Q.3 निम्न में से कौन-सा शब्द अनेकार्थी है?

- Ans
- 1. अंत
 - 2. थकान
 - 3. ध्रुवतारा
 - 4. नहर

Q.4 निम्नलिखित वाक्यों में त्रुटि पहचानकर शुद्ध वाक्य का चयन करें-

- Ans
- 1. सूफी-मत प्रेमाख्यानक काव्य को दार्शनिक आधार प्रदान करता है।
 - 2. सूफी-मत प्रेमाख्यानक काव्य को दार्शनिक आधार प्रदान करता है।
 - 3. सूफी-मत प्रेमाख्यानक काव्य को दार्शनिक आधार प्रदान करता है।
 - 4. सूफी-मत प्रेमाख्यानक काव्य को दार्शनिक आधार प्रदान करता है।

Q.5 दिए गए वाक्य में वर्तनी सम्बंधी अशुद्धि किस अंश में है?
पूर्ण स्वस्थ के लिए शुद्ध आहार-विहार आवश्यक है।

- Ans
- 1. आवश्यक है।
 - 2. आहार-विहार
 - 3. लिए शुद्ध
 - 4. पूर्ण स्वस्थ के

Q.6 निम्नलिखित वाक्य के किस शब्द में वर्तनी से संबंधित त्रुटि है?
'इस कमी की पूर्ती कैसे हो सकती है?'

- Ans
- 1. सकती
 - 2. पूर्ती
 - 3. कमी
 - 4. कैसे

Q.7 मनीषी का पर्यायवाची शब्द नहीं होगा -

- Ans
- 1. विचारक
 - 2. पंडित
 - 3. राजा
 - 4. विद्वान

Q.8 'वज्र' का पर्यायवाची शब्द होगा-

- Ans
- 1. कालकूट
 - 2. कुलिश
 - 3. वृष्टि
 - 4. कैवल्य

Q.9 'दोनों तरफ रहना' किस मुहावरे का अर्थ है?

- Ans
- 1. दो नावों में पैर रखना
 - 2. धूप में बाल सफेद करना
 - 3. नहले पर दहला मारना
 - 4. दूध का धुला होना

Q.10 निम्नलिखित मुहावरे का अर्थ बताएं -
'बासी कढ़ी में उबाल आना'

- Ans
- 1. वृद्धावस्था में यौवन का आभास
 - 2. गुप्त बात प्रकट होना
 - 3. नुकसान न पहुँचा सकना
 - 4. जो स्थिर न हो

Q.11 निम्नलिखित मुहावरे का अर्थ बताएं -
'बालू की भीत होना'

- Ans
- 1. बहुत चालाक होना
 - 2. क्षणभंगुर होना
 - 3. बर्बाद करना
 - 4. सलाह देना

Q.12 निम्नलिखित विकल्पों में से ग्रंथि का तद्भव शब्द पहचानें।

- Ans
- 1. गति
 - 2. गोता
 - 3. कोमल
 - 4. गांठ

Q.13 निम्नलिखित विकल्पों में 'अवस्था' का अनेकार्थी शब्द नहीं है-

- Ans
- 1. उग्र
 - 2. स्थान
 - 3. दशा
 - 4. स्थिति

Q.14 'चार' का तत्सम रूप क्या है?

- Ans
- 1. चत्वारि
 - 2. षष्ठ
 - 3. चतुर्दश
 - 4. चौरिका

Q.15 'सक्रिय' शब्द का उचित विलोम शब्द पहचानें।

- Ans
- 1. क्रियात्मक
 - 2. कर्तव्य
 - 3. काया
 - 4. निष्क्रिय

Comprehension:

दिए गए गद्यांश को पढ़कर पूछे गए प्रश्नों के उत्तर दीजिए:

हमारे देश में हजारों एकनिष्ठ और त्यागी साधु हैं, जो धर्म की शिक्षा देते फिरते हैं। यदि उनमें से कुछ लोगों को सांसारिक विषयों के शिक्षकों के रूप में भी संगठित किया जा सके तो गाँव-गाँव, दरवाजे दरवाजे पर जाकर वे केवल धर्मशिक्षा ही नहीं देंगे, बल्कि ऐहिक शिक्षा भी दिया करेंगे। कल्पना कीजिए कि इनमें से दो व्यक्ति शाम को साथ में मैजिक लैटर्स (वर्णमाला), एक ग्लोब और कुछ नक्शे आदि लेकर किसी गाँव में जाते हैं। वे अनपढ़ लोगों को गणित, ज्योतिष और भूगोल की बहुत कुछ शिक्षा दे सकते हैं। वे गरीब पुस्तकों से जीवन भर में जितनी जानकारी न पा सकेंगे, उससे सौगुनी अधिक वे उन्हें बातचीत के माध्यम से विभिन्न देशों के बारे में कहानियाँ सुनाकर दे सकते हैं। इसके लिए एक संगठन की आवश्यकता है, जो पुनः धन पर निर्भर करता है। इस योजना को कार्यरूप में परिणत करने के लिए भारत में मनुष्य तो बहुत है, पर हाय! वे निर्धन हैं। एक चक्र को चलाना बड़ा कठिन काम है, पर अगर एक बार वह गतिशील हुआ कि क्रमशः अधिकाधिक वेग से चलने लगता है। अपने देश में सहायता पाने का प्रयत्न करने के बाद जब मैंने धनिकों से कुछ भी सहानुभूति न पाई तब मैं महाराज आपकी सहायता से इस देश में आ गया। अमेरिकावासियों को इस बात की कुछ भी परवाह नहीं कि भारत के गरीब जियें या मरें। भला वे परवाह भी क्यों करने लगे।

SubQuestion No : 16

Q.16 गद्यांश में प्रयुक्त 'देते फिरते हैं' का अर्थ क्या होता है?

Comprehension:

दिए गए गद्यांश को पढ़कर पूछे गए प्रश्नों के उत्तर दीजिए:

हमारे देश में हजारों एकनिष्ठ और त्यागी साधु हैं, जो धर्म की शिक्षा देते फिरते हैं। यदि उनमें से कुछ लोगों को सांसारिक विषयों के शिक्षकों के रूप में भी संगठित किया जा सके तो गाँव-गाँव, दरवाजे दरवाजे पर जाकर वे केवल धर्मशिक्षा ही नहीं देंगे, बल्कि ऐहिक शिक्षा भी दिया करेंगे। कल्पना कीजिए कि इनमें से दो व्यक्ति शाम को साथ में मैजिक लैटर्स (वर्णमाला), एक ग्लोब और कुछ नक्शे आदि लेकर किसी गाँव में जाते हैं। वे अनपढ़ लोगों को गणित, ज्योतिष और भूगोल की बहुत कुछ शिक्षा दे सकते हैं। वे गरीब पुस्तकों से जीवन भर में जितनी जानकारी न पा सकेंगे, उससे सौगुनी अधिक वे उन्हें बातचीत के माध्यम से विभिन्न देशों के बारे में कहानियाँ सुनाकर दे सकते हैं। इसके लिए एक संगठन की आवश्यकता है, जो पुनः धन पर निर्भर करता है। इस योजना को कार्यरूप में परिणत करने के लिए भारत में मनुष्य तो बहुत है, पर हाय! वे निर्धन हैं। एक चक्र को चलाना बड़ा कठिन काम है, पर अगर एक बार वह गतिशील हुआ कि क्रमशः अधिकाधिक वेग से चलने लगता है। अपने देश में सहायता पाने का प्रयत्न करने के बाद जब मैंने धनिकों से कुछ भी सहानुभूति न पाई तब मैं महाराज आपकी सहायता से इस देश में आ गया। अमेरिकावासियों को इस बात की कुछ भी परवाह नहीं कि भारत के गरीब जियें या मरें। भला वे परवाह भी क्यों करने लगे।

SubQuestion No : 17

Q.17 गद्यांश में 'ऐहिक शिक्षा' का प्रयोग किस संदर्भ में किया गया है?

Comprehension:

दिए गए गद्यांश को पढ़कर पूछे गए प्रश्नों के उत्तर दीजिए:

हमारे देश में हजारों एकनिष्ठ और त्यागी साधु हैं, जो धर्म की शिक्षा देते फिरते हैं। यदि उनमें से कुछ लोगों को सांसारिक विषयों के शिक्षकों के रूप में भी संगठित किया जा सके तो गाँव-गाँव, दरवाजे दरवाजे पर जाकर वे केवल धर्मशिक्षा ही नहीं देंगे, बल्कि ऐहिक शिक्षा भी दिया करेंगे। कल्पना कीजिए कि इनमें से दो व्यक्ति शाम को साथ में मैजिक लैटर्स (वर्णमाला), एक ग्लोब और कुछ नक्शे आदि लेकर किसी गाँव में जाते हैं। वे अनपढ़ लोगों को गणित, ज्योतिष और भूगोल की बहुत कुछ शिक्षा दे सकते हैं। वे गरीब पुस्तकों से जीवन भर में जितनी जानकारी न पा सकेंगे, उससे सौगुनी अधिक वे उन्हें बातचीत के माध्यम से विभिन्न देशों के बारे में कहानियाँ सुनाकर दे सकते हैं। इसके लिए एक संगठन की आवश्यकता है, जो पुनः धन पर निर्भर करता है। इस योजना को कार्यरूप में परिणत करने के लिए भारत में मनुष्य तो बहुत है, पर हाय! वे निर्धन हैं। एक चक्र को चलाना बड़ा कठिन काम है, पर अगर एक बार वह गतिशील हुआ कि क्रमशः अधिकाधिक वेग से चलने लगता है। अपने देश में सहायता पाने का प्रयत्न करने के बाद जब मैंने धनिकों से कुछ भी सहानुभूति न पाई तब मैं महाराज आपकी सहायता से इस देश में आ गया। अमेरिकावासियों को इस बात की कुछ भी परवाह नहीं कि भारत के गरीब जियें या मरें। भला वे परवाह भी क्यों करने लगे।

SubQuestion No : 18

Q.18 शिक्षकों द्वारा अनपढ़ लोगों को किन विषयों की शिक्षा देने की बात कही गई है?

Comprehension:

दिए गए गद्यांश को पढ़कर पूछे गए प्रश्नों के उत्तर दीजिए:

हमारे देश में हजारों एकनिष्ठ और त्यागी साधु हैं, जो धर्म की शिक्षा देते फिरते हैं। यदि उनमें से कुछ लोगों को सांसारिक विषयों के शिक्षकों के रूप में भी संगठित किया जा सके तो गाँव-गाँव, दरवाजे दरवाजे पर जाकर वे केवल धर्मशिक्षा ही नहीं देंगे, बल्कि ऐहिक शिक्षा भी दिया करेंगे। कल्पना कीजिए कि इनमें से दो व्यक्ति शाम को साथ में मैजिक लैटर्स (वर्णमाला), एक ग्लोब और कुछ नक्शे आदि लेकर किसी गाँव में जाते हैं। वे अनपढ़ लोगों को गणित, ज्योतिष और भूगोल की बहुत कुछ शिक्षा दे सकते हैं। वे गरीब पुस्तकों से जीवन भर में जितनी जानकारी न पा सकेंगे, उससे सौगुनी अधिक वे उन्हें बातचीत के माध्यम से विभिन्न देशों के बारे में कहानियाँ सुनाकर दे सकते हैं। इसके लिए एक संगठन की आवश्यकता है, जो पुनः धन पर निर्भर करता है। इस योजना को कार्यरूप में परिणत करने के लिए भारत में मनुष्य तो बहुत है, पर हाय! वे निर्धन हैं। एक चक्र को चलाना बड़ा कठिन काम है, पर अगर एक बार वह गतिशील हुआ कि क्रमशः अधिकाधिक वेग से चलने लगता है। अपने देश में सहायता पाने का प्रयत्न करने के बाद जब मैंने धनिकों से कुछ भी सहानुभूति न पाई तब मैं महाराज आपकी सहायता से इस देश में आ गया। अमेरिकावासियों को इस बात की कुछ भी परवाह नहीं कि भारत के गरीब जियें या मरें। भला वे परवाह भी क्यों करने लगे।

SubQuestion No : 19

Q.19 इनमें से कौन-सा शब्द 'निर्धन' का पर्याय नहीं है?

Comprehension:

दिए गए गद्यांश को पढ़कर पूछे गए प्रश्नों के उत्तर दीजिए:

हमारे देश में हजारों एकनिष्ठ और त्यागी साधु हैं, जो धर्म की शिक्षा देते फिरते हैं। यदि उनमें से कुछ लोगों को सांसारिक विषयों के शिक्षकों के रूप में भी संगठित किया जा सके तो गाँव-गाँव, दरवाजे दरवाजे पर जाकर वे केवल धर्मशिक्षा ही नहीं देंगे, बल्कि ऐहिक शिक्षा भी दिया करेंगे। कल्पना कीजिए कि इनमें से दो व्यक्ति शाम को साथ में मैजिक लैटर्स (वर्णमाला), एक ग्लोब और कुछ नक्शे आदि लेकर किसी गाँव में जाते हैं। वे अनपढ़ लोगों को गणित, ज्योतिष और भूगोल की बहुत कुछ शिक्षा दे सकते हैं। वे गरीब पुस्तकों से जीवन भर में जितनी जानकारी न पा सकेंगे, उससे सौगुनी अधिक वे उन्हें बातचीत के माध्यम से विभिन्न देशों के बारे में कहानियाँ सुनाकर दे सकते हैं। इसके लिए एक संगठन की आवश्यकता है, जो पुनः धन पर निर्भर करता है। इस योजना को कार्यरूप में परिणत करने के लिए भारत में मनुष्य तो बहुत है, पर हाय! वे निर्धन हैं। एक चक्र को चलाना बड़ा कठिन काम है, पर अगर एक बार वह गतिशील हुआ कि क्रमशः अधिकाधिक वेग से चलने लगता है। अपने देश में सहायता पाने का प्रयत्न करने के बाद जब मैंने धनिकों से कुछ भी सहानुभूति न पाई तब मैं महाराज आपकी सहायता से इस देश में आ गया। अमेरिकावासियों को इस बात की कुछ भी परवाह नहीं कि भारत के गरीब जियें या मरें। भला वे परवाह भी क्यों करने लगे।

SubQuestion No : 20

Q.20 गद्यांश में प्रयुक्त 'सांसारिक' शब्द का विलोम क्या होता है?