



GOVT. OF NCT OF DELHI
Delhi Subordinate Services Selection Board
FC-18, Institutional Area, Karkardooma, Delhi – 110092.
www.dsssb.delhigovt.nic.in

Participant Name	sumit Bhardwaj
Test Center Name	Aadarsh Pariksha Kendra CENTER C - Gate No 2 - Noida Sector 64
Test Date	27/03/2026
Test Time	1:00 PM - 3:00 PM
Subject	Multi Tasking Staff

Section : General intelligence and Reasoning Ability

Q.1 L, M, N, R, S and T live on six different floors of the same building. The lowermost floor in the building is numbered 1, the floor above it is numbered 2 and so on, till the topmost floor is numbered 6. No one lives above R. Only two people live between L and T. Only two people live between R and N. T lives below N but above M. How many people live below S?

- Ans**
- 1. Two
 - 2. Three
 - 3. One
 - 4. Four

Q.2 Select the option that represents the correct order of the given words as they would appear in an English dictionary.

1. Classic
2. Crystal
3. Composing
4. Concern
5. Curiosity

- Ans**
- 1. 2, 3, 1, 5, 4
 - 2. 2, 3, 5, 4, 1
 - 3. 1, 3, 4, 2, 5
 - 4. 3, 2, 1, 5, 4

Q.3 E, F, G, H, Q, R and S are sitting around a circular table facing the centre of the table. Only one person sits between E and R when counted from the left of R. S sits third to the right of Q. G sits third to the left of H. S sits to the immediate right of G. F is not an immediate neighbor of G. How many people sit between F and R when counted from the right of F?

- Ans**
- 1. Two
 - 2. Three
 - 3. One
 - 4. Four

Q.4 Y is the brother of U. L is the sister of Y. K is the husband of L. How is K related to Y?

- Ans**
- 1. Husband's father
 - 2. Father's father
 - 3. Sister's husband
 - 4. Mother's father

Q.5 Read the given statements and conclusions carefully. Assuming that the information given in the statements is true, even if it appears to be at variance with commonly known facts, decide which of the given conclusion(s) logically follow(s) from the statements.

Statements:

All Grapefruits are Plums.
No Plums are Pears.

Conclusions:

I) No Pears are Grapefruits.
II) Some Pears are Grapefruits.

- Ans**
- 1. Only conclusion (II) follows.
 - 2. Both conclusions (I) and (II) follow.
 - 3. Neither conclusion (I) nor (II) follows.
 - 4. Only conclusion (I) follows.

Q.6 A statement is given followed by two conclusions. Find out which conclusion(s) is/are true based on the given statement.

Statement: $B > C > V < F = R$

Conclusions:

I. $B < F$
II. $R > V$

- Ans**
- 1. Neither I nor II is true
 - 2. Only II is true
 - 3. Only I is true
 - 4. Both I and II are true

Q.7 A statement is given followed by two conclusions. Find out which conclusion(s) is/are true based on the given statement.

Statement: $F \leq R > B > V = C$

Conclusions:

I. $F < B$
II. $C < R$

- Ans**
- 1. Only II is true
 - 2. Only I is true
 - 3. Both I and II are true
 - 4. Neither I nor II is true

Q.8 All 40 people are standing in a row facing North. Hiteshi is 14th from the right end while Lalit is 16th from the left end. How many people are there between Hiteshi and Lalit?

- Ans**
- 1. 10
 - 2. 7
 - 3. 9
 - 4. 8

Q.9 In a row of people all facing North, Nera is 28th from the left end. Ditu is 30th from the left end. Ditu is exactly between Nera and Uri. If Uri is 13th from the right end of the line, how many people are there in the row?

- Ans**
- 1. 45
 - 2. 44
 - 3. 41
 - 4. 43

Q.10 All 51 people are standing in a row facing North. Sharma is 35th from the left end while Mohit is 6th from the right end. How many people are there between Sharma and Mohit?

- Ans
- 1. 12
 - 2. 11
 - 3. 10
 - 4. 9

Q.11 In a certain code language, 'city queen beach' is coded as 'tj tr bi' and 'jail beach elk' is coded as 'na rs tj'. How is 'beach' coded in the given language? (All codes are two-letter codes)

- Ans
- 1. tr
 - 2. tj
 - 3. na
 - 4. bi

Q.12 Select the option that represents the correct order of the given words as they would appear in an English dictionary.

1. Favoring
2. Freshman
3. Forsaken
4. Founding
5. Festival

- Ans
- 1. 2, 1, 4, 3, 5
 - 2. 2, 1, 5, 4, 3
 - 3. 1, 2, 5, 4, 3
 - 4. 1, 5, 3, 4, 2

Q.13 Refer to the following number series and answer the question that follows. Counting to be done from left to right only. (All numbers are single-digit numbers only.)

(Left) 9 5 2 4 3 6 1 5 2 3 6 9 4 1 5 2 6 7 5 4 1 8 9 6 1 2 3 6 9 8 7 5 4 1 2 5 3 6 9 8 7 5 1 3

(Right)

How many such even digits are there each of which is immediately preceded by a perfect square and immediately followed by an odd digit? (NOTE: 1 is also a perfect square.)³⁶⁵³

- Ans
- 1. 6
 - 2. 8
 - 3. 7
 - 4. 5

Q.14 In a certain code language, 'success needs effort' is coded as 'qm ni bk' and 'needs balance always' is coded as 'vd qm pa'. How is 'needs' coded in the given language?

- Ans
- 1. bk
 - 2. qm
 - 3. ni
 - 4. vd

Q.15 H, I, J, X, Y, Z and A are sitting in a straight line facing north. No one sits to the left of X. Only four people sit between X and A. Only three people sit to the right of H. I sits to the immediate left of Y. J is not an immediate neighbor of H. Who sits at the rightmost end of the line?

- Ans
- 1. H
 - 2. Z
 - 3. A
 - 4. J

Q.16 Refer to the following letter, symbol series and answer the question. Counting to be done from left to right only.

(Left) Q D % L = + T C Q E L # W U M E A P N * J (Right)

How many such letters are there, each of which is immediately preceded by a symbol and also immediately followed by a letter?

- Ans
- 1. Three
 - 2. Two
 - 3. One
 - 4. None

Q.17 Select the option that represents the correct order of the given words as they would appear in an English dictionary.

1. Bankrupt
2. Baseline
3. Bizarre
4. Blended
5. Breakout

- Ans
- 1. 3, 5, 1, 4, 2
 - 2. 3, 5, 2, 1, 4
 - 3. 5, 3, 2, 1, 4
 - 4. 1, 2, 3, 4, 5

Q.18 Refer to the following number series and answer the question (All numbers are single digit numbers only. Counting to be done from left to right.)

(Left) 6 4 1 3 5 2 7 8 6 3 4 1 8 6 4 7 2 9 6 8 4 1 3 (Right)

How many such odd digits are there, each of which is immediately preceded by an even digit and also immediately followed by an even digit?

- Ans
- 1. Two
 - 2. Five
 - 3. Three
 - 4. Four

Q.19 In a certain code language,
A + B means 'A is the sister of B'
A - B means 'A is the brother of B'
A × B means 'A is the wife of B'
A ÷ B means 'A is the father of B'

Based on the above, how is T related to K if 'T - G + D × M ÷ K'?

- Ans
- 1. Mother's father
 - 2. Mother's brother
 - 3. Father's father
 - 4. Father's brother

Q.20 In a certain code language, 'RIPE' is coded as '3528' and 'WIPE' is coded as '2813'.
What is the code for 'W' in the given code language?722

- Ans
- 1. 1
 - 2. 3
 - 3. 2
 - 4. 8

Section : General intelligence and Reasoning Ability1

Q.1 BIRD is related to IBDR in a certain way based on the English alphabetical order. In the same way, RAIN is related to ARNI. To which of the given options is STAR related, following the same logic?2256

- Ans
- 1. TSRA
 - 2. RSTA
 - 3. TRSS
 - 4. ATRS

Q.2 What will come in the place of '?' in the following equation, if '+' and '-' are interchanged and 'x' and '÷' are interchanged?
 $16 \div 23 \times 8 - 7 + 26 = ?$

- Ans
- 1. 28
 - 2. 29
 - 3. 27
 - 4. 25

Q.3 LEXU is related to JCVS in a certain way based on the English alphabetical order. In the same way, MIWC is related to KGUA. To which of the given options is DRGJ related, following the same logic?3335

- Ans
- 1. AQDX
 - 2. ZPEI
 - 3. BQDH
 - 4. BPEH

Q.4 If 'A' stands for '+', 'B' stands for 'x', 'C' stands for '÷' and 'D' stands for '-', what will come in place of question mark '?' in the following equation?
 $16 \text{ C } 32 \text{ B } 5 \text{ D } 216 \text{ A } 9 = ?$

- Ans
- 1. 125
 - 2. 149
 - 3. 147
 - 4. 152

Q.5 Select the pair that follows the same pattern as that followed by the two pairs given below. Both pairs follow the same pattern.

JKO - QRV
VWA - CDH

- Ans
- 1. WWZ-CDH
 - 2. WWZ-DEI
 - 3. WXB-CEH
 - 4. MNR-TUY

Q.6 Based on the English alphabetical order, three of the following four are alike in a certain way and thus form a group. Which is the one that does not belong to that group?
 (Note: The odd one out is not based on the number of consonants/vowels or their position in the letter-cluster.)

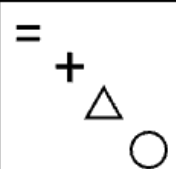
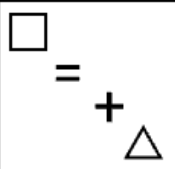
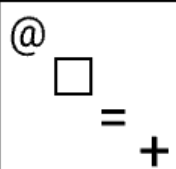
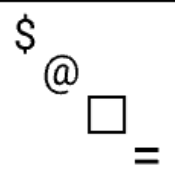

- Ans
- 1. PQU
 - 2. UVZ
 - 3. SBF
 - 4. HIM

Q.7 What should come in place of the question mark (?) in the given series?

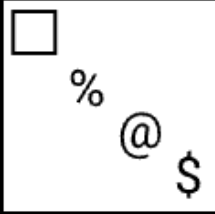
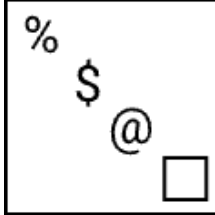
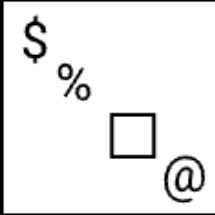
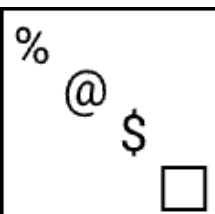
41 44 55 74 101 ?

- Ans
- 1. 138
 - 2. 136
 - 3. 137
 - 4. 135

Q.8 Identify the figure given in the options which when put in place of ? will logically complete the series?

				
---	---	---	---	--

Ans

- 1. 
- 2. 
- 3. 
- 4. 

Q.9 Based on the English alphabetical order, three of the following four letter-cluster pairs are alike in a certain way and thus form a group. Which is the one that does not belong to that group?
(Note: The odd one out is not based on the number of consonants/vowels or their position in the letter cluster.)

- Ans**
- 1. OR - PS
 - 2. SV - TW
 - 3. QT - RK
 - 4. RU - SV

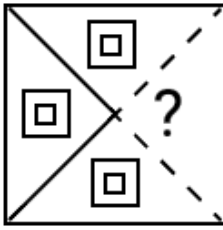
Q.10 What should come in place of '?' in the given series?
8 10 14 20 28 ?

- Ans**
- 1. 36
 - 2. 32
 - 3. 34
 - 4. 38

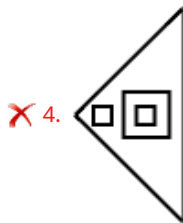
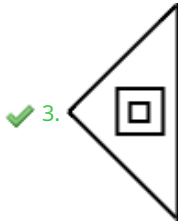
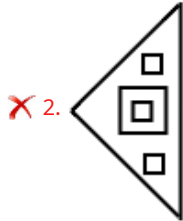
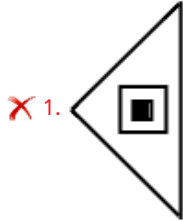
Q.11 Based on the English alphabetical order, three of the following four letter-cluster pairs are alike in a certain way and thus form a group. Which is the one that does not belong to that group?
(Note: The odd one out is not based on the number of consonants/vowels or their position in the letter cluster.)

- Ans**
- 1. XH - AJ
 - 2. SI - VL
 - 3. ER - HT
 - 4. KO - NQ

Q.12 Select the option figure that will replace the question mark (?) in the figure given below to complete the pattern.



Ans



Q.13 If 'A' stands for '+', 'B' stands for '-', 'C' stands for '÷' and 'D' stands for '×', what will come in place of the question mark '?' in the following equation?
6 D 2 A 30 B 9 C 3 = ?

Ans

✗ 1. 55

✓ 2. 39

✗ 3. 38

✗ 4. 54

Q.14 Select the set in which the numbers are related in the same way as are the numbers of the following sets.

(NOTE : Operations should be performed on the whole numbers, without breaking down the numbers into its constituent digits. E.g. 13 - Operations on 13 such as adding /deleting /multiplying etc. to 13 can be performed. Breaking down 13 into 1 and 3 and then performing mathematical operations on 1 and 3 is not allowed)
(59,28,149)
(88,65,199)

Ans

✗ 1. (35,69,96)

✗ 2. (61,96,97)

✗ 3. (46,9,119)

✓ 4. (63,22,167)

Q.15 What will come in the place of the '?' in the following equation, if '+' and '-' are interchanged and 'x' and '÷' are interchanged?

$$49 \times 7 - 2 \div 3 + 5 = ?$$

- Ans
- 1. 9
 - 2. 7
 - 3. 8
 - 4. 6

Q.16 What will come in the place of '?' in the following equation, if '+' and '-' are interchanged and 'x' and '÷' are interchanged?

$$75 + 72 \div 5 \times 9 - 10 = ?$$

- Ans
- 1. 48
 - 2. 44
 - 3. 45
 - 4. 47

Q.17 Select the set in which the numbers are related in the same way as are the numbers of the following sets.

(NOTE : Operations should be performed on the whole numbers, without breaking down the numbers into its constituent digits. E.g. 13 - Operations on 13 such as adding /subtracting /multiplying etc. to 13 can be performed. Breaking down 13 into 1 and 3 and then performing mathematical operations on 1 and 3 is not allowed.)

(32,95,159)
(83,39,205)

- Ans
- 1. (22,94,38)
 - 2. (20,87,127)
 - 3. (12,18,62)
 - 4. (95,48,98)

Q.18 Read the given statements and conclusions carefully. You have to take the given statements to be true even if they seem to be at variance from commonly known facts. You have to decide which conclusion/s logically follow/s from the given statements

Statements: All denims are trousers. All trousers are Kurtis.

Conclusions (I) : Some Kurtis are trousers

Conclusions (II) : All denims are Kurtis

- Ans
- 1. Only conclusion (I) follows
 - 2. Both conclusions (I) and (II) follow
 - 3. Only conclusion (II) follows
 - 4. Neither conclusion (I) nor (II) follows

Q.19 Select the set in which the numbers are related in the same way as are the numbers of the following sets.

(NOTE: Operations should be performed on the whole numbers, without breaking down the numbers into its constituent digits. E.g. 13 - Operations on 13 such as adding /subtracting /multiplying etc. to 13 can be performed. Breaking down 13 into 1 and 3 and then performing mathematical operations on 1 and 3 is not allowed.)

(78,37,118)

(38,35,76)

- Ans
- 1. (85,4,52)
 - 2. (59,3,65)
 - 3. (5,13,18)
 - 4. (97,23,93)

Q.20 What should come in place of '?' in the given series?

112, 114, ?, 118, 120, 122.

- Ans
- 1. 117
 - 2. 115
 - 3. 116
 - 4. 113

Section : General Awareness

Q.1 Match the following.

- a. Rowlatt act i. A protest against forest law by the British government in response to the closure of forest area
- b. Non-cooperation movement ii. Act by the British government empowering police to arrest anybody without trial
- c. Militant guerrilla movement iii. A peaceful protest against the British colonial government by boycotting British goods, institutions, and honours

- Ans
- 1. a - iii, b - i, c - ii
 - 2. a - iii, b - ii, c - i
 - 3. a - i, b - ii, c - iii
 - 4. a - ii, b - iii, c - i

Q.2 The literary piece 'Satyarth Prakash' is related to ____.

- Ans
- 1. Dwarkanath Tagore
 - 2. Swami Vivekananda
 - 3. Swami Dayanand Saraswati
 - 4. Ramakrishna Paramahansa

Q.3 India Energy Week 2026, a flagship global energy event, was held in:

- Ans
- 1. Goa
 - 2. Maharashtra
 - 3. Rajasthan
 - 4. Kerala

Q.4 In the context of microfinance, what does the term 'financial intermediation' refer to?

- Ans**
- 1. The role of channeling funds from savers to borrowers
 - 2. The process of converting government bonds into cash
 - 3. The direct investment of capital into the stock market by individuals
 - 4. The use of financial instruments to hedge against market risks

Q.5 Which of the following teams won the Ranji Trophy 2024-25?

- Ans**
- 1. Tamil Nadu
 - 2. Kerala
 - 3. Vidarbha
 - 4. Mumbai

Q.6 The Indian government scheme to boost electronics manufacturing with higher funding in 2026 is called:

- Ans**
- 1. Digital India Manufacturing Programme
 - 2. Production Linked Incentive Scheme for Electronics
 - 3. Make in India Electronics Mission
 - 4. Electronics Components Manufacturing Scheme

Q.7 How many medal sports were included in Khelo India Beach Games 2025?

- Ans**
- 1. 10
 - 2. 04
 - 3. 06
 - 4. 08

Q.8 In which cantonment did Mangal Pandey refuse the cartridges and revolt?

- Ans**
- 1. Madras
 - 2. Delhi
 - 3. Bombay
 - 4. Barrackpore

Q.9 Under the Indira Gandhi National Family Benefit Scheme (IGNFBS), financial assistance is provided in which situation?

- Ans**
- 1. Death of the primary breadwinner of a BPL household
 - 2. Old age of the head of a BPL household
 - 3. Marriage of a daughter in a BPL household
 - 4. Permanent disability of a member in a BPL household

Q.10 Which of the following components is added to Gross National Product at Market Prices to obtain Gross National Disposable Income (GNDI) in India's national income accounting?

- Ans**
- 1. Indirect taxes
 - 2. Depreciation
 - 3. Net current transfers from rest of the world
 - 4. Income from black markets

Q.11 Which Indian language, spoken in Jharkhand and parts of Odisha, is recognised in the Eighth Schedule and uses the Ol Chiki script, noted for its rich tribal literature and folk songs?

- Ans**
- 1. Hindi, from northern India
 - 2. Marathi
 - 3. Urdu
 - 4. Santali

Q.12 In June 2025, Finance Minister Nirmala Sitharaman laid the foundation stone for a Mini Planetarium and Astro Globe at the Hanle Dark Sky Reserve. Where is this reserve located?

- Ans**
- 1. Himachal Pradesh
 - 2. Sikkim
 - 3. Ladakh
 - 4. Uttarakhand

Q.13 How many new national waterways does the government plan to operationalize over the next five years, as announced in the Union Budget 2026-27?

- Ans**
- 1. 100
 - 2. 5
 - 3. 20
 - 4. 10

Q.14 Based on historical evidence of sepoy communication in May 1857, which regiment wrote to the 48th Native Infantry stating they had "acted for the faith" and were awaiting orders?

- Ans**
- 1. 9th Native Infantry (Berhampore)
 - 2. 34th Native Infantry (Barrackpore)
 - 3. 3rd Native Cavalry (Meerut)
 - 4. 7th Awadh Irregular Cavalry

Q.15 How many members comprise the Joint Parliamentary Committee (JPC) that approved the 'One Nation, One Election' proposal ?

- Ans**
- 1. 12
 - 2. 27
 - 3. 39
 - 4. 70

Q.16 In February 2026, the Defence Minister visited DRDO's GTRE in Bengaluru to review progress on which type of indigenous defence technology?

- Ans**
- 1. Missile guidance systems
 - 2. Cyber-security software
 - 3. Nuclear submarines
 - 4. Military gas turbine engines

Q.17 Following the deposition of Nawab Wajid Ali Shah, who was proclaimed the new Nawab of Lucknow by the rebels and his mother, Begum Hazrat Mahal, in mid-1857?

- Ans**
- 1. Kunwar Singh
 - 2. Birjis Qadar
 - 3. Tantia Tope
 - 4. Bakht Khan

Q.18 Which institution has the sole authority to issue currency notes in India, except the one-rupee note?

- Ans**
- 1. SEBI
 - 2. NABARD
 - 3. RBI
 - 4. SBI

Q.19 In 2026, which bank won a prestigious national-level technology award for its consistent focus on fintech innovation, adoption of digital public infrastructure, and customer-centric digital banking solutions?

- Ans**
- 1. Punjab National Bank
 - 2. HDFC Bank
 - 3. Karnataka Bank
 - 4. State Bank of India

Q.20 Which city hosted the Khelo India Para Games 2025?

- Ans**
- 1. Delhi
 - 2. Mumbai
 - 3. Bengaluru
 - 4. Hyderabad

Section : **General Awareness1**

Q.1 Fundamental Duties were added by which amendment?

- Ans**
- 1. 44th Amendment
 - 2. 73rd Amendment
 - 3. 86th Amendment
 - 4. 42nd Amendment

Q.2 Which traditional sweetener is often promoted as a healthier alternative to refined white sugar due to its higher mineral content?

- Ans**
- 1. Jaggery
 - 2. Honey
 - 3. Stevia
 - 4. Brown sugar

Q.3 The Ashtadhyayi, a systematic grammatical treatise composed by Panini in ancient India, laid the foundation for the grammatical tradition of which classical language?

- Ans**
- 1. Tamil
 - 2. Sanskrit
 - 3. Prakrit
 - 4. Pali

Q.4 Which of the following is NOT a tier of the Panchayati Raj system?

- Ans**
- 1. Zila Parishad
 - 2. Gram Panchayat
 - 3. Municipal Corporation
 - 4. Block Samiti

Q.5 In which Indian state is 'Pamlou'—a type of shifting cultivation—practised?

- Ans**
- 1. Manipur
 - 2. Rajasthan
 - 3. Gujarat
 - 4. Jharkhand

Q.6 What is another name for the Great Indian Desert?

- Ans**
- 1. Gobi Desert
 - 2. Thar Desert
 - 3. Sahara Desert
 - 4. Kalahari Desert

Q.7 Which Indian language, primarily spoken in Uttar Pradesh and Bihar, is known for its folk literature and the works of the poet Tulsidas?

- Ans**
- 1. Hindi
 - 2. Bengali
 - 3. Awadhi
 - 4. Marathi

Q.8 What is the main function of stomata (tiny, pore-like structures, primarily on the underside of leaves) in plant leaves?

- Ans**
- 1. Food production
 - 2. Structural support
 - 3. Gas exchange
 - 4. Mineral absorption

Q.9 For what is a 'mandapa' used in a temple?

- Ans**
- 1. Main deity's mount
 - 2. Boundary wall
 - 3. Housing the main icon
 - 4. Hall or pillared pavilion

Q.10 Which of the following islands is NOT located in the Bay of Bengal?

- Ans**
- 1. Andaman
 - 2. Lakshadweep
 - 3. Ross
 - 4. Nicobar

Q.11 Which Sikh festival commemorates the release of Guru Hargobind from imprisonment in the Gwalior Fort and is observed on the same day as Diwali?

- Ans**
- 1. Vaisakhi
 - 2. Guru Nanak Jayanti
 - 3. Bandi Chhor Divas
 - 4. Hola Mohalla

Q.12 What is the name of the super highway that connects Delhi, Mumbai, Chennai, and Kolkata?

- Ans**
- 1. North-South Corridor
 - 2. East-West Corridor
 - 3. Golden Quadrilateral
 - 4. Grand Trunk Road

Q.13 Which Constitutional Amendment does the Right to Education Bill, 2005 attempt to give effect to?

- Ans**
- 1. 98th Constitutional Amendment
 - 2. 86th Constitutional Amendment
 - 3. 62nd Constitutional Amendment
 - 4. 91st Constitutional Amendment

Q.14 Which court in India can transfer a case from one High Court to another for the sake of justice?

- Ans**
- 1. State Legislature
 - 2. Supreme Court
 - 3. Lok Adalat
 - 4. District Court

Q.15 What happens if the Lok Sabha passes a no-confidence motion against the government?

- Ans**
- 1. The government ignores the motion and continues to govern.
 - 2. The Prime Minister alone resigns.
 - 3. The entire Council of Ministers resigns.
 - 4. The President dismisses the Speaker of the Lok Sabha.

Q.16 Which of the following Acts provides the legal framework for conducting the Census in India?

- Ans**
- 1. Census Act, 1948
 - 2. National Population Act, 1976
 - 3. Census Control Act, 1952
 - 4. Census and Data Act, 1961

Q.17 A crop variety is developed in a laboratory by inserting a drought-tolerance gene from another organism into its DNA. This process best represents which principle?

- Ans**
- 1. Genetic engineering
 - 2. Mendelian inheritance
 - 3. Mutation through cell division
 - 4. Natural selection

Q.18 Which of the following genome-editing technologies enables scientists to precisely modify an organism's DNA by targeting specific sequences for insertion, deletion, or alteration of genetic material?

- Ans**
- 1. Gel electrophoresis
 - 2. Recombinant DNA technology
 - 3. Polymerase Chain Reaction (PCR)
 - 4. CRISPR-Cas9

Q.19 Which of the following festivals celebrates the spring harvest season in Punjab?

- Ans**
- 1. Bihu
 - 2. Baisakhi
 - 3. Pongal
 - 4. Onam

Q.20 Which plant biotechnology technique involves the fusion of cell wall-free plant cells (protoplasts) using chemical agents such as polyethylene glycol (PEG) or electrical pulses (electrofusion)?

- Ans
- 1. Micropropagation
 - 2. Somatic embryogenesis
 - 3. Protoplast fusion
 - 4. Agrobacterium-mediated transformation

Section : Arithmetical and Numerical Ability

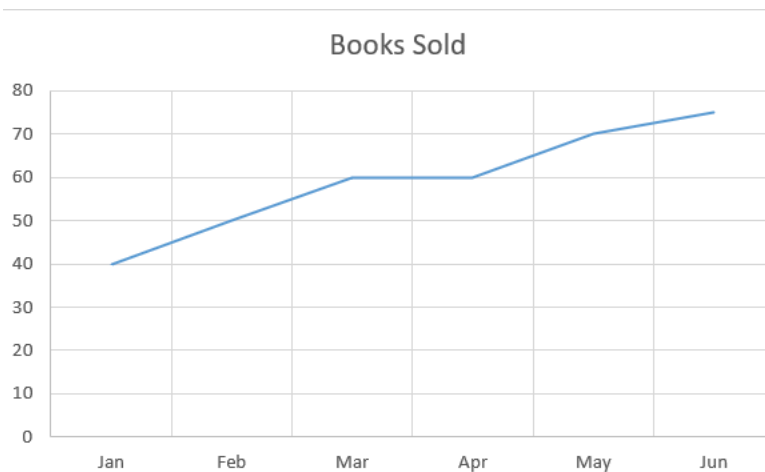
Q.1 Simplify the expression: $24 \div (4 \times 2) - 3$

- Ans
- 1. 3
 - 2. 1
 - 3. 2
 - 4. 0

Q.2 Ajay's salary was first reduced by 38% and subsequently raised by 19%. How much percentage was his final salary lower compared to his initial salary?

- Ans
- 1. 38%
 - 2. 26.22%
 - 3. 7.22%
 - 4. 19%

Q.3 Riya runs a small bookstore in her neighborhood. She kept track of the number of books sold each month for the first half of the year. The line graph below shows her sales trend. One month, Riya noticed that despite her efforts to promote new books, the sales didn't increase compared to the previous month. According to the graph, which month shows this situation?



- Ans
- 1. April
 - 2. March
 - 3. May
 - 4. February

Q.4 The half life of Uranium-233 is 1,12,000 years that is Uranium-233 decays at a constant rate in such a way that it reduces 50% in 1,12,000 years. In 2,24,000 years, what percent will it reduce to?

- Ans
- 1. 50%
 - 2. 20%
 - 3. 15%
 - 4. 25%

Q.5 A student's marks were incorrectly entered as 26 instead of 31. Due to this error, the average marks of the class were reduced by 0.4. What is the number of students in the class?

- Ans
- 1. 4
 - 2. 6
 - 3. 2
 - 4. 12

Q.6 Find the average of the given numbers.

7, 8, 10, 12, 13

- Ans
- 1. 13
 - 2. 10
 - 3. 11
 - 4. 12

Q.7 The price of a laptop was ₹50,000 last year. This year, its price increased by 10%. However, due to a festive discount, the price was later reduced by 5%. What is the final price of the laptop?

- Ans
- 1. ₹53,500
 - 2. ₹52,500
 - 3. ₹52,250
 - 4. ₹53,000

Q.8 In a cricket match, a batsman scored 80 runs, which included 6 fours and 3 sixes. What percentage of his total score did he make by running between the wickets?
4577

- Ans
- 1. 53.5%
 - 2. 52.5%
 - 3. 47.5%
 - 4. 48.5%

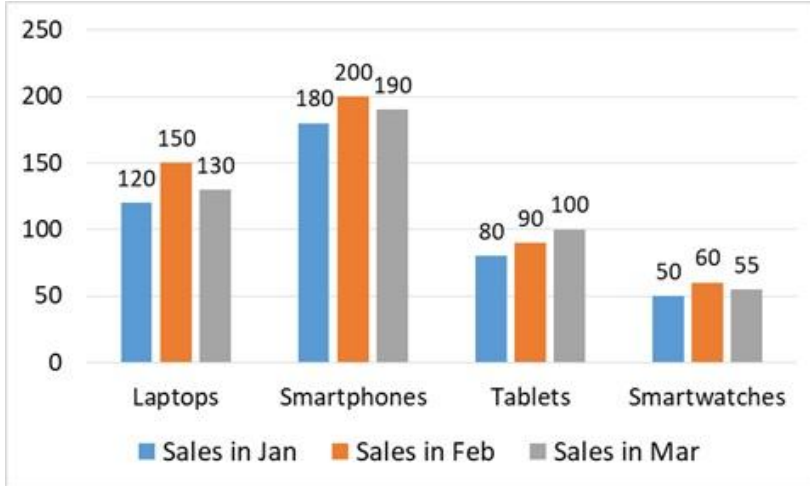
Q.9 Yuvraj deposited a certain sum of money at 20% per annum, compounded annually. At the end of 2 years, the total amount received was ₹88,056. Find the sum of money deposited by Yuvraj.

- Ans
- 1. ₹61,150
 - 2. ₹61,282
 - 3. ₹60,775
 - 4. ₹60,731

Q.10 In what ratio must a grocer mix two varieties of rice costing ₹265 and ₹197 per kg respectively, to get a mixture of rice worth ₹245 per kg?

- Ans
- 1. 3:24
 - 2. 7:13
 - 3. 15:17
 - 4. 12:5

Q.11 The following bar graph shows monthly sales of four products over three months. Study the graph and answer the question that follows.



What is the total sales of all products in February?

- Ans
- 1. 500
 - 2. 390
 - 3. 450
 - 4. 550

Q.12 A number is decreased by 20% and then further increased by 30%. If the final value of the number is 5200, then what was the original value of the number?

- Ans
- 1. 4900
 - 2. 4680
 - 3. 5500
 - 4. 5000

Q.13 Harbhajan deposited a certain sum of money at 5% per annum, compounded annually. At the end of 2 years, the total amount received was ₹46,746. Find the sum of money deposited by Harbhajan.

- Ans
- 1. ₹42,109
 - 2. ₹42,225
 - 3. ₹42,522
 - 4. ₹42,400

Q.14 Simplify: $\frac{1}{\sqrt{2} + \sqrt{3} - \sqrt{5}} + \frac{1}{\sqrt{2} - \sqrt{3} - \sqrt{5}}$

- Ans
- 1. $\frac{1}{2\sqrt{2}}$
 - 2. $\frac{1}{\sqrt{2}}$
 - 3. $\sqrt{2}$
 - 4. $\frac{1}{2}$

Q.15 At what rate (in percentage) of interest per year will a sum of money become 3 times of itself in 5 years on simple interest?

- Ans
- 1. 80
 - 2. 38
 - 3. 42
 - 4. 40

Q.16 A trader buys a product for ₹900 and sells it at a 20% profit. He then uses the money to buy another product and sells it at a 10% loss. Find the difference between the initial and final amounts the trader has.

- Ans
- 1. ₹84
 - 2. ₹72
 - 3. ₹96
 - 4. ₹78

Q.17 Simplify: $[50 - \{18 \div (3 \times 2)\} + 4^2] \div 2$ of 7

- Ans
- 1. 63
 - 2. 4.5
 - 3. 220.5
 - 4. 36

Q.18 Find the greatest number that exactly divides 95, 38, and 57.

- Ans
- 1. 15
 - 2. 19
 - 3. 16
 - 4. 18

Q.19 A student's marks were incorrectly entered as 71 instead of 85. Due to

What is the number of students in the class?

- Ans
- 1. 7
 - 2. 8
 - 3. 6
 - 4. 9

Q.20 A vendor bought lemons at 24 for a rupee. How many must he sell for a rupee to gain 20%?

- Ans
- 1. 22
 - 2. 18
 - 3. 21
 - 4. 20

Section : **Arithmetical and Numerical Ability1**

Q.1 A man covers half of his journey at 5 km/hr and remaining half at 3 km/hr. His average speed is:

- Ans
- 1. 4.75 km/hr
 - 2. 5.75 km/hr
 - 3. 6.75 km/hr
 - 4. 3.75 km/hr

Q.2 The numbers P, Q and R are proportional to 3, 5 and 7, respectively, and the sum of P, Q and R is 165. If the number Q is given by the equation $Q = kP - 11$, then find the value of k.

- Ans
- 1. $3\frac{1}{2}$
 - 2. 3
 - 3. 2
 - 4. $\frac{3}{2}$

Q.3 Work done by A in one day is half of the work done by B in one day. Work done by B is half of the work done by C in one day. If C alone can complete the work in 6 days, in how many days can A, B and C together complete the work?

- Ans
- 1. $3\frac{3}{7}$
 - 2. $2\frac{3}{7}$
 - 3. $3\frac{4}{7}$
 - 4. $2\frac{2}{7}$

Q.4 Two trains, A and B, start moving at the same time. Train A travels at 54 km/hr from station M to station N and train B travels at 72 km/hr from station N to station M. They meet each other after 100 minutes. What is the distance (in km) between the two stations?

- Ans
- 1. 220
 - 2. 240
 - 3. 210
 - 4. 230

Q.5 Let P and Q be two cylinders such that the capacity of P is the same as the capacity of Q. The ratio of the diameters of P and Q is 2 : 3. What is the ratio of the heights of P to Q?

- Ans
- 1. 9 : 4
 - 2. 4 : 7
 - 3. 7 : 4
 - 4. 4 : 9

Q.6 A boat moves in the upstream from city X to city Y and then it returns in the downstream from city Y to city X. If in still water the speed of the boat is 20 km/hr and the stream speed is 10 km/hr. Then what is the average speed (in km/hr) of boat in total journey?

- Ans
- 1. 25
 - 2. 15
 - 3. 20
 - 4. 10

Q.7 A grocer has 96 kg of rice, a part of which he sells at 7% profit, and the remaining quantity is sold at 43% profit. He gains 40% on the whole. What is the quantity of rice sold at 43% profit?

- Ans
- 1. 91 kg
 - 2. 89 kg
 - 3. 90 kg
 - 4. 88 kg

Q.8 Two pipes A and B can fill a cistern in 40 minutes and 45 minutes, respectively. Both pipes are opened. After how many minutes should the pipe B be turned off so that the cistern will be filled in just half an hour?

- Ans
- 1. 9.45
 - 2. 11.25
 - 3. 12.68
 - 4. 10.34

Q.9 Two trains of lengths 125 m and 175 m moving in opposite directions at speeds of 54 km/hr and 36 km/hr, respectively, cross each other. Find the time taken.

- Ans
- 1. 12 seconds
 - 2. 16 seconds
 - 3. 18 seconds
 - 4. 14 seconds

Q.10 The diameter of a solid metallic spherical bullet is 7 cm. 96 such bullets are melted and recast into a solid right circular cylinder of height 28 cm. What is the curved surface area (in cm^2) of the cylinder? (Use $\pi = \frac{22}{7}$)

- Ans
- 1. 2928
 - 2. 2464
 - 3. 2080
 - 4. 2356

Q.11 A company offers a discount scheme of 'buy 3 and get 2 free'. Find the discount percentage.

- Ans
- 1. 30%
 - 2. 40%
 - 3. 33%
 - 4. 20%

Q.12 If the length of a cuboid is 8 cm, its breadth is 11 cm, and the volume of the cuboid is 792 cm^3 , then find the height of the cuboid.

- Ans
- 1. 6 cm
 - 2. 12 cm
 - 3. 15 cm
 - 4. 9 cm

Q.13 If the ratio of the average of two numbers to the larger number is 5 : 6, then the smaller number is what percentage less than the larger number?

- Ans
- 1. 20%
 - 2. $33\frac{1}{3}\%$
 - 3. 40%
 - 4. 25%

Q.14 If the diagonal of a rectangular field is 26 m and its area is 240 m^2 , then find the perimeter (in metres) of the rectangular field.

- Ans
- 1. 34 m
 - 2. 45 m
 - 3. 90 m
 - 4. 68 m

Q.15 Avni invests ₹50,000 in a business for 12 months, and Rashmika invests ₹40,000 for 9 months. At the end of the year, the profit is ₹19,600. What is Rashmika's share (in ₹) of the profit?

- Ans
- 1. 7,350
 - 2. 10,500
 - 3. 12,250
 - 4. 8,530

Q.16 P, Q and R started a business by investing ₹7,200, ₹10,800 and ₹15,600 respectively. P left the business after 4 months. Q left 6 months after the business had started and R remained in the business till one year. At the end of one year, the total profit is ₹8,580. What is P's share (in ₹) in the profit?4230

- Ans
- 1. 880
 - 2. 910
 - 3. 974
 - 4. 735

Q.17 The marked price of an article is 45% above its cost price. A seller allows a discount of 45% on it. What is his actual profit/loss percentage on this article?

- Ans
- 1. 15.6% profit
 - 2. 20.25% loss
 - 3. 18.8% loss
 - 4. Neither profit nor loss

Q.18 Two merchants, A and B, engage in separate trading ventures. Merchant A sells half of his inventory at a 20% profit margin and the remaining half at cost price. Merchant B, on the other hand, sells three-fourths of his inventory at a 25% profit margin and the remaining portion at cost price. If the ratio of the overall profit percentage of Merchant A to that of Merchant B is P : Q, then 3P is what percentage of Q?

- Ans
- 1. 160%
 - 2. 120%
 - 3. 180%
 - 4. 140%

Q.19 Reena can do a piece of work in 10 hours and Shree can do it in 16 hours. In how much time (in hours) will they finish the whole work working together?

- Ans
- 1. $6\frac{1}{13}$
 - 2. $6\frac{2}{13}$
 - 3. $5\frac{1}{11}$
 - 4. $5\frac{3}{11}$

Q.20 6 men can paint a house in 10 days. In how many days can 15 men do

- Ans
- 1. 7
 - 2. 5
 - 3. 4
 - 4. 6

Q.1 Complete the sentence given below with the most suitable option.

Rajini mixed ____ little sugar in her tea.

1333

- Ans
- 1. the
 - 2. a
 - 3. an
 - 4. No article needed

Q.2 Complete the sentence given below with the most suitable option.
He promised to return in ____ hour.

1336

- Ans
- 1. No article needed
 - 2. the
 - 3. a
 - 4. an

Q.3 Rectify the sentence by selecting the correct option to replace the underlined word from the options given below.

Shweta is interested on learning new languages.

3747

- Ans
- 1. over
 - 2. for
 - 3. about
 - 4. in

Q.4 Choose the most appropriate option to substitute the underlined word segment in the given sentence to correct it.

Sonam's voice was lost over the crowd's many overlapping conversations, making it impossible to distinguish her words.

4094

- Ans
- 1. into the crowd's many overlapping conversations
 - 2. between the crowd's overlapping conversations
 - 3. among the crowd's many overlapping conversations
 - 4. above the crowd's many overlapping conversations

Q.5 Complete the given sentence, choosing your answer from the options provided.
The Mayor of Casterbridge decided to abstain _____ liquor.

- Ans
- 1. against
 - 2. from
 - 3. by
 - 4. with

Q.6 Choose the most suitable alternative for the blank to form a grammatically correct and contextually appropriate sentence.

The teacher's ___ attitude towards the struggling student only worsened the situation.

4890

- Ans
- 1. considerate
 - 2. empathetic
 - 3. gracious
 - 4. indifferent

Q.7 Select the most appropriate form of the verb given in the options to fill the blank in the given sentence.

Harshen _____ Spanish for three years.

- Ans
- 1. is studying
 - 2. is being studied
 - 3. has been studying
 - 4. studies

Q.8 Complete the sentence with the appropriate article:
Many tourists visit ___ Taj Mahal every year.1480

- Ans
- 1. No article needed
 - 2. an
 - 3. a
 - 4. the

Q.9 Select the most appropriate verb to fill in the blank.

The team _____ this assignment by the end of the week.

- Ans
- 1. will finished
 - 2. will have finished
 - 3. finish
 - 4. finishes

Q.10 Choose the most appropriate option to substitute the underlined word segment in the given sentence to correct it.

Plans are already in place for going Maharashtra next month to experience the lively festivals and rich cultural heritage.

- Ans
- 1. place for going to Maharashtra
 - 2. place for going in Maharashtra
 - 3. place to going to Maharashtra
 - 4. place to going in Maharashtra

Q.11 A sentence is divided into the following different segments. Rearrange all the segments to form a coherent sentence.

move forward and make anything new (P) / a creative block is a (Q) / being stuck in the creative process without the ability to (R) / phenomenon best described as an overwhelming feeling of (S)

- Ans
- 1. QSRP
 - 2. PQRS
 - 3. QRPS
 - 4. SRQP

Q.12 Rectify the given sentence by choosing the correct option.
My father taught me many things. He is as wiser as an owl.2918

- Ans**
- 1. My father taught me many things. He is as wise as an owl.
 - 2. My father taught me many things. He is as most wise as an owl.
 - 3. My father taught me many things. He is as wisest as an owl.
 - 4. My father taught me many things. He is as more wise as an owl.

Q.13 Complete the following sentence by selecting the correct option.

He fell ___ a river.

- Ans**
- 1. on
 - 2. in
 - 3. into
 - 4. above

Q.14 Choose the best option to complete the given sentence.

He bought ___ umbrella because the sky looked threatening.

- Ans**
- 1. an
 - 2. a
 - 3. the
 - 4. No article required

Q.15 Arrange the given segments of a sentence in a logical order.

- A) to inspire kindness among people**
- B) social media has become a powerful tool**
- C) by sharing heartfelt stories and**
- D) encouraging positive actions**

- Ans**
- 1. C-B-A-D
 - 2. B-A-C-D
 - 3. D-B-A-C
 - 4. A-B-C-D

Comprehension:

Read the given passage carefully and answer the questions that follow.

Biographies are often seen as windows into amazing lives, but they also show the values of the time they were written. A book from the 1800s might focus on "good character", while a modern book might focus on mental struggles. What a writer emphasizes tells us what society cares about at that moment.

The hardest part is balancing praise with honest criticism. If a writer admires someone too much, they might hide the person's flaws. However, focusing only on failures can distort why the person was important. A fair writer must consider the person's culture and circumstances.

Gathering information is also tricky. Private letters and diaries aren't always honest; people often write them to make themselves look better. Public speeches might hide secret doubts. A biographer must "read between the lines" to find the truth that was left out.

Today, many biographers are honest about what they don't know. Instead of a perfect story, they show a person's mistakes and uncertainties. This encourages readers to think critically. In the end, a biography is not just a list of events; it is an attempt to understand the complicated truth of a human life.

SubQuestion No : 16

Q.16 What is the main concern of the passage?

Comprehension:

Read the given passage carefully and answer the questions that follow.

Biographies are often seen as windows into amazing lives, but they also show the values of the time they were written. A book from the 1800s might focus on "good character", while a modern book might focus on mental struggles. What a writer emphasizes tells us what society cares about at that moment.

The hardest part is balancing praise with honest criticism. If a writer admires someone too much, they might hide the person's flaws. However, focusing only on failures can distort why the person was important. A fair writer must consider the person's culture and circumstances.

Gathering information is also tricky. Private letters and diaries aren't always honest; people often write them to make themselves look better. Public speeches might hide secret doubts. A biographer must "read between the lines" to find the truth that was left out.

Today, many biographers are honest about what they don't know. Instead of a perfect story, they show a person's mistakes and uncertainties. This encourages readers to think critically. In the end, a biography is not just a list of events; it is an attempt to understand the complicated truth of a human life.

SubQuestion No : 17

Q.17 What danger does excessive admiration pose in biography?

Comprehension:

Read the given passage carefully and answer the questions that follow.

Biographies are often seen as windows into amazing lives, but they also show the values of the time they were written. A book from the 1800s might focus on "good character", while a modern book might focus on mental struggles. What a writer emphasizes tells us what society cares about at that moment.

The hardest part is balancing praise with honest criticism. If a writer admires someone too much, they might hide the person's flaws. However, focusing only on failures can distort why the person was important. A fair writer must consider the person's culture and circumstances.

Gathering information is also tricky. Private letters and diaries aren't always honest; people often write them to make themselves look better. Public speeches might hide secret doubts. A biographer must "read between the lines" to find the truth that was left out.

Today, many biographers are honest about what they don't know. Instead of a perfect story, they show a person's mistakes and uncertainties. This encourages readers to think critically. In the end, a biography is not just a list of events; it is an attempt to understand the complicated truth of a human life.

SubQuestion No : 18

Q.18 What inference can be made about modern biography?

Comprehension:

Read the given passage carefully and answer the questions that follow.

Biographies are often seen as windows into amazing lives, but they also show the values of the time they were written. A book from the 1800s might focus on "good character", while a modern book might focus on mental struggles. What a writer emphasizes tells us what society cares about at that moment.

The hardest part is balancing praise with honest criticism. If a writer admires someone too much, they might hide the person's flaws. However, focusing only on failures can distort why the person was important. A fair writer must consider the person's culture and circumstances.

Gathering information is also tricky. Private letters and diaries aren't always honest; people often write them to make themselves look better. Public speeches might hide secret doubts. A biographer must "read between the lines" to find the truth that was left out.

Today, many biographers are honest about what they don't know. Instead of a perfect story, they show a person's mistakes and uncertainties. This encourages readers to think critically. In the end, a biography is not just a list of events; it is an attempt to understand the complicated truth of a human life.

SubQuestion No : 19

Q.19 How does the author develop the argument?

Comprehension:

Read the given passage carefully and answer the questions that follow.

Biographies are often seen as windows into amazing lives, but they also show the values of the time they were written. A book from the 1800s might focus on "good character", while a modern book might focus on mental struggles. What a writer emphasizes tells us what society cares about at that moment.

The hardest part is balancing praise with honest criticism. If a writer admires someone too much, they might hide the person's flaws. However, focusing only on failures can distort why the person was important. A fair writer must consider the person's culture and circumstances.

Gathering information is also tricky. Private letters and diaries aren't always honest; people often write them to make themselves look better. Public speeches might hide secret doubts. A biographer must "read between the lines" to find the truth that was left out.

Today, many biographers are honest about what they don't know. Instead of a perfect story, they show a person's mistakes and uncertainties. This encourages readers to think critically. In the end, a biography is not just a list of events; it is an attempt to understand the complicated truth of a human life.

SubQuestion No : 20

Q.20 Which word best describes the author's tone?

Section : Test of English Language and Comprehension1

Q.1 Choose the appropriate synonym of the word given.

Alleviate

- Ans
- 1. explain
 - 2. maintain
 - 3. complicate
 - 4. reduce

Q.2 Choose the word opposite in meaning to the given word.

Sycophant

- Ans
- 1. Notorious
 - 2. Critic
 - 3. Admirer
 - 4. Excellent

Q.3 Choose the appropriate option that best expresses the meaning of the proverb 'nothing ventured, nothing gained'.

- Ans
- 1. going on trek to gain experience of adventure
 - 2. taking risks always leads to loss
 - 3. without taking risks, you can't achieve rewards
 - 4. staying cautious ensures success

Q.4 Select the antonym of "redundant".

- Ans
- 1. Temporary
 - 2. Ordinary
 - 3. Essential
 - 4. Insignificant

Q.5 Choose the correct one-word substitution for the given sentence.

A person who believes in the absence of government and laws

- Ans
- 1. Nihilist
 - 2. Atheist
 - 3. Agnostic
 - 4. Anarchist

Q.6 Select the most appropriate meaning of the proverb:
It's the tip of the iceberg.

- Ans
- 1. When you see the tip of an iceberg from a ship in motion, be warned about danger.
 - 2. The most significant part of a problem or situation is hidden beneath the surface.
 - 3. It is the final and the top-notch decision to be accepted by everyone unanimously.
 - 4. You can be easily triumphant over a problem as small as the tip of an iceberg.

Q.7 Select the most appropriate meaning of the given proverb.

A mouse that has one hole is quickly caught

- Ans
- 1. Over-reliance on one solution always leads to success.
 - 2. Risk-taking is essential for survival.
 - 3. Mice often get caught when they don't have escape routes.
 - 4. Those who lack alternatives are easily trapped.

Q.8 A word segment has been underlined in the given sentence. Select the option that shows the most appropriate one-word substitute for the underlined segment.

Despite his genuine desire to impart knowledge, the professor's lecture was impervious and indicative of superiority and condescension.

- Ans
- 1. bashful
 - 2. patronizing
 - 3. recessive
 - 4. convivial

Q.9 Which of the following words is the correct substitution of the word segment given?

Lacking spirit or energy

- Ans
- 1. Literary
 - 2. Zestful
 - 3. Languid
 - 4. Vigorous

Q.10 Rectify the sentence by selecting the correct spelling of the highlighted word from the options provided. Select 'No correction required' if the given spelling is correct.

The professor specialized in **archeology** and ancient civilizations.

- Ans
- 1. Archaeology
 - 2. No correction required
 - 3. Archaelogy
 - 4. Archeology

Q.11 Select the option that best explains the meaning of the given proverb:
Make hay while the sun shines

- Ans
- 1. Success comes only after careful planning
 - 2. Hard work always guarantees success
 - 3. Use favourable conditions to act without delay
 - 4. Complete every task with the help of others

Q.12 Select the antonym of "mandatory".

- Ans
- 1. Optional
 - 2. Compulsion
 - 3. Free
 - 4. Coerced

Q.13 A word segment has been underlined in the given sentence. Select the CORRECT option that shows the most appropriate one-word substitute for the underlined segment.

In Jane Austen's *Pride and Prejudice*, Mr. Darcy's initial blatantly and disdainfully proud demeanor masks his underlying benevolence.

- Ans
- 1. ignorant
 - 2. cheerful
 - 3. haughty
 - 4. insecure

Q.14 Rectify the error in the given sentence by choosing the correct spelling of the underlined word from the options provided. Select 'no correction required' if the given spelling is correct.

The archeologist discovered ancient artifacts at the dig site.

- Ans
- 1. no correction required
 - 2. archeologist
 - 3. archeaologist
 - 4. archaeologist

Q.15 Parts of a sentence are given below in jumbled order. Arrange the parts in the correct order to form a meaningful sentence.

A. the match,
B. because of rain,
C. was postponed,
D. last evening

- Ans
- 1. DBCA
 - 2. CABD
 - 3. BCAD
 - 4. ACDB

Comprehension:

Read the given passage carefully and answer the following questions.

From high above, the polar ice appears flat, white, and unchanged. It radiates a sense of calm and stability, yet beneath this frozen exterior, profound changes are unfolding. As the Earth warms, surface ice melts and sends meltwater deep into small cracks, widening them and weakening ice that has been frozen for thousands of years.

Over time, glaciers thin and floating ice shelves retreat, permanently reshaping the coastline. In some areas, small plants have even begun to take root in soil once locked beneath the ice for centuries. Scientists explain that these ice shelves act like a stopper in a bottle; they hold back the glaciers behind them, preventing them from sliding too quickly into the ocean. When these shelves weaken or shatter, the glaciers accelerate into the sea, reminding us that changes at the poles affect the entire planet.

SubQuestion No : 16

Q.16 Which title from the options is the most suitable for the given passage?

Comprehension:

Read the given passage carefully and answer the following questions.

From high above, the polar ice appears flat, white, and unchanged. It radiates a sense of calm and stability, yet beneath this frozen exterior, profound changes are unfolding. As the Earth warms, surface ice melts and sends meltwater deep into small cracks, widening them and weakening ice that has been frozen for thousands of years.

Over time, glaciers thin and floating ice shelves retreat, permanently reshaping the coastline. In some areas, small plants have even begun to take root in soil once locked beneath the ice for centuries. Scientists explain that these ice shelves act like a stopper in a bottle; they hold back the glaciers behind them, preventing them from sliding too quickly into the ocean. When these shelves weaken or shatter, the glaciers accelerate into the sea, reminding us that changes at the poles affect the entire planet.

SubQuestion No : 17

Q.17 How is the information in the passage organized?

Comprehension:

Read the given passage carefully and answer the following questions.

From high above, the polar ice appears flat, white, and unchanged. It radiates a sense of calm and stability, yet beneath this frozen exterior, profound changes are unfolding. As the Earth warms, surface ice melts and sends meltwater deep into small cracks, widening them and weakening ice that has been frozen for thousands of years.

Over time, glaciers thin and floating ice shelves retreat, permanently reshaping the coastline. In some areas, small plants have even begun to take root in soil once locked beneath the ice for centuries. Scientists explain that these ice shelves act like a stopper in a bottle; they hold back the glaciers behind them, preventing them from sliding too quickly into the ocean. When these shelves weaken or shatter, the glaciers accelerate into the sea, reminding us that changes at the poles affect the entire planet.

SubQuestion No : 18

Q.18 What does the phrase "act like a stopper in a bottle" suggest about ice shelves?

Comprehension:

Read the given passage carefully and answer the following questions.

From high above, the polar ice appears flat, white, and unchanged. It radiates a sense of calm and stability, yet beneath this frozen exterior, profound changes are unfolding. As the Earth warms, surface ice melts and sends meltwater deep into small cracks, widening them and weakening ice that has been frozen for thousands of years.

Over time, glaciers thin and floating ice shelves retreat, permanently reshaping the coastline. In some areas, small plants have even begun to take root in soil once locked beneath the ice for centuries. Scientists explain that these ice shelves act like a stopper in a bottle; they hold back the glaciers behind them, preventing them from sliding too quickly into the ocean. When these shelves weaken or shatter, the glaciers accelerate into the sea, reminding us that changes at the poles affect the entire planet.

SubQuestion No : 19

Q.19 According to the passage, what happens when meltwater enters small cracks in the ice?

Comprehension:

Read the given passage carefully and answer the following questions.

From high above, the polar ice appears flat, white, and unchanged. It radiates a sense of calm and stability, yet beneath this frozen exterior, profound changes are unfolding. As the Earth warms, surface ice melts and sends meltwater deep into small cracks, widening them and weakening ice that has been frozen for thousands of years.

Over time, glaciers thin and floating ice shelves retreat, permanently reshaping the coastline. In some areas, small plants have even begun to take root in soil once locked beneath the ice for centuries. Scientists explain that these ice shelves act like a stopper in a bottle; they hold back the glaciers behind them, preventing them from sliding too quickly into the ocean. When these shelves weaken or shatter, the glaciers accelerate into the sea, reminding us that changes at the poles affect the entire planet.

SubQuestion No : 20

Q.20 Which option best summarizes the passage?

Section : Test of Hindi Language and Comprehension

Q.1 वाक्य-विन्यास की दृष्टि से दिये गये वाक्य का शुद्ध रूप चुनें--
माता और पिता का आशीर्वाद के लिए बच्चों बहुत जरूरी है।

- Ans
- 1. आशीर्वाद बच्चों माता और पिता का के लिए बहुत जरूरी है।
 - 2. माता और पिता का आशीर्वाद बच्चों के लिए बहुत जरूरी है।
 - 3. माता और पिता का आशीर्वाद बच्चों के लिए जरूरी है बहुत।
 - 4. बच्चों के लिए बहुत जरूरी है माता और पिता का आशीर्वाद।

Q.2 दिए गए वाक्यों को लिखने का सही क्रम चुनें-
(1)उसके रूप की ख्याति चतुर्दिक व्याप्त थी।
(2)वह अनिन्द्य सुन्दरी थी।
(3)पद्मावती सिंहलदीप की राजकुमारी थी।
(4)उसके पास एक हीरामन तोता था।

- Ans
- 1. 1243
 - 2. 3412
 - 3. 3214
 - 4. 2413

Q.3 निम्नलिखित वाक्यांश के लिए सार्थक शब्द बताएं -
'सब कुछ खाने वाला'

- Ans
- 1. सर्वभक्षी
 - 2. सार्वभौम
 - 3. मांसाहारी
 - 4. शाकाहारी

Q.4 निम्नलिखित वाक्यों में से अतिरिक्त वाक्य का चयन करें -

- Ans
- 1. किताब पढ़ना केवल परीक्षा पास करने का तरीका नहीं, बल्कि जीवन को समझने का एक रास्ता भी है।
 - 2. किताबें सिर्फ ज्ञान ही नहीं देतीं, बल्कि वे हमें अलग-अलग समय और स्थान की यात्रा भी कराती हैं।
 - 3. किताबों में छुपे पात्र हमें जीवन के कई रंग दिखाते हैं, और हमें यह भी सिखाते हैं कि कठिनाई में भी उम्मीद नहीं छोड़नी चाहिए।
 - 4. सुबह का समय पेड़ों के नीचे बैठकर बिताना, पक्षियों की आवाज़ सुनना और स्वच्छ हवा में साँस लेना हमारे मन को शांति और ऊर्जा प्रदान करता है।

Q.5 निम्नलिखित शब्द के लिए वाक्यांश बताएं -
'भावी'

- Ans
- 1. दोपहर का समय
 - 2. मनुष्य जाति से परे
 - 3. जो अच्छे भाग्य वाला हो
 - 4. आगे घटित होने वाला

Q.6 निम्न में से 'ऊँची दूकान फीका पकवान' लोकोक्ति का सही अर्थ कौन-सा है ?

- Ans
- 1. बाहरी दिखावा अधिक, गुणकर्म कम
 - 2. मनचाही वस्तु का मिलना
 - 3. मूर्ख किन्तु संपन्न
 - 4. कमाए कोई और खाए कोई और

Q.7 नीचे दिए गए वाक्यों में से अतिरिक्त वाक्य का चयन कीजिए।

- Ans
- 1. बीसलदेव रासो के रचयिता का नाम नरपति नाल्ह है।
 - 2. इस काल का रचनाकाल और इसका मूलरूप सर्वाधिक विवादस्पद है।
 - 3. पृथ्वीराज रासो आदिकाल का सर्वाधिक प्रसिद्ध काव्य है।
 - 4. इसके रचयिता चंदबरदायी पृथ्वीराज के अन्तरंग बताए जाते हैं।

Q.8 'कुसंग का बुरा प्रभाव पड़ता ही है' अर्थ के लिए सही लोकोक्ति क्या है?

- Ans
- 1. नेकी कर कुए में डाल
 - 2. कोयले की दलाली में मुँह काला
 - 3. बैठे से बेगार भली
 - 4. थोथा चना बाजे घना

Q.9 निम्नलिखित विकल्पों में से सही विकल्प का चयन कर वाक्य पूर्ण करें।
'काला कपड़ा' में 'काला' _____ विशेषण है।

- Ans
- 1. परिणामवाचक
 - 2. सर्वनामिक
 - 3. संख्यावाचक
 - 4. गुणवाचक

Q.10 दिए गए वाक्यों के लिखने का सही क्रम चुनें-
(1) आषाढ़ के कजरारे बादल विरह बढ़ा देते हैं।
(2) श्रावण मास में प्रकृति का सुंदर रूप सामने आता है।
(3) भादो की रात अंधियारी होती है।
(4) अगहन की रातें लम्बी होने लगती हैं।

- Ans
- 1. 1234
 - 2. 3412
 - 3. 4321
 - 4. 2341

Q.11 वह कपड़ा.....लगी।
उपर्युक्त वाक्य में रिक्त स्थान की पूर्ति के लिए उचित क्रिया शब्द का चयन करें-

- Ans
- 1. करना
 - 2. धोने
 - 3. गया
 - 4. चलने

Q.12 सर्वोचित क्रिया शब्द से दिये गये वाक्य का रिक्त स्थान पूर्ण करें--
सूर्य पूर्व से है और हमें प्रकाश देता है ।

- Ans
- 1. डूबता
 - 2. छिपता
 - 3. मिलता
 - 4. निकलता

Q.13 नीचे दिए गए वाक्यों में से शुद्ध वाक्य का चयन कीजिए।

- Ans 1. क्या तुम मुझे नाराज़ हो ?
 2. मुझे घर जाना था ।
 3. रोहन बॉल से उछालता है ।
 4. दीप्ति सुई से बटन सिलती है।

Q.14 निम्नलिखित वाक्य के रिक्त स्थान में क्रिया शब्द का प्रयोग करें -
'हिमांशु उपन्यास रहा है।'

- Ans 1. पढ़ाना
 2. पढ़
 3. पढ़ना
 4. पढ़वाना

Q.15 रिक्त स्थान की पूर्ति उचित क्रिया-विशेषण से करें -
मोहन का कुत्ता बहुत ____ भौंकता है।

- Ans 1. सोते
 2. मीठा
 3. तेज़
 4. नीचा

Comprehension:

गद्यांश के आधार पर प्रश्न का उत्तर दें।

नया साल झबरे-झबरे बालों वाला ऊँची नसल का नन्हा मुन्ना प्यारा-सा पपी है जिसे बरबस, गोद में उठा लेने को जी चाहता है, ऊन के गौले जैसा गरम, गुदगुदा। और वह पुराना साल खुजली का मारा, लीबर बहाता, मरियल, बूढ़ा, लावारिस कुत्ता जो हर घर से दुरदुराया जाता है। नया साल हरी-भरी दूब की वीथी है जिस पर अगल-बगल, रंग-बिरंगे सुगंधित फूलों की लताओं ने मंडप-सा तान रखा है, और पुराना साल कीचड़ और काई से ढँका हुआ वह ऊबड़-खाबड़ कंकरीला रास्ता जिसे अब पीछे मुड़कर ताकते डर लगता है। नया साल एक अनजाने सुख की सिहरन है, पुराना साल भोगे हुए कष्टों की एक कड़ी। कितना बुरा था पुराना साल। न ढंग का खाना न ढंग का कपड़ा। कीमतेँ आसमान से बात करती हुई। रहने को मकान नहीं, दस-दस कुनबे बेशर्मी की चादर ओढ़कर एक जरा-सी कोठरी में जिंदगी के दिन गुजार रहे हैं। क्या था पुराने साल में जिसे चाव से कोई याद करे। अच्छा हुआ, बहुत अच्छा हुआ, उसकी अरथी निकल गई। कोई उसके लिए दो आँसू गिरानेवाला नहीं है।

SubQuestion No : 16

Q.16 निम्नलिखित विकल्पों में से उपरोक्त गद्यांश का उचित शीर्षक चुनें।

Comprehension:

गद्यांश के आधार पर प्रश्न का उत्तर दें।

नया साल झबरे-झबरे बालों वाला ऊँची नसल का नन्हा मुन्ना प्यारा-सा पपी है जिसे बरबस, गोद में उठा लेने को जी चाहता है, ऊन के गौले जैसा गरम, गुदगुदा। और वह पुराना साल खुजली का मारा, लीबर बहाता, मरियल, बूढ़ा, लावारिस कुत्ता जो हर घर से दुरदुराया जाता है। नया साल हरी-भरी दूब की वीथी है जिस पर अगल-बगल, रंग-बिरंगे सुगंधित फूलों की लताओं ने मंडप-सा तान रखा है, और पुराना साल कीचड़ और काई से ढँका हुआ वह ऊबड़-खाबड़ कंकरीला रास्ता जिसे अब पीछे मुड़कर ताकते डर लगता है। नया साल एक अनजाने सुख की सिहरन है, पुराना साल भोगे हुए कष्टों की एक कड़ी। कितना बुरा था पुराना साल। न ढंग का खाना न ढंग का कपड़ा। कीमतेँ आसमान से बात करती हुई। रहने को मकान नहीं, दस-दस कुनबे बेशर्मी की चादर ओढ़कर एक जरा-सी कोठरी में जिंदगी के दिन गुजार रहे हैं। क्या था पुराने साल में जिसे चाव से कोई याद करे। अच्छा हुआ, बहुत अच्छा हुआ, उसकी अरथी निकल गई। कोई उसके लिए दो आँसू गिरानेवाला नहीं है।

SubQuestion No : 17

Q.17 लेखक के अनुसार पुराना साल किस प्रकार का था?

Comprehension:

गद्यांश के आधार पर प्रश्न का उत्तर दें।

नया साल झबरे-झबरे बालों वाला ऊँची नसल का नन्हा मुन्ना प्यारा-सा पपी है जिसे बरबस, गोद में उठा लेने को जी चाहता है, ऊन के गौले जैसा गरम, गुदगुदा। और वह पुराना साल खुजली का मारा, लीबर बहाता, मरियल, बूढ़ा, लावारिस कुत्ता जो हर घर से दुरदुराया जाता है। नया साल हरी-भरी दूब की वीथी है जिस पर अगल-बगल, रंग-बिरंगे सुगंधित फूलों की लताओं ने मंडप-सा तान रखा है, और पुराना साल कीचड़ और काई से ढँका हुआ वह ऊबड़-खाबड़ कंकरीला रास्ता जिसे अब पीछे मुड़कर ताकते डर लगता है। नया साल एक अनजाने सुख की सिहरन है, पुराना साल भोगे हुए कष्टों की एक कड़ी। कितना बुरा था पुराना साल। न ढंग का खाना न ढंग का कपड़ा। कीमतेँ आसमान से बात करती हुई। रहने को मकान नहीं, दस-दस कुनबे बेशर्मी की चादर ओढ़कर एक जरा-सी कोठरी में जिंदगी के दिन गुजार रहे हैं। क्या था पुराने साल में जिसे चाव से कोई याद करे। अच्छा हुआ, बहुत अच्छा हुआ, उसकी अरथी निकल गई। कोई उसके लिए दो आँसू गिरानेवाला नहीं है।

SubQuestion No : 18

Q.18 लेखक पुराना साल क्यों याद नहीं रखना चाहता?

Comprehension:

गद्यांश के आधार पर प्रश्न का उत्तर दें।

नया साल झबरे-झबरे बालों वाला ऊँची नसल का नन्हा मुन्ना प्यारा-सा पपी है जिसे बरबस, गोद में उठा लेने को जी चाहता है, ऊन के गौले जैसा गरम, गुदगुदा। और वह पुराना साल खुजली का मारा, लीबर बहाता, मरियल, बूढा, लावारिस कुत्ता जो हर घर से दुरदुराया जाता है। नया साल हरी-भरी दूब की वीथी है जिस पर अगल-बगल, रंग-बिरंगे सुगंधित फूलों की लताओं ने मंडप-सा तान रखा है, और पुराना साल कीचड़ और काई से ढँका हुआ वह ऊबड़-खाबड़ कंकरीला रास्ता जिसे अब पीछे मुड़कर ताकते डर लगता है। नया साल एक अनजाने सुख की सिहरन है, पुराना साल भोगे हुए कष्टों की एक कड़ी। कितना बुरा था पुराना साल। न दंग का खाना न दंग का कपड़ा। कीमतेँ आसमान से बात करती हुई। रहने को मकान नहीं, दस-दस कुनबे बेशर्मा की चादर ओढ़कर एक जरा-सी कोठरी में जिंदगी के दिन गुजार रहे हैं। क्या था पुराने साल में जिसे चाव से कोई याद करे। अच्छा हुआ, बहुत अच्छा हुआ, उसकी अरथी निकल गई। कोई उसके लिए दो आँसू गिरानेवाला नहीं है।

SubQuestion No : 19

Q.19 उपरोक्त गद्यांश के माध्यम से लेखक क्या कहना चाहता है?

Comprehension:

गद्यांश के आधार पर प्रश्न का उत्तर दें।

नया साल झबरे-झबरे बालों वाला ऊँची नसल का नन्हा मुन्ना प्यारा-सा पपी है जिसे बरबस, गोद में उठा लेने को जी चाहता है, ऊन के गौले जैसा गरम, गुदगुदा। और वह पुराना साल खुजली का मारा, लीबर बहाता, मरियल, बूढा, लावारिस कुत्ता जो हर घर से दुरदुराया जाता है। नया साल हरी-भरी दूब की वीथी है जिस पर अगल-बगल, रंग-बिरंगे सुगंधित फूलों की लताओं ने मंडप-सा तान रखा है, और पुराना साल कीचड़ और काई से ढँका हुआ वह ऊबड़-खाबड़ कंकरीला रास्ता जिसे अब पीछे मुड़कर ताकते डर लगता है। नया साल एक अनजाने सुख की सिहरन है, पुराना साल भोगे हुए कष्टों की एक कड़ी। कितना बुरा था पुराना साल। न दंग का खाना न दंग का कपड़ा। कीमतेँ आसमान से बात करती हुई। रहने को मकान नहीं, दस-दस कुनबे बेशर्मा की चादर ओढ़कर एक जरा-सी कोठरी में जिंदगी के दिन गुजार रहे हैं। क्या था पुराने साल में जिसे चाव से कोई याद करे। अच्छा हुआ, बहुत अच्छा हुआ, उसकी अरथी निकल गई। कोई उसके लिए दो आँसू गिरानेवाला नहीं है।

SubQuestion No : 20

Q.20 निम्नलिखित विकल्पों में से 'बूढा' शब्द का पर्यायवाची शब्द पहचानें।

Section : Test of Hindi Language and Comprehension1

Q.1 'धूप में बाल सफ़ेद करना' मुहावरे का सही अर्थ क्या होगा?

- Ans
- 1. लूटना
 - 2. दुर्गत करना
 - 3. अनुभवहीन होना
 - 4. छीन लेना

Q.2 अधोलिखित शब्द में से 'छाँह' शब्द का विलोम पहचाने-

- Ans
- 1. पछाँह
 - 2. धूप
 - 3. कनैला
 - 4. बनेला

Q.3 'कोटला' का पर्याय निम्न में से है--

- Ans
- 1. तंबू
 - 2. कोठरी
 - 3. तट
 - 4. क़िला

Q.4 निम्न में से 'तत्सम' शब्द पहचानें--

- Ans
- 1. क्षेत्र
 - 2. खेल
 - 3. गाँठ
 - 4. खार

Q.5 निम्नलिखित में से कौन-सा विकल्प अनेकार्थक शब्द 'गहन' का अर्थ नहीं है?

- Ans
- 1. घना
 - 2. अवसर
 - 3. गहरा
 - 4. जटिल

Q.6 "आर्द्रक" शब्द का तद्भव रूप क्या होगा?

- Ans
- 1. अंजन
 - 2. अदरक
 - 3. अंडा
 - 4. अड़चन

Q.7 निम्नलिखित लोकोक्ति के सही अर्थ की पहचान कीजिए-
'गंगा बही जाए कलवारिन छाती पीटे'

- Ans
- 1. मूर्खता में व्यर्थ की चिंता करना
 - 2. परेशानी से हार मान जाना
 - 3. मुश्किल में पड़ना
 - 4. मुश्किल में धैर्य का परिचय देना

Q.8 दिये गये वाक्य के किस भाग में त्रुटि है?
देश की प्रगति में युवाओं की महत्वपूर्ण भूमिका होती है।

- Ans
- 1. युवाओं की
 - 2. देश की प्रगति में
 - 3. भूमिका होती है।
 - 4. महत्वपूर्ण

Q.9 निम्नलिखित में से 'मछली' का पर्यायवाची कौन नहीं है ?

- Ans
- 1. जलपात्र
 - 2. सफरी
 - 3. झख
 - 4. मीन

Q.10 निम्नलिखित लोकोक्ति के सही अर्थ की पहचान कीजिए-
'खेतिहर व्यापार करे, राम न मारे खुद ही मरे'

- Ans
- 1. किसानों को कुशलता से करना।
 - 2. जो जिस काम को जानता है, वही अच्छे से कर सकता है।
 - 3. व्यापार में निपुणता प्राप्त करना।
 - 4. खेती और व्यापार में सामंजस्य बैठाना।

Q.11 दिए गए विकल्पों में से अनेकार्थी शब्द 'भूत' का एक अर्थ नहीं है -

- Ans
- 1. बीता काल
 - 2. भाव
 - 3. शरीर के पंचभूत
 - 4. प्रेत

Q.12 दिए गए वाक्य के किस भाग में त्रुटि है ?

'यह नेता मंत्रीपरिषद में नहीं है।'

- Ans
- 1. में नहीं है
 - 2. यह
 - 3. मंत्रीपरिषद
 - 4. नेता

Q.13 'हलाहल' किसका पर्यायवाची शब्द है ?

- Ans
- 1. अंतक
 - 2. मदिरा
 - 3. विष
 - 4. मिष्ठान

Q.14 निम्नलिखित वाक्य में वर्तनी की त्रुटियाँ पहचानें और शुद्ध वाक्य लिखें।

आज हम रेल संग्रहालय गए थे, वहाँ बच्चों को बहुत आनंद आय।

- Ans
- 1. आज हम रेल संग्रहालया गए थे, वहाँ बाच्चों को बहोत आनंद आया।
 - 2. आज हम रेल संग्रहालय गए थे, वहाँ बच्चों को बहुत आनंद आया।
 - 3. आज हम रेल संग्रहालय गए थी, वह बच्चों को बाहुत आनंद आया।
 - 4. आज हम रेल संग्रहालय गए थे, वहाँ बच्चों को बहुत अनंद आया।

Q.15 वर्तनी के आधार पर वाक्य के किस भाग में त्रुटि है?

निषिद्ध क्षेत्र में अनधिकृत प्रवेश पर दंड का प्रावधान है।

- Ans
- 1. का प्रावधान है।
 - 2. प्रवेश पर दंड
 - 3. निषिद्ध क्षेत्र में
 - 4. अनधिकृत

Comprehension:

निम्नलिखित गद्यांश को ध्यानपूर्वक पढ़कर पूछे गए प्रश्नों के लिए सही विकल्प चुनकर लिखें -

गाँधी जी ने अपने हर कार्य को गरिमामय मानते हुए किया। वे अपने सहयोगियों को श्रम की गरिमा की सीख दिया करते थे। दक्षिण अफ्रीका में भारतीय लोगों के लिए संघर्ष करते हुए उन्होंने सफाई करने जैसे कार्य को भी कभी नीचा नहीं समझा और इसी कारण स्वयं उनकी पत्नी कस्तूरबा से भी उनके मतभेद हो गए थे।

बाबा आमटे ने समाज द्वारा तिरस्कृत कुछ रोगियों की सेवा में अपना समस्त जीवन समर्पित कर दिया। सुंदरलाल बहुगुणा ने अपने प्रसिद्ध 'चिपको आंदोलन' के माध्यम से पेड़ों को संरक्षण प्रदान किया। फ़ादर डेमियन ऑफ मोलोकाई, मार्टिन लूथर किंग और मदर टेरेसा जैसी महान आत्माओं ने इसी सत्य को ग्रहण किया। इनमें से किसी ने भी कोई सत्ता प्राप्त नहीं की, बल्कि अपने जनकल्याणकारी कार्यों से लोगों के दिलों पर शासन किया। गाँधीजी का स्वतंत्रता के लिए संघर्ष उनके जीवन का एक पहलू है, किंतु उनका मानसिक क्षितिज वास्तव में एक राष्ट्र की सीमाओं में बँधा हुआ नहीं था। उन्होंने सभी लोगों में ईश्वर के दर्शन किए। यही कारण था कि कभी किसी पंचायत तक के सदस्य नहीं बनने वाले गाँधीजी की जब मृत्यु हुई तो अमेरिका का राष्ट्रध्वज भी झुका दिया गया था।⁹⁸

SubQuestion No : 16

Q.16 उपयुक्त शीर्षक दीजिए-

Comprehension:

निम्नलिखित गद्यांश को ध्यानपूर्वक पढ़कर पूछे गए प्रश्नों के लिए सही विकल्प चुनकर लिखें -

गाँधी जी ने अपने हर कार्य को गरिमामय मानते हुए किया। वे अपने सहयोगियों को श्रम की गरिमा की सीख दिया करते थे। दक्षिण अफ्रीका में भारतीय लोगों के लिए संघर्ष करते हुए उन्होंने सफाई करने जैसे कार्य को भी कभी नीचा नहीं समझा और इसी कारण स्वयं उनकी पत्नी कस्तूरबा से भी उनके मतभेद हो गए थे।

बाबा आमटे ने समाज द्वारा तिरस्कृत कुछ रोगियों की सेवा में अपना समस्त जीवन समर्पित कर दिया। सुंदरलाल बहुगुणा ने अपने प्रसिद्ध 'चिपको आंदोलन' के माध्यम से पेड़ों को संरक्षण प्रदान किया। फ़ादर डेमियन ऑफ मोलोकाई, मार्टिन लूथर किंग और मदर टेरेसा जैसी महान आत्माओं ने इसी सत्य को ग्रहण किया। इनमें से किसी ने भी कोई सत्ता प्राप्त नहीं की, बल्कि अपने जनकल्याणकारी कार्यों से लोगों के दिलों पर शासन किया। गाँधीजी का स्वतंत्रता के लिए संघर्ष उनके जीवन का एक पहलू है, किंतु उनका मानसिक क्षितिज वास्तव में एक राष्ट्र की सीमाओं में बँधा हुआ नहीं था। उन्होंने सभी लोगों में ईश्वर के दर्शन किए। यही कारण था कि कभी किसी पंचायत तक के सदस्य नहीं बनने वाले गाँधीजी की जब मृत्यु हुई तो अमेरिका का राष्ट्रध्वज भी झुका दिया गया था।⁹⁸

SubQuestion No : 17

Q.17 सभी महान आत्माओं ने किस सत्य को ग्रहण किया ?

Comprehension:

निम्नलिखित गद्यांश को ध्यानपूर्वक पढ़कर पूछे गए प्रश्नों के लिए सही विकल्प चुनकर लिखें -

गाँधी जी ने अपने हर कार्य को गरिमामय मानते हुए किया। वे अपने सहयोगियों को श्रम की गरिमा की सीख दिया करते थे। दक्षिण अफ्रीका में भारतीय लोगों के लिए संघर्ष करते हुए उन्होंने सफाई करने जैसे कार्य को भी कभी नीचा नहीं समझा और इसी कारण स्वयं उनकी पत्नी कस्तूरबा से भी उनके मतभेद हो गए थे।

बाबा आमटे ने समाज द्वारा तिरस्कृत कुछ रोगियों की सेवा में अपना समस्त जीवन समर्पित कर दिया। सुंदरलाल बहुगुणा ने अपने प्रसिद्ध 'चिपको आंदोलन' के माध्यम से पेड़ों को संरक्षण प्रदान किया। फ़ादर डेमियन ऑफ मोलोकाई, मार्टिन लूथर किंग और मदर टेरेसा जैसी महान आत्माओं ने इसी सत्य को ग्रहण किया। इनमें से किसी ने भी कोई सत्ता प्राप्त नहीं की, बल्कि अपने जनकल्याणकारी कार्यों से लोगों के दिलों पर शासन किया। गाँधीजी का स्वतंत्रता के लिए संघर्ष उनके जीवन का एक पहलू है, किंतु उनका मानसिक क्षितिज वास्तव में एक राष्ट्र की सीमाओं में बँधा हुआ नहीं था। उन्होंने सभी लोगों में ईश्वर के दर्शन किए। यही कारण था कि कभी किसी पंचायत तक के सदस्य नहीं बनने वाले गाँधीजी की जब मृत्यु हुई तो अमेरिका का राष्ट्रध्वज भी झुका दिया गया था।⁹⁸

SubQuestion No : 18

Q.18 गाँधी जी का मानसिक क्षितिज एक राष्ट्र की सीमाओं में बँधा हुआ नहीं था-आशय स्पष्ट कीजिए।

Comprehension:

निम्नलिखित गद्यांश को ध्यानपूर्वक पढ़कर पूछे गए प्रश्नों के लिए सही विकल्प चुनकर लिखें -

गाँधी जी ने अपने हर कार्य को गरिमामय मानते हुए किया। वे अपने सहयोगियों को श्रम की गरिमा की सीख दिया करते थे। दक्षिण अफ्रीका में भारतीय लोगों के लिए संघर्ष करते हुए उन्होंने सफाई करने जैसे कार्य को भी कभी नीचा नहीं समझा और इसी कारण स्वयं उनकी पत्नी कस्तूरबा से भी उनके मतभेद हो गए थे।

बाबा आमटे ने समाज द्वारा तिरस्कृत कुछ रोगियों की सेवा में अपना समस्त जीवन समर्पित कर दिया। सुंदरलाल बहुगुणा ने अपने प्रसिद्ध 'चिपको आंदोलन' के माध्यम से पेड़ों को संरक्षण प्रदान किया। फ़ादर डेमियन ऑफ मोलोकाई, मार्टिन लूथर किंग और मदर टेरेसा जैसी महान आत्माओं ने इसी सत्य को ग्रहण किया। इनमें से किसी ने भी कोई सत्ता प्राप्त नहीं की, बल्कि अपने जनकल्याणकारी कार्यों से लोगों के दिलों पर शासन किया। गाँधीजी का स्वतंत्रता के लिए संघर्ष उनके जीवन का एक पहलू है, किंतु उनका मानसिक क्षितिज वास्तव में एक राष्ट्र की सीमाओं में बँधा हुआ नहीं था। उन्होंने सभी लोगों में ईश्वर के दर्शन किए। यही कारण था कि कभी किसी पंचायत तक के सदस्य नहीं बनने वाले गाँधीजी की जब मृत्यु हुई तो अमेरिका का राष्ट्रध्वज भी झुका दिया गया था।⁹⁸

SubQuestion No : 19

Q.19 गाँधी जी की मृत्यु पर अमेरिका का राष्ट्रध्वज झुका दिया गया क्योंकि अमेरिकावासी गाँधी जी को-

Comprehension:

निम्नलिखित गद्यांश को ध्यानपूर्वक पढ़कर पूछे गए प्रश्नों के लिए सही विकल्प चुनकर लिखें -

गाँधी जी ने अपने हर कार्य को गरिमामय मानते हुए किया। वे अपने सहयोगियों को श्रम की गरिमा की सीख दिया करते थे। दक्षिण अफ्रीका में भारतीय लोगों के लिए संघर्ष करते हुए उन्होंने सफाई करने जैसे कार्य को भी कभी नीचा नहीं समझा और इसी कारण स्वयं उनकी पत्नी कस्तूरबा से भी उनके मतभेद हो गए थे।

बाबा आमटे ने समाज द्वारा तिरस्कृत कुछ रोगियों की सेवा में अपना समस्त जीवन समर्पित कर दिया। सुंदरलाल बहुगुणा ने अपने प्रसिद्ध 'चिपको आंदोलन' के माध्यम से पेड़ों को संरक्षण प्रदान किया। फ़ादर डेमियन ऑफ मोलोकाई, मार्टिन लूथर किंग और मदर टेरेसा जैसी महान आत्माओं ने इसी सत्य को ग्रहण किया। इनमें से किसी ने भी कोई सत्ता प्राप्त नहीं की, बल्कि अपने जनकल्याणकारी कार्यों से लोगों के दिलों पर शासन किया। गाँधीजी का स्वतंत्रता के लिए संघर्ष उनके जीवन का एक पहलू है, किंतु उनका मानसिक क्षितिज वास्तव में एक राष्ट्र की सीमाओं में बँधा हुआ नहीं था। उन्होंने सभी लोगों में ईश्वर के दर्शन किए। यही कारण था कि कभी किसी पंचायत तक के सदस्य नहीं बनने वाले गाँधीजी की जब मृत्यु हुई तो अमेरिका का राष्ट्रध्वज भी झुका दिया गया था।⁹⁸

SubQuestion No : 20

Q.20 'स्वतंत्रता' का विलोम लिखिए-