



GOVT. OF NCT OF DELHI
Delhi Subordinate Services Selection Board
FC-18, Institutional Area, Karkardooma, Delhi – 110092.
www.dsssb.delhigovt.nic.in

Participant Name	KALPANA CHOUDHARY
Test Center Name	Aadarsh Pariksha Kendra CENTER A - Gate No 1 - Noida Sector 64
Test Date	25/04/2026
Test Time	1:00 PM - 3:00 PM
Subject	Multi Tasking Staff

Section : General intelligence and Reasoning Ability

Q.1 Refer to the following series and answer the question (All numbers are single digit numbers only. Counting to be done from left to right)
(Left) 4 9 8 5 1 6 4 5 9 6 5 3 4 9 6 2 9 4 8 5 1 1 8 4 1 5 7 (Right)
How many such odd numbers are there each of which is immediately preceded by an odd number and also immediately followed by an odd number?

- Ans
- 1. 4
 - 2. 1
 - 3. 2
 - 4. 3

Q.2 All 59 people are standing in a row, facing North. GH is 26th from the right end, while KL is 25th from the left end. How many people are there between GH and KL?
1739

- Ans
- 1. 7
 - 2. 5
 - 3. 10
 - 4. 8

Q.3 P is the brother of Q. Q is the father of H. H is the daughter of I. How is P related to I?

- Ans
- 1. Husband's brother
 - 2. Mother's brother
 - 3. Father's brother
 - 4. Wife's brother

Q.4 Seven boxes A, E, I, O, U, P and Q are kept one over the other but not necessarily in the same order.
P is kept immediately above E. U is kept immediately above I. Only one box A is kept above O. Only two boxes are kept above P. U is not kept at the third position from the bottom.
How many boxes are kept between Q and A?

- Ans
- 1. Three
 - 2. Two
 - 3. Four
 - 4. One

Q.5 Each of P, Q, R, S, T, U and V has an exam on a different day of a week, starting from Monday and ending on Sunday of the same week. R has the exam on Friday. Only five people have exams after P. U has the exam immediately after V but before R. Only one person has the exam between Q and R. T does not have the exam on Saturday. How many people have exams between V and S?1601

- Ans 1. Four
 2. Two
 3. One
 4. Three

Q.6 Read the given statements and conclusions carefully. Assuming that the information given in the statements is true, even if it appears to be at variance with commonly known facts, decide which of the given conclusion(s) logically follow(s) from the statements.

Statements:

Some screws are drillers.

All hammers are drillers.

Conclusions:

(I) Some screws are hammers.

(II) All drillers are hammers.2044

- Ans 1. Only conclusion (II) follows.
 2. Only conclusion (I) follows.
 3. Both conclusions (I) and (II) follow.
 4. Neither conclusion (I) nor (II) follows.

Q.7 Refer to the following number, symbol series and answer the question. Counting to be done from left to right only. All numbers are single-digit numbers.

(Left) 1 # 3 + 6 9 4 \$ 2 * 7 8 Ω 5 & % (Right)

How many such symbols are there, each of which is immediately preceded by a symbol and also immediately followed by a number?

- Ans 1. One
 2. Three
 3. None
 4. Two

Q.8 In a certain code language, 'TASK' is coded as '5791' and 'ASKE' is coded as '9871'. What is the code for 'E' in the given code language?

- Ans 1. 1
 2. 9
 3. 8
 4. 7

Q.9 Each of P, Q, R, S, T, U and V has an exam on a different day of a week starting from Monday and ending on Sunday of the same week. Only three people have exams before T. Only two people have exams between R and T. Q has the exam immediately after U but before R. S has the exam immediately before T but after P. V does not have the exam on Tuesday. How many people have exams between U and P?1611

- Ans 1. One
 2. Four
 3. Three
 4. Two

Q.10 In this question, statement is followed by two conclusions. Find out which conclusion is true based on the given statement.

Statement : $A < B < C = D < E = F$

Conclusions:

I. $A < F$

II $C = F$

- Ans
- 1. Only I is true
 - 2. Neither I nor II is true
 - 3. Both I and II are true
 - 4. Only II is true

Q.11 Refer to the following number and symbol series and answer the question that follows. Counting to be done from left to right only.

(Left) 6 % 4 5 8 @ 8 3 % 4 € & 7 1 2 2 \$ 3 6 £ 6 € (Right)

How many such symbols are there each of which is immediately preceded by a number and also immediately followed by a number?

- Ans
- 1. 7
 - 2. 4
 - 3. 5
 - 4. 6

Q.12 In a certain code language, 'RAVE' is coded as '1967' and 'VALE' is coded as '6789'. What is the code for 'L' in the given code language?1243

- Ans
- 1. 7
 - 2. 9
 - 3. 8
 - 4. 6

Q.13 Refer to the following series and answer the question that follows (all numbers are single digit numbers only). Counting to be done from left to right only.

(Left) 1 3 7 1 4 7 3 6 9 1 2 6 9 5 8 1 7 5 6 1 4 8 2 8 3 1 5 (Right)

How many such odd digits are there, each of which is immediately preceded by an even digit and also immediately followed by an odd digit?

- Ans
- 1. One
 - 2. Three
 - 3. More than Three
 - 4. Two

Q.14 Seven people E, F, G, H, S, T and U are sitting in a row, facing the north. Only three people sit between T and E. S sits to the immediate left of E. No one sits to the right of F. Only two people sit between F and S. U sits to the immediate right of G. How many people sit between H and U?

- Ans
- 1. Two
 - 2. One
 - 3. Four
 - 4. Three

Q.15 Refer to the following series and answer the question that follows (all numbers are single digit numbers only). Counting to be done from left to right only.

(Left) 5 5 5 4 4 4 3 5 5 5 5 4 3 5 6 6 7 6 6 7 7 7 7 4 5 5 4 (Right)

How many such odd digits are there, each of which is immediately preceded by an even digit and also immediately followed by an odd digit?

- Ans
- 1. Four
 - 2. Three
 - 3. Five
 - 4. Two

Q.16 In a certain code language, 'WAKE' is coded as '2560' and 'CAKE' is coded as '6075'. What is the code for 'W' in the given code language?

- Ans
- 1. 6
 - 2. 0
 - 3. 5
 - 4. 2

Q.17 In a certain code language,
A x B means 'A is the mother of B'
A - B means 'A is the husband of B'
A / B means 'A is the sister of B'

Based on the above, how is P related to T if 'P x Q - R x S / T'?1828

- Ans
- 1. Father's sister
 - 2. Son's daughter
 - 3. Father's mother
 - 4. Mother's mother

Q.18 A, B, C, D, E, F and G are sitting around a circular table, facing the centre. E sits to the immediate left of G. F sits second to the left of E. C is the immediate neighbour of A and B. D sits second to the right of B. How many people sit between A and F when counted from the left of F?

- Ans
- 1. Two
 - 2. Four
 - 3. One
 - 4. Three

Q.19 In this question, statement is followed by two conclusions. Find out which conclusion is true based on the given statement.

Statement : $D < G < E > A > M$

Conclusions:

I. $M < E$

II. $D < A$

- Ans
- 1. Only II is true
 - 2. Neither I nor II is true
 - 3. Both I and II are true
 - 4. Only I is true

Q.20 Refer to the following letter, symbol series and answer the question that follows.
Counting to be done from left to right only.

(Left) £ Q & R G K % @ U \$ D C & Ω T Y E A B * # V (Right)

How many such symbols are there, each of which is immediately preceded by a letter and also immediately followed by a letter?

- Ans
- 1. None
 - 2. Three
 - 3. Two
 - 4. One

Section : General intelligence and Reasoning Ability1

Q.1 Based on the English alphabetical order, three of the following four letter cluster pairs are alike in a certain way and thus form a group. Which is the one that does not belong to that group?
(Note: The odd man out is not based on the number of consonants/vowels or their position in the letter cluster)

- Ans
- 1. OP - SR
 - 2. MQ - PT
 - 3. LP - OS
 - 4. NR - QU

Q.2 Based on the English alphabetical order, three of the following four letter cluster pairs are alike in a certain way and thus form a group. Which is the one that does not belong to that group?
Note: (The odd one out is not based on the number of consonants/vowels or their position in the letter cluster)

- Ans
- 1. UX - VY
 - 2. AC - BE
 - 3. KN - LO
 - 4. FI - GJ

Q.3 If 2 is added to each even digit and 1 is subtracted from each odd digit in the number 7193524, then what will be the difference between the greatest and smallest digits in the new number thus formed? (Odd/Even digits should NOT be determined based on its position in the number.)175

- Ans
- 1. 2
 - 2. 4
 - 3. 6
 - 4. 8

Q.4 Select the set in which the numbers are related in the same way as are the numbers of the following sets.

(NOTE : Operations should be performed on the whole numbers, without breaking down the numbers into their constituent digits. E.g. 13 - Operations on 13 such as adding / subtracting / multiplying etc. to 13 can be performed. Breaking down 13 into 1 and 3 and then performing mathematical operations on 1 and 3 is not allowed.)

(36, 33.9, 31.8)

(53, 50.9, 48.8)

- Ans
- 1. (44, 42.9, 41.8)
 - 2. (65, 62.9, 60.8)
 - 3. (23, 20.9, 16.8)
 - 4. (79, 75.9, 74.8)

Q.5 Select the pair which follows the same pattern as that followed by the two set of pairs given below. Both pairs follow the same pattern.

FIJ-KNO

TWX-YBC

- Ans
- 1. LNN-PST
 - 2. LNN-QTU
 - 3. LOP-QTU
 - 4. LOP-PTT

Q.6 Select the pair which follows the same pattern as that followed by the two set of pairs given below. Both pairs follow the same pattern.

EDF-DCE

BAC-AZB

- Ans
- 1. XVW-WVX
 - 2. XVW-VUW
 - 3. XWY-WVX
 - 4. XWY-VVW

Q.7 In the following number-pairs, the second number is obtained by applying certain mathematical operation(s) to the first number. Which numbers should replace X and Y, so that the pattern followed by the two numbers on the left side of :: is same as that on the right side of ::?

(NOTE : Operations should be performed on the whole numbers, without breaking down the numbers into their constituent digits. E.g. 13 - Operations on 13 such as adding / subtracting / multiplying etc. to 13 can be performed. Breaking down 13 into 1 and 3 and then performing mathematical operations on 1 and 3 is not allowed.)

X : 73 :: 55 : Y

- Ans
- 1. X = 23 , Y = 105
 - 2. X = 33 , Y = 175
 - 3. X = 13 , Y = 155
 - 4. X = 13 , Y = 165

Q.8 Select the set in which the numbers are related in the same way as are the numbers of the following sets.

(NOTE : Operations should be performed on the whole numbers, without breaking down the numbers into their constituent digits. E.g. 13 - Operations on 13 such as adding / subtracting / multiplying etc. to 13 can be performed. Breaking down 13 into 1 and 3 and then performing mathematical operations on 1 and 3 is not allowed.)

(71, 86, 61)

(93, 108, 83)

- Ans
- 1. (122, 127, 102)
 - 2. (82, 97, 62)
 - 3. (104, 119, 94)
 - 4. (55, 65, 45)

Q.9 What will come in the place of the question mark (?) in the following equation, if '+' and 'x' are interchanged and '-' and '÷' are interchanged?

$$108 - 12 \times 6 + 2 \div 18 = ?$$

- Ans
- 1. 9
 - 2. 0
 - 3. 5
 - 4. 3

Q.10 Based on the English alphabetical order, three of the following four are alike in a certain way and thus form a group. Which is the one that does not belong to that group?

(Note: The odd man out is not based on the number of consonants/vowels or their position in the letter cluster)

- Ans
- 1. GKJ
 - 2. MQP
 - 3. QUT
 - 4. VRS

Q.11 Select the pair which follows the same pattern as that followed by the two pairs given below. Both pairs follow the same pattern.

VZA-WAB

QUV-RVW

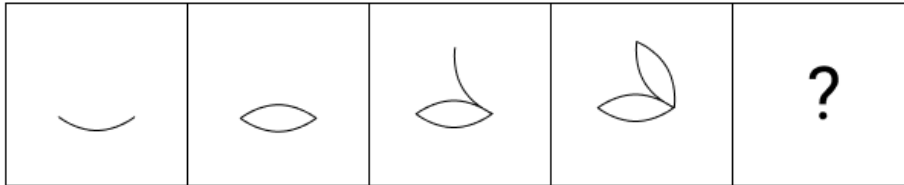
- Ans
- 1. VYY-WAB
 - 2. VYY-VZA
 - 3. RVW-SWX
 - 4. VZA-VAA

Q.12 What should come in place of '?' in the given series?

10, 21, 37, 58, 84, ?


- Ans
- 1. 105
 - 2. 118
 - 3. 108
 - 4. 115

Q.13 Identify the figure given in the options, which when put in place of the '?', will logically complete the series.




Ans

✓ 1.



✗ 2.



✗ 3.



✗ 4.



Q.14 If 'A' stands for '+', 'B' stands for 'x', 'C' stands for '+' and 'D' stands for '-', what will come in place of question mark '?' in the following equation?
15 A 5 C 9 B 17 D 14 = ?

Ans

✓ 1. 142

✗ 2. 143

✗ 3. 141

✗ 4. 144

Q.15 If 2 is added to each even digit and 3 is subtracted from each odd digit in the number 693245, what will be the sum of the greatest and smallest digit in the number thus formed?186

Ans

✓ 1. 8

✗ 2. 4

✗ 3. 6

✗ 4. 10

Q.16 Read the given statements and conclusions carefully. You have to take the given statements to be true even if they seem to be at variance from commonly known facts. You have to decide which conclusion/s logically follow/s from the given statements.

Statements: All hammers are knives. All hammers are chisels.

Conclusion (I) : Some knives are chisels.

Conclusion (II) : All chisels are hammers.

- Ans
- 1. Only conclusion (II) follows
 - 2. Only conclusion (I) follows
 - 3. Both conclusions (I) and (II) follow
 - 4. Neither conclusion (I) nor (II) follows

Q.17 What should come in place of '?' in the given series?
100 95 90 85 80 ?

- Ans
- 1. 75
 - 2. 73
 - 3. 76
 - 4. 74

Q.18 What should come in place of '?' in the given series?

6, 14, 30, 62, 126, ?4839

- Ans
- 1. 254
 - 2. 248
 - 3. 252
 - 4. 250

Q.19 What will come in the place of '?' in the following equation, if '+' and '-' are interchanged and 'x' and '÷' are interchanged?
 $45 - 10 \times 5 + 3 \div 4 = ?$

- Ans
- 1. 35
 - 2. 34
 - 3. 31
 - 4. 33

Q.20 If the water source is placed along X-Y, as shown in the figure, which of the given options will be the water reflection of the given figure?



- Ans
- 1. P Y M p 8 t
 - 2. P Y 8 q t w
 - 3. P Y 8 q w f
 - 4. P Y 8 q w t

Q.1 In February 2026, the new launch of Mobile Quality Control Vans will mainly help in improving:

- Ans
- 1. Railway infrastructure
 - 2. Highway construction standards
 - 3. Urban metro systems
 - 4. Airport security

Q.2 How did the British change the composition of their army after 1857?

- Ans
- 1. They disbanded the army entirely
 - 2. They recruited only from Awadh and Bihar
 - 3. They reduced the proportion of Indian soldiers and increased European soldiers
 - 4. They increased the number of Indian soldiers

Q.3 Who announced the official theme for National Technology Day 2025?

- Ans
- 1. Ministry of Electronics and Information Technology, Government of India
 - 2. Defence Research and Development Organisation, Government of India
 - 3. Technology Development Board under the Department of Science and Technology, Government of India
 - 4. Ministry of Education, Government of India

Q.4 Which statutory authority regulates and supervises life insurance companies, general insurance companies, and insurance intermediaries in India?

- Ans
- 1. NABARD
 - 2. IRDAI
 - 3. SEBI
 - 4. RBI

Q.5 Who founded the physical culture movement in Bengal in 1902 that subsequently developed into the Anushilan Samiti?

- Ans
- 1. Barindra Kumar Ghosh
 - 2. Aurobindo Ghosh
 - 3. Surya Sen
 - 4. Satish Chandra Bose

Q.6 What is the term for the rate at which the Reserve Bank of India absorbs the excess liquidity from commercial banks?

- Ans
- 1. Reverse Repo Rate
 - 2. Repo Rate
 - 3. Bank Rate
 - 4. Policy Rate

Q.7 Which teams were jointly honoured as the National Team of the Year at the Sportstar Aces Awards 2025 ?

- Ans
- 1. Indian Men's and Women's Chess Teams
 - 2. Indian Men's and Women's Cricket Teams
 - 3. Indian Men's and Women's Hockey Teams
 - 4. Indian Men's and Women's Badminton Teams

Q.8 In which year did George V announce the transfer of the capital of British India from Calcutta to Delhi?

- Ans
- 1. 1919
 - 2. 1911
 - 3. 1905
 - 4. 1909

Q.9 What is the name of the mission carrying ISRO astronaut Shubhanshu Shukla?

Ans 1. Axiom-4

2. Gaganyaan-1

3. Axion-3

4. SpaceX-7

Q.10 Which of the following financial intermediary societies generally consists of 15 to 20 local women, who come together for a short period and create a common fund for their business needs?

Ans 1. Self-Help Groups

2. Rural Cooperative Groups

3. Grameen Mahila Groups

4. Joint Liability Groups

Q.11 The Human Development Index (HDI), calculated by the United Nations Development Programme (UNDP), includes which among the following aspects in its calculation?

Ans 1. Employment rate

2. Total population size

3. Average years of schooling

4. Number of hospitals

Q.12 Where was the first leg of the Khelo India Winter Games held in January-2026?

Ans 1. Himachal Pradesh

2. Jammu & Kashmir

3. Uttarakhand

4. Ladakh

Q.13 In which army did Mangal Pandey serve as a sepoy?

Ans 1. Mughal Army

2. Maratha Army

3. Indian National Army

4. Army of the British East India Company

Q.14 Which of the following cricket players was awarded Player of the Match for his performance on 15 February 2026 during the ICC Men's T20 World Cup 2026 encounter between India and Pakistan at Colombo?

Ans 1. Ishan Kishan

2. Babar Azam

3. Surya Kumar Yadav

4. Jasprit Bumrah

Q.15 The report of the Hunter Committee, appointed to inquire into the Jallianwala Bagh massacre, led to widespread criticism because it:

Ans 1. Recommended complete withdrawal of British troops from Punjab

2. Demanded immediate independence for India

3. Justified General Dyer's actions and supported repressive measures

4. Abolished martial law in all provinces

Q.16 In February 2026, the Union Cabinet approved a proposal to rename which of the following states?

- Ans
- 1. West Bengal
 - 2. Odisha
 - 3. Punjab
 - 4. Kerala

Q.17 In the formula, PDI=Personal income (PI) – Personal tax payments – Non-tax payments, what is the full form of PDI?

- Ans
- 1. Private Disposable Income
 - 2. Private Direct Income
 - 3. Personal Direct Income
 - 4. Personal Disposable Income

Q.18 In February 2026, the successful test-firing of the Agni-III missile took place in which Indian state ?

- Ans
- 1. Rajasthan
 - 2. Andhra Pradesh
 - 3. Odisha
 - 4. Gujarat

Q.19 Which measure most directly addresses the long-term structural causes of rural poverty in India?

- Ans
- 1. Increasing food subsidies
 - 2. Improving education and skill development
 - 3. Expanding irrigation coverage
 - 4. Short-term cash transfers

Q.20 The Southern Regional Language Centre (SRLC), which offers courses in major South Indian languages, is located in which city?

- Ans
- 1. Hyderabad
 - 2. Chennai
 - 3. Bengaluru
 - 4. Mysuru

Section : **General Awareness1**

Q.1 Poush Mela is a famous festival of which of the following states of India for its folk music and Baul singers?

- Ans
- 1. West Bengal
 - 2. Odisha
 - 3. Maharashtra
 - 4. Gujarat

Q.2 Which among the following nutrient deficiencies can result in weak bones and teeth in humans?

- Ans
- 1. Protein
 - 2. Iron
 - 3. Vitamin A
 - 4. Calcium

Q.11 Which Article of the Constitution of India empowers High Courts to issue writs for enforcement of Fundamental Rights and for any other purpose?

- Ans
- 1. Article 226
 - 2. Article 229
 - 3. Article 223
 - 4. Article 228

Q.12 Which of the following is the phenomenon that results in the alteration of DNA sequences and consequently leads to changes in the genotype and phenotype of an organism?

- Ans
- 1. Crossing Over
 - 2. Mutation
 - 3. Cloning
 - 4. Fertilization

Q.13 A scientist wants to create a new medicine that targets the process of DNA replication. Which cell component should the medicine interact with to be effective?

- Ans
- 1. Ribosome
 - 2. Cell wall
 - 3. Nucleus
 - 4. Lysosome

Q.14 The provision of 'Right to Education' is mentioned in which of the following Articles of the Indian Constitution?

- Ans
- 1. 19
 - 2. 19A
 - 3. 20
 - 4. 21A

Q.15 Who built the Hawa Mahal in Jaipur?

- Ans
- 1. Maharaja Madho Singh
 - 2. Maharaja Sawai Pratap Singh
 - 3. Maharaja Ram Singh
 - 4. Maharaja Sawai Jai Singh

Q.16 According to Article 58 of the Constitution of India, which of the following is NOT a constitutional qualification for a person to be elected as the President of India?

- Ans
- 1. Must be qualified for election as a member of the Lok Sabha
 - 2. Must not hold any office of profit under the Union or State Government
 - 3. Must have completed 30 years of age
 - 4. Must be a citizen of India

Q.17 The tea-producing Jalpaiguri district is part of which state of India?

- Ans
- 1. Assam
 - 2. West Bengal
 - 3. Tamil Nadu
 - 4. Karnataka

Q.18 Which UNESCO site in Tamil Nadu is known for its shore temples and ancient sculptures?

- Ans**
- 1. Brihadeeswarar Temple
 - 2. Kanchipuram
 - 3. Mahabalipuram
 - 4. Meenakshi Temple

Q.19 The Himalayan mountain range passes through which among the following states?

- Ans**
- 1. Tamil Nadu
 - 2. Himachal Pradesh
 - 3. Odisha
 - 4. Gujarat

Q.20 Which of these is part of the Peninsular Plateau?

- Ans**
- 1. Brahmaputra Valley
 - 2. Satpura Range
 - 3. Kashmir Valley
 - 4. Ganga Plains

Section : **Arithmetical and Numerical Ability**

Q.1 In a test, B got 50 marks while A got 80 marks, out of 120 maximum marks. What percentage of B's marks was A's marks?5909

- Ans**
- 1. 120%
 - 2. 62.5%
 - 3. 160%
 - 4. 66.67%

Q.2 A manufacturer sells a product to a wholesaler at a profit of 47%. The wholesaler, in turn, sells it to a retailer at a profit of 60%, and the retailer sells it to a customer at a profit of 25%. If the customer pays ₹441, find the cost price (in ₹) for the manufacturer.

- Ans**
- 1. ₹147
 - 2. ₹152
 - 3. ₹149
 - 4. ₹150

Q.3 The given table shows the marks obtained by four students in five subjects. Maximum marks for each subject are 100. Study the following table and answer the question based on it.

Subject	English	Hindi	Maths	Science	Arts
Priya	80	90	75	90	90
Parul	85	100	80	85	95
Priyanka	90	95	70	80	80
Preeti	95	100	65	90	85

What is the average percentage marks obtained by all students in Arts?

- Ans
- 1. 92%
 - 2. 78%
 - 3. 87.5%
 - 4. 82.5%

Q.4 The population of a city was 1,50,000 in the year 2005. During the next year, it increased by 12%, but due to an epidemic, it decreased by 8% in the following year. What was its population in the year 2007?

- Ans
- 1. 1,62,300
 - 2. 1,52,680
 - 3. 1,54,560
 - 4. 1,65,560

Q.5 A book costs ₹7,200. The price of this book first decreased by 18%, and after a month, the price increased by 12% of the new price. What is the final price of the book?

- Ans
- 1. ₹6,002.48
 - 2. ₹6,062.48
 - 3. ₹6,612.48
 - 4. ₹6,600.48

Q.6 20% of a number is more than 20% of 580 by 150. The number is

- Ans
- 1. 1180
 - 2. 1380
 - 3. 1330
 - 4. 1430

Q.7 Simplify: $\sqrt{561 + \sqrt{209 + \sqrt{302 - 46}}}$

- Ans
- 1. 24
 - 2. 22
 - 3. 26
 - 4. 28

Q.8 The average of 13 numbers is 21. If each number is multiplied by 6, then what will the new average be?

- Ans
- 1. 6
 - 2. 13
 - 3. 126
 - 4. 21

Q.9 Study the following table and answer the question based on it.
The given table shows the number of units of a product manufactured and sold by a company over six years.

Years	Number of units manufactured (in 1000)	Number of units Sold (in 1000)
2013	3550	2250
2014	3450	3210
2015	5560	2560
2016	5640	2800
2017	5850	3650
2018	4250	3250

The ratio of the total number of units sold in 2013 and 2018 to the number of units manufactured in 2017 is:

- Ans
- 1. 121:129
 - 2. 110:117
 - 3. 112:117
 - 4. 110:119

Q.10 The population of a town is 50,000. It decreases at the rate of 5% per annum. What will be the population after 2 years?

- Ans
- 1. 43,920
 - 2. 46,920
 - 3. 45,125
 - 4. 44,920

Q.11 If $x = \sqrt{1^2 + 2^2 + 3^2 + 4^2 + 5^2}$ and $y = \sqrt{1 + 2 + 3 + 4}$, then $\sqrt{x^2 + y^2}$

- Ans
- 1. 8
 - 2. 7
 - 3. 6
 - 4. 5

Q.12 In what ratio must tea costing ₹121/kg be mixed with tea costing ₹151/kg to obtain a mixture worth ₹136/kg?

- Ans
- 1. 4:3
 - 2. 3:5
 - 3. 1:2
 - 4. 1:1

Q.13 The HCF and LCM of two numbers are 76 and 456, respectively. If one of the numbers is 152, find the other one.

- Ans
- 1. 152
 - 2. 112
 - 3. 76
 - 4. 228

Q.14 A student scored 75, 80, and 85 in three subjects, each carrying different weightages of 2, 3, and 5, respectively. What is the weighted average score?

- Ans
- 1. 83.5
 - 2. 80
 - 3. 81.5
 - 4. 85

Q.15 Find the simple interest (in ₹) on ₹1,500 at 5% per month for 5 months.

- Ans
- 1. 31.25
 - 2. 62.50
 - 3. 125
 - 4. 375

Q.16 The average of 13 numbers is 21. If each number is multiplied by 8, then what will the new average be?

- Ans
- 1. 168
 - 2. 8
 - 3. 21
 - 4. 13

Q.17 20% of a number is more than 20% of 570 by 220. The number is:4504

- Ans
- 1. 1720
 - 2. 1670
 - 3. 1520
 - 4. 1770

Q.18 Evaluate: $(-40) + (-11) \div (-3) \times 6$

- Ans
- 1. -20
 - 2. -19
 - 3. -18
 - 4. -21

Q.19 The population of a town is 48,000 and increases by 3% due to births and 2% due to migration every year. How much will the population increase during the third year?

- Ans
- 1. 2,646
 - 2. 2,656
 - 3. 2,516
 - 4. 2,556

Q.20 A manufacturer sells a product to a wholesaler at a profit of 40%. The wholesaler, in turn, sells it to a retailer at a profit of 25%, and the retailer sells it to a customer at a profit of 25%. If the customer pays ₹140, find the cost price (in ₹) for the manufacturer.

- Ans
- 1. ₹63
 - 2. ₹64
 - 3. ₹62
 - 4. ₹67

Section : Arithmetical and Numerical Ability1

Q.1 Determine the equivalent single discount that is equal to successive discounts of 12%, 13%, and 14%. (Round off your answer to two decimal places.)

- Ans
- 1. 39.39%
 - 2. 33.33%
 - 3. 36.36%
 - 4. 34.16%

Q.2 A hollow spherical shell has an outer radius of 14 cm and an inner radius of 7 cm. What is the volume (in cm^3 , rounded off to the nearest integer) of material required to make the shell? (Use $\pi = 22/7$)

- Ans
- 1. 10,261
 - 2. 11,261
 - 3. 11,061
 - 4. 10,061

Q.3 Priya gets a 44% discount on a grinder whose marked price is ₹2500. She receives a further 13% discount on the reduced price for paying by credit card. How much does she pay (in ₹)?

- Ans
- 1. 1218
 - 2. 1219
 - 3. 1215
 - 4. 1220

Q.4 In a school, a tank is filled by two pipes L and M in 80 minutes and 40 minutes, respectively. How many minutes will it take to fill the tank from empty to full if M is used half time and then both L and M together?

- Ans
- 1. 36 minutes
 - 2. 50 minutes
 - 3. 32 minutes
 - 4. 40 minutes

Q.5 If $A:B = 2:3$ and $B:C = 4:5$, find the value of $(A^2 + B^2):(A^2 + C^2):(B^2 -$

- Ans
- 1. 208:289:369
 - 2. 12:18:19
 - 3. 169:201:274
 - 4. 123:136:148

Q.6 If $a : b = 6 : 11$ and $b : c = 4 : 9$, find $a : b : c$.

- Ans
- 1. 24:44:19
 - 2. 12:22:33
 - 3. 24:44:99
 - 4. 12:22:189

Q.7 A motor car starts with a speed of 60 km/h and its speed increases for every two hours by 10 km/h. Find the average speed (in km/h) of the car over the first four hours.

- Ans
- 1. 60
 - 2. 65
 - 3. 64
 - 4. 68

Q.8 If the length, the breadth and the height of a large closed cuboidal water tank are in the ratio 6:5:4 and if its total surface area is $33,300 \text{ m}^2$, find its volume.

- Ans
- 1. 5,04,000 m^3
 - 2. 4,55,000 m^3
 - 3. 4,55,500 m^3
 - 4. 4,05,000 m^3

Q.9 The distance between two stations is 200 km. A train covers the distance and while returning it covers the distance at $\frac{3}{2}$ speed of previous speed (in km/hr) of the train?

- Ans
- 1. 44
 - 2. 46
 - 3. 48
 - 4. 42

Q.10 There are two taps to fill a tank, while a third tap to empty it. When the third tap is closed, they can fill the tank in 16 minutes and 18 minutes, respectively. If all three taps be opened, the tank is filled in 24 minutes. If the first two taps are closed, in what time can the third tap empty the tank, when it is full?

- Ans
- 1. $12\frac{4}{9}$ minutes
 - 2. $10\frac{2}{3}$ minutes
 - 3. $13\frac{1}{11}$ minutes
 - 4. $11\frac{3}{7}$ minutes

Q.11 The ratio of milk to water in a 60-litre mixture is 7:5. Find the quantity of water that needs to be added to the mixture in order to make the ratio 1:1.

- Ans
- 1. 11 litre
 - 2. 8 litre
 - 3. 10 litre
 - 4. 5 litre

Q.12 The curved surface area of a cylinder is 880 cm^2 . If the radius is 7 cm, find the height. (Use $\pi = \frac{22}{7}$)

- Ans
- 1. 22 cm
 - 2. 10 cm
 - 3. 15 cm
 - 4. 20 cm

Q.13 If x is inversely proportional to y , and $y = 4$ when $x = 2$, find the value of x , when $y = 16$.

- Ans
- 1. 2
 - 2. 0.5
 - 3. 1.5
 - 4. 1

Q.14 Harish and Vineet move towards Coimbatore, starting from IIM, Bangalore, at speeds of 80 km/h and 120 km/h, respectively. If Vineet reaches Coimbatore 100 minutes earlier than Harish, what is the distance between IIM, Bangalore and Coimbatore?

- Ans
- 1. 415 km
 - 2. 515 km
 - 3. 450 km
 - 4. 400 km

Q.15 Two pipes can fill a tank in 12 and 18 minutes, respectively, and pipe C can empty the tank 4 gallons per minute. All the three running together can fill the tank in 8 minutes. Find the capacity of the tank.

- Ans
- 1. 258 gallons
 - 2. 208 gallons
 - 3. 288 gallons
 - 4. 268 gallons

Q.16 Find the volume of a cylinder with radius 7 cm and height 10 cm. (Use $\pi = \frac{22}{7}$)

- Ans
- 1. 1320 cm^3
 - 2. 1610 cm^3
 - 3. 1510 cm^3
 - 4. 1540 cm^3

Q.17 After selling an article at a discount of 25%, the profit percentage obtained is 25%. What is the mark-up percentage (rounded off to 2 decimal places)?

- Ans
- 1. 61.25%
 - 2. 72.45%
 - 3. 66.67%
 - 4. 58.87%

Q.18 A train overtakes two people walking along a railway track. The first person walks at 9 km/hr, while the second person walks at 10.8 km/hr. The train takes 8.4 seconds and 8.5 seconds, respectively, to overtake them. What is the speed of the train if both people are walking in the same direction as that of the train?

- Ans
- 1. 148 km/hr
 - 2. 156 km/hr
 - 3. 172 km/hr
 - 4. 162 km/hr

Q.19 A furniture seller gains 19% by selling a stool for ₹476 and gains 75% by selling a wardrobe for ₹4,683. If he sells the stool for ₹338, then what is the least price on which he must sell the wardrobe to avoid any loss on the whole transaction?

- Ans
- 1. ₹2,741
 - 2. ₹2,735
 - 3. ₹2,740
 - 4. ₹2,738

Q.20 Tap M can fill a tank in 6 hours and tap N can fill the same tank in 15 hours. In how many hours can both tap M and N together fill the same tank?

- Ans
- 1. $3\frac{2}{7}$
 - 2. $3\frac{5}{7}$
 - 3. $4\frac{2}{7}$
 - 4. $4\frac{6}{7}$

Section : Test of English Language and Comprehension

Q.1 Select the most appropriate option to fill in the blank.

The doctor explained the diagnosis _____, helping the patient understand the treatment plan.

- Ans
- 1. ambiguously
 - 2. obscurely
 - 3. lucidly
 - 4. contemptuously

Q.2 Select the most appropriate option to fill in the blanks.

In a challenging project, _____ team worked together, where the communication was clear, _____ roles were defined and the cooperation was essential for success.

- Ans
- 1. the; the
 - 2. No article required; the
 - 3. the; No article required
 - 4. an; No article required

Q.3 Choose the best option to complete the sentence.

I have ___ old laptop that I want to sell.1957

- Ans
- 1. an
 - 2. a
 - 3. no change required
 - 4. the

Q.4 Choose the most grammatically correct sentence.917

- Ans
- 1. The students participated in the event joyingly.
 - 2. The students participated jolly in the event.
 - 3. The students joyfully participated in the event.
 - 4. The students participated joyfully in the event.

Q.5 Select the most appropriate option to fill in the blank.

_____ knowledge is a dangerous thing.

- Ans
- 1. A little
 - 2. Few
 - 3. A few
 - 4. The less

Q.6 Select the most appropriate option to fill in the blank.
My elder brother is interested _____ learning languages.

- Ans
- 1. in
 - 2. to
 - 3. for
 - 4. with

Q.7 Fill in the blank with the most suitable option.

I don't want my dignity for money. 1136

- Ans
- 1. to lose
 - 2. lose
 - 3. loose
 - 4. to loose

Q.8 Choose the most appropriate option that fits grammatically and contextually.

_____ few moments later, we all lifted our _____ eyes.

- Ans
- 1. A, no article required
 - 2. The, the
 - 3. No article required, the
 - 4. The, an

Q.9 Identify the correct verb form to complete the sentence meaningfully:
Neither of the players _____ willing to admit their mistake.

- Ans
- 1. have been
 - 2. are
 - 3. were
 - 4. is

Q.10 Choose the most appropriate option that fits grammatically and contextually.

After half _____ hour, the strange black aeroplane was still there in front of me in the clouds.

1864

- Ans
- 1. a
 - 2. no article required
 - 3. the
 - 4. an

Q.11 In the questions given below, a part of the sentence is italicised and underlined. Below are given alternatives to the italicised part which may improve the sentence. Choose the correct alternative. If there is no error select 'No correction required'.

A fawn can sometimes be strongest than a dead dog.³⁹²

- Ans
- 1. Stronger than
 - 2. The strongest
 - 3. No correction required
 - 4. So strong than

Q.12 Select the most appropriate option to fill in the blank.

The _____ half of the twenty-first century saw huge growth in the feminist movement.⁴⁸¹

- Ans
- 1. late
 - 2. latter
 - 3. latest
 - 4. later

Q.13 A sentence is divided into the following different segments. Rearrange all the segments to form a coherent sentence.

the museum (O) / is open (P) / after renovation (Q) / for the tourists again (R) / only on weekends (S)

- Ans
- 1. QOPRS
 - 2. PRSQO
 - 3. ROSQP
 - 4. SROQP

Q.14 Choose the appropriate alternative to complete the sentence.

_____ being good at drawing, she is good at singing too.

- Ans
- 1. Apart from
 - 2. In spite of
 - 3. Instead of
 - 4. In place of

Q.15 In the given question, a statement divided into different segments is given. The first segment is fixed, rearrange the other segments to form a coherent statement. The integration of concepts from psychology, / Like selfish genes and neo-Darwinism, has (P) / Reinforced the assumption that human nature (Q) / Economics, and biology, particularly theories (R) / Is inherently competitive, cruel, and selfish (S)

- Ans
- 1. QPSR
 - 2. RPQS
 - 3. RSPQ
 - 4. SQPR

Comprehension:

Read the passage carefully and answer the questions that follow.

Different systems of medicine are practised to treat illness and maintain health. Each follows its own principles and methods, yet they all aim to reduce suffering and improve well-being across diverse populations. Some approaches depend mainly on synthetic drugs and advanced technology, while others rely on natural remedies and traditional healing practices passed down through generations. Every system has its own strengths and limitations. Certain methods may provide quick relief, especially in acute conditions, while others focus on building natural resistance and long-term health. Natural treatments are often considered gentle, though they may take longer to show results, whereas modern treatments act faster but must be used carefully due to possible side effects. Since people have varying needs and beliefs, they may seek suitable forms of treatment. Understanding these medical disciplines therefore helps individuals make informed choices about maintaining health and managing illness more effectively.

SubQuestion No : 16

Q.16 What is the overall tone of the passage?

Comprehension:

Read the passage carefully and answer the questions that follow.

Different systems of medicine are practised to treat illness and maintain health. Each follows its own principles and methods, yet they all aim to reduce suffering and improve well-being across diverse populations. Some approaches depend mainly on synthetic drugs and advanced technology, while others rely on natural remedies and traditional healing practices passed down through generations. Every system has its own strengths and limitations. Certain methods may provide quick relief, especially in acute conditions, while others focus on building natural resistance and long-term health. Natural treatments are often considered gentle, though they may take longer to show results, whereas modern treatments act faster but must be used carefully due to possible side effects. Since people have varying needs and beliefs, they may seek suitable forms of treatment. Understanding these medical disciplines therefore helps individuals make informed choices about maintaining health and managing illness more effectively.

SubQuestion No : 17

Q.17 Identify the central theme of the passage from the given options?

Comprehension:

Read the passage carefully and answer the questions that follow.

Different systems of medicine are practised to treat illness and maintain health. Each follows its own principles and methods, yet they all aim to reduce suffering and improve well-being across diverse populations. Some approaches depend mainly on synthetic drugs and advanced technology, while others rely on natural remedies and traditional healing practices passed down through generations. Every system has its own strengths and limitations. Certain methods may provide quick relief, especially in acute conditions, while others focus on building natural resistance and long-term health. Natural treatments are often considered gentle, though they may take longer to show results, whereas modern treatments act faster but must be used carefully due to possible side effects. Since people have varying needs and beliefs, they may seek suitable forms of treatment. Understanding these medical disciplines therefore helps individuals make informed choices about maintaining health and managing illness more effectively.

SubQuestion No : 18

Q.18 Which option correctly reflects the structure of the passage?

Comprehension:

Read the passage carefully and answer the questions that follow.

Different systems of medicine are practised to treat illness and maintain health. Each follows its own principles and methods, yet they all aim to reduce suffering and improve well-being across diverse populations. Some approaches depend mainly on synthetic drugs and advanced technology, while others rely on natural remedies and traditional healing practices passed down through generations. Every system has its own strengths and limitations. Certain methods may provide quick relief, especially in acute conditions, while others focus on building natural resistance and long-term health. Natural treatments are often considered gentle, though they may take longer to show results, whereas modern treatments act faster but must be used carefully due to possible side effects. Since people have varying needs and beliefs, they may seek suitable forms of treatment. Understanding these medical disciplines therefore helps individuals make informed choices about maintaining health and managing illness more effectively.

SubQuestion No : 19

Q.19 What does the passage specifically suggest about people's choice of treatment?

Comprehension:

Read the passage carefully and answer the questions that follow.

Different systems of medicine are practised to treat illness and maintain health. Each follows its own principles and methods, yet they all aim to reduce suffering and improve well-being across diverse populations. Some approaches depend mainly on synthetic drugs and advanced technology, while others rely on natural remedies and traditional healing practices passed down through generations. Every system has its own strengths and limitations. Certain methods may provide quick relief, especially in acute conditions, while others focus on building natural resistance and long-term health. Natural treatments are often considered gentle, though they may take longer to show results, whereas modern treatments act faster but must be used carefully due to possible side effects. Since people have varying needs and beliefs, they may seek suitable forms of treatment. Understanding these medical disciplines therefore helps individuals make informed choices about maintaining health and managing illness more effectively.

SubQuestion No : 20

Q.20 Which statement is explicitly stated in the passage?

Section : Test of English Language and Comprehension1

Q.1 Select the most appropriate synonym of the given word.

Turbulent

- Ans
- 1. Eloquent
 - 2. Sanguine
 - 3. Chaotic
 - 4. Tranquil

Q.2 In the question given below, out of four alternatives, choose the one that can be substituted for the given phrase/sentence.

One who comes as a settler into a foreign country.

- Ans
- 1. migrant
 - 2. emigrant
 - 3. refugee
 - 4. immigrant

Q.3 Choose the correct option that best expresses the meaning of the given proverb.

Don't count your chickens before they hatch.

- Ans
- 1. It is advisable to make plans for the future based on predictions.
 - 2. Chickens are actually very difficult to count.
 - 3. Don't assume something will happen before it actually does.
 - 4. Always expect the worst outcome no matter how hard you try.

Q.4 Select the word which means the same as the group of words underlined.

The expedition members finally found a place that gives temporary shelter and protection from rain, wind, or danger after hours of trekking through the forest.

- Ans
- 1. Destination
 - 2. Route
 - 3. Refuge
 - 4. Boundary

Q.5 In the question given below, out of four alternatives, choose the one that can be substituted for the given phrase/sentence.

One who has belief in the existence of God

- Ans
- 1. Disciple
 - 2. Atheist
 - 3. Devotee
 - 4. Theist

Q.6 Choose the one-word substitute for 'a person who studies weather and atmospheric conditions'.

- Ans
- 1. Astronomer
 - 2. Biologist
 - 3. Meteorologist
 - 4. Geologist

Q.7 Choose the option that means the same as the underlined proverb.

Mala decided to accept a less paying job in India instead of waiting for an appointment in the US, because she felt that a bird in hand is worth two in bush.

- Ans
- 1. What you already have is more valuable than what you might get, even if it is more.
 - 2. Two birds in bush are protected by forest department.
 - 3. It is easy to hold a single bird in hand than holding two birds.
 - 4. It is better to work in one's own country than to go to US.

Q.8 Select the most appropriate antonym of the given word.
RELUCTANT

- Ans
- 1. Pensive
 - 2. Indecisive
 - 3. Enthusiastic
 - 4. Cautious

Q.9 Choose the most appropriate meaning of the given proverb:

"Haste makes waste."

- Ans
- 1. Hurrying leads to mistakes.
 - 2. Being hasty saves time.
 - 3. Slow actions are wasteful.
 - 4. Rushing to complete tasks increases efficiency.

Q.10 Choose the correct option that best expresses the meaning of the given proverb.
An idle brain is the devil's workshop -

- Ans
- 1. When one has nothing to do, one is more likely to get into trouble
 - 2. When one has something to do, one is not likely to get into trouble
 - 3. When one has nothing to do, one is not likely to get into trouble
 - 4. When one has something to do, one is more likely to get into trouble

Q.11 Choose the word that is opposite in meaning to the given word.
Ascend

- Ans
- 1. Amend
 - 2. Commend
 - 3. Climb
 - 4. Descend

Q.12 Choose the option most similar in meaning to the given word.

Pernicious

- Ans**
- 1. Peaceful
 - 2. Harmless
 - 3. Deadly
 - 4. Helpful

Q.13 Rectify the error in the sentence by choosing the correct spelling of the incorrectly spelt word.

Sheetal became indispensable for the organization she worked for.

- Ans**
- 1. indispensabl
 - 2. indispensable
 - 3. indispenable
 - 4. indespensable

Q.14 Parts of a sentence are given below in jumbled order. Arrange the parts in the correct order to form a meaningful sentence.

P. one country to another in search of food

Q. and shelter, and for breeding

R. mammals and birds move from

S. with a change in season, many

- Ans**
- 1. RSPQ
 - 2. SRPQ
 - 3. QPRS
 - 4. PSRQ

Q.15 Select the wrongly spelt word.

- Ans**
- 1. Questionnaire
 - 2. Eccentric
 - 3. Proffesional
 - 4. Appearance

Comprehension:

Read the following passage and answer the questions given below-

After his conquest of Kalinga, Emperor Ashoka witnessed such destruction and suffering that he underwent a profound transformation. The bloodshed haunted him. Choosing peace over war, Ashoka embraced Buddhism and devoted his reign to nonviolence, public welfare, and moral governance. He issued edicts carved on pillars and rocks across his empire—written in Prakrit using Brahmi script—spreading messages of compassion, tolerance, and respect for all religions. These inscriptions spoke not of military triumphs, but of planting trees, building hospitals, and treating even prisoners humanely. Ashoka became one of the earliest known rulers to promote ethical conduct as state policy. His ideals were so forward-thinking that India later adopted his emblem—the four lions—as its national symbol. Today, Ashoka stands not only as a powerful monarch but as a moral visionary. His reign marked a rare moment in history when power bowed to principle, and stone carried the weight of conscience instead of conquest.

SubQuestion No : 16

Q.16 What is Ashoka's connection to modern India?

Comprehension:

Read the following passage and answer the questions given below-

After his conquest of Kalinga, Emperor Ashoka witnessed such destruction and suffering that he underwent a profound transformation. The bloodshed haunted him. Choosing peace over war, Ashoka embraced Buddhism and devoted his reign to nonviolence, public welfare, and moral governance. He issued edicts carved on pillars and rocks across his empire—written in Prakrit using Brahmi script—spreading messages of compassion, tolerance, and respect for all religions. These inscriptions spoke not of military triumphs, but of planting trees, building hospitals, and treating even prisoners humanely. Ashoka became one of the earliest known rulers to promote ethical conduct as state policy. His ideals were so forward-thinking that India later adopted his emblem—the four lions—as its national symbol. Today, Ashoka stands not only as a powerful monarch but as a moral visionary. His reign marked a rare moment in history when power bowed to principle, and stone carried the weight of conscience instead of conquest.

SubQuestion No : 17

Q.17 What does the passage suggest about Ashoka's rule?

Comprehension:

Read the following passage and answer the questions given below-

After his conquest of Kalinga, Emperor Ashoka witnessed such destruction and suffering that he underwent a profound transformation. The bloodshed haunted him. Choosing peace over war, Ashoka embraced Buddhism and devoted his reign to nonviolence, public welfare, and moral governance. He issued edicts carved on pillars and rocks across his empire—written in Prakrit using Brahmi script—spreading messages of compassion, tolerance, and respect for all religions. These inscriptions spoke not of military triumphs, but of planting trees, building hospitals, and treating even prisoners humanely. Ashoka became one of the earliest known rulers to promote ethical conduct as state policy. His ideals were so forward-thinking that India later adopted his emblem—the four lions—as its national symbol. Today, Ashoka stands not only as a powerful monarch but as a moral visionary. His reign marked a rare moment in history when power bowed to principle, and stone carried the weight of conscience instead of conquest.

SubQuestion No : 18

Q.18 What does “stone carried the weight of conscience” imply?

Comprehension:

Read the following passage and answer the questions given below-

After his conquest of Kalinga, Emperor Ashoka witnessed such destruction and suffering that he underwent a profound transformation. The bloodshed haunted him. Choosing peace over war, Ashoka embraced Buddhism and devoted his reign to nonviolence, public welfare, and moral governance. He issued edicts carved on pillars and rocks across his empire—written in Prakrit using Brahmi script—spreading messages of compassion, tolerance, and respect for all religions. These inscriptions spoke not of military triumphs, but of planting trees, building hospitals, and treating even prisoners humanely. Ashoka became one of the earliest known rulers to promote ethical conduct as state policy. His ideals were so forward-thinking that India later adopted his emblem—the four lions—as its national symbol. Today, Ashoka stands not only as a powerful monarch but as a moral visionary. His reign marked a rare moment in history when power bowed to principle, and stone carried the weight of conscience instead of conquest.

SubQuestion No : 19

Q.19 What structural method does the passage use?

Comprehension:

Read the following passage and answer the questions given below-

After his conquest of Kalinga, Emperor Ashoka witnessed such destruction and suffering that he underwent a profound transformation. The bloodshed haunted him. Choosing peace over war, Ashoka embraced Buddhism and devoted his reign to nonviolence, public welfare, and moral governance. He issued edicts carved on pillars and rocks across his empire—written in Prakrit using Brahmi script—spreading messages of compassion, tolerance, and respect for all religions. These inscriptions spoke not of military triumphs, but of planting trees, building hospitals, and treating even prisoners humanely. Ashoka became one of the earliest known rulers to promote ethical conduct as state policy. His ideals were so forward-thinking that India later adopted his emblem—the four lions—as its national symbol. Today, Ashoka stands not only as a powerful monarch but as a moral visionary. His reign marked a rare moment in history when power bowed to principle, and stone carried the weight of conscience instead of conquest.

SubQuestion No : 20

Q.20 What is the real-world take away from the passage?

Section : Test of Hindi Language and Comprehension

**Q.1 निम्नलिखित वाक्य के शुद्ध रूप का चयन करें।
वह सभी धोखेबाज़ लोग हैं।**

- Ans**
- 1. वे सभी लोग धोखेबाज़ हैं।
 - 2. वह सभ के सब धोखेबाज़ हैं।
 - 3. वो सभी लोग धोखेबाज़ नहीं हैं।
 - 4. वे सब लोग धोखेबाज़ से हैं।

Q.2 'जो स्त्री विद्वान हो' वाक्यांश के लिए सार्थक शब्द होगा-

- Ans**
- 1. ज्ञानी
 - 2. स्त्रीवादी
 - 3. विद्वान
 - 4. विदुषी

Q.3 विशेषण के आधार पर वाक्य पूर्ण कीजिए।

आज का मौसम बहुत _____ है।

- Ans
- 1. ज्ञानवर्धक
 - 2. बलवान
 - 3. सुहावना
 - 4. शौर्य वान

Q.4 निम्नलिखित विकल्पों में से अतिरिक्त वाक्य का चयन करें।

- अ. सांप्रदायिकता सदा संस्कृति की दुहाई दिया करती है।
ब. हिन्दू अपनी संस्कृति को कयामत तक सुरक्षित रखना चाहता है, मुसलमान अपनी संस्कृति को।
स. लेकिन कोई भी संस्कृति मानवता से बढ़कर नहीं है।
द. जहाँ मानवता है वही श्रेष्ठ संस्कृति है।
र. भाषा का समाज से घनिष्ठ संबंध होता है।

- Ans
- 1. अ
 - 2. ब
 - 3. र
 - 4. स

Q.5 उपयुक्त 'क्रिया' का प्रयोग कर दिये गये वाक्य को पूर्ण कीजिए-

'रिया कंधी से अपने बालहै।'

- Ans
- 1. काटती
 - 2. सुलझाती
 - 3. बिगाड़ती
 - 4. उलझाती

Q.6 क्रिया के आधार पर वाक्य पूर्ण कीजिए।

हमें समय पर भोजन _____ चाहिए।

- Ans
- 1. आना
 - 2. करना
 - 3. जीना
 - 4. रोना

Q.7 कृपया करके उसे यह काम करने दें। वाक्य में अशुद्ध अंश है -

- Ans
- 1. उसे यह
 - 2. काम करने दें।
 - 3. करके
 - 4. कृपया

Q.8 निम्नलिखित वाक्य खंड को क्रम में लिखें -

1. में बसी घाटियाँ
2. शांति और सौंदर्य का
3. हिमालय की गोद
4. अनुपम संगम हैं

- Ans
- 1. 3142
 - 2. 4213
 - 3. 3124
 - 4. 2314

Q.9 'अपनी करनी पार उतरनी' का अर्थ है

- Ans
- 1. अपनी परिस्थिति से संतुष्ट रहना
 - 2. पूर्ण स्वतंत्र होना
 - 3. अपना किया काम ही फलदायक होता है
 - 4. अपनी इज्जत अपने हाथ

Q.10 निम्नलिखित वाक्यों में से अतिरिक्त वाक्य की पहचान करें।

- Ans
- 1. उन्हें जब फल निकट ज्ञात होता है, तब उनका उत्साह बढ़ जाता है।
 - 2. जो पुरुष फल की मात्र कामना से ही कर्म करते हैं।
 - 3. और उन्हें जब फल दूर ज्ञात होता है, तब उनका उत्साह कम हो जाता है।
 - 4. आम का फल प्रायः गर्मी में प्राप्त होता है।

Q.11 निम्नलिखित अर्थ के लिए उचित मुहावरे का चयन करें -
'असंभव कार्य करना'

- Ans
- 1. बिधाता का अक्षर होना
 - 2. बालू से तेल निकालना
 - 3. बाल से बारीक होना
 - 4. मिट्टी का माधो होना

Q.12 रोहन मिठाई _____ है। रिक्त स्थान के लिए उचित क्रिया है-

- Ans
- 1. खाता
 - 2. खाती
 - 3. खाते
 - 4. खा

Q.13 निम्न विकल्पों में उचित विकल्प का चयन कर वाक्य पूर्ण करें -.....दूर मत जाना।

- Ans
- 1. बार- बार
 - 2. बहुत
 - 3. सवेरे
 - 4. प्रतिदिन

Q.14 'दूसरे की विवाहित स्त्री' वाक्यांश के लिए एक शब्द होगा-

- Ans
- 1. अन्योद्घा
 - 2. विवाहिता
 - 3. अभिसारिका
 - 4. प्रौढ़ा

Q.15 निम्नलिखित वाक्य को ध्यानपूर्वक पढ़ें और वाक्य में त्रुटि की पहचान कर वाक्य शुद्ध करें।
इस गर्मी में भी जाने का मन कहीं नहीं करता है।

- Ans
- 1. इस गर्मी में कहीं भी जाने का मन नहीं करता है।
 - 2. गर्मी में इस कहीं भी मन जाने का नहीं करता है।
 - 3. इस जाने का गर्मी में कहीं भी नहीं करता मन है।
 - 4. इस में कहीं भी जाने करता का मन नहीं गर्मी है।

Comprehension:

गद्यांश के आधार पर अग्रलिखित प्रश्नों के उत्तर दीजिए।

भारतीय लोकसाहित्य की परम्परा अति प्राचीन है। विविध वैदिक प्रसंग पुराणों में विकसित होकर प्रकट हुए हैं। वेदों में सफल जीवनयात्रा के लिए जो मार्ग प्रदर्शित किया गया है, पुराणों में उसी पथ का समुचित अनुसरण करने वाले चरित्र चित्रित हुए हैं। इस प्रकार पुरातन एवं उच्च सिद्धान्तों ने सजीव चित्रों का रूप धारण करके जीवन और ज्योति का प्रकाशन किया है जो सर्व साधारण के लिए बड़ा उपयोगी एवं महत्वपूर्ण है। अति प्राचीन अनुश्रुतियाँ भारत के लोक जीवन में प्रवेश करके यहाँ की प्रजा के लिए पथप्रदर्शन का कार्य भी करती चली आ रही है। युग-युग के इस सक्रमण से स्थान एवं काल के अनुसार भारतीय अनुश्रुतियों में रूप परिवर्तन भी हुआ है। जो स्वाभाविक है। यही कारण है कि भारत के एक निरक्षर प्रजाजन के ज्ञानकोष में भी कई वस्तुएँ ऐसी प्राप्त होती हैं जिनका सम्बन्ध वेदकालीन परम्परा से जुड़ा हुआ मिलता है। यह भारतीय जनजीवन एवं लोकसंस्कृति की महिमा है।

SubQuestion No : 16

Q.16 गद्यांश का उपयुक्त शीर्षक क्या हो सकता है ?

Comprehension:

गद्यांश के आधार पर अग्रलिखित प्रश्नों के उत्तर दीजिए।

भारतीय लोकसाहित्य की परम्परा अति प्राचीन है। विविध वैदिक प्रसंग पुराणों में विकसित होकर प्रकट हुए हैं। वेदों में सफल जीवनयात्रा के लिए जो मार्ग प्रदर्शित किया गया है, पुराणों में उसी पथ का समुचित अनुसरण करने वाले चरित्र चित्रित हुए हैं। इस प्रकार पुरातन एवं उच्च सिद्धान्तों ने सजीव चित्रों का रूप धारण करके जीवन और ज्योति का प्रकाशन किया है जो सर्व साधारण के लिए बड़ा उपयोगी एवं महत्वपूर्ण है। अति प्राचीन अनुश्रुतियाँ भारत के लोक जीवन में प्रवेश करके यहाँ की प्रजा के लिए पथप्रदर्शन का कार्य भी करती चली आ रही है। युग-युग के इस सक्रमण से स्थान एवं काल के अनुसार भारतीय अनुश्रुतियों में रूप परिवर्तन भी हुआ है। जो स्वाभाविक है। यही कारण है कि भारत के एक निरक्षर प्रजाजन के ज्ञानकोष में भी कई वस्तुएँ ऐसी प्राप्त होती हैं जिनका सम्बन्ध वेदकालीन परम्परा से जुड़ा हुआ मिलता है। यह भारतीय जनजीवन एवं लोकसंस्कृति की महिमा है।

SubQuestion No : 17

Q.17 पुराणों में किस पथ का समुचित अनुसरण मिलता है ?

Comprehension:

गद्यांश के आधार पर अग्रलिखित प्रश्नों के उत्तर दीजिए।

भारतीय लोकसाहित्य की परम्परा अति प्राचीन है। विविध वैदिक प्रसंग पुराणों में विकसित होकर प्रकट हुए हैं। वेदों में सफल जीवनयात्रा के लिए जो मार्ग प्रदर्शित किया गया है, पुराणों में उसी पथ का समुचित अनुसरण करने वाले चरित्र चित्रित हुए हैं। इस प्रकार पुरातन एवं उच्च सिद्धान्तों ने सजीव चित्रों का रूप धारण करके जीवन और ज्योति का प्रकाशन किया है जो सर्व साधारण के लिए बड़ा उपयोगी एवं महत्वपूर्ण है। अति प्राचीन अनुश्रुतियाँ भारत के लोक जीवन में प्रवेश करके यहाँ की प्रजा के लिए पथप्रदर्शन का कार्य भी करती चली आ रही है। युग-युग के इस सक्रमण से स्थान एवं काल के अनुसार भारतीय अनुश्रुतियों में रूप परिवर्तन भी हुआ है। जो स्वाभाविक है। यही कारण है कि भारत के एक निरक्षर प्रजाजन के ज्ञानकोष में भी कई वस्तुएँ ऐसी प्राप्त होती हैं जिनका सम्बन्ध वेदकालीन परम्परा से जुड़ा हुआ मिलता है। यह भारतीय जनजीवन एवं लोकसंस्कृति की महिमा है।

SubQuestion No : 18

Q.18 'लोक' का विलोम शब्द क्या है ?

Comprehension:

गद्यांश के आधार पर अग्रलिखित प्रश्नों के उत्तर दीजिए।

भारतीय लोकसाहित्य की परम्परा अति प्राचीन है। विविध वैदिक प्रसंग पुराणों में विकसित होकर प्रकट हुए हैं। वेदों में सफल जीवनयात्रा के लिए जो मार्ग प्रदर्शित किया गया है, पुराणों में उसी पथ का समुचित अनुसरण करने वाले चरित्र चित्रित हुए हैं। इस प्रकार पुरातन एवं उच्च सिद्धान्तों ने सजीव चित्रों का रूप धारण करके जीवन और ज्योति का प्रकाशन किया है जो सर्व साधारण के लिए बड़ा उपयोगी एवं महत्वपूर्ण है। अति प्राचीन अनुश्रुतियाँ भारत के लोक जीवन में प्रवेश करके यहाँ की प्रजा के लिए पथप्रदर्शन का कार्य भी करती चली आ रही है। युग-युग के इस सक्रमण से स्थान एवं काल के अनुसार भारतीय अनुश्रुतियों में रूप परिवर्तन भी हुआ है। जो स्वाभाविक है। यही कारण है कि भारत के एक निरक्षर प्रजाजन के ज्ञानकोष में भी कई वस्तुएँ ऐसी प्राप्त होती हैं जिनका सम्बन्ध वेदकालीन परम्परा से जुड़ा हुआ मिलता है। यह भारतीय जनजीवन एवं लोकसंस्कृति की महिमा है।

SubQuestion No : 19

Q.19 पुरातन एवं उच्च सिद्धान्तों के सजीव चित्रों का रूप धारण करने से क्या हुआ है ?

Comprehension:

गद्यांश के आधार पर अग्रलिखित प्रश्नों के उत्तर दीजिए।

भारतीय लोकसाहित्य की परम्परा अति प्राचीन है। विविध वैदिक प्रसंग पुराणों में विकसित होकर प्रकट हुए हैं। वेदों में सफल जीवनयात्रा के लिए जो मार्ग प्रदर्शित किया गया है, पुराणों में उसी पथ का समुचित अनुसरण करने वाले चरित्र चित्रित हुए हैं। इस प्रकार पुरातन एवं उच्च सिद्धान्तों ने सजीव चित्रों का रूप धारण करके जीवन और ज्योति का प्रकाशन किया है जो सर्व साधारण के लिए बड़ा उपयोगी एवं महत्वपूर्ण है। अति प्राचीन अनुश्रुतियाँ भारत के लोक जीवन में प्रवेश करके यहाँ की प्रजा के लिए पथप्रदर्शन का कार्य भी करती चली आ रही है। युग-युग के इस सक्रमण से स्थान एवं काल के अनुसार भारतीय अनुश्रुतियों में रूप परिवर्तन भी हुआ है। जो स्वाभाविक है। यही कारण है कि भारत के एक निरक्षर प्रजाजन के ज्ञानकोष में भी कई वस्तुएँ ऐसी प्राप्त होती हैं जिनका सम्बन्ध वेदकालीन परम्परा से जुड़ा हुआ मिलता है। यह भारतीय जनजीवन एवं लोकसंस्कृति की महिमा है।

SubQuestion No : 20

Q.20 भारतीय लोक साहित्य की परंपरा है-

Section : Test of Hindi Language and Comprehension1

Q.1 'थाली का बैंगन होना' लोकोक्ति का उचित अर्थ है -

Ans 1. अशिक्षित व्यक्ति का ऊँची-ऊँची बातें करना

2. स्थिर बुद्धि न रखनेवाला व्यक्ति

3. व्यर्थ का ढोंग रखनेवाला व्यक्ति

4. स्थिर बुद्धि वाला व्यक्ति

Q.2 निम्नलिखित में कौन-सा वाक्य अशुद्ध है?

Ans 1. एक रुपये में कितने पैसे होते हैं?

2. इसका तात्कालिक प्रभाव पड़ा।

3. पत्र किसके नाम पर लिखा गया है।

4. भारत एक समृद्धिशाली देश है।

Q.3 निम्न विकल्पों में वाक्य के रेखांकित शब्द में शुद्ध वर्तनी का चयन करें-
महादेवी एक उच्च कोटि की कवियत्री थी।

- Ans
- 1. कवित्री
 - 2. कवयित्री
 - 3. कवयत्री
 - 4. कवियत्री

Q.4 "लकीर का फकीर होना" मुहावरे का सही अर्थ है -

- Ans
- 1. लकीर को पकड़ कर बैठ जाना
 - 2. अपने को महान समझना
 - 3. पुरानी प्रथा पर ही चलना
 - 4. लकीर पीटते रहना

Q.5 मुहावरे और उनके अर्थ के आधार पर कौन - सा युग्म उचित नहीं है-

- Ans
- 1. अन्न लगना - स्वस्थ रहना
 - 2. अक्ल पर पत्थर पड़ना - बुद्धि भ्रष्ट होना
 - 3. अब - तब होना - स्वावलंबी होना
 - 4. ईद का चाँद होना - बहुत दिनों बाद दीखना

Q.6 'इष्ट' का एक अर्थ है-

- Ans
- 1. ध्येय
 - 2. घड़ा
 - 3. धनुष
 - 4. जीवन

Q.7 निम्नलिखित में से कौन-सा शब्द 'देवता' का पर्यायवाची नहीं है?

- Ans
- 1. दास
 - 2. देव
 - 3. अमर
 - 4. सुर

Q.8 'रंग', 'जाति', 'अक्षर' के लिए अनेकार्थी शब्द है-

- Ans
- 1. धर्म
 - 2. वर्ण
 - 3. वेद
 - 4. बल

Q.9 निम्न विकल्पों में से 'अरविन्द' का अर्थ होगा -

- Ans
- 1. धूसर
 - 2. कमल
 - 3. रसाल
 - 4. अपूर्व

Q.10 निम्नलिखित विकल्पों में से अर्ध का तद्भव शब्द पहचानें।

- Ans
- 1. वृत्त
 - 2. अँधा
 - 3. आगे
 - 4. आधा

Q.11 दिये गये वाक्य के किस भाग में त्रुटि है ?
वर्तमान समय में विज्ञान और प्रौद्योगिकी के क्षेत्र में अदभूत प्रगति हुई है।

- Ans
- 1. के क्षेत्र में अदभूत
 - 2. विज्ञान और प्रौद्योगिकी
 - 3. वर्तमान समय में
 - 4. प्रगति हुई है।

Q.12 'मेघ' का पर्यायवाची है -

- Ans
- 1. नीरधि
 - 2. अंबुद
 - 3. पयोनिधि
 - 4. पयोधि

Q.13 'सप्तशती', 'आमलक' किस प्रकार के शब्द हैं -

- Ans
- 1. विदेशज
 - 2. तद्भव
 - 3. देशज
 - 4. तत्सम

Q.14 निम्न में से किस समूह के सभी शब्द 'आँख' के पर्याय हैं-

- Ans
- 1. दृग, अक्षि, बाजि
 - 2. नेत्र, चक्षु, अंशु
 - 3. लोचन, अंबक, अरुक्ष
 - 4. नयन, विलोचन, चक्षु

Q.15 निम्न विकल्पों में वाक्य के रेखांकित शब्द में शुद्ध वर्तनी का चयन करें-
अपराल के बाद सूर्य अस्ताचलगामी होने लगता है।

- Ans
- 1. अप्रान्ह
 - 2. अपरान्ह
 - 3. अपरल्ल
 - 4. अपराह्

Comprehension:

निम्नलिखित गद्यांश को पढ़कर दिए गए प्रश्नों के उत्तर दीजिए:

क्रोध शांति भंग करने वाला मनोविकार है। एक का क्रोध दूसरे में भी क्रोध का ही संचार करता है। धर्म, नीति और शिष्टाचार तीनों में क्रोध के विरोध का उपदेश पाया जाता है। संत लोग तो खलों के दुर्वचन सहते ही हैं, दुनियादार लोग भी न जाने कितनी ऊँची-नीची पचाते हैं। सभ्यता के व्यवहार में भी क्रोध नहीं तो क्रोध के चिह्न दबाए जाते हैं। इस प्रकार का प्रतिबंध समाज की सुख-शांति के लिए परम आवश्यक है। पर इस प्रतिबंध की भी सीमा है। यह परपीड़कोन्मुख क्रोध तक नहीं पहुंचता। पंचतंत्र और हितोपदेश में ऐसी बहुत सारी कहानियाँ हैं जिनमें कहानीकार ने यह दर्शाया है कि क्रोध नाश का कारण है। क्रोधी व्यक्ति, जिस पर क्रोध करता है, उसे भी क्रुद्ध कर देता है। इससे शांति भंग होती है और यह कभी-कभी नाश का कारण भी बनता है। सभी शास्त्रों में इस पर नियंत्रण की बात कही गई है; परंतु यह एक सीमा तक ही आवश्यक है।

SubQuestion No : 16

Q.16 गद्यांश का सबसे उपयुक्त शीर्षक बताइए-

Comprehension:

निम्नलिखित गद्यांश को पढ़कर दिए गए प्रश्नों के उत्तर दीजिए:

क्रोध शांति भंग करने वाला मनोविकार है। एक का क्रोध दूसरे में भी क्रोध का ही संचार करता है। धर्म, नीति और शिष्टाचार तीनों में क्रोध के विरोध का उपदेश पाया जाता है। संत लोग तो खलों के दुर्वचन सहते ही हैं, दुनियादार लोग भी न जाने कितनी ऊँची-नीची पचाते हैं। सभ्यता के व्यवहार में भी क्रोध नहीं तो क्रोध के चिह्न दबाए जाते हैं। इस प्रकार का प्रतिबंध समाज की सुख-शांति के लिए परम आवश्यक है। पर इस प्रतिबंध की भी सीमा है। यह परपीड़कोन्मुख क्रोध तक नहीं पहुंचता। पंचतंत्र और हितोपदेश में ऐसी बहुत सारी कहानियाँ हैं जिनमें कहानीकार ने यह दर्शाया है कि क्रोध नाश का कारण है। क्रोधी व्यक्ति, जिस पर क्रोध करता है, उसे भी क्रुद्ध कर देता है। इससे शांति भंग होती है और यह कभी-कभी नाश का कारण भी बनता है। सभी शास्त्रों में इस पर नियंत्रण की बात कही गई है; परंतु यह एक सीमा तक ही आवश्यक है।

SubQuestion No : 17

Q.17 लेखक के अनुसार क्रोध क्या है?

Comprehension:

निम्नलिखित गद्यांश को पढ़कर दिए गए प्रश्नों के उत्तर दीजिए:

क्रोध शांति भंग करने वाला मनोविकार है। एक का क्रोध दूसरे में भी क्रोध का ही संचार करता है। धर्म, नीति और शिष्टाचार तीनों में क्रोध के विरोध का उपदेश पाया जाता है। संत लोग तो खलों के दुर्वचन सहते ही हैं, दुनियादार लोग भी न जाने कितनी ऊँची-नीची पचाते हैं। सभ्यता के व्यवहार में भी क्रोध नहीं तो क्रोध के चिह्न दबाए जाते हैं। इस प्रकार का प्रतिबंध समाज की सुख-शांति के लिए परम आवश्यक है। पर इस प्रतिबंध की भी सीमा है। यह परपीड़कोन्मुख क्रोध तक नहीं पहुंचता। पंचतंत्र और हितोपदेश में ऐसी बहुत सारी कहानियाँ हैं जिनमें कहानीकार ने यह दर्शाया है कि क्रोध नाश का कारण है। क्रोधी व्यक्ति, जिस पर क्रोध करता है, उसे भी क्रुद्ध कर देता है। इससे शांति भंग होती है और यह कभी-कभी नाश का कारण भी बनता है। सभी शास्त्रों में इस पर नियंत्रण की बात कही गई है; परंतु यह एक सीमा तक ही आवश्यक है।

SubQuestion No : 18

Q.18 गद्यांश का केंद्रीय विषय पहचानें-

Comprehension:

निम्नलिखित गद्यांश को पढ़कर दिए गए प्रश्नों के उत्तर दीजिए:

क्रोध शांति भंग करने वाला मनोविकार है। एक का क्रोध दूसरे में भी क्रोध का ही संचार करता है। धर्म, नीति और शिष्टाचार तीनों में क्रोध के विरोध का उपदेश पाया जाता है। संत लोग तो खलों के दुर्वचन सहते ही हैं, दुनियादार लोग भी न जाने कितनी ऊँची-नीची पचाते हैं। सभ्यता के व्यवहार में भी क्रोध नहीं तो क्रोध के चिह्न दबाए जाते हैं। इस प्रकार का प्रतिबंध समाज की सुख-शांति के लिए परम आवश्यक है। पर इस प्रतिबंध की भी सीमा है। यह परपीड़कोन्मुख क्रोध तक नहीं पहुंचता। पंचतंत्र और हितोपदेश में ऐसी बहुत सारी कहानियाँ हैं जिनमें कहानीकार ने यह दर्शाया है कि क्रोध नाश का कारण है। क्रोधी व्यक्ति, जिस पर क्रोध करता है, उसे भी क्रुद्ध कर देता है। इससे शांति भंग होती है और यह कभी-कभी नाश का कारण भी बनता है। सभी शास्त्रों में इस पर नियंत्रण की बात कही गई है; परंतु यह एक सीमा तक ही आवश्यक है।

SubQuestion No : 19

Q.19 गद्यांश के अनुसार क्रोध के विरोध का उपदेश कहाँ नहीं पाया जाता?

Comprehension:

निम्नलिखित गद्यांश को पढ़कर दिए गए प्रश्नों के उत्तर दीजिए:

क्रोध शांति भंग करने वाला मनोविकार है। एक का क्रोध दूसरे में भी क्रोध का ही संचार करता है। धर्म, नीति और शिष्टाचार तीनों में क्रोध के विरोध का उपदेश पाया जाता है। संत लोग तो खलों के दुर्वचन सहते ही हैं, दुनियादार लोग भी न जाने कितनी ऊँची-नीची पचाते हैं। सभ्यता के व्यवहार में भी क्रोध नहीं तो क्रोध के चिह्न दबाए जाते हैं। इस प्रकार का प्रतिबंध समाज की सुख-शांति के लिए परम आवश्यक है। पर इस प्रतिबंध की भी सीमा है। यह परपीड़कोन्मुख क्रोध तक नहीं पहुंचता। पंचतंत्र और हितोपदेश में ऐसी बहुत सारी कहानियाँ हैं जिनमें कहानीकार ने यह दर्शाया है कि क्रोध नाश का कारण है। क्रोधी व्यक्ति, जिस पर क्रोध करता है, उसे भी क्रुद्ध कर देता है। इससे शांति भंग होती है और यह कभी-कभी नाश का कारण भी बनता है। सभी शास्त्रों में इस पर नियंत्रण की बात कही गई है; परंतु यह एक सीमा तक ही आवश्यक है।

SubQuestion No : 20

Q.20 'क्रोध नाश का कारण है।' रेखांकित शब्द का विलोम है-