



GOVT. OF NCT OF DELHI
Delhi Subordinate Services Selection Board
FC-18, Institutional Area, Karkardooma, Delhi – 110092.
www.dsssb.delhigovt.nic.in

Participant Name	Anjali Pokhariya
Test Center Name	Aadarsh Pariksha Kendra CENTER B - Gate No 2 - Noida Sector 64
Test Date	25/03/2026
Test Time	5:00 PM - 7:00 PM
Subject	Multi Tasking Staff

Section : General intelligence and Reasoning Ability

Q.1 Refer to the following letter and symbol series and answer the question that follows. Counting to be done from left to right only.

(Left) = & B & F C R R V B X + L H \ ^ R J L B & (Right)

How many such symbols are there each of which is immediately preceded by a letter and also immediately followed by a letter?

- Ans
- 1. Two
 - 2. One
 - 3. Three
 - 4. Four

Q.2 Seven boxes W, X, Y, Z, G, H and I are kept one over the other but not necessarily in the same order. Only I is kept above H. Only three boxes are kept below G. Only two boxes are kept between G and Z. W is kept at some place below Y and at some place above X. Which box is kept at second position from the bottom?

- Ans
- 1. Y
 - 2. Z
 - 3. X
 - 4. W

Q.3 L, M, N, R, S and T live on six different floors of the same building. The lowermost floor in the building is numbered 1, the floor above it is numbered 2 and so on, till the topmost floor is numbered 6. Only S lives below R. Only L lives above N. T lives immediately below N. How many people live between L and M?

- Ans
- 1. One
 - 2. Four
 - 3. Three
 - 4. Two

Q.4 A statement is given followed by two conclusions. Find out which conclusion(s) is/are true based on the given statement.

Statement: $L > B > D < S \leq Q$

Conclusions:

I. $D < Q$

II. $S < L$

- Ans
- 1. Neither I nor II is true
 - 2. Both I and II are true
 - 3. Only I is true
 - 4. Only II is true

Q.5 In a certain code language, 'PING' is coded as '4217' and 'GROW' is coded as '6438'. What is the code for 'G' in the given code language?532

- Ans
- 1. 6
 - 2. 4
 - 3. 8
 - 4. 7

Q.6 In a certain code language,
A + B means 'A is the mother of B'
A - B means 'A is the brother of B'
A x B means 'A is the wife of B'
A ÷ B means 'A is the father of B'
Based on the above, how is R related to L if ' $R + Y \div H - S x L$ '?

- Ans
- 1. Wife's father's sister
 - 2. Wife's father's mother
 - 3. Wife's mother
 - 4. Wife's sister

Q.7 Seven people, E, F, G, W, X, Y and Z, are sitting in a row, facing north. No one sits to the right of Y. Only three people sit between Y and E. Only two people sit between E and W. F sits third to the left of X. Z sits to the immediate right of X. How many people sit between G and W?

- Ans
- 1. Four
 - 2. One
 - 3. Two
 - 4. Three

Q.8 Refer to the following letter series and answer the question.
(Left) J K N M Y T G V F R S C D E T X C D W M N B H G F L P F Q Z R (Right)
How many consonants are there in the English alphabetical series between the letter which is fourth from the right end and fourth from the left end?11301

- Ans
- 1. 8
 - 2. 5
 - 3. 6
 - 4. 7

Q.9 Seven boxes W, X, Y, Z, G, H and I are kept one over the other but not necessarily in the same order. Only four boxes are kept between G and I. Only W is kept above G. Only two boxes are kept between Y and X. H is kept immediately above Z. X is not kept immediately above H. Which box is kept fourth from the top?

- Ans
- 1. X
 - 2. G
 - 3. I
 - 4. H

Q.10 Read the given statements and conclusions carefully. Assuming that the information given in the statements is true, even if it appears to be at variance with commonly known facts, decide which of the given conclusion(s) logically follow(s) from the statements.

Statements:

All Farmers are Teachers.
All Teachers are Dentists.

Conclusions:

I) No Dentists are Farmers.
II) Some Dentists are Farmers.

- Ans
- 1. Both conclusions (I) and (II) follow.
 - 2. Neither conclusion (I) nor (II) follows.
 - 3. Only conclusion (II) follows.
 - 4. Only conclusion (I) follows.

Q.11 In a certain code language, 'TAPE' is coded as '7523' and 'PING' is coded as '4136'. What is the code for 'P' in the given code language?

- Ans
- 1. 1
 - 2. 3
 - 3. 5
 - 4. 4

Q.12 Refer to the following letter series and answer the question that follows. (Counting to be done from left to right only.)

(Left) O K L O I U H N B G T E D C I O K O L P Y H B G T E F T G V G U J I (Right)

How many such consonants are there, each of which is immediately preceded by a vowel and also immediately followed by a vowel?

- Ans
- 1. 2
 - 2. 3
 - 3. 6
 - 4. 5

Q.13 Refer to the following letter, symbol series and answer the question. Counting to be done from left to right only.

(Left) L © * % £ # A \$ J Z % £ C © * V @ E P € Q E (Right)

How many such symbols are there each of which is immediately preceded by a letter and also immediately followed by a symbol?9256

- Ans
- 1. 3
 - 2. 4
 - 3. 5
 - 4. 2

Q.14 In a certain code language, 'CALM' is coded as '5327' and 'LAME' is coded as '5317'. What is the code for 'E' in the given code language?

- Ans
- 1. 5
 - 2. 2
 - 3. 3
 - 4. 1

Q.15 Refer to the following letter, symbol series and answer the question. Counting to be done from left to right only.

(Left) J W J # ^ + / A + W L T X V J T % F \ T @ (Right)

How many such letters are there each of which is immediately preceded by a letter and also immediately followed by a symbol?8971

- Ans
- 1. Zero
 - 2. Two
 - 3. One
 - 4. Three

Q.16 Refer to the following series and answer the question

(Left)

F R E I D N S H I P I S B O O N F R O G M E T O O O F D C

X G H F (Right)

How many letters are there in the English alphabetical order between the letter which is seventh from the right end and the letter which is sixth from the left end of the series?15762

- Ans
- 1. SEVEN
 - 2. NINE
 - 3. SIX
 - 4. EIGHT

Q.17 L, M, N, R, S and T live on six different floors of the same building. The lowermost floor in the building is numbered 1, the floor above it is numbered 2 and so on, till the topmost floor is numbered 6. No one lives above M. M lives on exactly one floor above T. Only N lives below L. S lives on an even-numbered floor. How many people live below R?

- Ans
- 1. Two
 - 2. One
 - 3. Four
 - 4. Three

Q.18 A, B, C, J, K, L and I are sitting around a circular table, facing the centre of the table. Only one person sits between K and C when counted from the left of C. L sits third to the right of J. I sits third to the left of A. L sits to the immediate right of I. B is not an immediate neighbor of I. How many people sit between B and C when counted from the right of B?

- Ans
- 1. Four
 - 2. Three
 - 3. One
 - 4. Two

Q.19 A statement is given followed by two conclusions. Find out which conclusion is true based on the given statement.

Statement: $L \leq B > Q > D = S$

Conclusions:

I. $L < Q$

II. $S < B$

- Ans
- 1. Only II is true
 - 2. Both I and II are true
 - 3. Neither I nor II is true
 - 4. Only I is true

Q.20 In a certain code language,
A + B means 'A is the daughter of B',
A # B means 'A is the father of B',
A x B means 'A is the son of B',
A & B means 'A is the sister of B'.

Based on the above, how is S related to T if 'S x G # J & K + T'?

- Ans
- 1. Husband
 - 2. Son
 - 3. Father
 - 4. Brother

Section : General intelligence and Reasoning Ability1

Q.1 Based on the English alphabetical order, three of the following four are alike in a certain way and thus form a group. Which is the one that does not belong to that group?

(Note: The odd one out is not based on the number of consonants/vowels or their position in the letter cluster.)

- Ans
- 1. LQN
 - 2. OTQ
 - 3. CJK
 - 4. FKH

Q.2 Select the set in which the numbers are related in the same way as are the numbers of the following sets.

(NOTE : Operations should be performed on the whole numbers, without breaking down the numbers into its constituent digits. E.g. 13 - Operations on 13 such as adding /deleting /multiplying etc. to 13 can be performed. Breaking down 13 into 1 and 3 and then performing mathematical operations on 1 and 3 is not allowed)

(48,78,130)

(78,99,181)

- Ans
- 1. (27,19,90)
 - 2. (91,3,102)
 - 3. (76,40,120)
 - 4. (57,9,160)

Q.3 Select the set in which the numbers are related in the same way as are the numbers of the following sets.

(NOTE : Operations should be performed on the whole numbers, without breaking down the numbers into its constituent digits. E.g. 13 - Operations on 13 such as adding /deleting /multiplying etc. to 13 can be performed. Breaking down 13 into 1 and 3 and then performing mathematical operations on 1 and 3 is not allowed)

(48,15,29)

(33,25,4)

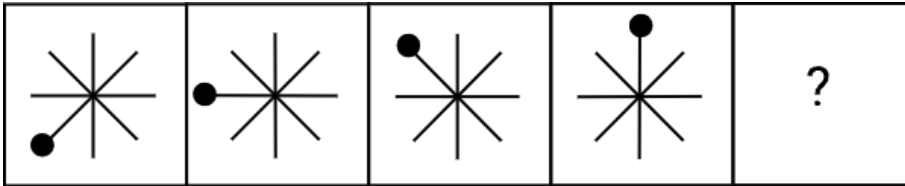
Ans 1. (111,82,85)

2. (131,59,38)

3. (111,33,74)

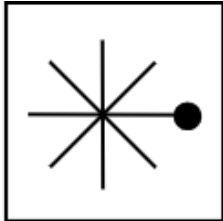
4. (121,42,95)

Q.4 Identify the figure given in the options which when put in place of ? will logically complete the series.

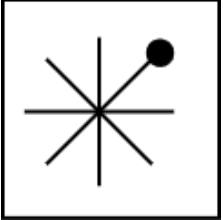


Ans

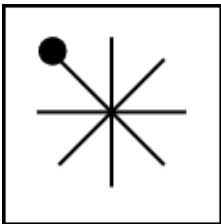
1.



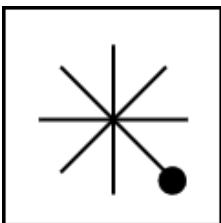
2.



3.



4.



Q.5 Select the pair which follows the same pattern as that followed by the two pairs given below. Both pairs follow the same pattern.

LJN : KIM

IGK : HFJ

- Ans
- 1. AYC : YXA
 - 2. AXA : ZXB
 - 3. NLP : MKO
 - 4. AXA : YWA

Q.6 If M stands for \div , N stands for $+$, O stands for $-$, and P stands for \times , then what will come in place of the question mark (?) in the following equation?

15 P 4 N 20 M 5 O 12 = ?

- Ans
- 1. 48
 - 2. 52
 - 3. 60
 - 4. 54

Q.7 What should come in place of the '?' in the given series?

39 40 43 48 55 ?

- Ans
- 1. 67
 - 2. 61
 - 3. 69
 - 4. 64

Q.8 What should come in place of the '?' in the given series?

72, 77, 82, ?, 92, 97

- Ans
- 1. 87
 - 2. 85
 - 3. 89
 - 4. 91

Q.9 If A stands for \div , B stands for \times , C stands for $+$, and D stands for $-$, what will come in place of the question mark (?) in the following equation?

24 A 6 C 24 D 3 B 4 = ?

- Ans
- 1. 12
 - 2. 15
 - 3. 16
 - 4. 18

Q.10 Read the given statements and conclusions carefully. Assuming that the information given in the statements is true, even if it appears to be at variance with commonly known facts, decide which of the given conclusion(s) logically follow(s) from the statements.

Statements:

Some cookies are chips.

All chips are donuts.

Conclusions:

(I) No donut is a cookie.

(II) Some donuts are cookies.

- Ans
- 1. Neither conclusion (I) nor conclusion (II) follows.
 - 2. Only conclusion (I) follows.
 - 3. Both conclusion (I) and conclusion (II) follow.
 - 4. Only conclusion (II) follows.

Q.11 What should come in place of '?' in the given series?

31 43 60 82 109 ?

- Ans
- 1. 128
 - 2. 134
 - 3. 121
 - 4. 141

Q.12 If 2 is subtracted from each odd digit and 1 is added to each even digit in the number 9738462, what will be the sum of the digits which are second from the left and second from the right?

- Ans
- 1. 7
 - 2. 6
 - 3. 12
 - 4. 8

Q.13 Select the set in which the numbers are related in the same way as are the numbers of the following sets.

(NOTE : Operations should be performed on the whole numbers, without breaking down the numbers into its constituent digits. E.g. 13 - Operations on 13 such as adding /deleting /multiplying etc. to 13 can be performed. Breaking down 13 into 1 and 3 and then performing mathematical operations on 1 and 3 is not allowed)

(70,40,170)

(11,53,-20)

- Ans
- 1. (35,83,12)
 - 2. (12,15,0)
 - 3. (1,38,-32)
 - 4. (86,32,226)

Q.14 FING is related to DGLE in a certain way based on the English alphabetical order. In the same way, XAFY is related to VYDW. To which of the following options is RUZS related, following the same logic?

- Ans
- 1. PLOI
 - 2. PXDS
 - 3. PSXQ
 - 4. PQSX

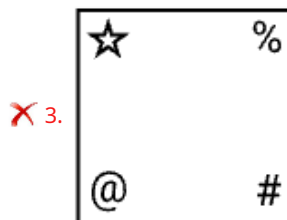
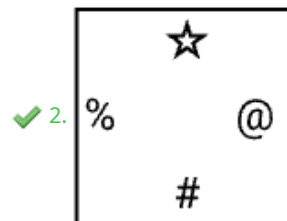
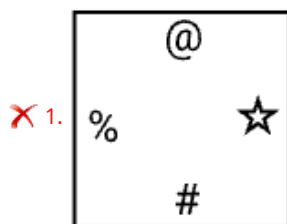
Q.15 Based on the English alphabetical order, three of the following four letter cluster pairs are alike in a certain way and thus form a group. Which is the one that does not belong to that group?
(Note: The odd one out is not based on the number of consonants/vowels or their position in the letter cluster)9859

- Ans
- 1. RS-VW
 - 2. AB - EF
 - 3. GH-KL
 - 4. TZ - AB

Q.16 Identify the figure given in the options which when put in place of the '?' will logically complete the series.

#	@	#	@	☆	@	
@	%	☆	#			?
☆	☆	%	%	%	#	

Ans



Q.17 What will come in the place of '?' in the following equation, if '+' and '-' are interchanged and 'x' and '÷' are interchanged?
 $16 \div 2 + 8 \times 4 - 5 = ?$

- Ans
- 1. 37
 - 2. 39
 - 3. 35
 - 4. 33

Q.18 Based on the English alphabetical order, three of the following four letter cluster pairs are alike in a certain way and thus form a group. Which is the one that does not belong to that group?
(Note: The odd one out is not based on the number of consonants/vowels or their position in the letter cluster)

- Ans
- 1. OR - MP
 - 2. MP - KN
 - 3. QT - LP
 - 4. TW - RU

Q.19 LAWG is related to NXYD in a certain way based on the English alphabetical order. In the same way, PDIR is related to RAKO. To which of the following is QKYF related, following the same logic?

- Ans
- 1. TGBC
 - 2. TIBD
 - 3. UGZB
 - 4. SHAC

Q.20 If 'Q' stands for 'x', 'R' stands for '+', 'S' stands for '-', and 'T' stands for '÷', what will come in place of the question mark '?' in the following equation?
15Q2S5T5R7 = ?

- Ans
- 1. 31
 - 2. 36
 - 3. 38
 - 4. 33

Section : General Awareness

Q.1 When were the 2nd Khelo India Para Games 2025 held?

- Ans
- 1. March 20-27, 2025
 - 2. February 10-17, 2025
 - 3. May 5-12, 2025
 - 4. April 1-8, 2025

Q.2 The first ever Indian Pickleball Nationals were held at which place in November 2025?

- Ans
- 1. Ahmedabad
 - 2. Bengaluru
 - 3. Ambala
 - 4. Rajgir

Q.3 VB-G RAM G guarantees rural employment for how many days per year?

- Ans
- 1. 175
 - 2. 100
 - 3. 125
 - 4. 150

Q.4 Which new research infrastructure initiative announced in early 2026, aims to develop a 133-qubit quantum computer in India?

- Ans
- 1. Amaravati Quantum Valley Initiative
 - 2. Indian Advanced Robotics Program
 - 3. National AI Supercomputing Mission
 - 4. Bharat Semiconductor Research Hub

Q.5 Which term refers to the difference between the value of a country's exports of goods and its imports of goods during a given period?

- Ans
- 1. Balance of Payments
 - 2. Current Account
 - 3. Balance of Trade
 - 4. Capital Account

Q.6 Under whose leadership was the Doctrine of Lapse introduced and extensively used between 1848 and 1856 to annex Indian states?

- Ans
- 1. Lord Canning
 - 2. Lord Cornwallis
 - 3. Lord Wellesley
 - 4. Lord Dalhousie

Q.7 What was the role of the Bhashini-powered Kumbh Sah'AI'yak Chatbot during Mahakumbh 2025?

- Ans
- 1. It provided healthcare advice to pilgrims through AI-powered consultations
 - 2. It coordinated transportation services for pilgrims using AI-based route planning
 - 3. It streamed live video feeds for online event participation
 - 4. It enabled real-time translation, voice-based lost-and-found services, and multilingual assistance

Q.8 Who was elected the 15th Vice-President of India in September 2025?

- Ans
- 1. B. Sudershan Reddy
 - 2. Mallikarjun Kharge
 - 3. Jagdeep Dhankhar
 - 4. C. P. Radhakrishnan

Q.9 In which of the following years, did Jawaharlal Nehru become the General Secretary of the All India Congress Committee?

- Ans
- 1. 1923
 - 2. 1909
 - 3. 1911
 - 4. 1925

Q.10 Which initiative aims to provide functional household tap connections to all rural households by 2024?

- Ans
- 1. Startup India
 - 2. Mission Shakti
 - 3. Jal Jeevan Mission
 - 4. Swachh Bharat Mission

Q.11 Which regional rural bank introduced India's first fully solar-powered ATM van, named "TGB on Wheels", in 2026 to provide uninterrupted banking services in rural and remote areas with support from NABARD?

- Ans
- 1. Bangiya Gramin Vikash Bank
 - 2. Assam Gramin Vikash Bank
 - 3. Manipur Rural Bank
 - 4. Tripura Gramin Bank

Q.12 Unemployment that occurs when individuals are temporarily between jobs or are in the process of searching for new employment is known as:

- Ans**
- 1. Structural Unemployment
 - 2. Seasonal Unemployment
 - 3. Cyclical Unemployment
 - 4. Frictional Unemployment

Q.13 Which institution was set up in 1982 as the apex body to coordinate the activities of all agencies involved in the rural financing system in India?

- Ans**
- 1. Reserve Bank of India
 - 2. State Bank of India
 - 3. National Bank for Agriculture and Rural Development
 - 4. National Housing Bank

Q.14 Where did the Dandi March, a non-violent protest in India, start?

- Ans**
- 1. Kheda
 - 2. Bombay
 - 3. Ahmedabad
 - 4. Champaran

Q.15 Which Indian language, written in the Devanagari script, is one of the most widely spoken languages in the world and is the official language of India?

- Ans**
- 1. Gujarati, from Gujarat
 - 2. Marathi, from Maharashtra
 - 3. Hindi, from northern India
 - 4. Bengali, from West Bengal

Q.16 In which session of the Indian National Congress was the demand for 'Poorna Swaraj' (Complete Independence) formally declared in 1929?

- Ans**
- 1. Lahore Session
 - 2. Madras Session
 - 3. Calcutta Session
 - 4. Karachi Session

Q.17 Where was the 2025 Men's Hockey Asia Cup held in India?

- Ans**
- 1. Chennai
 - 2. New Delhi
 - 3. Jaipur
 - 4. Rajgir

Q.18 If a country's population is growing faster than its GDP, what is likely to happen to its per capita income?

- Ans**
- 1. It will match the GDP growth.
 - 2. It will increase.
 - 3. It will decrease.
 - 4. It will remain the same.

Q.19 The Market Access Support (MAS) Scheme, launched on 31 Dec 2025, aims to support which of the following?

- Ans**
- 1. Urban housing developers
 - 2. College scholarship recipients
 - 3. Indian exporters
 - 4. Indian Importers

Q.20 Rani Lakshmbai was associated with which of the following centers of the Revolt of 1857?

- Ans
- 1. Bareilly
 - 2. Arrah
 - 3. Jhansi
 - 4. Lucknow

Section : General Awareness1

Q.1 Which of following rivers is a major tributary of the Ganga in the Great Indian Plains?

- Ans
- 1. Godavari
 - 2. Narmada
 - 3. Krishna
 - 4. Yamuna

Q.2 Which committee recommended a three-tier Panchayati Raj system in India?

- Ans
- 1. Ashok Mehta Committee
 - 2. L. M. Singhvi Committee
 - 3. GVK Rao Committee
 - 4. Balwant Rai Mehta Committee

Q.3 The arrangement of vascular tissues in dicot stem is _____.

- Ans
- 1. Radial arrangement
 - 2. Ring shaped
 - 3. Scattered bundles
 - 4. Star shaped

Q.4 An ancient Buddhist university site in Bihar, known for its red brick ruins and monastic structures, played a major role in the spread of Buddhism. Which site is this?

- Ans
- 1. Rajgir
 - 2. Vikramshila
 - 3. Sarnath
 - 4. Nalanda

Q.5 What structural feature makes steroids different from other lipids?

- Ans
- 1. They have a four-fused ring structure.
 - 2. They contain only one ring.
 - 3. They lack any ring structure.
 - 4. They are composed entirely of fatty acids.

Q.6 Under which Article of the Indian Constitution can the President seek the Supreme Court's opinion on Constitutional matters?

- Ans
- 1. Article 76
 - 2. Article 143
 - 3. Article 156
 - 4. Article 72

Q.7 What was the Right to Constitutional Remedies often called by Dr. B.R. Ambedkar?

- Ans**
- 1. Backbone of Democracy
 - 2. Fundamental Obligation
 - 3. Heart and Soul of the Constitution
 - 4. Social Justice

Q.8 Which city is home to the Humayun's Tomb, often considered a precursor to the Taj Mahal?

- Ans**
- 1. Lahore
 - 2. Jaipur
 - 3. Delhi
 - 4. Agra

Q.9 Which architectural feature most clearly distinguishes Mahayana Buddhist sites in India from earlier Hinayana (Theravada) sites?

- Ans**
- 1. Complete absence of Bodhisattva figures
 - 2. Exclusive use of plain stupas without sculptural decoration
 - 3. Large anthropomorphic images of the Buddha installed for worship
 - 4. Absence of any stone carvings inside as well as outside the monuments

Q.10 Which of the following poets is regarded as a foundational figure in classical Kannada literature and authored a version of the Rāmāyaṇa?

- Ans**
- 1. Ādikavi Pampa
 - 2. Tulsidas
 - 3. Bhavabhuti
 - 4. Kalidasa

Q.11 Which of the following is NOT a major jowar-producing state?

- Ans**
- 1. Madhya Pradesh
 - 2. Assam
 - 3. Maharashtra
 - 4. Karnataka

Q.12 Which coastal state lies at the northernmost end of the Western Coastal Plains?

- Ans**
- 1. Goa
 - 2. Gujarat
 - 3. Kerala
 - 4. Tamil Nadu

Q.13 Nutrition is the science that studies foods, nutrients, and how they act within ____.

- Ans**
- 1. The human body system
 - 2. The respiratory system
 - 3. The muscular system
 - 4. The endocrine system

Q.14 Which of the following Indian states is famous for coffee plantation farming?

- Ans**
- 1. Haryana
 - 2. Punjab
 - 3. Karnataka
 - 4. Gujarat

Q.15 As per Census 2011, the rural population constitutes what percentage of India's total population?

- Ans**
- 1. 68.8%
 - 2. 72.5%
 - 3. 64.1%
 - 4. 55.3%

Q.16 Which Part of the Indian Constitution deals with the Panchayati Raj system?

- Ans**
- 1. Part IX
 - 2. Part IV
 - 3. Part VII
 - 4. Part XI

Q.17 During the onset of adolescence, rapid physical growth occurs primarily due to increased activity of which substances?

- Ans**
- 1. Hormones
 - 2. Proteins
 - 3. Enzymes
 - 4. Vitamins

Q.18 Which of the following nutrients is classified as a micronutrient?

- Ans**
- 1. Fat
 - 2. Vitamin
 - 3. Protein
 - 4. Carbohydrate

Q.19 Which Sikh festival commemorates the formal establishment of the Khalsa by Guru Gobind Singh in 1699 and is also observed as the Sikh New Year?

- Ans**
- 1. Bandi Chhor Divas
 - 2. Vaisakhi
 - 3. Guru Nanak Jayanti
 - 4. Hola Mohalla

Q.20 Which Article of the Indian Constitution enables an arrested person to know the grounds for arrest?

- Ans**
- 1. Article 22
 - 2. Article 21
 - 3. Article 23
 - 4. Article 20

Section : Arithmetical and Numerical Ability

Q.1

Class	Frequency
10-20	10
20-30	20
30-40	10
40-50	30

Find the mean of the data.

(Round off your answer to two decimal places.)

- Ans
- 1. 35.55
 - 2. 32.50
 - 3. 30.60
 - 4. 33.57

Q.2 A student's marks were incorrectly entered as 26 instead of 40. Due to

What is the number of students in the class?

- Ans
- 1. 11
 - 2. 4
 - 3. 9
 - 4. 10

Q.3 Sahil spends 20% of their income on rent, 35% on utilities, 20% on education, and saves the rest. If the total savings are ₹16,000, calculate the total income.

- Ans
- 1. ₹67,000
 - 2. ₹70,000
 - 3. ₹64,000
 - 4. ₹60,000

Q.4 Simplify:

$$\left(\frac{3}{5} + 0.25\right)^2 - \frac{1}{4}$$

- Ans
- 1. $\frac{189}{400}$
 - 2. $\frac{279}{400}$
 - 3. $\frac{289}{400}$
 - 4. $\frac{169}{400}$

Q.5 The price of a table lamp is first increased by 8% and then decreased by 12%. What will be the net percentage change in the price?

- Ans
- 1. 4% increase
 - 2. 4.96% increase
 - 3. 4% decrease
 - 4. 4.96% decrease

Q.6 Anand has ₹1,722. He divided this sum between his two sons, Anil and Ashok, and asked them to invest their respective shares at 10% per annum, compounded annually. It was observed that the amounts received by Anil after 14 years and by Ashok after 15 years were equal. Find how much (in ₹) Anand gave to Anil.

- Ans
- 1. 820
 - 2. 902
 - 3. 752
 - 4. 920

Q.7 If 12 students can decorate a school in 20 days, how long will it take 8 students to decorate the same school?

- Ans
- 1. 30
 - 2. 28
 - 3. 32
 - 4. 25

Q.8 Laxminarayan deposited a certain sum of money at 8% per annum, compounded annually. At the end of 2 years, the total amount received was ₹11,664. Find the sum of money deposited by Laxminarayan.

- Ans
- 1. ₹10,000
 - 2. ₹10,400
 - 3. ₹9,700
 - 4. ₹9,600

Q.9 What will be the compound interest on ₹12,500 for 2 years at the rate of 12% per annum, compounded annually?

- Ans
- 1. ₹3,180
 - 2. ₹3,090
 - 3. ₹3,810
 - 4. ₹3,900

Q.10 Find the smallest digit x (where $0 \leq x \leq 9$) such that the number $234x6$



- Ans
- 1. 3
 - 2. 0
 - 3. 1
 - 4. 2

Q.11 A vendor bought lemons at 20 for a rupee. How many must he sell for a rupee to gain 100%?

- Ans
- 1. 14
 - 2. 10
 - 3. 11
 - 4. 12

Q.12 Simplify : $\frac{1}{0.8} - \frac{1}{5.6}$

- Ans
- 1. $\frac{13}{15}$
 - 2. $\frac{11}{15}$
 - 3. $\frac{15}{14}$
 - 4. $\frac{14}{15}$

Q.13 Study the table and answer the question that follows.

The table below shows the number of employees working at various departments of a company.

Department	Percentage Distribution of the Number of Employees
Production	35%
HR	10%
IT	15%
Marketing	20%
Accounts	20%

If there are a total of 4000 employees in the company, what is the difference between the number of employees in Marketing and HR departments?

- Ans
- 1. 200
 - 2. 800
 - 3. 300
 - 4. 400

Q.14 The ratio of milk and water in a 55 litre mixture is 3 : 2. Find the quantity (in litres) of water to be added to the mixture in order to make this ratio 1 : 1.

- Ans
- 1. 9
 - 2. 13
 - 3. 11
 - 4. 15

Q.15 A baker made two batches of cookies. The first batch has 10 cookies, each weighing 30 grams, and the second batch has 20 cookies, each weighing 36 grams. What is the average weight of a cookie in the combined batch?

- Ans
- 1. 35 grams
 - 2. 30 grams
 - 3. 28 grams
 - 4. 34 grams

Q.16 Mahesh's salary was first reduced by 37% and subsequently raised by 48%. By how much percentage was his final salary lower compared to his initial salary?

- Ans
- 1. 6.76%
 - 2. 48%
 - 3. 17.76%
 - 4. 37%

Q.17 A man bought a horse and a carriage for ₹3000. He sold the horse at a gain of 20% and the carriage at a loss 10%, thereby gaining 2% on the whole. Find the cost price of the horse.

- Ans
- 1. ₹1500
 - 2. ₹1300
 - 3. ₹1600
 - 4. ₹1200

Q.18 In what ratio must a grocer mix two varieties of wheat worth ₹63 per kg and ₹133 per kg so that if he sells the mixture at ₹138 per kg he may gain 50%? 1475

- Ans
- 1. 49:39
 - 2. 51:26
 - 3. 45:23
 - 4. 41:29

Q.19 The length of a wooden stick is first decreased by 20%; the resulting length is again decreased by 30%. The overall percentage change in the length of the wooden stick is:

- Ans
- 1. 42%, Decrease
 - 2. 44%, Decrease
 - 3. 42%, Increase
 - 4. 44%, Increase

Q.20 At what rate (in percentage, rounded off to two places after decimal) of interest per year will a sum of money double itself in 6 years on simple interest?

- Ans
- 1. 33.34
 - 2. 16.67
 - 3. 18.67
 - 4. 14.67

Section : Arithmetical and Numerical Ability1

Q.1 A tank can be filled by two pipes in 6 hours. If the first pipe can fill the tank in 12 hours, how long will it take for the second pipe to fill the tank?

- Ans
- 1. 10 hours
 - 2. 12 hours
 - 3. 24 hours
 - 4. 18 hours

Q.2 A trader marks his goods at 20% above the cost price and allows a discount of 13% on it. If he gains $x\%$, then value of x is:

- Ans
- 1. 4.4
 - 2. 3.4
 - 3. 5.4
 - 4. 6.4

Q.3 The incomes of a person between two consecutive years are in the ratio 2 : 3, and the expenses are in the ratio 4 : 5. He saved the remaining amount. His income in the second year is ₹60,000 and his expenses in the first year are ₹30,000. Find his total savings for the two years.

- Ans**
- 1. ₹28,000
 - 2. ₹22,000
 - 3. ₹25,000
 - 4. ₹32,500

Q.4 A contractor undertakes to build a house in 100 days. He employs 100 people for the same. However, after 50 days he finds that the work is only 40% complete. How many more men need to be employed to complete the work in time?

- Ans**
- 1. 55
 - 2. 50
 - 3. 45
 - 4. 65

Q.5 A product has a marked price of ₹100. Calculate the final selling price (in ₹) of the product if successive discounts of 20%, 25% and 30% are given on it?

- Ans**
- 1. 44
 - 2. 40
 - 3. 46
 - 4. 42

Q.6 Two trains are moving in the same direction at a speed of 88 km/hr and 73 km/hr. What is the relative speed between the two trains?

- Ans**
- 1. 15 km/hr
 - 2. 125 km/hr
 - 3. 161 km/hr
 - 4. 91 km/hr

Q.7 Rashi starts walking at a certain speed from place A to reach place B, which is 5 km away. Shashi starts walking at a certain speed at the same time from B to reach A. If they both meet after half an hour, and Shashi takes 25 minutes more to reach A than Rashi to reach B, find Shashi's speed (in km/h) of walking.

- Ans**
- 1. 4
 - 2. 5
 - 3. 3
 - 4. 6

Q.8 In a three-tiered supply chain, a manufacturer produces a table at a certain cost. The manufacturer then sells the table to a wholesaler at a 30% profit margin. Subsequently, the wholesaler sells the table for ₹1300 to a retailer at a 25% profit margin. Finally, the retailer sells the table to the end-consumer at a 30% profit margin. The manufacturer's cost price is ₹(800 + R) less than the retailer selling price of the table. The HCF of R and 18 is:3126

- Ans**
- 1. 18
 - 2. 2
 - 3. 9
 - 4. 1

Q.9 Select the least ratio among the following.

- Ans 1. 7 : 10
 2. 2 : 5
 3. 2 : 3
 4. 5 : 9

Q.10 The incomes of Rahul and Biraj are in the ratio 5:7 and their expenditures are in the ratio 3:4. If Rahul saves ₹3,000 and Biraj saves ₹2,000 more than Rahul, find the income (in ₹) of Biraj.

- Ans 1. 21,000
 2. 7,000
 3. 28,000
 4. 14,000

Q.11 The length of a rectangle is 28 cm and its width is 14 cm. A semicircle is attached externally along one of the 14 cm sides, with its diameter equal to the rectangle's width. Find the perimeter of the resulting figure. (Use $\pi = \frac{22}{7}$).

- Ans 1. 97 cm
 2. 88 cm
 3. 92 cm
 4. 83 cm

Q.12 If a shopkeeper offers two successive discounts of 40% and 20% on an article, then find the equivalent single discount which can be offered by the shopkeeper.

- Ans 1. 51%
 2. 48%
 3. 52%
 4. 50%

Q.13 The area of a square is 1.96 m^2 . What is its perimeter (in m)?

- Ans 1. 4.8
 2. 5.6
 3. 4.2
 4. 3.6

Q.14 A trapezium has parallel sides 8 cm and 14 cm. The distance between the parallel sides is equal to the side of an equilateral triangle with perimeter 102 cm. Find the area of the trapezium.

- Ans 1. 254 cm²
 2. 264 cm²
 3. 304 cm²
 4. 374 cm²

Q.15 Priyanka travels one-fourth of the total distance at a speed of 30 km/hr, the next one-fourth at a speed of 25 km/hr, the following one-fourth at a speed of 40 km/hr, and the final one-fourth at a speed of 60 km/hr. Find the average speed of Priyanka for the entire journey. (Round off your answer to two decimal places.)

- Ans 1. 30.45 km/hr
 2. 32.64 km/hr
 3. 26.48 km/hr
 4. 34.78 km/hr

Q.16 Two numbers are 28% and 24% less than a third number, respectively. Find the ratio of the first two numbers.

- Ans
- 1. 1 : 3
 - 2. 11 : 12
 - 3. 21 : 23
 - 4. 18 : 19

Q.17 Two pipes are filling a tank. The first pipe can fill the tank in 8 hours, and the second pipe can fill it in 12 hours. If both pipes are opened together, how long will it take to fill the tank?

- Ans
- 1. 4.8 hours
 - 2. 2.4 hours
 - 3. 5.8 hours
 - 4. 4.2 hours

Q.18 What is the volume (in cm^3) of a cylindrical vessel with a diameter of the base 8 cm and height 70 cm?

(Take $\pi = \frac{22}{7}$)

- Ans
- 1. 3250
 - 2. 2530
 - 3. 2350
 - 4. 3520

Q.19 A train 200 m long meets another train 150 m long running in the opposite direction. If their speeds are 36 km/hr and 54 km/hr, respectively, in how many seconds will they cross each other completely?

- Ans
- 1. 18 seconds
 - 2. 12 seconds
 - 3. 14 seconds
 - 4. 16 seconds

Q.20 In 14 minutes, seven-tenths of a bucket is filled. How much time (in minutes) will it take to fill the remaining bucket?

- Ans
- 1. 6
 - 2. 10
 - 3. 12
 - 4. 8

Section : Test of English Language and Comprehension

Q.1 A sentence with a grammatical error is given. Identify the error and then from the given options, select the sentence which is error free and grammatically correct.

You must commit the poem by memory.

4116

- Ans
- 1. You must commit the poem in memory.
 - 2. You must commit the poem from memory.
 - 3. You must commit the poem with memory.
 - 4. You must commit the poem to memory.

Q.2 Select the most appropriate article for the blank in the sentence given below.

_____ majestic peaks were covered with snow. 1509

- Ans**
- 1. No article required
 - 2. The
 - 3. An
 - 4. A

Q.3 Complete the following sentence using the most appropriate option:

Pollution levels the city have risen dramatically.

- Ans**
- 1. over
 - 2. at
 - 3. for
 - 4. in

Q.4 Complete the sentence with the correct adverb.

He responded to the rude comment _____, not letting his emotions show.

- Ans**
- 1. angrily
 - 2. dramatically
 - 3. impulsively
 - 4. indifferently

Q.5 Choose the word that best completes the sentence.

The new drug was put _____ the market after being approved by the government.4499

- Ans**
- 1. from
 - 2. on
 - 3. of
 - 4. among

Q.6 Select the most appropriate article to fill in the blank. If no article is needed, select 'No article required'.

In the field of environmental science, discussions about _____ Amazon rainforest often focus on its crucial role in regulating the Earth's climate.

- Ans**
- 1. the
 - 2. a
 - 3. an
 - 4. No article required

Q.7 Select the most appropriate set of articles to fill in the blanks.

A chef cooked biryani in a clay pot with _____ assortment of spices, using an heirloom recipe as a guest waited with _____ eager smile and a plate in hand.

- Ans**
- 1. a ; an
 - 2. an ; the
 - 3. an ; an
 - 4. the ; an

Q.8 Complete the given sentence, choosing your answer from the options provided.

My aunt _____ a three-tiered cake every Christmas.

- Ans
- 1. fries
 - 2. throws
 - 3. bakes
 - 4. cooks

Q.9 Parts of a sentence are given below in jumbled order. Arrange the parts in the correct order to form a meaningful sentence.

P- of a show is judged by its theme

Q- the effectiveness

R- of the audience

S- and by its relation to the needs

- Ans
- 1. QSRP
 - 2. SPRQ
 - 3. RQSP
 - 4. QPSR

Q.10 Select the most appropriate option to fill in the blank.

The research was conducted _____, adhering to the highest ethical standards.

- Ans
- 1. scrupulously
 - 2. hurriedly
 - 3. carelessly
 - 4. negligently

Q.11 Choose a word or phrase to replace the underlined word in the following sentence in order to correct it.

They were adequately, though not frankly, provided for in their new flat but they kept complaining.²⁵⁶⁹

- Ans
- 1. surprisingly
 - 2. meticulously
 - 3. abruptly
 - 4. amply

Q.12 Select the most appropriate option to fill in the blank.

The researcher spoke _____ about the fragile state of coral reefs, emphasising the urgent need for conservation.

- Ans
- 1. earnestly
 - 2. rarely
 - 3. impatiently
 - 4. nervously

Q.13 Choose a word or phrase to replace the underlined word in the following sentence in order to correct it.

The parents waited cheerfully for the news of their missing son.²⁵⁶⁸

- Ans
- 1. anxiously
 - 2. voluntarily
 - 3. extensively
 - 4. accidentally

Q.14 Complete the sentence by selecting the correct option given below.

India is one of ____ most industrialized countries in Asia.

1600

- Ans**
- 1. it
 - 2. the
 - 3. an
 - 4. a

Q.15 Read the following group of sentences. The first and last sentences (1 and 6) are fixed. Rearrange the remaining sentences (A, B, C, and D) in the correct order to form a meaningful paragraph.

1. Our visit to the Eiffel Tower was unforgettable.
- A. The elevator ride offered breathtaking views of Paris.
- B. First, we queued for tickets and booked a guide, excited for the experience.
- C. On reaching the top, we took memorable photographs.
- D. The guide shared fascinating facts about the tower's history.
6. We left with cherished memories and a deeper appreciation for Paris.

- Ans**
- 1. CBDA
 - 2. ACBD
 - 3. BDAC
 - 4. ABCD

Comprehension:

Read the passage carefully and answer the questions that are given below.

Water is an essential natural resource, yet it is becoming increasingly scarce in many parts of the world. Due to rapid population growth, pollution, and the effects of climate change, billions of people face daily challenges in accessing clean and safe drinking water. According to the United Nations, this crisis is expected to worsen unless immediate action is taken.

The consequences of water scarcity are severe and far-reaching. It leads to the spread of diseases, poor sanitation, and reduced agricultural productivity. Environmental damage such as the drying up of rivers and wetlands also affects biodiversity and increases the risk of natural disasters like droughts and floods.

Addressing this issue requires both individual and collective efforts. People can conserve water by using it responsibly at home, fixing leaks, and supporting sustainable gardening practices. Governments must implement strong water policies and promote fair distribution to ensure clean water is available for future generations.

SubQuestion No : 16

Q.16 Select an appropriate title for this passage from the given options.

Comprehension:

Read the passage carefully and answer the questions that are given below.

Water is an essential natural resource, yet it is becoming increasingly scarce in many parts of the world. Due to rapid population growth, pollution, and the effects of climate change, billions of people face daily challenges in accessing clean and safe drinking water. According to the United Nations, this crisis is expected to worsen unless immediate action is taken.

The consequences of water scarcity are severe and far-reaching. It leads to the spread of diseases, poor sanitation, and reduced agricultural productivity. Environmental damage such as the drying up of rivers and wetlands also affects biodiversity and increases the risk of natural disasters like droughts and floods.

Addressing this issue requires both individual and collective efforts. People can conserve water by using it responsibly at home, fixing leaks, and supporting sustainable gardening practices. Governments must implement strong water policies and promote fair distribution to ensure clean water is available for future generations.

SubQuestion No : 17

Q.17 What is the main idea of the passage?

Comprehension:

Read the passage carefully and answer the questions that are given below.

Water is an essential natural resource, yet it is becoming increasingly scarce in many parts of the world. Due to rapid population growth, pollution, and the effects of climate change, billions of people face daily challenges in accessing clean and safe drinking water. According to the United Nations, this crisis is expected to worsen unless immediate action is taken.

The consequences of water scarcity are severe and far-reaching. It leads to the spread of diseases, poor sanitation, and reduced agricultural productivity. Environmental damage such as the drying up of rivers and wetlands also affects biodiversity and increases the risk of natural disasters like droughts and floods.

Addressing this issue requires both individual and collective efforts. People can conserve water by using it responsibly at home, fixing leaks, and supporting sustainable gardening practices. Governments must implement strong water policies and promote fair distribution to ensure clean water is available for future generations.

SubQuestion No : 18

Q.18 Identify the structure of the passage.

Comprehension:

Read the passage carefully and answer the questions that are given below.

Water is an essential natural resource, yet it is becoming increasingly scarce in many parts of the world. Due to rapid population growth, pollution, and the effects of climate change, billions of people face daily challenges in accessing clean and safe drinking water. According to the United Nations, this crisis is expected to worsen unless immediate action is taken.

The consequences of water scarcity are severe and far-reaching. It leads to the spread of diseases, poor sanitation, and reduced agricultural productivity. Environmental damage such as the drying up of rivers and wetlands also affects biodiversity and increases the risk of natural disasters like droughts and floods.

Addressing this issue requires both individual and collective efforts. People can conserve water by using it responsibly at home, fixing leaks, and supporting sustainable gardening practices. Governments must implement strong water policies and promote fair distribution to ensure clean water is available for future generations.

SubQuestion No : 19

Q.19 Select the correct antonym of the given word from the passage.

Dispensable

Comprehension:

Read the passage carefully and answer the questions that are given below.

Water is an essential natural resource, yet it is becoming increasingly scarce in many parts of the world. Due to rapid population growth, pollution, and the effects of climate change, billions of people face daily challenges in accessing clean and safe drinking water. According to the United Nations, this crisis is expected to worsen unless immediate action is taken.

The consequences of water scarcity are severe and far-reaching. It leads to the spread of diseases, poor sanitation, and reduced agricultural productivity. Environmental damage such as the drying up of rivers and wetlands also affects biodiversity and increases the risk of natural disasters like droughts and floods.

Addressing this issue requires both individual and collective efforts. People can conserve water by using it responsibly at home, fixing leaks, and supporting sustainable gardening practices. Governments must implement strong water policies and promote fair distribution to ensure clean water is available for future generations.

SubQuestion No : 20

Q.20 Select the correct antonym of the given word from the passage.

Degrade

Section : **Test of English Language and Comprehension1**

Q.1 Choose the correct option.

One who does not believe in God is a/an _____.

- Ans**
- ✓ 1. atheist
 - ✗ 2. skeptic
 - ✗ 3. theist
 - ✗ 4. monotheist

Q.2 Rectify the sentence by selecting the correct spelling of the highlighted word from the options provided.

She is a **conscienteous** researcher who meticulously verifies every detail of her experiments.

- Ans
- 1. consenteous
 - 2. conscientuous
 - 3. conscientious
 - 4. consienteous

**Q.3 Select the most appropriate meaning of the proverb:
Variety is the spice of life**

- Ans
- 1. Adding different experiences improve one's routine
 - 2. Diversity makes life more interesting and enjoyable
 - 3. Changing your daily habits leads to better outcomes
 - 4. Exploring new opportunities brings satisfaction

Q.4 Choose the correct option.

Fear of heights is known as _____.

- Ans
- 1. hydrophobia
 - 2. xenophobia
 - 3. acrophobia
 - 4. claustrophobia

Q.5 Identify the synonym of the underlined word.

The old building looked quite dilapidated.

- Ans
- 1. Decorated
 - 2. Spacious
 - 3. Ruined
 - 4. Modern

Q.6 Choose the correct one-word substitution for the given sentence.

A person who draws maps

- Ans
- 1. Cartographer
 - 2. Topographer
 - 3. Calligrapher
 - 4. Geographer

Q.7 Identify the incorrectly spelt word in the given sentence.

A **connoisseur** of Renaissance art, she could identify a forgery with remarkable alacrity.

- Ans
- 1. remarkable
 - 2. connoisseur
 - 3. forgery
 - 4. alacrity

Q.8 Choose the correct one-word substitution for the given sentence.

A person who opposes war or the use of military force

- Ans
- 1. Activist
 - 2. Pacifist
 - 3. Anarchist
 - 4. Pessimist

Q.9 Select the most appropriate meaning of the proverb.

Learn to walk before you run

- Ans
- 1. You should practice running before walking to be successful.
 - 2. It's better to be patient and take small steps towards success.
 - 3. Master the basics before attempting more complex tasks.
 - 4. Be careful when learning new and challenging things.

Q.10 Choose the correct SYNONYM of the given word.

Detrimental

- Ans
- 1. Biased
 - 2. Damaging
 - 3. Impartial
 - 4. Benign

Q.11 Select the most appropriate synonym of the given word.

Opulent

- Ans
- 1. Graceful
 - 2. Destitute
 - 3. Lavish
 - 4. Genuine

Q.12 A sentence divided into different segments (P, Q, R, and S) is given. Rearrange the segments to form a coherent sentence.

(P) to learn new skills
(Q) many students
(R) attend workshops
(S) each year.

- Ans
- 1. S P Q R
 - 2. Q R P S
 - 3. P Q S R
 - 4. R S Q P

Q.13 Select the most appropriate meaning of the given proverb.

Too many cooks spoil the broth

- Ans
- 1. Too many people involved in a task can ruin it
 - 2. Broth is difficult to prepare
 - 3. Large groups make better decisions
 - 4. Cooking is best done alone

Q.14 Identify the antonym of "disguised".

- Ans**
- 1. Explained
 - 2. Treat
 - 3. Exposed
 - 4. Ordinary

Q.15 Select the most appropriate meaning of the following proverb.

Fortune favours the brave.

- Ans**
- 1. Those who take risks and act boldly are more likely to succeed.
 - 2. Fortune always supports those who wait uncomplainingly.
 - 3. Bravery and confidence are more important than wisdom.
 - 4. Fortune is always prejudiced towards those who are brave.

Comprehension:

Read the given passage carefully and answer the questions that follow.

Sociologists argue that domestic labor—tasks like caregiving and household management—occupies a strange place in our world. These activities are essential for society to function, yet they remain "invisible" in economic reports. Because this work is often unpaid and mostly performed by women, it is systematically undervalued. This creates a social imbalance: we treat paid office work as "real" productivity while treating home labor as secondary. Public policy is slowly changing to address this. Government programs like parental leave and childcare subsidies show that attitudes are shifting. However, many policies still fail because they assume every family follows a traditional structure. Cultural norms also play a role. Media representations often praise caregiving as a "moral virtue" or a "kind act," but they rarely frame it as a skilled job requiring expertise and intelligence. Reframing domestic labor means recognizing its true social value. It is not just a personal task; it is a contribution that sustains families and communities. If we value care as much as we value wages, we can challenge inequality and redefine what it means to contribute to society.

SubQuestion No : 16

Q.16 Which title best reflects the passage?

Comprehension:

Read the given passage carefully and answer the questions that follow.

Sociologists argue that domestic labor—tasks like caregiving and household management—occupies a strange place in our world. These activities are essential for society to function, yet they remain "invisible" in economic reports. Because this work is often unpaid and mostly performed by women, it is systematically undervalued. This creates a social imbalance: we treat paid office work as "real" productivity while treating home labor as secondary. Public policy is slowly changing to address this. Government programs like parental leave and childcare subsidies show that attitudes are shifting. However, many policies still fail because they assume every family follows a traditional structure. Cultural norms also play a role. Media representations often praise caregiving as a "moral virtue" or a "kind act," but they rarely frame it as a skilled job requiring expertise and intelligence. Reframing domestic labor means recognizing its true social value. It is not just a personal task; it is a contribution that sustains families and communities. If we value care as much as we value wages, we can challenge inequality and redefine what it means to contribute to society.

SubQuestion No : 17

Q.17 What fact is stated in the passage?

Comprehension:

Read the given passage carefully and answer the questions that follow.

Sociologists argue that domestic labor—tasks like caregiving and household management—occupies a strange place in our world. These activities are essential for society to function, yet they remain "invisible" in economic reports. Because this work is often unpaid and mostly performed by women, it is systematically undervalued. This creates a social imbalance: we treat paid office work as "real" productivity while treating home labor as secondary. Public policy is slowly changing to address this. Government programs like parental leave and childcare subsidies show that attitudes are shifting. However, many policies still fail because they assume every family follows a traditional structure. Cultural norms also play a role. Media representations often praise caregiving as a "moral virtue" or a "kind act," but they rarely frame it as a skilled job requiring expertise and intelligence. Reframing domestic labor means recognizing its true social value. It is not just a personal task; it is a contribution that sustains families and communities. If we value care as much as we value wages, we can challenge inequality and redefine what it means to contribute to society.

SubQuestion No : 18

Q.18 What inference can be drawn about the way the economy is currently defined?

Comprehension:

Read the given passage carefully and answer the questions that follow.

Sociologists argue that domestic labor—tasks like caregiving and household management—occupies a strange place in our world. These activities are essential for society to function, yet they remain "invisible" in economic reports. Because this work is often unpaid and mostly performed by women, it is systematically undervalued. This creates a social imbalance: we treat paid office work as "real" productivity while treating home labor as secondary.

Public policy is slowly changing to address this. Government programs like parental leave and childcare subsidies show that attitudes are shifting. However, many policies still fail because they assume every family follows a traditional structure. Cultural norms also play a role. Media representations often praise caregiving as a "moral virtue" or a "kind act," but they rarely frame it as a skilled job requiring expertise and intelligence.

Reframing domestic labor means recognizing its true social value. It is not just a personal task; it is a contribution that sustains families and communities. If we value care as much as we value wages, we can challenge inequality and redefine what it means to contribute to society.

SubQuestion No : 19

Q.19 How does the author structure the argument?

Comprehension:

Read the given passage carefully and answer the questions that follow.

Sociologists argue that domestic labor—tasks like caregiving and household management—occupies a strange place in our world. These activities are essential for society to function, yet they remain "invisible" in economic reports. Because this work is often unpaid and mostly performed by women, it is systematically undervalued. This creates a social imbalance: we treat paid office work as "real" productivity while treating home labor as secondary.

Public policy is slowly changing to address this. Government programs like parental leave and childcare subsidies show that attitudes are shifting. However, many policies still fail because they assume every family follows a traditional structure. Cultural norms also play a role. Media representations often praise caregiving as a "moral virtue" or a "kind act," but they rarely frame it as a skilled job requiring expertise and intelligence.

Reframing domestic labor means recognizing its true social value. It is not just a personal task; it is a contribution that sustains families and communities. If we value care as much as we value wages, we can challenge inequality and redefine what it means to contribute to society.

SubQuestion No : 20

Q.20 The tone of the passage is best described as:

Section : Test of Hindi Language and Comprehension

Q.1 तुम्हारे घर बिल्ली है ।
उपर्युक्त वाक्य में रिक्त स्थान की पूर्ति के लिए उचित कारक शब्द का चयन करें-

- Ans**
- 1. नी
 - 2. ने
 - 3. में
 - 4. के

Q.2 निम्नलिखित मुहावरे का अर्थ बताएं -
'बड़े घर की हवा खाना'

- Ans**
- 1. जेल जाना
 - 2. कलंक लगना
 - 3. भेद खोलना
 - 4. सरल काम

Q.3 दिए गए वाक्यों के लिखने का सही क्रम चुनें-
(1) सीता का विवाह हुए एक साल हो गए थे।
(2) इस बीच वह बस दो बार ही मायके लौटी थी।
(3) भरे-पूरे परिवार में वह सुखी थी।
(4) उसका पति उससे बहुत प्रसन्न था।

- Ans**
- 1. 3241
 - 2. 4213
 - 3. 1432
 - 4. 2314

Q.4 निम्नलिखित वाक्यांशों में से एक अशुद्ध वाक्य का चयन कीजिए-

- Ans
- 1. वह बाज़ार से सब्जी लाया।
 - 2. वे क्रिकेट खेलते हैं।
 - 3. वह तुमसे मिलना चाहते है।
 - 4. मैं कल दिल्ली जाऊँगा।

Q.5 निम्नलिखित वाक्य को ध्यानपूर्वक पढ़ें और वाक्य में त्रुटि की पहचान कर वाक्य शुद्ध करें।

आज फिल्म दिनों बाद के सभी साथ बहुत लोग में बैठ कर परिवार देख रहे हैं।

- Ans
- 1. आज के बहुत दिनों बाद रहे परिवार साथ में बैठ फिल्म देख कर सभी लोग हैं।
 - 2. दिनों बाद सभी लोग साथ परिवार के में बैठ आज बहुत कर फिल्म देख रहे हैं।
 - 3. आज रहे हैं बहुत लोग दिनों परिवार के सभी साथ में बैठ बाद कर फिल्म देख।
 - 4. आज बहुत दिनों बाद परिवार के सभी लोग साथ में बैठ कर फिल्म देख रहे हैं।

Q.6 निम्न वाक्यांश के लिए सार्थक शब्द अंकित कीजिए।

जो बहुत थोड़ा जानता हो-

- Ans
- 1. प्रज्ञ
 - 2. विज्ञ
 - 3. अल्पज्ञ
 - 4. विध्न

Q.7 निम्नलिखित विकल्पों में से उपयुक्त क्रिया का चयन कर रिक्त स्थान की पूर्ति कीजिए-
'उस बहादुर सैनिक ने कहा कि मैं भले _____ जाऊँगा, लेकिन मेरा देश कभी नहीं झुकेगा।

- Ans
- 1. मारना
 - 2. पीस
 - 3. घिस
 - 4. मर

Q.8 दिए गए वाक्यों में अतिरिक्त वाक्य का चुनाव करें-

- Ans
- 1. सांसारिक बुराइयों के निवारणार्थ अपने दुर्गुणों से उद्धार की जरूरत है।
 - 2. स्वयं से स्वयं का उद्धार कर अपने जीवन का पथ प्रशस्त करें।
 - 3. मानव को अपना उद्धार स्वयं करना चाहिए।
 - 4. चतुर्दिक अज्ञान का आवरण होने से वैयक्तिक और सामाजिक जीवन विषाक्त हो जाता है।

Q.9 निम्नलिखित मुहावरे के सही अर्थ की पहचान कीजिए -
कदम गाड़ कर बैठना

- Ans
- 1. अडिग होना
 - 2. बदतमीजी करना
 - 3. ढीठ होना
 - 4. आश्चर्यचकित रहना

Q.10 सुमन हमेशारहती है।
उपर्युक्त वाक्य में रिक्त स्थान की पूर्ति के लिए उचित विशेषण शब्द का चयन करें-

- Ans
- 1. नया
 - 2. लंबी
 - 3. प्रसन्न
 - 4. दस

Q.11 दिए गये वाक्य का शुद्ध रूप क्या है?

आपकी वाणी में माधुर्यता है।

- Ans
- 1. माधुर्यता आपकी वाणी में है।
 - 2. आपकी वाणी में माधुर्यत है।
 - 3. आपकी वाणी में माधुर्य है।
 - 4. आपकी माधुय में वाणी है।

Q.12 मोहन ने किताब को संदूक में.....दिया ।

उपर्युक्त वाक्य में रिक्त स्थान की पूर्ति के लिए उचित क्रिया शब्द का चयन करें-

- Ans
- 1. दिखाना
 - 2. आना
 - 3. रख
 - 4. समझ

Q.13 निम्नलिखित वाक्यांश के लिए सार्थक शब्द बताएं -

'जहाँ नाटक खेला जाता है'

- Ans
- 1. रंगमंच
 - 2. नेपथ्य
 - 3. मैदान
 - 4. सिनेमा

Q.14 दिए गए वाक्यों में अतिरिक्त वाक्य का चुनाव करें-

- Ans
- 1. श्रेष्ठता सुविधा के मार्ग से नहीं, अपितु चुनौतियों को स्वीकार करने से जन्म लेती है।
 - 2. श्रेष्ठता कोई जन्मजात विशेषाधिकार नहीं है।
 - 3. परिस्थितियों के प्रति मनुष्य की दृष्टि उसकी नियति की गति निर्धारित करती है।
 - 4. श्रेष्ठता निरंतर संघर्ष से अर्जित की गई मान्यता है।

Q.15 डॉक्टर मरीजदवाई दे रहा है ।

उपर्युक्त वाक्य में रिक्त स्थान की पूर्ति के लिए उचित कारक शब्द का चयन करें-

- Ans
- 1. पर
 - 2. को
 - 3. में
 - 4. से

Comprehension:

निम्नलिखित गद्यांश को ध्यानपूर्वक पढ़कर पूछे गए प्रश्नों के लिए सही विकल्प चुनकर लिखें -

यदि हमारे वृक्ष स्वस्थ हैं तो निश्चित मानिए हम भी स्वस्थ हैं। हमें तो प्राणवायु उन्हीं से मिलती है। हम कार्बन डाइ आक्साइड छोड़ते हैं या उन्हें देते हैं और वे बदले में ऑक्सीजन देते हैं, जो हमारे जीवन की हर गतिविधि के लिए आवश्यक है। हमारे स्वास्थ्य का हर बिंदु ऑक्सीजन की उपलब्धता से अनुप्राणित है। भले ही यह बात हमें कल्पना लोक की लगती हो, लेकिन वृक्ष वैज्ञानिक प्रामाणिकता भी रखती है, इसमें रत्ती भर भी संदेह करने की गुंजाइश नहीं है। हम यदि अपने आस-पास खड़े वृक्षों की रक्षा का जिम्मा अपने कंधों पर उठा लें तो निश्चित मानिए हमने अपने स्वास्थ्य को लंबे समय तक स्वस्थ रखने की गारंटी प्राप्त कर ली है। वृक्षों की रक्षा में ही हमारे जीवन की सुरक्षा का राज छिपा है। कहा जाता है "एक स्वस्थ मन हजारों सोने के सिंहासनों से कहीं अधिक मूल्यवान होता है क्योंकि स्वस्थ मन ही समाज और स्वस्थ देश की रचना करने में समर्थ है। कुत्सित विचारों वाले लोग अपना जीवन तो चला सकते हैं, लेकिन समाज और देश को नहीं चला सकते। करोड़ों परिवारों के सुनहरे भविष्य के बारे में वही चिंतन, मनन और सृजन कर सकता है, जो व्यर्थ के लालच, लोभ और षड्यंत्रों से मुक्त हो और जिस पर किसी भी प्रकार का कोई अनुचित दबाव न हो।"

SubQuestion No : 16

Q.16 हमारा स्वास्थ्य वृक्षों पर निर्भर क्यों है ?

- Q.2 निम्नलिखित वाक्य में अशुद्ध शब्द की पहचान कीजिए-
वे अभ्यर्थी, जो परीक्षा में उत्तीर्ण हो चुके हैं और जिन्होंने आवश्यक दस्तावेज़ पूरे कर दिए हैं, अंतिम साक्षात्कार के लिए आमंत्रित किए जाएंगे।
- Ans 1. साक्षात्कार
 2. आमंत्रित
 3. उत्तीर्ण
 4. अभ्यर्थी
- Q.3 निम्नलिखित मुहावरे का अर्थ बताएं -
'बाल की खाल उतारना'
- Ans 1. काम बिगाड़ना
 2. बहुत छानबीन करना
 3. झूठी बात उड़ाना
 4. निर्दोष मुक्त होना
- Q.4 निम्नलिखित मुहावरे के सही अर्थ की पहचान कीजिए-
'खोपड़ी पर खड़ा होना'
- Ans 1. बिल्कुल पास खड़ा हो जाना
 2. सावधानी बरतना
 3. सभ्यतापूर्ण व्यवहार करना
 4. असंतुलित हो जाना
- Q.5 दिए गए विकल्पों में से अनेकार्थी शब्द 'शिव' का एक अर्थ कौन-सा है?
- Ans 1. कल्याण
 2. प्रकृति
 3. असमान
 4. अवकाश
- Q.6 निम्नलिखित वाक्य में अशुद्ध शब्द की पहचान कीजिए-
मैं अपने गुरु के मार्गदर्शन से अनुग्रहित महसूस करता हूँ।
- Ans 1. गुरु
 2. महसूस
 3. मार्गदर्शन
 4. अनुग्रहित
- Q.7 निम्नलिखित लोकोक्ति का अर्थ बताएं -
'आगे कुआ, पीछे खाई'
- Ans 1. मूर्ख धनवान
 2. दोनों ओर मुसीबत होना
 3. दिखावटी रोना
 4. सदैव आनंद मनाना
- Q.8 निम्नलिखित विकल्पों में से कौन सा शब्द तत्सम है ?
- Ans 1. चोंच
 2. चौकोर
 3. चित्रकार
 4. चितेरा

Q.9 निम्न शब्द का विलोम शब्द चुनिए ।
आघात

- Ans
- 1. कुंवारी
 - 2. कुमारी
 - 3. अनावश्यक
 - 4. प्रतिघात

Q.10 निम्न शब्द का अनेकार्थी शब्द चुनिए ।
अम्बर

- Ans
- 1. प्रकाश
 - 2. आकाश
 - 3. अवकाश
 - 4. पाताल

Q.11 'अवनत' का विलोम शब्द होगा-

- Ans
- 1. नम्र
 - 2. उन्नत
 - 3. विनीत
 - 4. विनत

Q.12 मंगनी का पर्यायवाची शब्द नहीं होगा -

- Ans
- 1. रघुवर
 - 2. सगाई
 - 3. वाग्दान
 - 4. फलदान

Q.13 'शाश्वत' शब्द का उचित विलोम शब्द पहचानें।

- Ans
- 1. मुक्ति
 - 2. क्षणिक
 - 3. आकर्ष
 - 4. भोर

Q.14 निम्नलिखित में से कौन सा एक वाक्य वर्तनी की दृष्टि से अशुद्ध है?

- Ans
- 1. राम ने मर्यादा की रक्षा की।
 - 2. तुम्हें पाकर मैं बहुत खुश हूँ।
 - 3. पहलाद भगवान का भक्त था।
 - 4. वह ज्ञानी नहीं है।

Q.15 दिए गए विकल्पों में से तद्भव शब्द का चयन कीजिए।

- Ans
- 1. ग्रंथि
 - 2. गात्र
 - 3. गर्त
 - 4. गँवार

Comprehension:

निम्नलिखित गद्यांश के आधार पर पूछे गए प्रश्नों के सही विकल्प का चयन कीजिए-

मानव समाज में एकता के अद्वितीय सामर्थ्य को रेखांकित करने वाली अनेक प्रसिद्ध लोकोक्तियाँ प्रचलित हैं। उदाहरण के लिए, एक अकेले तिनके की कोई बिसात नहीं होती, किंतु वही तिनके जब संगठित होकर एक सुदृढ़ रस्सी का रूप ले लेते हैं, तब वे महाबली हाथी को भी वश में करने की शक्ति रखते हैं। ठीक इसी प्रकार, एक अकेली ईंट का महत्त्व नगण्य है, परंतु जब अनेक ईंटें परस्पर जुड़कर एक विशाल दीवार का ढांचा तैयार करती हैं, तब उसे ढहाना लगभग असंभव हो जाता है। जल की एक सूक्ष्म बूँद का अपना कोई पृथक अस्तित्व नहीं होता, लेकिन जब असंख्य बूँदें मिलकर अगाध सागर का स्वरूप धारण करती हैं, तो उसे लौंघना अत्यंत दुष्कर हो जाता है। एकता की महिमा को समझाने हेतु वृद्ध किसान और उसके पुत्रों की वह पौराणिक कथा सर्वविदित है, जिसमें लकड़ियों का गट्टर संगठन की शक्ति का प्रतीक बनकर उभरा। ये समस्त दृष्टान्त स्पष्टतः प्रमाणित करते हैं कि 'एकता में ही बल है।'

SubQuestion No : 16

Q.16 गद्यांश के मुख्य संदेश और भाव को समझते हुए इसके लिए सबसे उपयुक्त शीर्षक क्या होगा?

Comprehension:

निम्नलिखित गद्यांश के आधार पर पूछे गए प्रश्नों के सही विकल्प का चयन कीजिए-

मानव समाज में एकता के अद्वितीय सामर्थ्य को रेखांकित करने वाली अनेक प्रसिद्ध लोकोक्तियाँ प्रचलित हैं। उदाहरण के लिए, एक अकेले तिनके की कोई बिसात नहीं होती, किंतु वही तिनके जब संगठित होकर एक सुदृढ़ रस्सी का रूप ले लेते हैं, तब वे महाबली हाथी को भी वश में करने की शक्ति रखते हैं। ठीक इसी प्रकार, एक अकेली ईंट का महत्त्व नगण्य है, परंतु जब अनेक ईंटें परस्पर जुड़कर एक विशाल दीवार का ढांचा तैयार करती हैं, तब उसे ढहाना लगभग असंभव हो जाता है। जल की एक सूक्ष्म बूँद का अपना कोई पृथक अस्तित्व नहीं होता, लेकिन जब असंख्य बूँदें मिलकर अगाध सागर का स्वरूप धारण करती हैं, तो उसे लॉघना अत्यंत दुष्कर हो जाता है। एकता की महिमा को समझाने हेतु वृद्ध किसान और उसके पुत्रों की वह पौराणिक कथा सर्वविदित है, जिसमें लकड़ियों का गट्टर संगठन की शक्ति का प्रतीक बनकर उभरा। ये समस्त दृष्टान्त स्पष्टतः प्रमाणित करते हैं कि 'एकता में ही बल है।'

SubQuestion No : 17

Q.17 गद्यांश में 'तिनके' और 'ईंट' के उदाहरणों के माध्यम से लेखक क्या सिद्ध करना चाहता है?

Comprehension:

निम्नलिखित गद्यांश के आधार पर पूछे गए प्रश्नों के सही विकल्प का चयन कीजिए-

मानव समाज में एकता के अद्वितीय सामर्थ्य को रेखांकित करने वाली अनेक प्रसिद्ध लोकोक्तियाँ प्रचलित हैं। उदाहरण के लिए, एक अकेले तिनके की कोई बिसात नहीं होती, किंतु वही तिनके जब संगठित होकर एक सुदृढ़ रस्सी का रूप ले लेते हैं, तब वे महाबली हाथी को भी वश में करने की शक्ति रखते हैं। ठीक इसी प्रकार, एक अकेली ईंट का महत्त्व नगण्य है, परंतु जब अनेक ईंटें परस्पर जुड़कर एक विशाल दीवार का ढांचा तैयार करती हैं, तब उसे ढहाना लगभग असंभव हो जाता है। जल की एक सूक्ष्म बूँद का अपना कोई पृथक अस्तित्व नहीं होता, लेकिन जब असंख्य बूँदें मिलकर अगाध सागर का स्वरूप धारण करती हैं, तो उसे लॉघना अत्यंत दुष्कर हो जाता है। एकता की महिमा को समझाने हेतु वृद्ध किसान और उसके पुत्रों की वह पौराणिक कथा सर्वविदित है, जिसमें लकड़ियों का गट्टर संगठन की शक्ति का प्रतीक बनकर उभरा। ये समस्त दृष्टान्त स्पष्टतः प्रमाणित करते हैं कि 'एकता में ही बल है।'

SubQuestion No : 18

Q.18 जल की एक बूँद और असंख्य बूँदों के बीच के अंतर के बारे में कौन-सा तथ्य सही है?

Comprehension:

निम्नलिखित गद्यांश के आधार पर पूछे गए प्रश्नों के सही विकल्प का चयन कीजिए-

मानव समाज में एकता के अद्वितीय सामर्थ्य को रेखांकित करने वाली अनेक प्रसिद्ध लोकोक्तियाँ प्रचलित हैं। उदाहरण के लिए, एक अकेले तिनके की कोई बिसात नहीं होती, किंतु वही तिनके जब संगठित होकर एक सुदृढ़ रस्सी का रूप ले लेते हैं, तब वे महाबली हाथी को भी वश में करने की शक्ति रखते हैं। ठीक इसी प्रकार, एक अकेली ईंट का महत्त्व नगण्य है, परंतु जब अनेक ईंटें परस्पर जुड़कर एक विशाल दीवार का ढांचा तैयार करती हैं, तब उसे ढहाना लगभग असंभव हो जाता है। जल की एक सूक्ष्म बूँद का अपना कोई पृथक अस्तित्व नहीं होता, लेकिन जब असंख्य बूँदें मिलकर अगाध सागर का स्वरूप धारण करती हैं, तो उसे लॉघना अत्यंत दुष्कर हो जाता है। एकता की महिमा को समझाने हेतु वृद्ध किसान और उसके पुत्रों की वह पौराणिक कथा सर्वविदित है, जिसमें लकड़ियों का गट्टर संगठन की शक्ति का प्रतीक बनकर उभरा। ये समस्त दृष्टान्त स्पष्टतः प्रमाणित करते हैं कि 'एकता में ही बल है।'

SubQuestion No : 19

Q.19 वास्तविक जीवन की कौन सी परिस्थिति गद्यांश के मुख्य संदेश 'एकता में बल है' को सबसे सटीक रूप से चरितार्थ करती है?

Comprehension:

निम्नलिखित गद्यांश के आधार पर पूछे गए प्रश्नों के सही विकल्प का चयन कीजिए-

मानव समाज में एकता के अद्वितीय सामर्थ्य को रेखांकित करने वाली अनेक प्रसिद्ध लोकोक्तियाँ प्रचलित हैं। उदाहरण के लिए, एक अकेले तिनके की कोई बिसात नहीं होती, किंतु वही तिनके जब संगठित होकर एक सुदृढ़ रस्सी का रूप ले लेते हैं, तब वे महाबली हाथी को भी वश में करने की शक्ति रखते हैं। ठीक इसी प्रकार, एक अकेली ईंट का महत्त्व नगण्य है, परंतु जब अनेक ईंटें परस्पर जुड़कर एक विशाल दीवार का ढांचा तैयार करती हैं, तब उसे ढहाना लगभग असंभव हो जाता है। जल की एक सूक्ष्म बूँद का अपना कोई पृथक अस्तित्व नहीं होता, लेकिन जब असंख्य बूँदें मिलकर अगाध सागर का स्वरूप धारण करती हैं, तो उसे लॉघना अत्यंत दुष्कर हो जाता है। एकता की महिमा को समझाने हेतु वृद्ध किसान और उसके पुत्रों की वह पौराणिक कथा सर्वविदित है, जिसमें लकड़ियों का गट्टर संगठन की शक्ति का प्रतीक बनकर उभरा। ये समस्त दृष्टान्त स्पष्टतः प्रमाणित करते हैं कि 'एकता में ही बल है।'

SubQuestion No : 20

Q.20 गद्यांश में प्रयुक्त शब्द 'सुदृढ़' और 'दुष्कर' के सही विलोम शब्द क्या होंगे?