



GOVT. OF NCT OF DELHI  
Delhi Subordinate Services Selection Board  
FC-18, Institutional Area, Karkardooma, Delhi – 110092.  
[www.dsssb.delhigovt.nic.in](http://www.dsssb.delhigovt.nic.in)

Participant Name	KESHAV KUMAR
Test Center Name	Aadarsh Pariksha Kendra CENTER B - Gate No 2 - Noida Sector 64
Test Date	19/04/2026
Test Time	1:00 PM - 3:00 PM
Subject	Multi Tasking Staff

Section : General intelligence and Reasoning Ability

**Q.1** Refer to the following number and symbol series and answer the question that follows. Counting to be done from left to right only. All numbers are single digit numbers only.

(Left) € @ £ € 2 8 \* 1 © 5 4 7 % 1 5 # 2 @ \$ £ 1 5 (Right)

How many such numbers are there, each of which is immediately preceded by a symbol and also immediately followed by a symbol?

- Ans
- 1. Four
  - 2. One
  - 3. Three
  - 4. Two

**Q.2** Refer to the following series and answer the question that follows (all numbers are single digit numbers only). Counting to be done left to right only.

(Left) 7 8 9 2 7 5 2 6 6 2 4 1 8 5 9 7 8 1 1 4 7 9 2 3 2 8 5 (Right)

How many such odd numbers are there, each of which is immediately preceded by an odd number and also immediately followed by an odd number?

- Ans
- 1. Three
  - 2. Zero
  - 3. Two
  - 4. One

**Q.3** Each vowel in the word FASHIONING is changed to the second letter following it in the English alphabetical order and each consonant is changed to the second letter preceding it in the English alphabetical order. How many letters will appear exactly twice in the group of letters thus formed?

- Ans
- 1. Three
  - 2. One
  - 3. Two
  - 4. Four

Q.4 Seven people, A, B, C, D, I, J and K, are sitting in a row, facing north. Only three people sit to the left of A. Only J sits to the right of K. Only three people sit between K and C. B sits at some place to the left of D but at some place to the right of I.

How many people sit between I and D?2346

- Ans
- 1. One
  - 2. Three
  - 3. Four
  - 4. Two

Q.5 A statement is followed by two conclusions. Find out which conclusion is true based on the given statement.

Statement :  $N < J < V < B > I$

Conclusions:

I.  $I > J$

II.  $N < B$ 2307

- Ans
- 1. Only I is true
  - 2. Both I and II are true
  - 3. Neither I nor II is true
  - 4. Only II is true

Q.6 A statement is followed by two conclusions. Find out which conclusion is true based on the given statement.

Statement:  $N > J < B < I = V$

Conclusions:

I.  $N < B$

II.  $V < N$ 2309

- Ans
- 1. Both I and II are true
  - 2. Only I is true
  - 3. Only II is true
  - 4. Neither I nor II is true

Q.7 In a certain code language, 'MORE' is coded as '5418' and 'GERM' is coded as '8142'. What is the code for 'G' in the given code language?

- Ans
- 1. 2
  - 2. 4
  - 3. 1
  - 4. 8

Q.8 V is the sister of N. S is the wife of T. N is the husband of L. T is the father of V. How is S related to L?

- Ans
- 1. Husband's mother
  - 2. Sister
  - 3. Husband's sister
  - 4. Wife's father

Q.9 In a certain code language, 'POEM' is coded as '3216' and 'TEMP' is coded as '1637'. What is the code for 'T' in the given code language?

- Ans
- 1. 6
  - 2. 7
  - 3. 1
  - 4. 3

Q.10 Refer to the following letter, symbol series and answer the question. Counting to be done from left to right only.

(Left) # P & T £ @ G \$ G V M & X M @ # & L L @ K Y (Right)

How many such letters are there, each of which is immediately preceded by a symbol and also immediately followed by a symbol?

- Ans
- 1. 4
  - 2. 2
  - 3. 5
  - 4. 3

Q.11 In a certain code language, 'SANG' is coded as '9736' and 'SANE' is coded as '7193'. What is the code for 'E' in the given code language?

- Ans
- 1. 1
  - 2. 7
  - 3. 3
  - 4. 6

Q.12 A is father of B. B is brother of C. C is daughter of D. E is sister of D. How E is related to A?

- Ans
- 1. Father
  - 2. Brother's wife
  - 3. Wife's sister
  - 4. Son

Q.13 Refer to the following letter series and answer the question. Counting to be done from left to right only

(Left) R D P U Z B V S P W I D R F M A X P A Y X (Right)

How many such vowels are there each of which is immediately preceded by a consonant and also immediately followed by a vowel?10610

- Ans
- 1. Two
  - 2. None
  - 3. One
  - 4. Three

Q.14 Read the given statements and conclusions carefully. You have to take the given statements to be true even if they seem to be at variance from commonly known facts. You have to decide which conclusion/s logically follow/s from the given statements.

Statements: All pins are masks. All masks are beds.

Conclusion (I): Some beds are masks.

Conclusion (II): All pins are beds.

- Ans
- 1. Both conclusions (I) and (II) follow
  - 2. Only conclusion (II) follows
  - 3. Neither conclusion (I) nor (II) follows
  - 4. Only conclusion (I) follows

Q.15 B, D, E, M, N and R live on six different floors of the same building. The lowermost floor in the building is numbered 1, the floor above it, number 2 and so on till the topmost floor is numbered 6. Only two people live between B and M. Only two people live between D and N. No one lives above D. M lives below N but above E. On which floor does R live?<sup>2068</sup>

- Ans
- 1. Floor numbered 4
  - 2. Floor numbered 3
  - 3. Floor numbered 2
  - 4. Floor numbered 1

Q.16 Each of B, C, D, H, I, J and K has an exam on a different day of a week, starting from Monday and ending on Sunday of the same week. Only two people have exam between H and I. Only two people have exam between C and K. Only two people have exams between D and K. No one has exam after D. J has exam on one of the days before B. I has exam immediately after B. Who has exam on Wednesday?<sup>2332</sup>

- Ans
- 1. I
  - 2. H
  - 3. J
  - 4. C

Q.17 Punita ranked 9th from the top and 6th from the bottom in his class. How many students are there in his class?<sup>2326</sup>

- Ans
- 1. 12
  - 2. 14
  - 3. 13
  - 4. 11

Q.18 Each letter in the word CEREMONY is changed to the letter immediately following it in the English alphabetical order. Which of the following letters will be fourth from the right in the new letter-cluster thus formed?<sup>2760</sup>

- Ans
- 1. S
  - 2. P
  - 3. N
  - 4. F

Q.19 Seven boxes S, T, U, V, X, Y and Z are kept one over the other but not necessarily in the same order. Only T is kept above S. Only X is kept between S and Z. Only V is kept below Y. How many boxes are kept between U and V?<sup>2156</sup>

- Ans
- 1. Three
  - 2. One
  - 3. Four
  - 4. Two

Q.20 Seven people, E, F, G, J, K, M and Y, are sitting in a straight line facing north. No one sits to the right of E. Only three people sit between E and K. Only two people sit between K and G. Y sits third to the left of J. F sits to the immediate right of J. How many people sit between M and G?<sup>2076</sup>

- Ans
- 1. Two
  - 2. Three
  - 3. Four
  - 4. One

Section : General intelligence and Reasoning Ability1

**Q.1** In the following triad, each group of letters is related to the subsequent one following a certain logic. Select from the given options, the one which follows the same logic.

PEAS - ASPE - EAPS  
JUTE - TEJU - UTJE

- Ans
- 1. VINE - VIEN - NEVI
  - 2. GAME - EMAG - GAEM
  - 3. LOCK - OCKL - KCOL
  - 4. BANE - NEBA - ANBE

**Q.2** Based on the English alphabetical order, three of the following four letter-cluster pairs are alike in a certain way and thus form a group. Which is the letter-cluster pair that does not belong to that group? (Note: The odd one out is not based on the number of consonants/vowels or their positions in the letter-cluster.)

- Ans
- 1. PT - KN
  - 2. JN - EH
  - 3. MQ - HK
  - 4. GK - BF

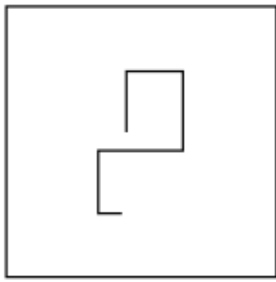
**Q.3** What should come in place of '?' in the given series?  
48 56 80 120 176 248 ?3053

- Ans
- 1. 336
  - 2. 363
  - 3. 328
  - 4. 382

**Q.4** If 'A' stands for '+', 'B' stands for '-', 'C' stands for '÷' and 'D' stands for '×', what will come in place of the question mark (?) in the following equation?  
10 D 1 A 19 B 4 C 2 = ?

- Ans
- 1. 52
  - 2. 47
  - 3. 55
  - 4. 27

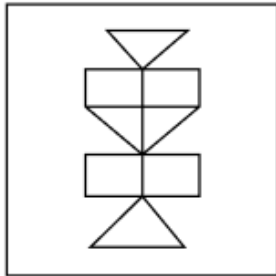
Q.5 Select the option figure in which the given figure (X) is embedded as its part.  
(Rotation is NOT allowed.)



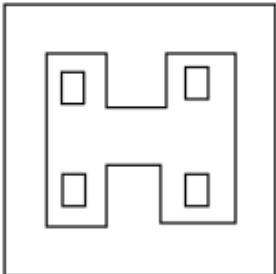
(X)

Ans

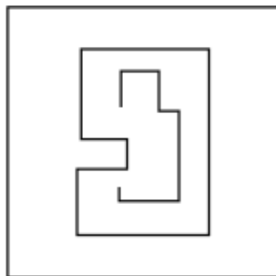
✗ 1.



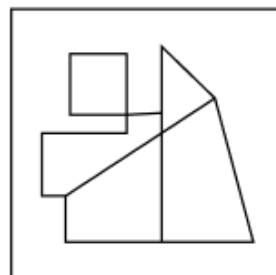
✗ 2.



✗ 3.



✓ 4.



Q.6 Based on the English alphabetical order, three of the following four letter-cluster pairs are alike in a certain way and thus form a group. Which is the one that DOES NOT belong to that group?

(Note: The odd one out is not based on the number of consonants/vowels or their position in the letter-cluster.)

Ans

✗ 1. JP-MS

✗ 2. MS-PV

✗ 3. FL-IO

✓ 4. AG-DM

**Q.7** In the following number-pairs, the second number is obtained by applying certain mathematical operations to the first number. Which numbers should replace X and Y so that the pattern followed by the two numbers on the left side of :: is same as that on the right side of :: ?

(NOTE: Operations should be performed on the whole numbers, without breaking down the numbers into its constituent digits. E.g., 13 – Operations on 13 such as adding/subtracting/multiplying etc. to 13 can be performed. Breaking down 13 into 1 and 3 and then performing mathematical operations on 1 and 3 is not allowed.)

X : 8.6 :: 12 : Y

- Ans
- 1. X=9, Y=11.6
  - 2. X=15, Y=10.6
  - 3. X=9, Y=10.6
  - 4. X=10, Y=11.6

**Q.8** In the following triad, each group of letters is related to the subsequent one following a certain logic. Select from the given options, the one which follows the same logic.

ONCE - ECON - OCNE  
ACID - DIAC - AICD<sup>2314</sup>

- Ans
- 1. MERY - MREY - YREM
  - 2. WAIT - AIWT - AITW
  - 3. BENS - SNBE - BNES
  - 4. FROG - GOFR - ROFG

**Q.9** If '+' means 'subtraction', '-' means 'multiplication', '×' means 'division' and '÷' means 'addition', then what will come in place of the question mark (?) in the following equation?

$$48 \times 4 \div 9 - 2 + 14 = ?130$$

- Ans
- 1. 20
  - 2. 18
  - 3. 23
  - 4. 16

**Q.10** If 2 is added to each odd digit and 1 is subtracted from each even digit in the number 3217654, what will be the sum of the digits which are second from the left and second from the right?<sup>190</sup>

- Ans
- 1. 12
  - 2. 8
  - 3. 14
  - 4. 10

**Q.11** MAZE is related to OCBG in a certain way based on the English alphabetical order. In the same way, UIHM is related to WKJO. To which of the following options is AONS related, following the same logic?

- Ans
- 1. CQPU
  - 2. CPUQ
  - 3. CPOL
  - 4. CQUP

Q.12 Select the set in which the numbers are related in the same way as are the numbers of the following sets.

(NOTE : Operations should be performed on the whole numbers, without breaking down the numbers into its constituent digits. E.g. 13 - Operations on 13 such as adding /deleting /multiplying etc. to 13 can be performed. Breaking down 13 into 1 and 3 and then performing mathematical operations on 1 and 3 is not allowed)

(9, 67, 94)

(76,7,235)

- Ans
- 1. (3,91,109)
  - 2. (44,51,188)
  - 3. (65,41,216)
  - 4. (11,51,84)

Q.13 What should come in place of '?' in the given series?

26 40 54 68 82 ?

- Ans
- 1. 98
  - 2. 92
  - 3. 94
  - 4. 96

Q.14 What will come in place of the '?' in the following equation, if '+' and '-' are interchanged and 'x' and '÷' are interchanged?

$$28 \times 7 - 18 \div 3 + 15 = ?$$

- Ans
- 1. 41
  - 2. 43
  - 3. 44
  - 4. 42

Q.15 Each of the digits in the number 5381264 is arranged in ascending order from left to right. The position(s) of how many digits will remain unchanged as compared to that in the original number? 199

- Ans
- 1. Three
  - 2. Two
  - 3. One
  - 4. None

Q.16 In the following number-pairs, the second number is obtained by applying certain mathematical operations to the first number. Select the set in which the numbers are related in the same way as are the numbers of the following sets.

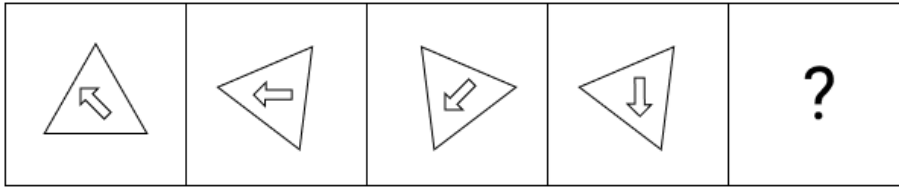
(NOTE: Operations should be performed on the whole numbers, without breaking down the numbers into its constituent digits. E.g., 13 - Operations on 13 such as adding/subtracting/multiplying etc. to 13 can be performed. Breaking down 13 into 1 and 3 and then performing mathematical operations on 1 and 3 is not allowed.)

116, 464

121, 484

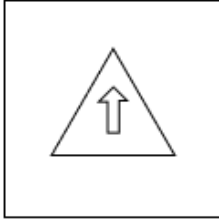
- Ans
- 1. 132, 528
  - 2. 124, 494
  - 3. 151, 804
  - 4. 144, 976

Q.17 Identify the figure given in the options which when put in place of '?' will logically complete the series.

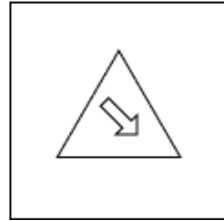


Ans

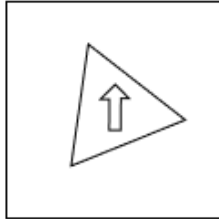
✗ 1.



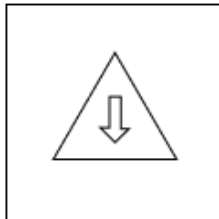
✓ 2.



✗ 3.



✗ 4.



Q.18 What should come in place of '?' in the given series?  
13 18 30 49 75 ?

1241

Ans ✗ 1. 101

✓ 2. 108

✗ 3. 180

✗ 4. 110

Q.19 Based on the English alphabetical order, three of the following four letter cluster pairs are alike in a certain way and thus form a group. Which is the one that does not belong to that group?

(Note: The odd one out is not based on the number of consonants/vowels or their position in the letter cluster)<sup>2382</sup>

Ans ✓ 1. IL-NI

✗ 2. PS-UB

✗ 3. LO-QX

✗ 4. DG-IP

**Q.20** Read the given statements and conclusions carefully. You have to take the given statements to be true even if they seem to be at variance from commonly known facts. You have to decide which conclusion/s logically follow/s from the given statements.

**Statements:** Some pins are shirts. No shirt is a trouser.

**Conclusion (I) :** Some pins are trousers

**Conclusion (II) :** Some shirts are pins

- Ans**
- 1. Only conclusion (I) follows
  - 2. Neither conclusion (I) nor (II) follows
  - 3. Only conclusion (II) follows
  - 4. Both conclusions (I) and (II) follow

Section : **General Awareness**

**Q.1** Which of the following correctly identifies the organisations whose leaders served as Chief Guests at India's Republic Day Parade on 26 January 2026?

- Ans**
- 1. ASEAN and SCO
  - 2. G7 and Commonwealth
  - 3. European Council and European Commission
  - 4. African Union and United Nations

**Q.2** Which historical monument in Delhi, built by Qutub-ud-din Aibak, is famous for its 73-meter-high minaret made of red sandstone?

- Ans**
- 1. Red Fort, with its Mughal walls
  - 2. Jantar Mantar, with its observatory
  - 3. India Gate, with its war memorial
  - 4. Qutub Minar, with its towering height

**Q.3** Under which of the following Acts did the Union Health Ministry mandate strict adherence to the revised Schedule M norms in October 2025?

- Ans**
- 1. Public Health (Control of Adulteration) Act 1961
  - 2. Food Safety and Standards Act 2006
  - 3. Drugs and Cosmetics Act 1940
  - 4. Essential Commodities Act 1955

**Q.4** Who among the following is acknowledged for his significant contributions to the Sepoy mutiny of 1857 and is considered the first martyr in India's struggle for independence?

- Ans**
- 1. Mahatma Gandhi
  - 2. Sukhdev
  - 3. Khudiram Bose
  - 4. Mangal Pandey

**Q.5** In labour economics, unemployment that arises because certain economic activities operate only during specific periods of the year is known as:

- Ans**
- 1. Structural Unemployment
  - 2. Cyclical Unemployment
  - 3. Technological Unemployment
  - 4. Seasonal Unemployment

Q.6 Which among the following is the role of infrastructure in economic development?

- Ans
- 1. Provides support for industries and trade
  - 2. Increases poverty
  - 3. Reduces production
  - 4. Stops industrialization

Q.7 Dadabhai Naoroji was elected as one of the Vice-Presidents of the Bombay Presidency Association in which year?

- Ans
- 1. 1892
  - 2. 1886
  - 3. 1885
  - 4. 1906

Q.8 Which Indian team developed a self-healing polymer in 2025 that can repair cracks at room temperature and is intended for EVs, aerospace, and protective gear?

- Ans
- 1. IIT-Bhilai team
  - 2. IISc-Delhi consortium
  - 3. IIT-Bengaluru team
  - 4. NIT-Surathkal researchers

Q.9 Which of the following banks holds the highest market cap among Indian banks as of May 31, 2024?

- Ans
- 1. State Bank of India (SBI)
  - 2. HDFC Bank
  - 3. Axis Bank
  - 4. ICICI Bank

Q.10 Which reform movement was initiated by Swami Dayananda Saraswati in 1875 with the aim of promoting Vedic principles and opposing idolatry?

- Ans
- 1. Prarthana Samaj
  - 2. Arya Samaj
  - 3. Ramakrishna Mission
  - 4. Brahmo Samaj

Q.11 Which of the following correctly identifies C.P. Radhakrishnan's position after being sworn in September 2025?

- Ans
- 1. 15th Vice President of India
  - 2. 14th Vice President of India
  - 3. 16th Vice President of India
  - 4. 13th Vice President of India

Q.12 Which of the following is included in the calculation of GDP by the expenditure method?

- Ans
- 1. Government final consumption expenditure
  - 2. Transfer payments like pensions
  - 3. Purchase of second-hand goods
  - 4. Intermediate goods

Q.13 Savita Punia, honoured in 2026 with Padam Shri, is associated with which sport?

- Ans
- 1. Badminton
  - 2. Hockey
  - 3. Wrestling
  - 4. Boxing

**Q.14** What aspect of health is a critical concern for rural development in India?

- Ans**
- 1. Cosmetic health treatments
  - 2. Luxury healthcare facilities
  - 3. Addressing sanitation and public health
  - 4. Access to private hospitals

**Q.15** Who among the following established the 'Prarthana Samaj' in Bombay?

- Ans**
- 1. Dayananda Saraswati
  - 2. Jyotirao Govindrao Phule
  - 3. Atmaram Pandurang
  - 4. Raja Ram Mohan Roy

**Q.16** Savita Punia from Haryana, announced as a Padma Shri recipient in 2026, is linked with which of the following sports?

- Ans**
- 1. Wrestling
  - 2. Cricket
  - 3. Hockey
  - 4. Badminton

**Q.17** Which movement marked Mahatma Gandhi's first experiment with Satyagraha in India?

- Ans**
- 1. Champaran Satyagraha
  - 2. Rowlatt Satyagraha
  - 3. Ahmedabad Mill Satyagraha
  - 4. Kheda Satyagraha

**Q.18** Which boxer won the flyweight (51kg) title at the 2026 National Boxing Championships?

- Ans**
- 1. Lovlina Borgohain
  - 2. Mary Kom
  - 3. Nitu Ghanghas
  - 4. Nikhat Zareen

**Q.19** In labour economics, what is the term for a situation in which the number of workers employed exceeds the number actually required, such that the removal of some workers does not reduce total output?

- Ans**
- 1. Disguised Unemployment
  - 2. Seasonal Unemployment
  - 3. Structural Unemployment
  - 4. Voluntary Unemployment

**Q.20** Which of the following correctly identifies the state that declared itself free from extreme poverty on its Formation Day in November 2025?

- Ans**
- 1. Tamil Nadu
  - 2. Maharashtra
  - 3. Kerala
  - 4. Gujarat

**Q.1 The Panchayati Raj in India was inaugurated at Nagaur district in Rajasthan on 2 October 1959 by which of the following national leaders?**

- Ans**
- 1. Saradar Vallabbhai Patel
  - 2. Lal Bahadur Shastri
  - 3. C. Rajagopalachari
  - 4. Jawahar Lal Nehru

**Q.2 Which style of temple architecture blends features of both Nagara and Dravida styles and is found in central India?**

- Ans**
- 1. Dravida, from southern India
  - 2. Nagara, from northern plains
  - 3. Kalinga, from the eastern coast
  - 4. Vesara, from the Deccan region

**Q.3 Which of the following is the principal river of the Indian Desert?**

- Ans**
- 1. Son
  - 2. Varahi
  - 3. Luni
  - 4. Ponnaiyar

**Q.4 What effect does microwave cooking have on water molecules in food?**

- Ans**
- 1. Freezes water molecules
  - 2. Breaks water molecules
  - 3. Causes rapid vibration
  - 4. Melts water molecules

**Q.5 Which Indian language is spoken as the primary majority language in the state of Kerala for everyday communication?**

- Ans**
- 1. Tamil
  - 2. Malayalam
  - 3. Kannada
  - 4. Telugu

**Q.6 What is the process of releasing urine from the urinary bladder called?**

- Ans**
- 1. Micturition
  - 2. Excretion
  - 3. Secretion
  - 4. Filtration

**Q.7 As per Part III of the Indian Constitution, which of the following is NOT a Fundamental Right?**

- Ans**
- 1. Right Against Exploitation
  - 2. Right to Equality
  - 3. Right to Property
  - 4. Right to Freedom

**Q.8 The Tibeto-Burman branch, which is a subdivision of the Sino-Tibetan language family, does NOT include which of the following languages?**

- Ans**
- 1. Kachari
  - 2. Garo
  - 3. Mundari
  - 4. Bodo

**Q.9 Which of the following statements correctly describes the relief of the Deccan Plateau?**

- Ans**
- 1. It is higher in the west and slopes gently eastwards.
  - 2. It is higher in the east and slopes gently westwards.
  - 3. It is higher in the north and slopes towards the South.
  - 4. It is lower in the south and slopes gently northwards.

**Q.10 In a meeting held on 25 July 2024, the Linguistics Experts Committee unanimously revised the criteria for Classical Languages and confirmed the nodal agency for the Linguistic Empowerment Cell (LEC). Which institution has been appointed as the nodal agency for the LEC?**

- Ans**
- 1. Kendriya Hindi Sansthan
  - 2. Sahitya Akademi
  - 3. National Book Trust
  - 4. Indian Council for Cultural Relations

**Q.11 Which Article of the Indian Constitution provides that the Supreme Court shall sit in Delhi or at such other place as the Chief Justice of India may, with the approval of the President, appoint from time to time?**

- Ans**
- 1. Article 130
  - 2. Article 131
  - 3. Article 133
  - 4. Article 132

**Q.12 Which of the following groups represents the major biomolecules present in living organisms?**

- Ans**
- 1. Carbohydrates, Proteins, Lipids, Nucleic acids
  - 2. Carbohydrates, Salts, Enzymes, Minerals
  - 3. Proteins, Vitamins, Salts, Pigments
  - 4. Vitamins, Minerals, Water, Hormones

**Q.13 How many levels are there in the Panchayati Raj structure established under the 73rd Constitutional Amendment Act?**

- Ans**
- 1. Three
  - 2. Four
  - 3. Five
  - 4. Two

**Q.14 Imagine you are designing a model to show how hormones regulate growth in humans. Which organ would you focus on for hormone production?**

- Ans**
- 1. Pancreas
  - 2. Heart
  - 3. Pituitary gland
  - 4. Liver

**Q.15 According to the Census of India (2011), which of the following Indian states has the highest absolute number of Buddhists?**

- Ans**
- 1. Jharkhand
  - 2. Maharashtra
  - 3. Uttar Pradesh
  - 4. Sikkim

**Q.16** Which among the following organs in humans is mainly responsible for filtering nitrogenous wastes from the bloodstream?

- Ans
- 1. Heart
  - 2. Lungs
  - 3. Liver
  - 4. Kidney

**Q.17** The Veer Savarkar International Airport is located at:

- Ans
- 1. Guwahati
  - 2. Port Blair
  - 3. Nagpur
  - 4. Calicut

**Q.18** Which of the following railway zones is headquartered in Gorakhpur?

- Ans
- 1. East Central Railway
  - 2. North Eastern Railway
  - 3. Northeast Frontier Railway
  - 4. Northern Railway

**Q.19** Under Article 22(3)(b) of the Indian Constitution, what is preventive detention?

- Ans
- 1. Detention after committing an offence
  - 2. Detention to prevent future offences
  - 3. Detention after police investigation
  - 4. Detention after court punishment

**Q.20** Which Indian monument was originally built as a victory tower by the ruler Qutb-ud-din Aibak?

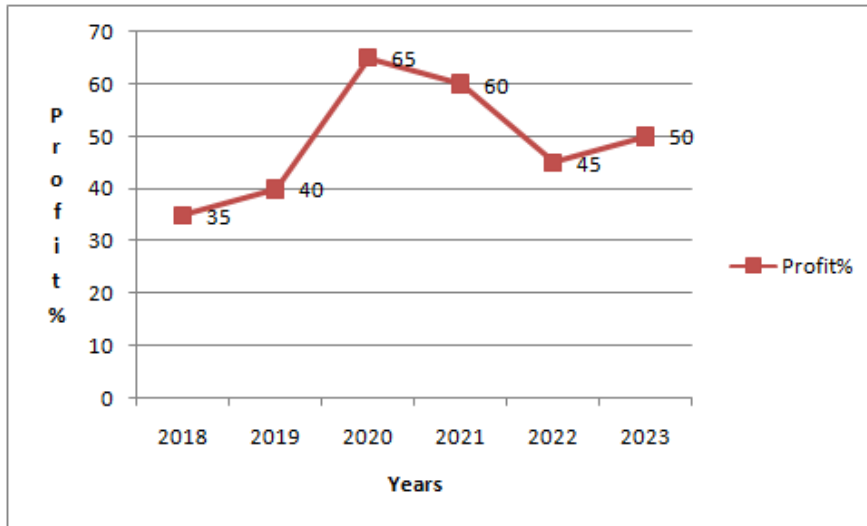
- Ans
- 1. Charminar
  - 2. Qutub Minar
  - 3. Jama Masjid
  - 4. Sun Temple Konark

Section : **Arithmetical and Numerical Ability**

**Q.1** By selling an article for ₹120, a man incurs a loss of 20%. At what price (in ₹) should he sell it to gain 6%?

- Ans
- 1. 179
  - 2. 169
  - 3. 159
  - 4. 149

Q.2 Below is a line graph. Read the graph and answer the following question.



What is the difference between the maximum and the minimum percentage of profit?

- Ans
- 1. 20%
  - 2. 25%
  - 3. 32%
  - 4. 30%

Q.3 The average of five consecutive natural numbers is 50. What is the product of the smallest and the greatest number in this group?

- Ans
- 1. 2396
  - 2. 2496
  - 3. 2300
  - 4. 2400

Q.4 What will be the compound interest on a sum of ₹50,500 after 2 years at the rate of 12% per annum?

- Ans
- 1. ₹12,847.2
  - 2. ₹12,247.2
  - 3. ₹12,347.2
  - 4. ₹12,147.2

Q.5 A milkman has milk costing ₹60 per litre. How many litres of water should he add to 30 litres of milk so that he can sell the mixture at ₹50 per litre without any profit or loss?

- Ans
- 1. 4
  - 2. 6
  - 3. 8
  - 4. 10

Q.6 The total amount calculated at a certain rate on a certain sum of money compounded annually, after 2<sup>nd</sup> year and 3<sup>rd</sup> year is ₹1,210 and ₹1,331, respectively. Find the sum of money.

- Ans
- 1. ₹900
  - 2. ₹1,000
  - 3. ₹1,200
  - 4. ₹950

Q.7 A sum of ₹1,000 is invested at 10% per annum compounded annually for 2 years. What is the amount?

- Ans
- 1. ₹1,120
  - 2. ₹1,210
  - 3. ₹1,222
  - 4. ₹1,100

Q.8 David spends 55% of his income. If he saves ₹36,000, then his income (in ₹) is:106

- Ans
- 1. 79,000
  - 2. 80,000
  - 3. 81,000
  - 4. 19,800

Q.9 What percentage of the numbers from 1 to 60 have 1 or 7 in the unit's digit?

- Ans
- 1. 14%
  - 2. 20%
  - 3. 21%
  - 4. 15%

Q.10 By selling an article for ₹120, a man incurs a loss of 10%. At what price (in ₹) should he sell the article to gain 32%?

- Ans
- 1. 196
  - 2. 186
  - 3. 176
  - 4. 166

Q.11 The average temperature of the first 20 days of a month is 28°C, and the average temperature of the next 10 days is x°C. If the average temperature of all 30 days of the same month is 29°C, then what is the value of x?

- Ans
- 1. 28.5
  - 2. 32
  - 3. 29.8
  - 4. 31

Q.12 A store sells a shirt for ₹800. The price is first increased by 10%, and then a further 15% increase is applied to the new price. What is the final price of the shirt?21

- Ans
- 1. ₹1012
  - 2. ₹960
  - 3. ₹980
  - 4. ₹1080

Q.13 A class of 360 students was surveyed about their favourite sports and the outcome was displayed in a pie chart. If the slice for cricket in the pie chart spans 90°, how many students chose cricket?

- Ans
- 1. 90 students
  - 2. 120 students
  - 3. 60 students
  - 4. 45 students

Q.14 Find the value of  $\sqrt{576} + \sqrt{484}$

- Ans
- 1. 50
  - 2. 23
  - 3. 46
  - 4. 48

Q.15 Neetha bought 25 books at the rate of ₹22 each, 40 pens at the rate of ₹10 each and 15 pencils at the rate of ₹10 each. Calculate the average price of all the stationary goods.

- Ans
- 1. ₹13.75
  - 2. ₹11.75
  - 3. ₹12.75
  - 4. ₹14.75

Q.16 Akshay observes a 10% increase in sales in the first year and a 25% increase in the second year. If the current sales are ₹1,71,600, what were the sales (in ₹) two years ago?

- Ans
- 1. 1,56,000
  - 2. 1,04,800
  - 3. 1,37,280
  - 4. 1,24,800

Q.17 The number  $a$  is four times the number  $b$ . If the least common multiple of  $a$  and  $b$  is 48, then the value of  $b$  is \_\_\_\_.

- Ans
- 1. 18
  - 2. 12
  - 3. 24
  - 4. 6

Q.18 Simplify:  $\sqrt{819 + \sqrt{465 + \sqrt{516 - 155}}}$

- Ans
- 1. 28
  - 2. 29
  - 3. 27
  - 4. 26

Q.19 At what rate (in percentage, rounded off to two places after decimal) of interest per year will a sum of money become 3 times of itself in 6 years on simple interest?

- Ans
- 1. 33.33
  - 2. 35.33
  - 3. 31.33
  - 4. 66.66

Q.20 Simplify  $\left[ 30\frac{5}{7} + \left\{ 4\left(11\frac{11}{21} - \frac{4}{7}\right) - 3\left(8\frac{9}{14} - \frac{16}{21}\right) \right\} \right]$

- Ans
- 1.  $\frac{2183}{42}$
  - 2.  $\frac{1983}{42}$
  - 3.  $\frac{2987}{42}$
  - 4.  $\frac{2137}{42}$

Section : Arithmetical and Numerical Ability1

Q.1 Find the difference between a discount of 30% on ₹1600 and two successive discounts of 25% and 8% on the same amount.

- Ans
- 1. ₹12
  - 2. ₹23
  - 3. ₹14
  - 4. ₹16

Q.2 Three friends start a toy shop and invest in the ratio 1 : 2 : 3. If the total profit is ₹60, what is the share of the second friend?

- Ans
- 1. ₹30
  - 2. ₹20
  - 3. ₹40
  - 4. ₹10

Q.3 Which fraction is the greatest among the given options?

- Ans
- 1.  $\frac{7}{13}$
  - 2.  $\frac{5}{19}$
  - 3.  $\frac{9}{13}$
  - 4.  $\frac{6}{19}$

Q.4 Two taps, M and N, can fill a tank in 12 minutes and 15 minutes, respectively. When an outlet tap O is also opened, then the three taps together can fill the tank in 10 minutes. In how many minutes can O alone empty the full tank?

- Ans
- 1. 20
  - 2. 18
  - 3. 25
  - 4. 22

Q.5 A helicopter flies along the four sides of a square field at speeds of 250 km/h, 450 km/h, 650 km/h, and 850 km/h. Find the average speed of the helicopter. (Round off the answer to the nearest integer.)

- Ans
- 1. 448 km/h
  - 2. 412 km/h
  - 3. 496 km/h
  - 4. 420 km/h

Q.6 If  $(a+b) : (b+c) : (c+a) = 6:7:8$ , find  $a:b:c$ .

- Ans
- 1. 3 : 4 : 5
  - 2. 1 : 2 : 3
  - 3. 7 : 5 : 9
  - 4. 5 : 4 : 3

Q.7 A solid metal cylinder with a diameter of 3 cm and height 16 cm is melted and recast into spheres of radius 1 cm each. How many spheres are formed?

- Ans
- 1. 36
  - 2. 21
  - 3. 27
  - 4. 28

Q.8 If a sphere has a diameter of 14 cm, what is its surface area? (Use  $\pi = 22/7$ )

- Ans  1. 616 cm<sup>2</sup>  
 2. 592 cm<sup>2</sup>  
 3. 196 cm<sup>2</sup>  
 4. 154 cm<sup>2</sup>

Q.9 A man jogs to work at 8 km/h and returns home by bicycle at 16 km/h. If his total time for the round trip is 3 hours, what is the distance ( in km) between his home and work?

- Ans  1. 16  
 2. 18  
 3. 12  
 4. 8

Q.10 A solid sphere is melted into a wire with the same radius as the sphere. What is the ratio of the length of the wire formed to the radius of sphere?

- Ans  1. 2:3  
 2. 3:4  
 3. 4:3  
 4. 3:2

Q.11 Ramesh marks the price of his bicycle 25% above the cost price, but allows 16% discount on cash payment. Find the net profit percentage for buying the bicycle in cash.

- Ans  1. 4%  
 2. 3%  
 3. 6%  
 4. 5%

Q.12 Two villages, Village X and Village Z, are located on the same bank along a straight river that flows uniformly. Village Y is exactly midway between them. A motorboat travels along the river from Village X to Village Y and back to Village X in a total of 10 hours. On another trip, the same boat goes from Village X to Village Z in 4 hours. Find the ratio of the boat's speed in still water to the speed of the river's current.

- Ans  1. 5 : 3  
 2. 2 : 1  
 3. 4 : 1  
 4. 3 : 1

Q.13 An 18 cm solid metallic cube, and a solid metallic cuboid having dimensions 10 cm, 26 cm, 62 cm, are melted and recast into a single cube. What is the total surface area (in cm<sup>2</sup>) of the new cube?

- Ans  1. 5050  
 2. 5525  
 3. 4510  
 4. 4704

Q.14 Pipes C and D can fill a drum in 7.5 minutes and 5 minutes, respectively. A waste pipe E can remove water at the rate of 21 liters per minute. If all three pipes are open, the drum is emptied in 1 hour. Find the capacity of the drum (in liters).

- Ans  1. 70  
 2. 40  
 3. 55  
 4. 60

Q.15 A pipe can fill a tank in 10 hours, while a cistern can empty the same tank in 15 hours. Both the pipe and the cistern are opened together. However, the cistern is closed once the tank is half-filled. In how many total hours will the tank be completely filled?

- Ans
- 1. 1.18
  - 2. 2.22
  - 3. 3.20
  - 4. 4.24

Q.16 Simran bought an article and spent ₹777 on its repairs. She then sold it to Bharti at a profit of 15%. Bharti sold it to Charu at a loss of 20%. Charu finally sold it for ₹4600 at a profit of 25%. How much did Simran pay (in ₹) for the article.

- Ans
- 1. 3223
  - 2. 3333
  - 3. 3322
  - 4. 3232

Q.17 210 m long train X is running with speed of 30 m/s and 230 m long train Y is running with a speed of 50 m/s in opposite direction. Find the time (in seconds) taken for them to cross each other.

- Ans
- 1. 6.5
  - 2. 7.5
  - 3. 4.5
  - 4. 5.5

Q.18 A can complete a work in 15 days, B in 20 days and C in 30 days. They start together. After 4 days, A leaves and 3 days later B also leaves. In how many more days will C alone complete the remaining work?

- Ans
- 1. 2
  - 2. 3.5
  - 3. 4.5
  - 4. 4

Q.19 Three numbers are in the ratio 2 : 3 : 4. When 6 is added to the first number, 9 is added to the second number, and the third number is increased by 25%, the ratio becomes 4 : 6 : 9. What is the largest of the original three numbers?

- Ans
- 1. 104
  - 2. 112
  - 3. 108
  - 4. 116

Q.20 A trader buys 732 kg of cotton for ₹35,868. Out of this, 25% of cotton is spoiled due to rain. At what rate (in ₹ per kg) should he sell the rest to earn 20% profit?

- Ans
- 1. 54.9
  - 2. 62.2
  - 3. 70.5
  - 4. 78.4

Q.1 Select the option that will improve the highlighted part of the given sentence.

He was **utterly** appreciated by the audience.

- Ans
- 1. completely
  - 2. greatly
  - 3. too
  - 4. very

Q.2 Fill in the blank with a suitable article from the given alternatives.

Sathya is \_\_\_ only son of his parents.

- Ans
- 1. a
  - 2. an
  - 3. No article
  - 4. the

Q.3 Choose from the options the most appropriate adverb for the wrong one in the sentence and correct it.

It is seldom important to acquire a new vocabulary.1685

- Ans
- 1. vitally
  - 2. lazily
  - 3. patiently
  - 4. fast

Q.4 Select the most appropriate option to fill in the blank.

They decided to renovate the \_\_\_\_\_ instead of selling it.

- Ans
- 1. old grand mansion
  - 2. grand old mansion
  - 3. grand olden mansion
  - 4. older mansion grand

Q.5 Select the most appropriate option to fill in the blank.

Master Yedu \_\_\_\_\_ improve his grammar.

- Ans
- 1. was
  - 2. is
  - 3. must
  - 4. were

Q.6 Select the most appropriate option to fill in the blank.

By the time my mother arrives, they \_\_\_\_\_ for the airport.1942

- Ans
- 1. will have left
  - 2. will have been leaving
  - 3. would be left
  - 4. would left

Q.7 Select the most appropriate option to fill in the blanks.

We often spot wildlife and enjoy \_\_\_ serene evenings by \_\_\_ campfire made by us.

- Ans
- 1. the. an
  - 2. an, the
  - 3. no article required. the
  - 4. no article required. an

**Q.8 Choose the most grammatically correct sentence.1113**

- Ans**
- 1. I don't want to loose my position that easily.
  - 2. I don't want my lose position that easily.
  - 3. I don't want my position to loose that easily.
  - 4. I don't want to lose my position that easily.

**Q.9 The following sentence has been split into four segments, where the first segment(S) is fixed. Rearrange the remaining jumbled segments(A B C D) to a form a coherent and meaningful paragraph.**

**S:Modern education systems are changing quickly**

**A:to meet the needs of a changing job market**

**B:by using technology in classrooms**

**C:and developing critical thinking skills**

**D:while keeping academic standards strong**

- Ans**
- 1. D - A - B - C
  - 2. A - C - B - D
  - 3. B - C - A - D
  - 4. A - B - C - D

**Q.10 In the following question, choose the appropriate option which completes the sentence.**

I reached my destination \_\_\_\_\_ 15 September last year.1811

- Ans**
- 1. to
  - 2. of
  - 3. on
  - 4. in

**Q.11 Choose from the options the most appropriate adverb to complete the following sentence.**

Most of the old movies portray \_\_\_\_\_ good stories.

- Ans**
- 1. unethically
  - 2. obscenely
  - 3. sickeningly
  - 4. morally

**Q.12 Select the most appropriate option to fill in the blanks.**

\_\_\_\_\_ Ramayan is one of \_\_\_\_\_ great epics of India.2083

- Ans**
- 1. No article required, a
  - 2. An, a
  - 3. The, the
  - 4. A, the

**Q.13** Parts of a sentence are given below. While the first part is in the correct place, the remaining parts (labelled P, Q, R and S) are jumbled up. Arrange the parts in the correct order to form a meaningful and coherent sentence.

- 1. Most of us would put
- P. above any other
- Q. our own retirement
- R. our children's education
- S. priority in life including

- Ans**
- 1. QSPR
  - 2. SPQR
  - 3. PSQR
  - 4. RPSQ

**Q.14** Select the most appropriate preposition to fill in the blank.

Swetha finished her work well \_\_\_\_\_ of the deadline.

- Ans**
- 1. in front
  - 2. regardless
  - 3. because
  - 4. ahead

**Q.15** Choose the correct option to complete the sentence.

My sister is reading \_\_\_ book you gave her.

- Ans**
- 1. the
  - 2. an
  - 3. No article required
  - 4. a

#### Comprehension:

Read the following passage carefully and answer the questions that are given below:-

Healthy food and junk food are different in their effects on our body and mind. Healthy food includes fruits, vegetables, whole grains, lean proteins, and nuts. These foods are rich in vitamins, minerals, and fiber that help our body grow and stay strong. In contrast, junk food is processed and contains large amounts of sugar, salt, and unhealthy fats. While healthy food provides essential nutrients, junk food offers empty calories with little nutritional value.

Another difference is their impact on health. Healthy food helps in weight management because it keeps us full longer and provides steady energy. On the other hand, junk food often leads to weight gain since it is high in calories and encourages overeating.

In conclusion, both types of food can satisfy hunger, but their long-term effects differ. Choosing healthy food supports better growth and well-being while eating junk food regularly can harm our body over time.

#### SubQuestion No : 16

**Q.16** Select an appropriate title for this passage from the given options.

#### Comprehension:

Read the following passage carefully and answer the questions that are given below:-

Healthy food and junk food are different in their effects on our body and mind. Healthy food includes fruits, vegetables, whole grains, lean proteins, and nuts. These foods are rich in vitamins, minerals, and fiber that help our body grow and stay strong. In contrast, junk food is processed and contains large amounts of sugar, salt, and unhealthy fats. While healthy food provides essential nutrients, junk food offers empty calories with little nutritional value.

Another difference is their impact on health. Healthy food helps in weight management because it keeps us full longer and provides steady energy. On the other hand, junk food often leads to weight gain since it is high in calories and encourages overeating.

In conclusion, both types of food can satisfy hunger, but their long-term effects differ. Choosing healthy food supports better growth and well-being while eating junk food regularly can harm our body over time.

#### SubQuestion No : 17

**Q.17** What is the main idea of the passage?

**Comprehension:**

Read the following passage carefully and answer the questions that are given below:-

Healthy food and junk food are different in their effects on our body and mind. Healthy food includes fruits, vegetables, whole grains, lean proteins, and nuts. These foods are rich in vitamins, minerals, and fiber that help our body grow and stay strong. In contrast, junk food is processed and contains large amounts of sugar, salt, and unhealthy fats. While healthy food provides essential nutrients, junk food offers empty calories with little nutritional value.

Another difference is their impact on health. Healthy food helps in weight management because it keeps us full longer and provides steady energy. On the other hand, junk food often leads to weight gain since it is high in calories and encourages overeating.

In conclusion, both types of food can satisfy hunger, but their long-term effects differ. Choosing healthy food supports better growth and well-being while eating junk food regularly can harm our body over time.

**SubQuestion No : 18**

**Q.18 Identify the structure of the passage.**

**Comprehension:**

Read the following passage carefully and answer the questions that are given below:-

Healthy food and junk food are different in their effects on our body and mind. Healthy food includes fruits, vegetables, whole grains, lean proteins, and nuts. These foods are rich in vitamins, minerals, and fiber that help our body grow and stay strong. In contrast, junk food is processed and contains large amounts of sugar, salt, and unhealthy fats. While healthy food provides essential nutrients, junk food offers empty calories with little nutritional value.

Another difference is their impact on health. Healthy food helps in weight management because it keeps us full longer and provides steady energy. On the other hand, junk food often leads to weight gain since it is high in calories and encourages overeating.

In conclusion, both types of food can satisfy hunger, but their long-term effects differ. Choosing healthy food supports better growth and well-being while eating junk food regularly can harm our body over time.

**SubQuestion No : 19**

**Q.19 Identify the tone of the passage.**

**Comprehension:**

Read the following passage carefully and answer the questions that are given below:-

Healthy food and junk food are different in their effects on our body and mind. Healthy food includes fruits, vegetables, whole grains, lean proteins, and nuts. These foods are rich in vitamins, minerals, and fiber that help our body grow and stay strong. In contrast, junk food is processed and contains large amounts of sugar, salt, and unhealthy fats. While healthy food provides essential nutrients, junk food offers empty calories with little nutritional value.

Another difference is their impact on health. Healthy food helps in weight management because it keeps us full longer and provides steady energy. On the other hand, junk food often leads to weight gain since it is high in calories and encourages overeating.

In conclusion, both types of food can satisfy hunger, but their long-term effects differ. Choosing healthy food supports better growth and well-being while eating junk food regularly can harm our body over time.

**SubQuestion No : 20**

**Q.20 Select the correct antonym of the given word from the passage.  
Dispensable**

**Section : Test of English Language and Comprehension1**

**Q.1 Choose the suitable proverb for the given expression.  
Certainty of having something in hand is better than mere probability of having even more things -**

- Ans**
- ✓ 1. A bird in hand is worth two in the bush
  - ✗ 2. A diamond with a flaw is better than a common stone that is perfect
  - ✗ 3. A cat has nine lives
  - ✗ 4. Absence makes heart grow fonder

Q.2 Find out the correct meaning of the given proverb.

Charity begins at home.

- Ans
- 1. Power and ambition should rule over one's own family and surroundings.
  - 2. Respect and loyalty should begin with one's own leaders and followers.
  - 3. Wealth and success should start with one's own fame and achievements.
  - 4. Kindness and generosity should start with one's own family and surroundings.

Q.3 Select the most appropriate ANTONYM of the given word.

Melancholy

- Ans
- 1. Gloomy
  - 2. Stingy
  - 3. Antagonistic
  - 4. Cheerful

Q.4 Read the following proverb carefully and choose the option that best describes the meaning of the proverb.

A stitch in time saves nine.

- Ans
- 1. One has to wait longer to think clearly before taking any decision.
  - 2. One must take slow steps to reach perfection.
  - 3. One should fix small problems early to avoid bigger ones.
  - 4. One should do more work to achieve success.

Q.5 A sentence divided into multiple segments is given below. The first segment (1) is fixed, while the rest have been jumbled up. Rearrange the jumbled segments to form a coherent statement.

(1) Artificial intelligence

(P) however, raises important ethical concerns regarding privacy and employment,

(Q) has revolutionized various industries through automation and data analysis,

(R) consequently, transforming the way businesses operate,

(S) therefore requires strict regulatory frameworks.

- Ans
- 1. RQPS
  - 2. QPRS
  - 3. QRPS
  - 4. PSQR

Q.6 Replace the highlighted text with the correct one-word substitute given in the options.

We cannot find (a/an) person who does not make mistakes in the world.

- Ans
- 1. infallible
  - 2. iconoclast
  - 3. plagiarist
  - 4. reticent

Q.7 From the given options, choose the one that has no misspelled words.

- Ans
- 1. The glluttonous feast contravened their usual dietary restrictions, causing discomfort afterward.
  - 2. The glutonous feast contravened their usual dietary restrictions, causing discomfort afterward.
  - 3. The gluttonnous feast contravened their usual dietary restrictions, causing discomfort afterward.
  - 4. The gluttonous feast contravened their usual dietary restrictions, causing discomfort afterward.

Q.8 Select the wrongly spelt word from the words given below:

- Ans
- 1. instantaneously
  - 2. endurance
  - 3. vehemently
  - 4. viguor

Q.9 Choose the one-word substitution for 'a person who actively seeks to cause trouble or incite rebellion.'

- Ans
- 1. Agitator
  - 2. Benefactor
  - 3. Spectator
  - 4. Mediator

Q.10 Select the most appropriate synonym of the given word.

Surmount

- Ans
- 1. Conquer
  - 2. Repeat
  - 3. Escape
  - 4. Leave

Q.11 Select the option from the given alternatives that can be used as a one-word substitute for the highlighted phrase.

After moving to the city, they found a new place to live.

- Ans
- 1. podium
  - 2. abode
  - 3. cemetery
  - 4. apiary

Q.12 Select the most appropriate ANTONYM of the given word.

Tedious<sup>53</sup>

- Ans
- 1. Lethargic
  - 2. Distinct
  - 3. Breakable
  - 4. Engaging

Q.13 A word segment has been highlighted in the given sentence. Select the option that shows the most appropriate one-word substitute for the highlighted segment.

Despite the public outcry, the political candidate's history of hate speeches received **implied pardon for the offence** from his party members.

- Ans
- 1. scrutiny
  - 2. admonishment
  - 3. condemnation
  - 4. condonation

Q.14 Read the following proverb carefully and choose the option that best describes the meaning of the proverb.  
Every cloud has a silver lining.

- Ans
- 1. There's always something good in every bad situation.
  - 2. Silver is lined along the edges of the cloud.
  - 3. Clouds have beautiful edges.
  - 4. The lining of a cloud is formed when light from the sun is reflected.

**Q.15 Select the word similar in meaning to the given word.**

**Pusillanimous**

- Ans**  1. Cowardly  
 2. Anonymus  
 3. Illegitimate  
 4. Courageous

**Comprehension:**

Read the following passage carefully and answer the questions based on it.

Nutrients are important substances in food that help our body grow and stay healthy. Our body needs different types of nutrients every day. Carbohydrates give us energy to work, study, and play. Proteins help build muscles and repair body tissues. Fats give energy and keep our body warm, but we should eat them in small amounts. Vitamins and minerals protect us from diseases and keep our skin, bones, and eyes healthy. For example, calcium makes our bones strong, and vitamin C helps fight infections. Water is also a nutrient because it helps in digestion and keeps our body cool. Eating a balanced diet means taking all these nutrients in the right amounts. Fruits, vegetables, grains, milk, eggs, and pulses are good sources of nutrients. If we do not get enough nutrients, we may feel weak and tired. By eating healthy food daily, we can stay active, strong, and fully energetic.

**SubQuestion No : 16**

**Q.16 How is the passage mainly organized?**

**Comprehension:**

Read the following passage carefully and answer the questions based on it.

Nutrients are important substances in food that help our body grow and stay healthy. Our body needs different types of nutrients every day. Carbohydrates give us energy to work, study, and play. Proteins help build muscles and repair body tissues. Fats give energy and keep our body warm, but we should eat them in small amounts. Vitamins and minerals protect us from diseases and keep our skin, bones, and eyes healthy. For example, calcium makes our bones strong, and vitamin C helps fight infections. Water is also a nutrient because it helps in digestion and keeps our body cool. Eating a balanced diet means taking all these nutrients in the right amounts. Fruits, vegetables, grains, milk, eggs, and pulses are good sources of nutrients. If we do not get enough nutrients, we may feel weak and tired. By eating healthy food daily, we can stay active, strong, and fully energetic.

**SubQuestion No : 17**

**Q.17 What is the main idea of the passage?**

**Comprehension:**

Read the following passage carefully and answer the questions based on it.

Nutrients are important substances in food that help our body grow and stay healthy. Our body needs different types of nutrients every day. Carbohydrates give us energy to work, study, and play. Proteins help build muscles and repair body tissues. Fats give energy and keep our body warm, but we should eat them in small amounts. Vitamins and minerals protect us from diseases and keep our skin, bones, and eyes healthy. For example, calcium makes our bones strong, and vitamin C helps fight infections. Water is also a nutrient because it helps in digestion and keeps our body cool. Eating a balanced diet means taking all these nutrients in the right amounts. Fruits, vegetables, grains, milk, eggs, and pulses are good sources of nutrients. If we do not get enough nutrients, we may feel weak and tired. By eating healthy food daily, we can stay active, strong, and fully energetic.

**SubQuestion No : 18**

**Q.18 What is the tone of the passage?**

**Comprehension:**

Read the following passage carefully and answer the questions based on it.

Nutrients are important substances in food that help our body grow and stay healthy. Our body needs different types of nutrients every day. Carbohydrates give us energy to work, study, and play. Proteins help build muscles and repair body tissues. Fats give energy and keep our body warm, but we should eat them in small amounts. Vitamins and minerals protect us from diseases and keep our skin, bones, and eyes healthy. For example, calcium makes our bones strong, and vitamin C helps fight infections. Water is also a nutrient because it helps in digestion and keeps our body cool. Eating a balanced diet means taking all these nutrients in the right amounts. Fruits, vegetables, grains, milk, eggs, and pulses are good sources of nutrients. If we do not get enough nutrients, we may feel weak and tired. By eating healthy food daily, we can stay active, strong, and fully energetic.

**SubQuestion No : 19**

**Q.19 Which of the following statements is mentioned in the passage?**

**Comprehension:**

Read the following passage carefully and answer the questions based on it.

Nutrients are important substances in food that help our body grow and stay healthy. Our body needs different types of nutrients every day. Carbohydrates give us energy to work, study, and play. Proteins help build muscles and repair body tissues. Fats give energy and keep our body warm, but we should eat them in small amounts. Vitamins and minerals protect us from diseases and keep our skin, bones, and eyes healthy. For example, calcium makes our bones strong, and vitamin C helps fight infections. Water is also a nutrient because it helps in digestion and keeps our body cool. Eating a balanced diet means taking all these nutrients in the right amounts. Fruits, vegetables, grains, milk, eggs, and pulses are good sources of nutrients. If we do not get enough nutrients, we may feel weak and tired. By eating healthy food daily, we can stay active, strong, and fully energetic.

**SubQuestion No : 20****Q.20 What can be inferred from the passage?****Section : Test of Hindi Language and Comprehension****Q.1 निम्नलिखित वाक्यों में से पूर्णरूप से शुद्ध वाक्य का चयन कीजिए।**

- Ans**
- 1. मेढक टरति हैं।
  - 2. मेढक चिचियाते हैं।
  - 3. मेढक फुफकारते हैं।
  - 4. मेढक गुनगुनाते हैं।

**Q.2 नीचे दिए गए वाक्य के किस भाग में अशुद्धि है? मंदिर में सुबह से ही भीड़ लगा हुआ है।**

- Ans**
- 1. मंदिर में
  - 2. लगा हुआ
  - 3. सुबह से भीड़
  - 4. है।

**Q.3 निम्नलिखित वाक्यों में से अतिरिक्त वाक्य का चयन कीजिए।**

- Ans**
- 1. आड़ी-तिरछी रेखाओं के जरिए चित्रकार दृश्य वस्तु का उद्घाटन कर देता है।
  - 2. मीरा का व्यक्तित्व इतना लोकप्रिय, महिमाशाली और इतना प्रभुविष्णु हो गया है।
  - 3. रेखाचित्र में शब्दों के माध्यम से दृश्य या रूप को उभारा जाता है।
  - 4. 'रेखाचित्र' नाम की साहित्य विधा का सम्बन्ध चित्रकला से है।

**Q.4 मुहावरे के सही अर्थ का चयन करें- 'पौ बारह होना'**

- Ans**
- 1. पौने बारह बजना
  - 2. बुरा भला कहना
  - 3. भेद खोल देना
  - 4. सफल होना

**Q.5 निम्नलिखित विकल्पों में सही वाक्य क्रम अंकित कीजिए।**

- Ans**
- 1. साहित्य केवल संवाहक भी है मनोरंजन नहीं, अपितु सामाजिक चेतना का।
  - 2. अपितु साहित्य केवल मनोरंजन नहीं, सामाजिक चेतना का संवाहक भी है।
  - 3. साहित्य केवल मनोरंजन नहीं, अपितु सामाजिक चेतना का संवाहक भी है।
  - 4. मनोरंजन साहित्य केवल नहीं, अपितु सामाजिक चेतना का संवाहक भी है।

**Q.6 'थोथा चना बाजे घना' लोकोक्ति का सही अर्थ क्या होगा?**

- Ans**
- 1. अधिक प्रभावी होना
  - 2. असमर्थ व्यक्ति बड़-चढ़कर बातें करता है
  - 3. परीक्षा में खरा उतरना
  - 4. बहुत कष्ट में दिन बीतना

Q.7 प्रेरणार्थक क्रिया के प्रयोग से वाक्य पूर्ण करें।  
मेरी माँ ने पिताजी से सामान ..... !

- Ans
- 1. लिया
  - 2. मँगवाया
  - 3. खरीदा
  - 4. माँगा

Q.8 उपयुक्त कारक चिह्न का चयनकर वाक्य की पूर्ति कीजिए।  
नीरजा ने गुलशन .....गुलाब खरीदा।

- Ans
- 1. हे
  - 2. को
  - 3. के लिए
  - 4. ऊपर

Q.9 बच्ची ने खिलौना उठाया। वाक्य में \_\_\_\_\_ क्रिया है। दिए गए विकल्प में से क्रिया के उचित भेद को चुन कर वाक्य पूर्ण करें -

- Ans
- 1. सकर्मक क्रिया
  - 2. पूर्वकालिक क्रिया
  - 3. अकर्मक क्रिया
  - 4. प्रेरणार्थक क्रिया

Q.10 निम्नलिखित वाक्य खंड को क्रम में लिखें -  
कठिनाइयों को अवसरों  
में बदलकर सफलता  
धैर्यवान व्यक्ति  
प्राप्त करता है

- Ans
- 1. 4123
  - 2. 2314
  - 3. 3412
  - 4. 3124

Q.11 निम्नलिखित वाक्यों में से अतिरिक्त वाक्य का चयन कीजिए।

- Ans
- 1. रैदास का निधन 1506 ई. में हुआ।
  - 2. रैदास रामानंद के शिष्य और कबीर के समकालीन संत-भक्त थे।
  - 3. जेनेवा में राष्ट्रसंघ के दैनंदिन कार्यों के लिए एक सचिवालय का प्रबंध किया गया।
  - 4. रैदासपंथियों के अनुसार उनका जन्म 1376 ई. में हुआ था।

Q.12 दिए गए वाक्य में संख्यावाचक विशेषण शब्द का चयन करके रिक्त स्थान की पूर्ति करें -  
स्वतंत्रता संग्राम के इतिहास में----- क्रांतिकारियों के योगदान का उल्लेख है।

- Ans
- 1. सभ्य
  - 2. हजारों
  - 3. श्रेष्ठ
  - 4. काले

Q.13 सही विकल्प चुनकर रिक्त स्थान को इस प्रकार भरें कि वाक्य सटीक ढंग से पूर्ण हो जाए-  
वह मार्ग पर \_\_\_ जा रहा था।

- Ans
- 1. एक-एक
  - 2. कुछ-कुछ
  - 3. तिल-तिल
  - 4. धीरे-धीरे

Q.14 निम्नलिखित वाक्यांश के लिए सार्थक शब्द चुनिए जो प्रमाण से सिद्ध हो सके -

- Ans
- 1. अप्रमेय
  - 2. अप्रतिहत
  - 3. अपवाद
  - 4. प्रमेय

Q.15 वह व्यक्ति बिल्कुल अनुशासनहीन है कि जो किसी भी नियम को नहीं मानता। रेखांकित वाक्यांश के लिए सार्थक शब्द क्या है?

- Ans
- 1. उच्छृंखल
  - 2. परीक्षक
  - 3. अनिष्ट
  - 4. अपराजेय

#### Comprehension:

निम्नलिखित गद्यांश को ध्यानपूर्वक पढ़कर पूछे गए प्रश्नों के लिए सही विकल्प चुनकर लिखें -

मनुष्य जन्म से ही अहंकार का इतना विशाल बोझ लेकर आता है कि उसकी दृष्टि सदैव दूसरों की बुराइयों पर ही टिकती है। आत्मनिरीक्षण को भुलाकर साधारण मानव केवल परछिद्रान्वेषण में ही अपना जीवन बिताना चाहता है। इसके मूल में उसकी ईर्ष्या की दाहक दुष्प्रवृत्ति कार्यशील रहती है। दूसरे की सहज उन्नति को वह अपनी ईर्ष्या के वशीभूत होकर पचा नहीं पाता और उसके गुणों को अनदेखा करके केवल दोषों और दुर्गुणों को ही प्रचारित करने लगता है। इस प्रक्रिया में वह इस तथ्य को भी विस्मृत कर बैठता है कि ईर्ष्या का दाहक स्वरूप स्वयं उसके समय, स्वास्थ्य और सद्वृत्तियों के लिए कितना विनाशकारी सिद्ध हो रहा है। वास्तव में, मनुष्य अपनी न्यूनताओं, अपने दुर्गुणों की ओर दृष्टि उठाकर देखना भी नहीं चाहता, क्योंकि स्वयं को पहचानने की यह प्रक्रिया उसके लिए बहुत कष्टकारी है। मनुष्य अपने मन को शांत रखकर ही अहंकार को दूर कर सकता है। कहावत है कि मन चंगा तो कठौती में गंगा। मन स्वस्थ है तो शरीर स्वस्थ है।

#### SubQuestion No : 16

Q.16 अहंकार के कारण मनुष्य पर क्या प्रभाव पड़ता है?

#### Comprehension:

निम्नलिखित गद्यांश को ध्यानपूर्वक पढ़कर पूछे गए प्रश्नों के लिए सही विकल्प चुनकर लिखें -

मनुष्य जन्म से ही अहंकार का इतना विशाल बोझ लेकर आता है कि उसकी दृष्टि सदैव दूसरों की बुराइयों पर ही टिकती है। आत्मनिरीक्षण को भुलाकर साधारण मानव केवल परछिद्रान्वेषण में ही अपना जीवन बिताना चाहता है। इसके मूल में उसकी ईर्ष्या की दाहक दुष्प्रवृत्ति कार्यशील रहती है। दूसरे की सहज उन्नति को वह अपनी ईर्ष्या के वशीभूत होकर पचा नहीं पाता और उसके गुणों को अनदेखा करके केवल दोषों और दुर्गुणों को ही प्रचारित करने लगता है। इस प्रक्रिया में वह इस तथ्य को भी विस्मृत कर बैठता है कि ईर्ष्या का दाहक स्वरूप स्वयं उसके समय, स्वास्थ्य और सद्वृत्तियों के लिए कितना विनाशकारी सिद्ध हो रहा है। वास्तव में, मनुष्य अपनी न्यूनताओं, अपने दुर्गुणों की ओर दृष्टि उठाकर देखना भी नहीं चाहता, क्योंकि स्वयं को पहचानने की यह प्रक्रिया उसके लिए बहुत कष्टकारी है। मनुष्य अपने मन को शांत रखकर ही अहंकार को दूर कर सकता है। कहावत है कि मन चंगा तो कठौती में गंगा। मन स्वस्थ है तो शरीर स्वस्थ है।

#### SubQuestion No : 17

Q.17 दूसरों की उन्नति को मनुष्य क्यों नहीं देखना चाहता?

#### Comprehension:

निम्नलिखित गद्यांश को ध्यानपूर्वक पढ़कर पूछे गए प्रश्नों के लिए सही विकल्प चुनकर लिखें -

मनुष्य जन्म से ही अहंकार का इतना विशाल बोझ लेकर आता है कि उसकी दृष्टि सदैव दूसरों की बुराइयों पर ही टिकती है। आत्मनिरीक्षण को भुलाकर साधारण मानव केवल परछिद्रान्वेषण में ही अपना जीवन बिताना चाहता है। इसके मूल में उसकी ईर्ष्या की दाहक दुष्प्रवृत्ति कार्यशील रहती है। दूसरे की सहज उन्नति को वह अपनी ईर्ष्या के वशीभूत होकर पचा नहीं पाता और उसके गुणों को अनदेखा करके केवल दोषों और दुर्गुणों को ही प्रचारित करने लगता है। इस प्रक्रिया में वह इस तथ्य को भी विस्मृत कर बैठता है कि ईर्ष्या का दाहक स्वरूप स्वयं उसके समय, स्वास्थ्य और सद्वृत्तियों के लिए कितना विनाशकारी सिद्ध हो रहा है। वास्तव में, मनुष्य अपनी न्यूनताओं, अपने दुर्गुणों की ओर दृष्टि उठाकर देखना भी नहीं चाहता, क्योंकि स्वयं को पहचानने की यह प्रक्रिया उसके लिए बहुत कष्टकारी है। मनुष्य अपने मन को शांत रखकर ही अहंकार को दूर कर सकता है। कहावत है कि मन चंगा तो कठौती में गंगा। मन स्वस्थ है तो शरीर स्वस्थ है।

#### SubQuestion No : 18

Q.18 स्वास्थ्य और सदाचार नष्ट हो जाते हैं-

### Comprehension:

निम्नलिखित गद्यांश को ध्यानपूर्वक पढ़कर पूछे गए प्रश्नों के लिए सही विकल्प चुनकर लिखें -

मनुष्य जन्म से ही अहंकार का इतना विशाल बोझ लेकर आता है कि उसकी दृष्टि सदैव दूसरों की बुराइयों पर ही टिकती है। आत्मनिरीक्षण को भुलाकर साधारण मानव केवल परछिद्रान्वेषण में ही अपना जीवन बिताना चाहता है। इसके मूल में उसकी ईर्ष्या की दाहक दुष्प्रवृत्ति कार्यशील रहती है। दूसरे की सहज उन्नति को वह अपनी ईर्ष्या के वशीभूत होकर पचा नहीं पाता और उसके गुणों को अनदेखा करके केवल दोषों और दुर्गुणों को ही प्रचारित करने लगता है। इस प्रक्रिया में वह इस तथ्य को भी विस्मृत कर बैठता है कि ईर्ष्या का दाहक स्वरूप स्वयं उसके समय, स्वास्थ्य और सद्गुणों के लिए कितना विनाशकारी सिद्ध हो रहा है। वास्तव में, मनुष्य अपनी न्यूनताओं, अपने दुर्गुणों की ओर दृष्टि उठाकर देखना भी नहीं चाहता, क्योंकि स्वयं को पहचानने की यह प्रक्रिया उसके लिए बहुत कष्टकारी है। मनुष्य अपने मन को शांत रखकर ही अहंकार को दूर कर सकता है। कहावत है कि मन चंगा तो कठौती में गंगा। मन स्वस्थ है तो शरीर स्वस्थ है।

#### SubQuestion No : 19

Q.19 अहंकार दूर करने के लिए ज़रूरी है-

### Comprehension:

निम्नलिखित गद्यांश को ध्यानपूर्वक पढ़कर पूछे गए प्रश्नों के लिए सही विकल्प चुनकर लिखें -

मनुष्य जन्म से ही अहंकार का इतना विशाल बोझ लेकर आता है कि उसकी दृष्टि सदैव दूसरों की बुराइयों पर ही टिकती है। आत्मनिरीक्षण को भुलाकर साधारण मानव केवल परछिद्रान्वेषण में ही अपना जीवन बिताना चाहता है। इसके मूल में उसकी ईर्ष्या की दाहक दुष्प्रवृत्ति कार्यशील रहती है। दूसरे की सहज उन्नति को वह अपनी ईर्ष्या के वशीभूत होकर पचा नहीं पाता और उसके गुणों को अनदेखा करके केवल दोषों और दुर्गुणों को ही प्रचारित करने लगता है। इस प्रक्रिया में वह इस तथ्य को भी विस्मृत कर बैठता है कि ईर्ष्या का दाहक स्वरूप स्वयं उसके समय, स्वास्थ्य और सद्गुणों के लिए कितना विनाशकारी सिद्ध हो रहा है। वास्तव में, मनुष्य अपनी न्यूनताओं, अपने दुर्गुणों की ओर दृष्टि उठाकर देखना भी नहीं चाहता, क्योंकि स्वयं को पहचानने की यह प्रक्रिया उसके लिए बहुत कष्टकारी है। मनुष्य अपने मन को शांत रखकर ही अहंकार को दूर कर सकता है। कहावत है कि मन चंगा तो कठौती में गंगा। मन स्वस्थ है तो शरीर स्वस्थ है।

#### SubQuestion No : 20

Q.20 अहंकार का विलोम है -

### Section : Test of Hindi Language and Comprehension 1

Q.1 विलोमार्थी शब्दों का एक संगत युग्म नहीं है-

- Ans
- 1. दिवा-रात्रि
  - 2. परितोष-दंड
  - 3. तटस्थ-निष्पक्ष
  - 4. विक्रय-क्रय

Q.2 नीचे दिए गए विकल्पों में से कौन-सा शब्द तत्सम नहीं है?

- Ans
- 1. दुबला
  - 2. त्वरित
  - 3. घृणा
  - 4. चतुर्थ

Q.3 'बाल की खाल निकालना' मुहावरे का सही अर्थ क्या होगा?

- Ans
- 1. अति क्रुद्ध होना
  - 2. दृढ़ संकल्प करना
  - 3. विपत्ति में पड़ना
  - 4. बड़ी छानबीन करना

Q.4 नीचे दिए गए वाक्यों में से वर्तनी की दृष्टि से शुद्ध वाक्य का चयन कीजिए।

- Ans
- 1. झोंपड़ी मे एक साँप घुस आया।
  - 2. झोंपड़ी में एक साँप घुस आया।
  - 3. झोंपड़ी में एक साप घुस आया।
  - 4. झोंपड़ी में एक साँप घूस आया।

Q.5 नीचे दिए गए वाक्यों में से वर्तनी की दृष्टि से शुद्ध वाक्य का चयन कीजिए।

- Ans
- 1. उसकी कोइ औलाद नहीं है।
  - 2. उसकी कोई औलाद नहीं है।
  - 3. उसकी कोई ओलाद नहीं है।
  - 4. उसकी कोई औलाद नही है।

Q.6 नीचे दिए गए वाक्य के किस भाग में वर्तनी संबंधी अशुद्धि है? वे बौद्धधर्म के अनुयाई थे।

- Ans
- 1. धर्म के
  - 2. थे।
  - 3. वे बौद्ध
  - 4. अनुयाई

Q.7 'बछिया का ताऊ' मुहावरे का सही अर्थ क्या होगा?

- Ans
- 1. निरामूर्ख होना
  - 2. निर्लज्ज होना
  - 3. बेईमान होना
  - 4. कृपण होना

Q.8 अनेकार्थी शब्द 'कर' का अर्थ नहीं है-

- Ans
- 1. किरण
  - 2. हाथी
  - 3. हाथ
  - 4. टैक्स

Q.9 नीचे दिए गए वाक्य के किस भाग में वर्तनी संबंधी अशुद्धि है? लड़ायी में कई लोग मारे गए।

- Ans
- 1. में कई
  - 2. लड़ायी
  - 3. लोग मारे
  - 4. गए।

Q.10 'विक्षुब्ध' का पर्यायवाची शब्द है-

- Ans
- 1. पुरीष
  - 2. विह्वल
  - 3. विहंग
  - 4. आकुल

Q.11 निम्न में से 'नींद' का तत्सम शब्द कौन-सा है ?

- Ans
- 1. निद्रा
  - 2. द्रोण
  - 3. पञ्च
  - 4. दूर्वा

Q.12 निम्न में से 'आमदनी के सिर सेहरा है' लोकोक्ति का सही अर्थ कौन-सा है ?

- Ans
- 1. दिखावटी सद्भाव
  - 2. दोनों काम एक साथ नहीं सध सकते
  - 3. जानबूझकर आफत बुलाना
  - 4. धन से ही प्रतिष्ठा होती है

Q.13 निम्नलिखित में से एक 'प्रारब्ध' का पर्याय नहीं है-

- Ans
- 1. भावी
  - 2. भाग्य
  - 3. विध्वंस
  - 4. देव

Q.14 'पर' का अनेकार्थी शब्द पहचानें-

- Ans
- 1. मोक्ष
  - 2. राजा
  - 3. श्वेत
  - 4. पंख

Q.15 'निष्कपटता' का सही अर्थ दिए गए विकल्पों में से चुनिए-

- Ans
- 1. कपट
  - 2. सदाशयता
  - 3. ईमानदारी
  - 4. शेखी

### Comprehension:

निम्नलिखित गद्यांश को ध्यानपूर्वक पढ़कर पूछे गए प्रश्नों के लिए सही विकल्प चुनकर लिखें -

मानव-जाति को अन्य जीवधारियों से अलग करके महत्व प्रदान करने वाला जो एकमात्र गुरु है, वह है उसकी विचार-शक्ति। मनुष्य के पास बुद्धि है, विवेक है, तर्कशक्ति है अर्थात् उसके पास विचारों की अमूल्य पूँजी है। अपने सुविचारों की नींव पर ही आज मानव ने अपनी श्रेष्ठता की स्थापना की है और मानव-सभ्यता का विशाल महल खड़ा किया है। यही कारण है कि विचारशील मनुष्य के पास जब सुविचारों का अभाव रहता है, तो उसका वह शून्य मानस कुविचारों से ग्रस्त होकर एक प्रकार से शैतान के वशीभूत हो जाता है। मानवीय बुद्धि जब सद्भावों से प्रेरित होकर कल्याणकारी योजनाओं में प्रवृत्त रहती है तो उसकी सदाशयता का कोई अंत नहीं होता, किंतु जब वहाँ कुविचार अपना घर बना लेते हैं तो उसकी पाशविक प्रवृत्तियों उस पर हावी हो उठती हैं। हिंसा और पापाचार का दानवी साम्राज्य इस बात का द्योतक है कि मानव की विचार-शक्ति, जो उसे पशु बनने से रोकती है, उसका साथ देती है। जीवन की कठिन-से-कठिन परिस्थितियों को भी हल कर सकने का विश्वास ही हमारी सकारात्मक सोच है। मुश्किल से मुश्किल दौर में भी हिम्मत बनाए रखना हमारी सकारात्मक सोच की शक्ति है। किसी भी मुश्किल कार्य को करने की हिम्मत भी हमें हमारी सकारात्मक सोच से ही मिलती है। हम किसी काम को जितने ज्यादा सकारात्मता से करेंगे, काम उतना ही सटीक और सफल होगा। जीवन की विषम परिस्थितियों में सकारात्मक सोच न होने के कारण बहुत से व्यक्ति अपना मानसिक संतुलन खो देते हैं और अपना बहुत बड़ा नुकसान कर बैठते हैं। सकारात्मकता केवल हमारी सफलता की ही नहीं बल्कि हमारे अच्छे स्वास्थ्य की कुंजी भी है।

### SubQuestion No : 16

Q.16 मानव-जाति को महत्व देने में किसका योगदान है?

### Comprehension:

निम्नलिखित गद्यांश को ध्यानपूर्वक पढ़कर पूछे गए प्रश्नों के लिए सही विकल्प चुनकर लिखें -

मानव-जाति को अन्य जीवधारियों से अलग करके महत्व प्रदान करने वाला जो एकमात्र गुरु है, वह है उसकी विचार-शक्ति। मनुष्य के पास बुद्धि है, विवेक है, तर्कशक्ति है अर्थात् उसके पास विचारों की अमूल्य पूँजी है। अपने सुविचारों की नींव पर ही आज मानव ने अपनी श्रेष्ठता की स्थापना की है और मानव-सभ्यता का विशाल महल खड़ा किया है। यही कारण है कि विचारशील मनुष्य के पास जब सुविचारों का अभाव रहता है, तो उसका वह शून्य मानस कुविचारों से ग्रस्त होकर एक प्रकार से शैतान के वशीभूत हो जाता है। मानवीय बुद्धि जब सद्भावों से प्रेरित होकर कल्याणकारी योजनाओं में प्रवृत्त रहती है तो उसकी सदाशयता का कोई अंत नहीं होता, किंतु जब वहाँ कुविचार अपना घर बना लेते हैं तो उसकी पाशविक प्रवृत्तियों उस पर हावी हो उठती हैं। हिंसा और पापाचार का दानवी साम्राज्य इस बात का द्योतक है कि मानव की विचार-शक्ति, जो उसे पशु बनने से रोकती है, उसका साथ देती है। जीवन की कठिन-से-कठिन परिस्थितियों को भी हल कर सकने का विश्वास ही हमारी सकारात्मक सोच है। मुश्किल से मुश्किल दौर में भी हिम्मत बनाए रखना हमारी सकारात्मक सोच की शक्ति है। किसी भी मुश्किल कार्य को करने की हिम्मत भी हमें हमारी सकारात्मक सोच से ही मिलती है। हम किसी काम को जितने ज्यादा सकारात्मता से करेंगे, काम उतना ही सटीक और सफल होगा। जीवन की विषम परिस्थितियों में सकारात्मक सोच न होने के कारण बहुत से व्यक्ति अपना मानसिक संतुलन खो देते हैं और अपना बहुत बड़ा नुकसान कर बैठते हैं। सकारात्मकता केवल हमारी सफलता की ही नहीं बल्कि हमारे अच्छे स्वास्थ्य की कुंजी भी है।

### SubQuestion No : 17

Q.17 मानव ने अपनी श्रेष्ठता कैसे स्थापित की है?

**Comprehension:**

निम्नलिखित गद्यांश को ध्यानपूर्वक पढ़कर पूछे गए प्रश्नों के लिए सही विकल्प चुनकर लिखें -

मानव-जाति को अन्य जीवधारियों से अलग करके महत्व प्रदान करने वाला जो एकमात्र गुरु है, वह है उसकी विचार-शक्ति। मनुष्य के पास बुद्धि है, विवेक है, तर्कशक्ति है अर्थात् उसके पास विचारों की अमूल्य पूँजी है। अपने सुविचारों की नींव पर ही आज मानव ने अपनी श्रेष्ठता की स्थापना की है और मानव-सभ्यता का विशाल महल खड़ा किया है। यही कारण है कि विचारशील मनुष्य के पास जब सुविचारों का अभाव रहता है, तो उसका वह शून्य मानस कुविचारों से ग्रस्त होकर एक प्रकार से शैतान के वशीभूत हो जाता है। मानवीय बुद्धि जब सद्भावों से प्रेरित होकर कल्याणकारी योजनाओं में प्रवृत्त रहती है तो उसकी सदाशयता का कोई अंत नहीं होता, किंतु जब वहाँ कुविचार अपना घर बना लेते हैं तो उसकी पाशविक प्रवृत्तियाँ उस पर हावी हो उठती हैं। हिंसा और पापाचार का दानवी साम्राज्य इस बात का द्योतक है कि मानव की विचार-शक्ति, जो उसे पशु बनने से रोकती है, उसका साथ देती है। जीवन की कठिन-से-कठिन परिस्थितियों को भी हल कर सकने का विश्वास ही हमारी सकारात्मक सोच है। मुश्किल से मुश्किल दौर में भी हिम्मत बनाए रखना हमारी सकारात्मक सोच की शक्ति है। किसी भी मुश्किल कार्य को करने की हिम्मत भी हमें हमारी सकारात्मक सोच से ही मिलती है। हम किसी काम को जितने ज्यादा सकारात्मता से करेंगे, काम उतना ही सटीक और सफल होगा। जीवन की विषम परिस्थितियों में सकारात्मक सोच न होने के कारण बहुत से व्यक्ति अपना मानसिक संतुलन खो देते हैं और अपना बहुत बड़ा नुकसान कर बैठते हैं। सकारात्मकता केवल हमारी सफलता की ही नहीं बल्कि हमारे अच्छे स्वास्थ्य की कुंजी भी है।

**SubQuestion No : 18**

Q.18 मानव में पाशविक प्रवृत्तियाँ क्यों जागृत होती हैं?

**Comprehension:**

निम्नलिखित गद्यांश को ध्यानपूर्वक पढ़कर पूछे गए प्रश्नों के लिए सही विकल्प चुनकर लिखें -

मानव-जाति को अन्य जीवधारियों से अलग करके महत्व प्रदान करने वाला जो एकमात्र गुरु है, वह है उसकी विचार-शक्ति। मनुष्य के पास बुद्धि है, विवेक है, तर्कशक्ति है अर्थात् उसके पास विचारों की अमूल्य पूँजी है। अपने सुविचारों की नींव पर ही आज मानव ने अपनी श्रेष्ठता की स्थापना की है और मानव-सभ्यता का विशाल महल खड़ा किया है। यही कारण है कि विचारशील मनुष्य के पास जब सुविचारों का अभाव रहता है, तो उसका वह शून्य मानस कुविचारों से ग्रस्त होकर एक प्रकार से शैतान के वशीभूत हो जाता है। मानवीय बुद्धि जब सद्भावों से प्रेरित होकर कल्याणकारी योजनाओं में प्रवृत्त रहती है तो उसकी सदाशयता का कोई अंत नहीं होता, किंतु जब वहाँ कुविचार अपना घर बना लेते हैं तो उसकी पाशविक प्रवृत्तियाँ उस पर हावी हो उठती हैं। हिंसा और पापाचार का दानवी साम्राज्य इस बात का द्योतक है कि मानव की विचार-शक्ति, जो उसे पशु बनने से रोकती है, उसका साथ देती है। जीवन की कठिन-से-कठिन परिस्थितियों को भी हल कर सकने का विश्वास ही हमारी सकारात्मक सोच है। मुश्किल से मुश्किल दौर में भी हिम्मत बनाए रखना हमारी सकारात्मक सोच की शक्ति है। किसी भी मुश्किल कार्य को करने की हिम्मत भी हमें हमारी सकारात्मक सोच से ही मिलती है। हम किसी काम को जितने ज्यादा सकारात्मता से करेंगे, काम उतना ही सटीक और सफल होगा। जीवन की विषम परिस्थितियों में सकारात्मक सोच न होने के कारण बहुत से व्यक्ति अपना मानसिक संतुलन खो देते हैं और अपना बहुत बड़ा नुकसान कर बैठते हैं। सकारात्मकता केवल हमारी सफलता की ही नहीं बल्कि हमारे अच्छे स्वास्थ्य की कुंजी भी है।

**SubQuestion No : 19**

Q.19 गद्यांश का उपयुक्त शीर्षक हो सकता है-

**Comprehension:**

निम्नलिखित गद्यांश को ध्यानपूर्वक पढ़कर पूछे गए प्रश्नों के लिए सही विकल्प चुनकर लिखें -

मानव-जाति को अन्य जीवधारियों से अलग करके महत्व प्रदान करने वाला जो एकमात्र गुरु है, वह है उसकी विचार-शक्ति। मनुष्य के पास बुद्धि है, विवेक है, तर्कशक्ति है अर्थात् उसके पास विचारों की अमूल्य पूँजी है। अपने सुविचारों की नींव पर ही आज मानव ने अपनी श्रेष्ठता की स्थापना की है और मानव-सभ्यता का विशाल महल खड़ा किया है। यही कारण है कि विचारशील मनुष्य के पास जब सुविचारों का अभाव रहता है, तो उसका वह शून्य मानस कुविचारों से ग्रस्त होकर एक प्रकार से शैतान के वशीभूत हो जाता है। मानवीय बुद्धि जब सद्भावों से प्रेरित होकर कल्याणकारी योजनाओं में प्रवृत्त रहती है तो उसकी सदाशयता का कोई अंत नहीं होता, किंतु जब वहाँ कुविचार अपना घर बना लेते हैं तो उसकी पाशविक प्रवृत्तियाँ उस पर हावी हो उठती हैं। हिंसा और पापाचार का दानवी साम्राज्य इस बात का द्योतक है कि मानव की विचार-शक्ति, जो उसे पशु बनने से रोकती है, उसका साथ देती है। जीवन की कठिन-से-कठिन परिस्थितियों को भी हल कर सकने का विश्वास ही हमारी सकारात्मक सोच है। मुश्किल से मुश्किल दौर में भी हिम्मत बनाए रखना हमारी सकारात्मक सोच की शक्ति है। किसी भी मुश्किल कार्य को करने की हिम्मत भी हमें हमारी सकारात्मक सोच से ही मिलती है। हम किसी काम को जितने ज्यादा सकारात्मता से करेंगे, काम उतना ही सटीक और सफल होगा। जीवन की विषम परिस्थितियों में सकारात्मक सोच न होने के कारण बहुत से व्यक्ति अपना मानसिक संतुलन खो देते हैं और अपना बहुत बड़ा नुकसान कर बैठते हैं। सकारात्मकता केवल हमारी सफलता की ही नहीं बल्कि हमारे अच्छे स्वास्थ्य की कुंजी भी है।

**SubQuestion No : 20**

Q.20 मानव सभ्यता के विशाल महल की नींव में क्या है ?