



GOVT. OF NCT OF DELHI
Delhi Subordinate Services Selection Board
FC-18, Institutional Area, Karkardooma, Delhi – 110092.
www.dsssb.delhigovt.nic.in

Participant Name	Jitendra Kumar Bind
Test Center Name	Aadarsh Pariksha Kendra CENTER C - Gate No 2 - Noida Sector 64
Test Date	11/05/2026
Test Time	1:00 PM - 3:00 PM
Subject	Multi Tasking Staff

Section : General intelligence and Reasoning Ability

- Q.1 Seven boxes R, S, T, U, V, W and X are kept one over the other but not necessarily in the same order. Only three boxes are kept above X. Only one box is kept between T and X. Only three boxes are kept between T and W. W is kept at some place above X. R is kept immediately below W. U is kept at one of the places above S. V is not kept immediately above or below T.
Which box is kept at the lowermost position?

- Ans
- 1. T
 - 2. X
 - 3. R
 - 4. S

- Q.2 Refer to the following letter, symbol series and answer the question. Counting to be done from left to right only.

(Left) X V S C + + W & W & B ^ K S X D ? & B (Right)

How many such symbols are there each of which is immediately preceded by a consonant and also immediately followed by a letter?

- Ans
- 1. Three
 - 2. Two
 - 3. Four
 - 4. One

- Q.3 A statement is followed by two conclusions. Find out which conclusion is true based on the given statement.

Statement : $Q > W < R < B = G$

Conclusions:

- I. $Q < R$
- II. $G < Q$

- Ans
- 1. Neither I nor II is true
 - 2. Only I is true
 - 3. Only II is true
 - 4. Both I and II are true

Q.4 A, B, C, D, Q, R and S are sitting around a circular table facing the centre of the table. Only one person sits between S and A when counted from the left of A. D sits third to the right of Q. C sits third to the left of B. D sits to the immediate right of C. R is not an immediate neighbor of C. How many people sit between R and A when counted from the right of R?

- Ans
- 1. Two
 - 2. Four
 - 3. Three
 - 4. One

Q.5 Seven boxes A, B, C, I, J, K and L are kept one over the other but not necessarily in the same order. Only three boxes are kept below J. Only two boxes are kept between J and I. Only K is kept above C. L is kept at some place below A and at some place above B. Which box is kept at second position from the bottom?

- Ans
- 1. K
 - 2. B
 - 3. A
 - 4. L

Q.6 In a certain code language, 'he eats fruit' is coded as 'lp mk jv' and 'fruit is red' is coded as 'wc qz mk'. How is 'fruit' coded in the given language?

- Ans
- 1. mk
 - 2. jv
 - 3. lp
 - 4. wc

Q.7 Refer to the following number series and answer the question that follows. Counting to be done from left to right only. (All numbers are single-digit numbers only.)

(Left) 1 5 9 3 6 2 9 8 7 5 3 6 9 8 4 1 5 9 2 6 3 2 5 8 7 5 6 3 9 8 7 4 5 1 5 9 6 3 1 5 (Right)

How many such odd digits are there each of which is immediately preceded by an even digit and also immediately followed by an even digit?³⁶⁵⁸

- Ans
- 1. 3
 - 2. 7
 - 3. 5
 - 4. 9

Q.8 Read the given statements and conclusions carefully. You have to take the given statements to be true even if they seem to be at variance from commonly known facts. You have to decide which conclusion/s logically follow/s from the given statements.

Statements: All eyes are jeeps. No eye is a sword.

Conclusion (I): Some swords are jeeps.

Conclusion (II): All jeeps are swords.

- Ans
- 1. Only conclusion (I) follows
 - 2. Neither conclusion (I) nor (II) follows
 - 3. Only conclusion (II) follows
 - 4. Both conclusions (I) and (II) follow

Q.9 Seven boxes I, J, K, L, M, N and O are kept one over the other but not necessarily in the same order. Only two boxes are kept below M. Only one box is kept above N. Only one box is kept between N and K. O is kept immediately above L. I is kept at some place below J.

How many boxes are kept between J and O?

- Ans
- 1. Three
 - 2. Two
 - 3. Four
 - 4. One

Q.10 In a certain code language,

A ± B means 'A is the father of B'

A @ B means 'A is the sister of B'

A : B means 'A is the wife of B'

A ! B means 'A is the brother of B'

Based on the above, how is Q related to H if 'Q ± U @ A ! C : H'?

- Ans
- 1. Son
 - 2. Wife's father
 - 3. Father
 - 4. Brother

Q.11 Six people, W, X, Y, C, D and E, are sitting around a circular table, facing the center of the table. Only two people sit between W and Y when counted from the left of W. E sits to the immediate left of W. X is an immediate neighbor of C as well as Y. How many people sit between D and X when counted from the right of X?

- Ans
- 1. Three
 - 2. Two
 - 3. One
 - 4. None

Q.12 Seven boxes R, S, T, U, V, W and X are kept one over the other but not necessarily in the same order. Only V is kept above W. Only two boxes are kept between W and R. Only X is kept below U. S is not kept immediately above R. Which box is kept second above T?

- Ans
- 1. U
 - 2. R
 - 3. V
 - 4. W

Q.13 Refer to the following letter, symbol series and answer the question. Counting to be done from left to right only.

(Left) = L ? L N N + * ? ^ T ^ C A W \$ S V \$ (Right)

How many such consonants are there each of which is immediately preceded by a vowel and also immediately followed by a symbol?

- Ans
- 1. Four
 - 2. Two
 - 3. Three
 - 4. One

Q.14 In this question, a statement is followed by two conclusions numbered I and II. Find out which conclusion is true based on the given statements.

Statement: $L < M \leq N > R = S$

Conclusions:

I. $N > L$

II. $S < N$

- Ans
- 1. Only I is true
 - 2. Only II is true
 - 3. Both I and II are true
 - 4. Neither I nor II is true

Q.15 In a certain code language, 'BASE' is coded as '1436' and 'BEAR' is coded as '1645'. What is the code for 'S' in that language?2221

- Ans
- 1. 6
 - 2. 4
 - 3. 5
 - 4. 3

Q.16 In a certain code language, 'ILES' is coded as '0183' and 'SLIT' is coded as '1238'. What is the code for 'T' in the given code language?1066

- Ans
- 1. 3
 - 2. 1
 - 3. 8
 - 4. 2

Q.17 Each vowel in the word FLOATING is changed to the letter immediately preceding it in the English alphabetical order and each consonant is changed to the letter immediately following it in the English alphabetical order. Which of the following letters will be third from the left in the new group of letters thus formed?

- Ans
- 1. U
 - 2. N
 - 3. H
 - 4. Z

Q.18 Refer to the following letter, symbol series and answer the question. Counting to be done from left to right only.

(Left) C J Z B % = \ U O \$ Z ? = R % / = * @ (Right)

How many such symbols are there each of which is immediately preceded by a letter and also immediately followed by a letter?

- Ans
- 1. Three
 - 2. Two
 - 3. One
 - 4. Four

Q.19 In a certain code language,

A ± B means 'A is the father of B'

A @ B means 'A is the sister of B'

A : B means 'A is the wife of B'

A ! B means 'A is the brother of B'

Based on the above, how is Q related to H if 'Q ± U ! A @ C : H'?

- Ans
- 1. Father
 - 2. Brother
 - 3. Wife's father
 - 4. Son

Q.20 Refer to the following letter, symbol series and answer the question. Counting to be done from left to right only.

(Left) A # O N / * L O + \$ A D Z Z W K * J Q S T (Right)

How many such symbols are there each of which is immediately preceded by a symbol and also immediately followed by a letter? 8610

- Ans
- 1. Three
 - 2. None
 - 3. Two
 - 4. One

Section : General intelligence and Reasoning Ability1

Q.1 Each of the digits in the number 3186547 is arranged in an ascending order from left to right. What will be the sum of the digits, which are second from the left and second from the right in the new number thus formed?

- Ans
- 1. 11
 - 2. 9
 - 3. 10
 - 4. 8

Q.2 If 'A' stands for '+', 'B' stands for '-', 'C' stands for 'x' and 'D' stands for '÷', what will come in place of question mark '?' in the following equation?
42 D 6 C 2 A 5 B 3 = ?

- Ans
- 1. 15
 - 2. 13
 - 3. 16
 - 4. 14

Q.3 If the water source is placed along X-Y, as shown in the figure, which of the given options will be the water reflection of the given figure?



- Ans
- 1. EAV2Y2S
 - 2. EAY2VE
 - 3. EAY2VE
 - 4. EAV2Y2S

Q.4 If 'G' stands for '+', 'H' stands for 'x', 'I' stands for '+', and 'J' stands for '-', then which of the following results in 30?

- Ans
- 1. 30 I 5 G 6 J 4 H 10
 - 2. 30 H 5 J 6 G 3 I 10
 - 3. 30 G 5 I 6 H 7 J 10
 - 4. 30 G 5 H 6 I 4 J 10

Q.5 Select the pair which follows the same pattern as that followed by the two set of pairs given below. Both pairs follow the same pattern.

WXT-PQM
CDZ-VWS

- Ans
- 1. LLG-EFB
 - 2. LLG-DEA
 - 3. LMI-DFA
 - 4. LMI-EFB

Q.6 Select the pair which follows the same pattern as that followed by the two set of pairs given below. Both pairs follow the same pattern.

RVW-TXY
MQR-OST

- Ans
- 1. GKL-IMN
 - 2. GJJ-IMN
 - 3. GJJ-HLM
 - 4. GKL-HMM

Q.7 Based on the English alphabetical order, three of the following four are alike in a certain way and thus form a group. Which is the one that does not belong to that group?

(Note: The odd one out is not based on the number of consonants/vowels or their position in the letter cluster)

- Ans
- 1. IMQ
 - 2. LPT
 - 3. TCD
 - 4. OSW

Q.8 What should come in place of the '?' in the given series?

0, 200, 450, 750, 1100, 1500, ?

- Ans
- 1. 2000
 - 2. 1950
 - 3. 2100
 - 4. 2050

Q.9 Based on the English alphabetical order, three of the following four are alike in a certain way and thus form a group. Which is the one that does not belong to that group?

(Note: The odd one out is not based on the number of consonants/vowels or their position in the letter cluster)

- Ans
- 1. UWY
 - 2. NPR
 - 3. DFH
 - 4. MOU

Q.10 Select the set in which the numbers are related in the same way as are the numbers of the following sets.

(NOTE: Operations should be performed on the whole numbers, without breaking down the numbers into their constituent digits. E.g. 13 - Operations on 13 such as adding to/subtracting from/multiplying with 13 can be performed. Breaking down 13 into 1 and 3 and then performing mathematical operations on 1 and 3 is not allowed.)

14 - 2 - 12

11 - 4 - 7

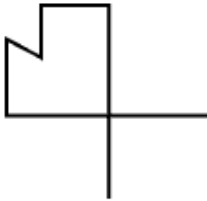
- Ans
- 1. 30 - 10 - 23
 - 2. 19 - 9 - 10
 - 3. 18 - 3 - 13
 - 4. 8 - 3 - 1

Q.11 Based on the English alphabetical order, three of the following four letter cluster pairs are alike in a certain way and thus form a group. Which is the one that does not belong to that group?

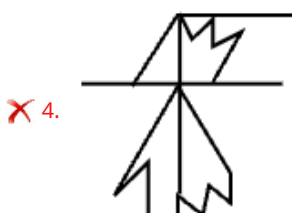
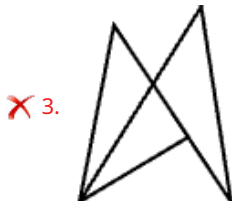
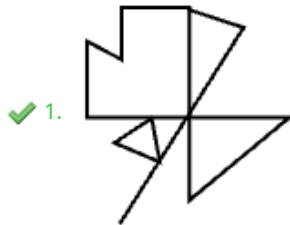
(Note: The odd man out is not based on the number of consonants/vowels or their position in the letter cluster)

- Ans
- 1. FG - IN
 - 2. PQ - SX
 - 3. KL - NT
 - 4. AB - DI

Q.12 Select the option in which the given figure is embedded (rotation is not allowed)



Ans



Q.13 If 'E' stands for '+', 'F' stands for '-', 'G' stands for '÷' and 'H' stands for 'x', what will come in place of the question mark '?' in the following equation?

$$10 G 5 E 8 H 14 F 15 = ?$$

- Ans
- 1. 96
 - 2. 99
 - 3. 78
 - 4. 89

Q.14 What should come in place of the question mark (?) in the given series?

$$5 \ 10 \ 16 \ 23 \ 31 \ ?$$

- Ans
- 1. 40
 - 2. 41
 - 3. 39
 - 4. 38

Q.15 Select the set in which the numbers are related in the same way as are the numbers of the following sets.

(NOTE: Operations should be performed on the whole numbers, without breaking down the numbers into their constituent digits. E.g. 13 - Operations on 13 such as adding to/subtracting from/multiplying with 13 can be performed. Breaking down 13 into 1 and 3 and then performing mathematical operations on 1 and 3 is not allowed.)

$$19 - 4 - 15$$
$$4 - 2 - 2$$

- Ans
- 1. 11 - 5 - 4
 - 2. 8 - 3 - 4
 - 3. 10 - 2 - 8
 - 4. 9 - 2 - 8

Q.16 Select the set in which the numbers are related in the same way as are the numbers of the following sets.

(NOTE : Operations should be performed on the whole numbers, without breaking down the numbers into its constituent digits. E.g. 13 - Operations on 13 such as adding /subtracting /multiplying etc. to 13 can be performed. Breaking down 13 into 1 and 3 and then performing mathematical operations on 1 and 3 is not allowed)

$$(11, 7, 7)$$
$$(13, 9, 11)$$

- Ans
- 1. (10, 6, 9)
 - 2. (12, 16, 25)
 - 3. (9, 5, 3)
 - 4. (18, 14, 16)

Q.17 What will come in the place of '?' in the following equation if '+' and '-' are interchanged, and 'x' and '÷' are interchanged?

$$30 \times 2 + 10 \div 1 - 4 = ?$$

- Ans
- 1. 9
 - 2. 13
 - 3. 23
 - 4. 19

Q.18 CLHR is related to FOKU in a certain way based on the English alphabetical order. In the same way, OXTD is related to RAWG. To which of the following options is XGCM related, following the same logic?

- Ans**
- 1. AJFP
 - 2. AKLO
 - 3. AJGT
 - 4. AJPO

Q.19 What should come in place of the '?' in the given series?

50, 250, 500, 800, 1150, 1550, ?

- Ans**
- 1. 2100
 - 2. 1950
 - 3. 2000
 - 4. 2050

Q.20 Read the given statements and conclusions carefully. You have to take the given statements to be true even if they seem to be at variance from commonly known facts. You have to decide which conclusion/s logically follow/s from the given statements.

Statements: All eyes are jokers. No eye is a sword.

Conclusion (I): Some swords are jokers.

Conclusion (II): All jokers are swords.

- Ans**
- 1. Neither conclusion (I) nor (II) follows
 - 2. Both conclusions (I) and (II) follow
 - 3. Only conclusion (II) follows
 - 4. Only conclusion (I) follows

Section : **General Awareness**

Q.1 In July 2025, the Ministry of Rural Development of the Government of India signed a Memorandum of Understanding (MoU) with which organisation to promote financial inclusion in rural India and empower women?

- Ans**
- 1. Life Insurance Corporation of India
 - 2. ICICI Prudential Life Insurance Company Ltd
 - 3. Insurance Regulatory and Development Authority of India
 - 4. National Bank for Agriculture and Rural Development

Q.2 During the 6th edition of the Khelo India Winter Games 2026 held in Leh in January 2026, which team retained the gold medal in the men's ice hockey event?

- Ans**
- 1. Indian Army
 - 2. Indo-Tibetan Border Police (ITBP)
 - 3. Himachal Pradesh
 - 4. Chandigarh

Q.3 Where did Shri Manohar Lal, Union Minister of Power and Housing & Urban Affairs, inaugurate India's largest and first MWh-scale Vanadium Redox Flow Battery (VRFB) system of 3 MWh capacity in November 2025?

- Ans**
- 1. NETRA, NTPC R&D Centre, Greater Noida
 - 2. IIT Bombay Energy Lab, Maharashtra
 - 3. BHEL Hyderabad R&D Centre, Telangana
 - 4. NTPC Vindhyachal, Madhya Pradesh

Q.4 Which organisation was formed in 1906 in Dhaka to represent and protect the interests of Muslims in British India?

- Ans
- 1. All India Muslim Jamaat
 - 2. Markazul Maarif
 - 3. All India Sunni Conference
 - 4. All India Muslim League

Q.5 When was the Indigo rebellion launched for the non-cultivation of indigo in Bengal?

- Ans
- 1. 1849
 - 2. 1869
 - 3. 1839
 - 4. 1859

Q.6 Which organization in India publishes the National Multidimensional Poverty Index (MPI) report?

- Ans
- 1. NITI Aayog of India
 - 2. National Sample Survey Office
 - 3. Ministry of Finance
 - 4. Reserve Bank of India

Q.7 The Frontier Nagaland Territorial Authority was created following a 2026 agreement to promote the development of which region of Nagaland?

- Ans
- 1. Western Nagaland
 - 2. Central Nagaland
 - 3. Eastern Nagaland
 - 4. Southern Nagaland

Q.8 Which of the following is the primary function of a commercial bank?

- Ans
- 1. To issue currency and control the nation's money supply
 - 2. To regulate financial markets and oversee economic stability
 - 3. To accept deposits, lend funds, and offer banking services
 - 4. To provide insurance coverage and manage financial risks

Q.9 The Ashtadhyayi of Panini is the foundational grammar of which classical language?

- Ans
- 1. Apabhramsha
 - 2. Sanskrit
 - 3. Prakrit
 - 4. Pali

Q.10 Which entity in India publishes the National Multidimensional Poverty Index?

- Ans
- 1. National Sample Survey Office
 - 2. Reserve Bank of India
 - 3. NITI Aayog
 - 4. Department of Economic Affairs

Q.11 Which regulatory body in India oversees the operations of microfinance institutions (MFIs) to ensure consumer protection and financial stability?

- Ans
- 1. Ministry of Finance
 - 2. Securities and Exchange Board of India (SEBI)
 - 3. Reserve Bank of India (RBI)
 - 4. Insurance Regulatory and Development Authority of India (IRDAI)

Q.12 How does a general increase in prices of goods and services affect the purchasing power of money?

- Ans**
- 1. Purchasing power remains stable
 - 2. Purchasing power fluctuates unpredictably
 - 3. Purchasing power decreases
 - 4. Purchasing power increases

Q.13 A mobile phone factory wants to decide whether to produce one additional unit. Which cost should it consider in making this decision?

- Ans**
- 1. Total cost
 - 2. Marginal cost
 - 3. Fixed cost
 - 4. Average cost

Q.14 Two newly approved telescopes, National Large Solar Telescope (NLST) and the National Large Optical-Near Infrared Telescope (NLOT) will be installed at which location?

- Ans**
- 1. Kodaikanal
 - 2. Mount Abu
 - 3. Ladakh
 - 4. Ooty

Q.15 The 38th edition of the 2025 National Games of India was hosted by which state?

- Ans**
- 1. Haryana
 - 2. Uttarakhand
 - 3. Maharashtra
 - 4. Gujarat

Q.16 The Matua movement is a Hindu reform movement that began in the 19th century in which of the following regions of India?

- Ans**
- 1. Northern Bihar
 - 2. Eastern Madhya Pradesh
 - 3. Southern Odisha
 - 4. Eastern Bengal

Q.17 Which of the following social reformers introduced the genuine message of "Advaita," developing it into a powerful practical philosophy of life known as "One Caste, One Religion, and One God for Man"?

- Ans**
- 1. E. V. Ramasamy
 - 2. Chattampi Swamikal
 - 3. Swami Vivekananda
 - 4. Sree Narayana Guru

Q.18 Bhagwandas Raikwar received the Padma Shri 2026 in which of the following sports?

- Ans**
- 1. Tennis
 - 2. Bundeli martial arts
 - 3. Hockey
 - 4. Cricket

Q.19 In 2025, researchers from the Jawaharlal Nehru Centre for Advanced Scientific Research (JNCASR) identified which protein complex as a key player in autophagosome biogenesis within the autophagy pathway?

- Ans**
- 1. Exocyst complex
 - 2. SNARE protein complex
 - 3. Proteasome complex
 - 4. Ubiquitin ligase complex

Q.20 Which of the following was a major outcome of the changes introduced after 1857?

- Ans**
- 1. Abolition of all forms of taxation in India
 - 2. Complete independence of Indian states
 - 3. Beginning of direct Crown rule in India
 - 4. End of the British's rule in India

Section : **General Awareness1**

Q.1 Vinegar commonly used in kitchens is primarily composed of which acid?

- Ans**
- 1. Sulphuric acid
 - 2. Acetic acid
 - 3. Hydrochloric acid
 - 4. Nitric acid

Q.2 Which of the following fairs is associated with camel trading in Rajasthan?

- Ans**
- 1. Pushkar Fair
 - 2. Surajkund Fair
 - 3. Sonapur Fair
 - 4. Hemis Festival

Q.3 Which of these officials can the President of India remove on the advice of the Union Council of Ministers?

- Ans**
- 1. Governor of a State
 - 2. Chief Justice of India
 - 3. Speaker of Lok Sabha
 - 4. Comptroller and Auditor General

Q.4 What did the structure called 'anda' represent in a stupa?

- Ans**
- 1. A pillar
 - 2. A decorative railing
 - 3. A square platform
 - 4. A semi-circular mound of earth

Q.5 The President of India exercises executive powers under the advice of the _____.

- Ans**
- 1. Vice President
 - 2. Governors of States
 - 3. Supreme Court
 - 4. Council of Ministers headed by the Prime Minister

Q.6 Communication can be classified into Personal and Mass Communication. Which of the following is an example of Mass Communication used to inform millions of people simultaneously?

- Ans**
- 1. Broadcasting programs via All India Radio
 - 2. Making a voice call using a mobile phone
 - 3. Sending a postcard through the postal service
 - 4. Exchanging an email between two colleagues

Q.7 In humans, excess carbohydrates are stored as _____.

- Ans**
- 1. Glycogen
 - 2. Triglycerides
 - 3. Starch
 - 4. Sucrose

Q.8 Which island group is formed entirely from coral atolls and reefs?

- Ans**
- 1. Sundarbans Islands
 - 2. Lakshadweep Islands
 - 3. Andaman Islands
 - 4. Nicobar Islands

Q.9 The relics of Sariputta and Maha-Moggalana were discovered at which place?

- Ans**
- 1. Sanchi
 - 2. Amaravati
 - 3. Bharhut
 - 4. Taxila

Q.10 An archaeologist finds a temple with massive enclosure walls, tall gopurams at gateways, and a pyramidal vimana over the sanctum. The temple typically represents:

- Ans**
- 1. Vesara style of Deccan
 - 2. Kalinga style of Odisha
 - 3. Dravida style of South India
 - 4. Nagara style of North India

Q.11 The protection available to an accused person against double jeopardy and self-incrimination under the Constitution of India is provided under which Article?

- Ans**
- 1. Article 20
 - 2. Article 14
 - 3. Article 21
 - 4. Article 22

Q.12 The Yemshe Festival, a harvest celebration observed annually on October with festivities extending from the last week of September to the first week of October, was associated with which tribe of Nagaland?

- Ans**
- 1. Ao tribe
 - 2. Angami tribe
 - 3. Konyak tribe
 - 4. Pochuri tribe

Q.13 When you add lemon juice (an acid) to milk, the milk proteins curdle. This process is best described as:

- Ans
- 1. Dissolution
 - 2. Crystallization
 - 3. Denaturation and Coagulation
 - 4. Sublimation

Q.14 Which Article of the Constitution of India provides that every High Court of India has the power of superintendence over all courts and tribunals within its territorial jurisdiction, except the tribunals of the Armed Forces?

- Ans
- 1. Article 226
 - 2. Article 141
 - 3. Article 227
 - 4. Article 32

Q.15 Which of the following statements is INCORRECT w.r.t. milk of magnesia?

- Ans
- 1. It is a mixture of milk and magnesium hydroxide.
 - 2. It is a sol.
 - 3. It is a mild base.
 - 4. It is used as an antacid.

Q.16 Which of the following is a description of India's climate?

- Ans
- 1. Dry Climate
 - 2. Humid Climate
 - 3. Polar Climate
 - 4. Monsoon Climate

Q.17 Which of the following structure in the nucleus carries genetic information from one generation to the next in humans?

- Ans
- 1. Mitochondria
 - 2. Ribosome
 - 3. Lysosomes
 - 4. Chromosome

Q.18 According to the 2011 Census of India, which position does Christianity hold among religions in India by population size?

- Ans
- 1. First
 - 2. Third
 - 3. Second
 - 4. Fourth

Q.19 The 'Right to Education' was integrated as a Fundamental Right under Article 21-A. For which specific age group is free and compulsory education guaranteed?

- Ans
- 1. 6 to 14 years
 - 2. 6 to 18 years
 - 3. 5 to 15 years
 - 4. 3 to 12 years

Q.20 In 2015, the Smart Cities Mission was established with the goal of enhancing the standard of living in how many cities by offering sustainable solutions, strong infrastructure, and effective services?

- Ans
- 1. 100
 - 2. 150
 - 3. 200
 - 4. 120

Section : **Arithmetical and Numerical Ability**

Q.1 A class of 34 students took a Physics test. 14 students had an average score of 69. The other students had an average score of 60. What is the average score (rounded off to one decimal place) of the whole class?¹⁶¹⁹

- Ans
- 1. 56.8
 - 2. 65.3
 - 3. 63.7
 - 4. 60.3

Q.2 Which of the following numbers is divisible by 7?²⁰⁸⁴

- Ans
- 1. 157107
 - 2. 156023
 - 3. 155811
 - 4. 156708

Q.3 A sum of ₹10,00,000 is invested at 3% compound interest per annum, compounded annually. If the final amount is ₹10,92,727, find the time period.

- Ans
- 1. 2 years
 - 2. 3.5 years
 - 3. 2.5 years
 - 4. 3 years

Q.4 A sum of ₹10,00,000 is invested at 7% per annum compound interest, compounded annually. If the amount becomes ₹12,25,043, what is the time of the investment?

- Ans
- 1. 3 years
 - 2. 3.5 years
 - 3. 2 years
 - 4. 2.5 years

Q.5 Nitin sells two articles for ₹2,178 each with no profit, no loss in the entire transaction. If one article was sold at a gain of 50%, then the other article is sold at a loss of:

- Ans
- 1. 22%
 - 2. 26%
 - 3. 25%
 - 4. 23%

Q.6 An amount of ₹75,000 is the monthly income of Gajju. He devotes 55% of his monthly income to housing expenses, while 30% of the remaining is allocated to personal and educational expenses. The remainder of his monthly income is his savings. Determine the aggregate savings over a six-month period.

- Ans**
- 1. ₹45,580
 - 2. ₹60,750
 - 3. ₹1,50,000
 - 4. ₹1,41,750

Q.7 The number of seats in an auditorium is increased by 20%. The price of a ticket is also increased by 8%. Then the percentage increase in revenue collection will be:

- Ans**
- 1. 29.6%
 - 2. 26.5%
 - 3. 28.8%
 - 4. 33.3%

Q.8 The average of three numbers is 21. If two of the three numbers are 15 and 29, the third number is:

- Ans**
- 1. 18
 - 2. 20
 - 3. 19
 - 4. 21

Q.9 Mr. Rajesh spends 80% of his income. His income is increased by 20% and he increases his expenditure by 10%. His savings are increased by ____.

- Ans**
- 1. 60%
 - 2. 65%
 - 3. 50%
 - 4. 55%

Q.10 Simplify $16 \times (4 \times (5^2)) \div 10 + 39 - 54$

- Ans**
- 1. 145
 - 2. 149
 - 3. 152
 - 4. 142

Q.11 The price of peanut oil is ₹1,200 for 10 litres. If the price is decreased by 2.5% and then increased by 8%, then what is the cost of 15 litres?

- Ans**
- 1. ₹1,895.40
 - 2. ₹2,065.80
 - 3. ₹1,765.50
 - 4. ₹1,970

Q.12 A sum of ₹60,000 is invested at a compound interest rate of 5% per annum, compounded annually, for 2 years. Find the total compound interest earned at the end of the period.

- Ans**
- 1. ₹5,800
 - 2. ₹6,450
 - 3. ₹6,050
 - 4. ₹6,150

Q.13 A manufacturer sells a product to a wholesaler at a profit of 35%. The wholesaler, in turn, sells it to a retailer at a profit of 25%, and the retailer sells it to a customer at a profit of 28%. If the customer pays ₹540, find the cost price (in ₹) for the manufacturer.

- Ans 1. 250
 2. 251
 3. 253
 4. 248

Q.14 Find the smallest number which, when divided by both 12 and 15, leaves a remainder of 7 in each case.

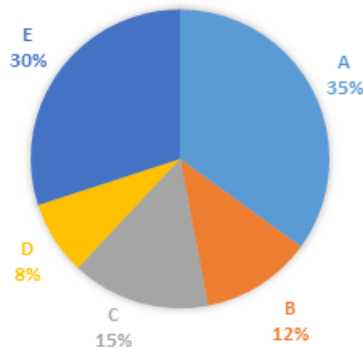
- Ans 1. 67
 2. 71
 3. 57
 4. 74

Q.15 The positive square root of $(25^2 - 15^2)$ is:

- Ans 1. 28
 2. 10
 3. 26
 4. 20

Q.16 The following pie chart shows the percentage distribution of students of graduation level in five different institutes, A, B, C, D and E, in a town. Study the pie chart and answer the question that follows. The total number of students is 25,000.

THE PERCENTAGE DISTRIBUTION OF STUDENTS OF GRADUATION LEVEL IN FIVE DIFFERENT INSTITUTES A,B,C,D AND E IN A TOWN.



How many students are studying in institute A, C and E together?

- Ans 1. 20,000
 2. 22,254
 3. 20,845
 4. 16,200

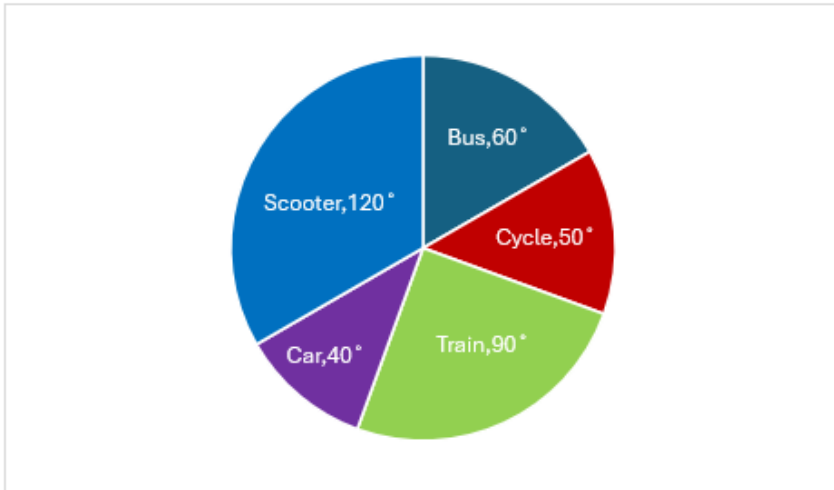
Q.17 The average weight (in kg) of a family of five members whose weights are 40 kg, 49 kg, 57 kg, 70 kg and 35 kg is:

- Ans 1. 52.2
 2. 49.2
 3. 51.2
 4. 50.2

Q.18 Find the simple interest (in ₹) on ₹1,800 at 3% per month for 7 months.

- Ans 1. 378
 2. 31.50
 3. 63
 4. 51.50

Q.19 The given pie chart shows the modes of transport used by the students of a school. The total number of students is 1,080. Study the chart and answer the question that follows.



Find the total number of students who used the bus and the car as modes of transport.

- Ans 1. 300
 2. 340
 3. 400
 4. 420
- Q.20 A juice vendor mixes three equal-sized jugs of orange juice to water in the ratios 2 : 5, 3 : 4, and 4 : 5. What is the final ratio of orange juice to water in the mixture?
- Ans 1. 71 : 114
 2. 75 : 118
 3. 70 : 113
 4. 73 : 116

Section : **Arithmetical and Numerical Ability1**

Q.1 Four students A, B, C and D scored marks in Math and Science in the ratios 45 : 60, 32 : 48, 50 : 75 and 36 : 54 respectively. Which student has the highest proportion of Math marks to Science marks?

- Ans 1. D
 2. C
 3. B
 4. A

Q.2 A cylinder whose height is equal to its radius is placed on top of a hemisphere. The combination forms a solid of total height H cm. If the curved surface area of the hemisphere is 22π cm², find the value of H. (use $\pi = \frac{22}{7}$)

- Ans
- 1.5
 - 2.8
 - 3.7
 - 4.6

Q.3 A dealer marks his goods 30% above the cost price. Then, he allows a discount of 30% on it. What is his loss percentage?

- Ans
- 1.6%
 - 2.9%
 - 3.5%
 - 4.10%

Q.4 6 men and 16 women can complete a piece of work in 17 days, and 9 men and 14 women can complete the same work in 13 days. The work of how many women is equivalent to that of one man?

- Ans
- 1.4
 - 2.9
 - 3.8
 - 4.6

Q.5 A delivery truck covers four legs of a journey as described below.
the first 60 km at a speed of 30 km/hr
the next 90 km at a speed of 45 km/hr
the next 75 km at a speed of 25 km/hr
the final 45 km at a speed of 36 km/hr
What is the average speed of the truck for the complete journey? (Give your answer in km/hr, rounded off to the nearest whole number.)

- Ans
- 1.30
 - 2.32
 - 3.33
 - 4.35

Q.6 A, B, and C start a partnership. A invests ₹70,000 for 12 months, B invests ₹42,000 for 12 months, and C invests ₹28,000 for 12 months. They agree that 20% of the total profit will be reserved for charity before distribution. If the total profit is ₹56,000, what is B's share?

- Ans
- 1. ₹22,440
 - 2. ₹8,960
 - 3. ₹13,450
 - 4. ₹13,440

Q.7 A cyclist travels from point A to B at a speed of 18 km/hr, then from B to C at 24 km/hr, and finally from C back to A at a speed of 12 km/hr. If AB = 36 km, BC = 48 km, and CA = 60 km, find the average speed for the round trip.

- Ans
- 1. 18 km/hr
 - 2. 17 km/hr
 - 3. 15 km/hr
 - 4. 16 km/hr

Q.8 The dimensions of a cuboid are in the ratio 1 : 2 : 4. A cube has the same volume as the cuboid. The cuboid's surface area exceeds the cube's surface area by 196 cm^2 . Find the length (in cm) of an edge of the cube.

- Ans
- 1. 10
 - 2. 16
 - 3. 14
 - 4. 12

Q.9 Amit and Bharati invest money in a business in the ratio 5:7. At the end of the year, they earn a profit of ₹10,000. How much profit does Bharati get? (Round off your answer to two decimal places)

- Ans
- 1. ₹5,853.33
 - 2. ₹5,607.33
 - 3. ₹5,833.33
 - 4. ₹5,843.33

Q.10 A can do a job in 22 days and B can do the same job in 10 days. With the help of C, they did the job in 4 days. Then, C alone can do the job in:

- Ans
- 1. $15\frac{13}{23}$ days
 - 2. $9\frac{13}{23}$ days
 - 3. $14\frac{13}{23}$ days
 - 4. $17\frac{13}{23}$ days

Q.11 A shopkeeper makes 8% more profit by selling an umbrella for ₹ 320 than by selling it for ₹ 300. Find the selling price (in ₹) of the umbrella if he is to make a profit of 30%.

- Ans
- 1. 300
 - 2. 250
 - 3. 285
 - 4. 325

Q.12 The surface area (in cm^2) of a sphere of radius 7 cm is:

(Take $\pi = \frac{22}{7}$)

- Ans
- 1. 616
 - 2. 619
 - 3. 617
 - 4. 618

Q.13 A, B and C can do a piece of work in 6 days, 9 days and 18 days, respectively. If they work together, then find the time (in days) taken to complete the work.

- Ans
- 1. 2
 - 2. 4
 - 3. 5
 - 4. 3

Q.14 A person buys an item for a discount of 14% on its marked price ₹7,200. If he sells this item for ₹7,200, then find the profit percentage. (Round off to two decimal places.)

- Ans
- 1. 16.28%
 - 2. 28.05%
 - 3. 15.75%
 - 4. 14.05%

Q.15 A solid gold bar in the shape of a cuboid with dimensions 12 cm × 6 cm × 3 cm is melted and recast into a solid cube. Assuming no material is lost, what is the length (in cm) of each side of the resulting cube?

- Ans
- 1. 8
 - 2. 4
 - 3. 6
 - 4. 12

Q.16 7 men or 8 women can do a job in 11 days. 7 men work for 5 days and leave. The number of women required to complete the remaining work in 8 days is:

- Ans
- 1. 7
 - 2. 9
 - 3. 4
 - 4. 6

Q.17 If $A:B=1:2$, $C:B=4:3$, $9D=6C$, and $D:E=12:16$, then the value of $A:B:C:D:E$ is:

- Ans
- 1. 27:72:48:54:64
 - 2. 27:54:72:48:64
 - 3. 27:72:54:48:64
 - 4. 27:54:68:48:64

Q.18 A car sets out on a long journey and maintains a steady pace of 106 kilometers every hour. After driving non-stop for 450 minutes, how far did the car travel?

- Ans
- 1. 800 km
 - 2. 765 km
 - 3. 795 km
 - 4. 755 km

Q.19 A boat travels 18 km downstream in 3 hours and returns upstream in 4 hours. What is the speed of the boat against the stream?

- Ans
- 1. 4.5 km/h
 - 2. 6 km/h
 - 3. 4 km/h
 - 4. 3.5 km/h

Q.20 The profit made on a product is 84%. What is the loss percentage (correct to two decimal places) incurred on the sale if the figures of both cost price and selling price are interchanged?

- Ans
- 1. 45.88%
 - 2. 48.23%
 - 3. 45.65%
 - 4. 48.28%

Section : Test of English Language and Comprehension

Q.1 Complete the sentence with a contextually and grammatically appropriate adjective.

The ___ book cover intrigued potential readers.3923

- Ans
- 1. faded
 - 2. vibrant
 - 3. dull
 - 4. mundane

Q.2 Complete the sentence with a contextually and grammatically appropriate adjective.

The ___ sky was filled with stars.3913

- Ans
- 1. stormy
 - 2. cloudless
 - 3. overcast
 - 4. gloomy

Q.3 Select the most appropriate option to fill in the blank.
___ president of the organisation will convene the meeting.1215

- Ans
- 1. an
 - 2. the
 - 3. a
 - 4. no article required

Q.4 Choose the correct option to complete the sentence: "The audience listened ___ as the renowned musician performed the classical piece."

- Ans
- 1. attentive
 - 2. attention
 - 3. attentively
 - 4. attentiveness

Q.5 The following sentence has been divided into different segments. Rearrange all the segments A - D, to form a coherent sentence.

(A) Maria stayed up late to (B) she hoped to publish soon (C) although she was exhausted from work, (D) finish her novel, which4828

- Ans
- 1. CADB
 - 2. ADCB
 - 3. CDAB
 - 4. ACDB

Q.6 Select the most appropriate word for the blank in the sentence given below.

The baby slept _____ through the night without waking up.
4365

- Ans
- 1. loudly
 - 2. peacefully
 - 3. restlessly
 - 4. uncomfortably

Q.7 Choose the most appropriate option to fill in the blank.

The professor's explanation was so ____ that even the students with little prior knowledge could understand the concept.

- Ans
- 1. ambiguous
 - 2. obscure
 - 3. perplexing
 - 4. lucid

Q.8 Fill in the blank with the most appropriate article. If no article is required, choose 'no article'.

She wants to become __ engineer after completing her degree.

- Ans
- 1. the
 - 2. no article
 - 3. a
 - 4. an

Q.9 Complete the sentence with an appropriate word:
"His ____ insights into the political situation provided a fresh perspective that was much needed."

2321

- Ans
- 1. mundane
 - 2. profound
 - 3. trivial
 - 4. superficial

Q.10 Choose the correct option to complete the sentence

"Sanjukta prepared a _____ report that impressed the board members."

- Ans
- 1. redundant
 - 2. vague
 - 3. confusing
 - 4. detailed

Q.11 Complete the sentence with the suitable option.

She runs ----- better than Mona does. 240

- Ans
- 1. far
 - 2. farther
 - 3. for
 - 4. fair

Q.12 Complete the sentence with correct article.

She is _ LLB.

- Ans
- 1. the
 - 2. an
 - 3. a
 - 4. no article

Q.13 Fill in the blank with the most suitable option.

____ who recited a poem was the best.

- Ans
- 1. Student
 - 2. The student
 - 3. Students
 - 4. A student

Q.14 Select the most appropriate adjective to fill in the blank.

Despite the pressure, Doris remained _____ and answered every question confidently.

- Ans
- 1. gorgeous
 - 2. poised
 - 3. crazy
 - 4. adorable

Q.15 The following sentence has been divided into different segments. Rearrange all the segments to form a coherent statement.

A. perfecting her painting / B. spent hours / C. the young artist / D. with delicate brush strokes

- Ans
- 1. ABCD
 - 2. CADB
 - 3. ABDC
 - 4. CBAD

Comprehension:

Read the passage given below and answer the questions that follow.

A humorous new "sports competition" has been imagined for bus passengers. One may ask where commuters find time for sports, but the answer is simple: boarding a crowded bus itself feels like a game. An endurance prize could be awarded to the passenger who waits the longest at a stop without complaining. In contrast, the rush competition would reward the person who reaches the bus first when it halts a little away from the regular stop. When two buses of the same route arrive and try to bypass each other, passengers running back and forth create a scene resembling musical chairs. The struggle between those trying to get off and others pushing to get in is like a tug of war. Finally, a benevolence prize would honour the passenger who helps a mother with a baby or assists an elderly traveller by holding their luggage, showing kindness amid the chaos

SubQuestion No : 16

Q.16 Who are the participants of the sports events in the passage?

Comprehension:

Read the passage given below and answer the questions that follow.

A humorous new "sports competition" has been imagined for bus passengers. One may ask where commuters find time for sports, but the answer is simple: boarding a crowded bus itself feels like a game. An endurance prize could be awarded to the passenger who waits the longest at a stop without complaining. In contrast, the rush competition would reward the person who reaches the bus first when it halts a little away from the regular stop. When two buses of the same route arrive and try to bypass each other, passengers running back and forth create a scene resembling musical chairs. The struggle between those trying to get off and others pushing to get in is like a tug of war. Finally, a benevolence prize would honour the passenger who helps a mother with a baby or assists an elderly traveller by holding their luggage, showing kindness amid the chaos

SubQuestion No : 17

Q.17 Who will get a prize in the endurance competition?

Comprehension:

Read the passage given below and answer the questions that follow.

A humorous new "sports competition" has been imagined for bus passengers. One may ask where commuters find time for sports, but the answer is simple: boarding a crowded bus itself feels like a game. An endurance prize could be awarded to the passenger who waits the longest at a stop without complaining. In contrast, the rush competition would reward the person who reaches the bus first when it halts a little away from the regular stop. When two buses of the same route arrive and try to bypass each other, passengers running back and forth create a scene resembling musical chairs. The struggle between those trying to get off and others pushing to get in is like a tug of war. Finally, a benevolence prize would honour the passenger who helps a mother with a baby or assists an elderly traveller by holding their luggage, showing kindness amid the chaos

SubQuestion No : 18

Q.18 When do the passengers run forward and backward?

Comprehension:

Read the passage given below and answer the questions that follow.

A humorous new "sports competition" has been imagined for bus passengers. One may ask where commuters find time for sports, but the answer is simple: boarding a crowded bus itself feels like a game. An endurance prize could be awarded to the passenger who waits the longest at a stop without complaining. In contrast, the rush competition would reward the person who reaches the bus first when it halts a little away from the regular stop. When two buses of the same route arrive and try to bypass each other, passengers running back and forth create a scene resembling musical chairs. The struggle between those trying to get off and others pushing to get in is like a tug of war. Finally, a benevolence prize would honour the passenger who helps a mother with a baby or assists an elderly traveller by holding their luggage, showing kindness amid the chaos

SubQuestion No : 19

Q.19 What does the phrase ' tug of war' mean?

Comprehension:

Read the passage given below and answer the questions that follow.

A humorous new "sports competition" has been imagined for bus passengers. One may ask where commuters find time for sports, but the answer is simple: boarding a crowded bus itself feels like a game. An endurance prize could be awarded to the passenger who waits the longest at a stop without complaining. In contrast, the rush competition would reward the person who reaches the bus first when it halts a little away from the regular stop. When two buses of the same route arrive and try to bypass each other, passengers running back and forth create a scene resembling musical chairs. The struggle between those trying to get off and others pushing to get in is like a tug of war. Finally, a benevolence prize would honour the passenger who helps a mother with a baby or assists an elderly traveller by holding their luggage, showing kindness amid the chaos

SubQuestion No : 20

Q.20 What does the term benevolent passenger refer to?

Section : Test of English Language and Comprehension1

Q.1 Select the most appropriate synonym of the given word.

Condemn

- Ans**
- 1. Blame
 - 2. Endorse
 - 3. Commend
 - 4. Applaud

Q.2 What does the proverb "You can't wake a person who is pretending to sleep" mean?

- Ans**
- 1. You can't teach someone who refuses to learn.
 - 2. Waking someone abruptly is unwise.
 - 3. Everyone has hidden thoughts.
 - 4. Laziness is incurable.

Q.3 Select the word which means the same as the group of the given words.

An open man-made passageway for water

- Ans**
- 1. Surge
 - 2. Aqueduct
 - 3. Lagoon
 - 4. Saturation

Q.4 Select the most appropriate meaning of the given proverb.

Don't put all your eggs in one basket.

- Ans**
- 1. Baskets are fragile so eggs shouldn't be put there.
 - 2. One shouldn't concentrate all efforts in one area.
 - 3. Eggs are fragile so one should not keep them together.
 - 4. One should always save some eggs for later.

Q.5 Identify the INCORRECTLY spelt word in the given sentence.

The new policy aimed to cultivate a more homogenous workforce by advocating for diversity.

- Ans
- 1. Advocating
 - 2. Cultivate
 - 3. Diversity
 - 4. Homogenous

Q.6 Select the most appropriate option that can substitute the underlined group of words.

I am a person who loves to collect books.

- Ans
- 1. bibliophobe
 - 2. bibliophile
 - 3. scholar
 - 4. librarian

Q.7 Select the most appropriate option that can substitute the underlined group of words.

Some people are in the habit of representing something as larger, better, or worse than it is.

- Ans
- 1. fabricating
 - 2. abbreviating
 - 3. exaggerating
 - 4. elaborating

Q.8 Read the following proverb carefully and choose the option that best describes the meaning of the proverb.

As you sow, so shall you reap

- Ans
- 1. Farming requires a lot of patience.
 - 2. Your plant will need water to grow and for you to reap.
 - 3. Your actions determine your future consequences.
 - 4. Hard work always pays off.

Q.9 Select the one word substitute for the underlined segment in the given sentence.

Luke is someone who never makes mistakes.

- Ans
- 1. Incurable
 - 2. Indomitable
 - 3. Infallible
 - 4. Invincible

Q.10 Choose the word opposite in meaning to the given word.

Rehabilitated

- Ans
- 1. Conditioned
 - 2. Recovered
 - 3. Modified
 - 4. Deserted

Q.11 Select the most appropriate antonym of the word given below:
fragile

- Ans
- 1. delicate
 - 2. sturdy
 - 3. brittle
 - 4. breakable

Q.12 In the given question, sentences of a paragraph are given in a jumbled order.
Rearrange all the sentences to form a coherent paragraph.

- A. But few know of a place in the city's Himayatnagar before which all other attractions seem to pale in comparison.
- B. We're referring to the home of Jagdish Mittal, a 99-year-old artist, whose life has been a journey of spotting magic in what others may presume to be 'junk'.
- C. Tourists flock to the city of Hyderabad with visits to the Charminar and Golconda high on their itineraries.
- D. The house, doubling as a museum for priceless and countless Indian artefacts, has many more fascinating aspects to it.

- Ans
- 1. ABDC
 - 2. DACB
 - 3. BADC
 - 4. CABD

Q.13 Select the most appropriate antonym of the given word.
Advance

- Ans
- 1. Reveal
 - 2. Move
 - 3. Delay
 - 4. Retreat

Q.14 What does the proverb "Haste makes waste" mean?

- Ans
- 1. Wasting time causes stress
 - 2. Saving time is more important than accuracy
 - 3. Rushing through things can lead to mistakes and loss
 - 4. Being quick helps finish work early

Q.15 From the given options choose the one that is the correct spelling of the word in brackets.

The (humanitarian) organization worked tirelessly to provide aid and relief to the victims of the devastating natural disaster.

- Ans
- 1. humenittarian
 - 2. humanitarain
 - 3. humanitarian
 - 4. humenitarian

Comprehension:

Read the given passage carefully and answer the questions that follow.

Time is a valuable resource, and managing it effectively can significantly impact one's life. Students, professionals, and homemakers alike can benefit from proper time management strategies. By prioritizing tasks, setting clear goals, and avoiding procrastination, individuals can achieve more in less time. Effective time management not only boosts productivity but also reduces stress and enhances overall well-being. Various techniques, such as creating to-do lists, breaking tasks into smaller, manageable steps, and scheduling specific times for activities, can aid in better time management. Additionally, learning to say no to non-essential tasks and distractions is crucial for maintaining focus on important objectives. In today's fast-paced world, the ability to manage time effectively is not merely a skill; it is a necessity for success. By implementing these strategies, individuals can navigate their responsibilities more efficiently, leading to a more balanced and fulfilling life. Ultimately, mastering time management can pave the way for personal and professional growth.⁶⁴⁴

SubQuestion No : 16

Q.16 Select an appropriate title for the passage.⁶⁴⁵

Comprehension:

Read the given passage carefully and answer the questions that follow.

Time is a valuable resource, and managing it effectively can significantly impact one's life. Students, professionals, and homemakers alike can benefit from proper time management strategies. By prioritizing tasks, setting clear goals, and avoiding procrastination, individuals can achieve more in less time. Effective time management not only boosts productivity but also reduces stress and enhances overall well-being. Various techniques, such as creating to-do lists, breaking tasks into smaller, manageable steps, and scheduling specific times for activities, can aid in better time management. Additionally, learning to say no to non-essential tasks and distractions is crucial for maintaining focus on important objectives. In today's fast-paced world, the ability to manage time effectively is not merely a skill; it is a necessity for success. By implementing these strategies, individuals can navigate their responsibilities more efficiently, leading to a more balanced and fulfilling life. Ultimately, mastering time management can pave the way for personal and professional growth.⁶⁴⁴

SubQuestion No : 17

Q.17 Identify the main theme of the passage.⁶⁴⁶

Comprehension:

Read the given passage carefully and answer the questions that follow.

Time is a valuable resource, and managing it effectively can significantly impact one's life. Students, professionals, and homemakers alike can benefit from proper time management strategies. By prioritizing tasks, setting clear goals, and avoiding procrastination, individuals can achieve more in less time. Effective time management not only boosts productivity but also reduces stress and enhances overall well-being. Various techniques, such as creating to-do lists, breaking tasks into smaller, manageable steps, and scheduling specific times for activities, can aid in better time management. Additionally, learning to say no to non-essential tasks and distractions is crucial for maintaining focus on important objectives. In today's fast-paced world, the ability to manage time effectively is not merely a skill; it is a necessity for success. By implementing these strategies, individuals can navigate their responsibilities more efficiently, leading to a more balanced and fulfilling life. Ultimately, mastering time management can pave the way for personal and professional growth.⁶⁴⁴

SubQuestion No : 18

Q.18 Select the correct summary of the passage.⁶⁴⁷

Comprehension:

Read the given passage carefully and answer the questions that follow.

Time is a valuable resource, and managing it effectively can significantly impact one's life. Students, professionals, and homemakers alike can benefit from proper time management strategies. By prioritizing tasks, setting clear goals, and avoiding procrastination, individuals can achieve more in less time. Effective time management not only boosts productivity but also reduces stress and enhances overall well-being. Various techniques, such as creating to-do lists, breaking tasks into smaller, manageable steps, and scheduling specific times for activities, can aid in better time management. Additionally, learning to say no to non-essential tasks and distractions is crucial for maintaining focus on important objectives. In today's fast-paced world, the ability to manage time effectively is not merely a skill; it is a necessity for success. By implementing these strategies, individuals can navigate their responsibilities more efficiently, leading to a more balanced and fulfilling life. Ultimately, mastering time management can pave the way for personal and professional growth.⁶⁴⁴

SubQuestion No : 19

Q.19 Identify the inference drawn from the passage.⁶⁴⁸

Comprehension:

Read the given passage carefully and answer the questions that follow.

Time is a valuable resource, and managing it effectively can significantly impact one's life. Students, professionals, and homemakers alike can benefit from proper time management strategies. By prioritizing tasks, setting clear goals, and avoiding procrastination, individuals can achieve more in less time. Effective time management not only boosts productivity but also reduces stress and enhances overall well-being. Various techniques, such as creating to-do lists, breaking tasks into smaller, manageable steps, and scheduling specific times for activities, can aid in better time management. Additionally, learning to say no to non-essential tasks and distractions is crucial for maintaining focus on important objectives. In today's fast-paced world, the ability to manage time effectively is not merely a skill; it is a necessity for success. By implementing these strategies, individuals can navigate their responsibilities more efficiently, leading to a more balanced and fulfilling life. Ultimately, mastering time management can pave the way for personal and professional growth.⁶⁴⁴

SubQuestion No : 20

Q.20 Based on the passage, select the most appropriate connection to real-life situations.⁶⁴⁹

Section : Test of Hindi Language and Comprehension

Q.1 उपयुक्त परिमाणवाचक क्रिया-विशेषण से वाक्य को पूर्ण कीजिए।
बंगाल में पटसन होता है।

- Ans**
- 1. धीरे-धीरे
 - 2. बहुत
 - 3. जल्दी
 - 4. हमेशा से

Q.2 दिए गए वाक्यों में से कौन-सा वाक्य शुद्ध है?

- Ans**
- 1. अंग्रेज़ी राज्य की स्थापना के साथ ही सशस्त्र विद्रोह का आरम्भ हो गया था भारत में।
 - 2. सशस्त्र विद्रोह का आरम्भ हो गया था भारत में अंग्रेज़ी राज्य की स्थापना के साथ ही।
 - 3. भारत में अंग्रेज़ी राज्य की स्थापना के साथ ही सशस्त्र विद्रोह का आरम्भ हो गया था।
 - 4. अंग्रेज़ी राज्य की स्थापना के साथ ही भारत में आरम्भ हो गया था सशस्त्र विद्रोह का।

Q.3 निम्नलिखित वाक्य को ध्यानपूर्वक पढ़ें और वाक्य में त्रुटि की पहचान कर वाक्य शुद्ध करें।
यह सात रुई है, इससे किलो बड़ी रज़ाई बनानी है।

- Ans**
- 1. यह किलो रुई है, बनानी इससे बड़ी सात रज़ाई है।
 - 2. सात बनानी किलो रुई है, इससे बड़ी रज़ाई यह है।
 - 3. यह रज़ाई सात किलो है, इससे रुई बड़ी बनानी है।
 - 4. यह सात किलो रुई है, इससे बड़ी रज़ाई बनानी है।

Q.4 नीचे दिए परिच्छेद में से अतिरिक्त वाक्य चुनें-

टी. एस. इलियट ने समय की पास्ट, प्रजेंट अवधारणा का काव्यात्मक वर्णन किया। एलविन टॉफ्लर ने भविष्य वाद की अवधारणा रचकर भविष्यवाणियाँ कीं। प्रकृति के पास कोई घड़ी नहीं है, वह तो स्वयं एक घड़ी है। हक्सले ने भी टाइम को लेकर क्वालिटी और क्वाण्टिटी के द्वन्द्व की भविष्यवाणी की।

- Ans
- 1. एलविन टॉफ्लर ने भविष्य वाद की अवधारणा रचकर भविष्यवाणियाँ कीं।
 - 2. हक्सले ने भी टाइम को लेकर क्वालिटी और क्वाण्टिटी के द्वन्द्व की भविष्यवाणी की।
 - 3. टी. एस. इलियट ने समय की पास्ट, प्रजेंट अवधारणा का काव्यात्मक वर्णन किया।
 - 4. प्रकृति के पास कोई घड़ी नहीं है, वह तो स्वयं एक घड़ी है।

Q.5 'अंगारों पर पैर रखना' मुहावरे का सही अर्थ क्या होगा?

- Ans
- 1. जोखिम मोल लेना
 - 2. व्यर्थ की बातें करना
 - 3. और भड़काना
 - 4. एकदम गुस्सा हो जाना

Q.6 नीचे दिए गए वाक्य खंडों को सही क्रम में व्यवस्थित कीजिए-

1. भद्र सज्जन
2. करता रहा
3. की
4. भाँति तारीफ़
5. कन्हैया

- Ans
- 1. 51342
 - 2. 25134
 - 3. 51324
 - 4. 13425

Q.7 'तबले की बला बंदर के सिर' - लोकोक्ति का उपयुक्त अर्थ चुनिए।

- Ans
- 1. कोई काम करने में शर्म कैसी
 - 2. अपराध करे कोई, पकड़ा जाए कोई और
 - 3. बहुत बड़ा अपराध कर के भाग जाना
 - 4. जैसा चाहा वैसा हो गया

Q.8 नीचे दिए गए वाक्यों में से अतिरिक्त वाक्य का चुनाव करें-

- Ans
- 1. निर्गुण संतों के साहित्य को 'ज्ञानश्री शाखा' का साहित्य कहा जाता है।
 - 2. कबीर बहुत गहरी मानवीयता और सहृदयता के कवि हैं।
 - 3. अक्खड़ता और निर्भयता कबीर के कवच हैं।
 - 4. कबीर में जीवन के द्वैतात्मक पक्ष को समझने की अद्भुत क्षमता थी।

Q.9 'वह स्त्री जिसके पति ने दूसरा विवाह कर लिया हो' वाक्यांश के लिए सार्थक शब्द है-

- Ans
- 1. अथ्यूद्धा
 - 2. अधेड़
 - 3. अनंत
 - 4. विधवा

Q.10 रिक्त स्थान पर उचित शब्द का चुनाव कीजिए
चौराहे _____ एक सभा होने जा रही है।

- Ans
- 1. से
 - 2. ने
 - 3. में
 - 4. पर

Q.11 निम्नलिखित वाक्य के रिक्त स्थान में विशेषण शब्द का प्रयोग करें -
'रंजीत ने सारे फल खरीदे।'

- Ans
- 1. सभी
 - 2. लगभग
 - 3. सुंदर
 - 4. ढेर

Q.12 "मृत्यु का इच्छुक" के लिए एक शब्द है -

- Ans
- 1. संन्यासी
 - 2. जीवित
 - 3. मुमुक्षु
 - 4. मुमूर्षु

Q.13 पूर्णतः शुद्ध वाक्य के विकल्प की पहचान कीजिए-

- Ans
- 1. मैं गाने का कसरत करता हूँ।
 - 2. राजा और रानी आई थी।
 - 3. बाढ़ से फसल सर्वनाश हो रही है।
 - 4. मैंने दो कुत्तों को लड़ते हुए देखा।

Q.14 दिए गए वाक्य में उचित रीतिवाचक क्रिया -विशेषण शब्द का चयन करके रिक्त स्थान की पूर्ति करें -

चिकित्सक के प्राथमिक उपचार से स्वस्थ होकर घायल व्यक्ति----- दौड़ लगाने लगा ।

- Ans
- 1. बहुत
 - 2. धीरे-धीरे
 - 3. प्रतिदिन
 - 4. मैदान में

Q.15 आज मैं _____ थक गई हूँ ।

उपरोक्त वाक्य में रिक्त स्थान की पूर्ति के लिए उचित क्रिया-विशेषण शब्द का चयन करें -

- Ans
- 1. बहुत
 - 2. मुसीबत
 - 3. वहाँ
 - 4. आपस

Comprehension:

गद्यांश के आधार पर निचे दिए गए प्रश्नों के उचित विकल्प चुनिए -

प्रशासनिक विभाग ने गणतंत्र दिवस के अवसर पर विभिन्न कार्यक्रम आयोजित किए थे। इनमें से एक कार्यक्रम 'विशेष बाल सम्मेलन' था, जिसमें अभिभावकों और बच्चों को जागरूक किया गया। इस कार्यक्रम में राष्ट्रीय पुरस्कारों से सम्मानित बच्चों को सम्मानित भी किया गया और उन्हें उनकी उत्कृष्टता के लिए बधाई दी गई। विशेष अतिथियों ने बच्चों को प्रोत्साहित किया और उनके लिए एक सांस्कृतिक कार्यक्रम भी आयोजित किया गया। इसके अलावा, बच्चों ने राष्ट्रीय गीतों और ध्वनि-वाद्य संगीत का प्रदर्शन भी किया, जिसने उनकी सांस्कृतिक विचारधारा को मजबूती दी। इस कार्यक्रम का मुख्य उद्देश्य था - बच्चों में राष्ट्रीय उत्कृष्टता के प्रति जागरूकता और सम्मान का विकास करना।⁸¹²

SubQuestion No : 16

Q.16 'विशेष बाल सम्मेलन' का मुख्य उद्देश्य क्या था ?⁸¹³

Comprehension:

गद्यांश के आधार पर निचे दिए गए प्रश्नों के उचित विकल्प चुनिए -

प्रशासनिक विभाग ने गणतंत्र दिवस के अवसर पर विभिन्न कार्यक्रम आयोजित किए थे। इनमें से एक कार्यक्रम 'विशेष बाल सम्मेलन' था, जिसमें अभिभावकों और बच्चों को जागरूक किया गया। इस कार्यक्रम में राष्ट्रीय पुरस्कारों से सम्मानित बच्चों को सम्मानित भी किया गया और उन्हें उनकी उत्कृष्टता के लिए बधाई दी गई। विशेष अतिथियों ने बच्चों को प्रोत्साहित किया और उनके लिए एक सांस्कृतिक कार्यक्रम भी आयोजित किया गया। इसके अलावा, बच्चों ने राष्ट्रीय गीतों और ध्वनि-वाद्य संगीत का प्रदर्शन भी किया, जिसने उनकी सांस्कृतिक विचारधारा को मजबूती दी। इस कार्यक्रम का मुख्य उद्देश्य था - बच्चों में राष्ट्रीय उत्कृष्टता के प्रति जागरूकता और सम्मान का विकास करना।⁸¹²

SubQuestion No : 17

Q.17 'विशेष बाल सम्मेलन' में किसे सम्मानित किया गया?⁸¹⁴

Comprehension:

गद्यांश के आधार पर निचे दिए गए प्रश्नों के उचित विकल्प चुनिए -

प्रशासनिक विभाग ने गणतंत्र दिवस के अवसर पर विभिन्न कार्यक्रम आयोजित किए थे। इनमें से एक कार्यक्रम 'विशेष बाल सम्मेलन' था, जिसमें अभिभावकों और बच्चों को जागरूक किया गया। इस कार्यक्रम में राष्ट्रीय पुरस्कारों से सम्मानित बच्चों को सम्मानित भी किया गया और उन्हें उनकी उत्कृष्टता के लिए बधाई दी गई। विशेष अतिथियों ने बच्चों को प्रोत्साहित किया और उनके लिए एक सांस्कृतिक कार्यक्रम भी आयोजित किया गया। इसके अलावा, बच्चों ने राष्ट्रीय गीतों और ध्वनि-वाद्य संगीत का प्रदर्शन भी किया, जिसने उनकी सांस्कृतिक विचारधारा को मजबूती दी। इस कार्यक्रम का मुख्य उद्देश्य था - बच्चों में राष्ट्रीय उत्कृष्टता के प्रति जागरूकता और सम्मान का विकास करना।⁸¹²

SubQuestion No : 18

Q.18 'विशेष बाल सम्मेलन' में बच्चों के लिए क्या आयोजित किया गया था?⁸¹⁵

Comprehension:

गद्यांश के आधार पर निचे दिए गए प्रश्नों के उचित विकल्प चुनिए -

प्रशासनिक विभाग ने गणतंत्र दिवस के अवसर पर विभिन्न कार्यक्रम आयोजित किए थे। इनमें से एक कार्यक्रम 'विशेष बाल सम्मेलन' था, जिसमें अभिभावकों और बच्चों को जागरूक किया गया। इस कार्यक्रम में राष्ट्रीय पुरस्कारों से सम्मानित बच्चों को सम्मानित भी किया गया और उन्हें उनकी उत्कृष्टता के लिए बधाई दी गई। विशेष अतिथियों ने बच्चों को प्रोत्साहित किया और उनके लिए एक सांस्कृतिक कार्यक्रम भी आयोजित किया गया। इसके अलावा, बच्चों ने राष्ट्रीय गीतों और ध्वनि-वाद्य संगीत का प्रदर्शन भी किया, जिसने उनकी सांस्कृतिक विचारधारा को मजबूती दी। इस कार्यक्रम का मुख्य उद्देश्य था - बच्चों में राष्ट्रीय उत्कृष्टता के प्रति जागरूकता और सम्मान का विकास करना।⁸¹²

SubQuestion No : 19

Q.19 विशेष अतिथियों ने बच्चों के लिए क्या किया?⁸¹⁶

Comprehension:

गद्यांश के आधार पर निचे दिए गए प्रश्नों के उचित विकल्प चुनिए -

प्रशासनिक विभाग ने गणतंत्र दिवस के अवसर पर विभिन्न कार्यक्रम आयोजित किए थे। इनमें से एक कार्यक्रम 'विशेष बाल सम्मेलन' था, जिसमें अभिभावकों और बच्चों को जागरूक किया गया। इस कार्यक्रम में राष्ट्रीय पुरस्कारों से सम्मानित बच्चों को सम्मानित भी किया गया और उन्हें उनकी उत्कृष्टता के लिए बधाई दी गई। विशेष अतिथियों ने बच्चों को प्रोत्साहित किया और उनके लिए एक सांस्कृतिक कार्यक्रम भी आयोजित किया गया। इसके अलावा, बच्चों ने राष्ट्रीय गीतों और ध्वनि-वाद्य संगीत का प्रदर्शन भी किया, जिसने उनकी सांस्कृतिक विचारधारा को मजबूती दी। इस कार्यक्रम का मुख्य उद्देश्य था - बच्चों में राष्ट्रीय उत्कृष्टता के प्रति जागरूकता और सम्मान का विकास करना।⁸¹²

SubQuestion No : 20

Q.20 'विशेष बाल सम्मेलन' में बच्चों ने किसका प्रदर्शन किया ?⁸¹⁷

Section : Test of Hindi Language and Comprehension1

Q.1 निम्नलिखित में से शुद्ध वाक्य कौन-सा है?

- Ans
- 1. उसने नमस्कार करके आशीर्वाद लिया।
 - 2. उसने नमस्कार करके आशीर्वाद लिया।
 - 3. उसने नमस्कारं करके आशीर्वाद लिया।
 - 4. उसने नमसकार करके आशीर्वाद लिया।

Q.2 'खाक में मिलाना' मुहावरे का सही अर्थ क्या है?

- Ans
- 1. निर्माण करना
 - 2. सजाना
 - 3. बचाना
 - 4. बर्बाद करना

Q.3 'अवधूत' का पर्यायवाची है -

- Ans
- 1. विष्णु
 - 2. कलाधर
 - 3. देवर्षि
 - 4. वैरागी

Q.4 निम्न में से 'आम' शब्द का कौन-सा अर्थ नहीं है:-

- Ans
- 1. सर्वसाधारण
 - 2. एक फल 'आम'
 - 3. मामूली
 - 4. विद्या

Q.5 पंडित का विलोम शब्द क्या होगा?

- Ans
- 1. प्रत्यय
 - 2. वाचाल
 - 3. मूर्ख
 - 4. निर्मूल

Q.6 नीचे दिए विकल्पों में से तत्सम शब्द चुनिए-

- Ans
- 1. धनिया
 - 2. धान
 - 3. धूम
 - 4. धीरज

Q.7 तलवार का पर्यायवाची शब्द चुनिए-

- Ans
- 1. पाषाण
 - 2. द्विज
 - 3. असि
 - 4. किरिट

Q.8 "इस शहर में कई इतिहासिक इमारतें हैं " दिए गए वाक्य के किस भाग में त्रुटि है ?

- Ans
- 1. इतिहासिक
 - 2. इस शहर
 - 3. इमारतें हैं |
 - 4. में कई

Q.9 दिए गए वाक्य के किस भाग में त्रुटि है?
मैं अपना काम स्वयं करता हूँ

- Ans
- 1. काम
 - 2. स्वयं
 - 3. मैं अपना
 - 4. करता हूँ

Q.10 'समष्टि' का विलोम शब्द होगा-

- Ans
- 1. आकृष्टि
 - 2. व्यष्टि
 - 3. अतिवृष्टि
 - 4. कुदृष्टि

Q.11 "छक्के छूटना" मुहावरे का अर्थ है —

- Ans
- 1. खुशी मनाना
 - 2. बुरी तरह पराजित होना
 - 3. जीत जाना
 - 4. खेलना शुरू करना

Q.12 निम्नलिखित विकल्पों में से 'किसी अच्छे आदमी पर कलंक लगाना' किस मुहावरे का अर्थ है?

- Ans
- 1. घास काटना
 - 2. चाँदी का जूता
 - 3. चार चाँद लगना
 - 4. चाँद पर धूकना

Q.13 "मीराबाई कृष्ण-भक्ति शाखा की प्रमुख कवियित्री है।" दिए गए वाक्य के किस भाग में त्रुटि है ?

- Ans
- 1. शाखा की प्रमुख
 - 2. कवियित्री है
 - 3. कृष्ण-भक्ति
 - 4. मीराबाई

Q.14 नीचे दिए विकल्पों में से तद्भव शब्द चुनिए-

- Ans
- 1. सीख
 - 2. शिर
 - 3. सिद्ध
 - 4. शिला

Q.15 'अर्थ' शब्द का कौन-सा अर्थ सही है?

- Ans
- 1. विज्ञान
 - 2. शरीर
 - 3. धन
 - 4. सूर्य

Comprehension:

निम्नलिखित गद्यांश को पढ़ें और इसके बाद प्रश्नों के उत्तर दें।

हरगोबिन बड़ी हवेली की टूटी ड्योढ़ी पारकर अंदर गया। सदा की भाँति उसने वातावरण को सूँघकर संवाद का अंदाज लगाया।... निश्चय ही कोई गुप्त समाचार ले जाना है। चाँद-सूरज को भी नहीं मालूम हो। परेवा-पंछी तक न जाने। "पाँव लागी, बड़ी बहुरिया।" बड़ी हवेली की बड़ी बहुरिया ने हरगोबिन को पीढ़ी दी और आँख के इशारे से कुछ देर चुपचाप बैठने को कहा। बड़ी हवेली अब नाममात्र को ही बड़ी हवेली है। जहाँ दिनरात नौकर-नौकरानियों और जन-मजदूरों की भीड़ लगी रहती थी, वहाँ आज हवेली की बड़ी बहुरिया अपने हाथ से सूपा में अनाज लेकर फटक रही है। इन हाथों में सिर्फ मेहँदी लगाकर ही गाँव की नाइन परिवार पालती थी। कहाँ गए वे दिन? हरगोबिन ने लंबी साँस ली। बड़े भैया के मरने के बाद ही जैसे सब खेल खत्म हो गया। तीनों भाइयों ने आपस में लड़ाई-झगड़ा शुरू किया। रैयतों ने जमीन पर दावे करके दखल किया, फिर तीनों भाई गाँव छोड़कर शहर में जा बसे, रह गई बड़ी बहुरिया-कहाँ जाती बेचारी। भगवान भले आदमी को ही कष्ट देते हैं। नहीं तो एक घंटे की बीमारी में बड़े भैया क्यों मरते?... बड़ी बहुरिया की देह से जेवर खींच-छीनकर बँटवारे की लीला हुई थी।⁸²⁴

SubQuestion No : 16

Q.16 उपरोक्त गद्यांश का उचित शीर्षक पहचानें।⁸²⁵

Comprehension:

निम्नलिखित गद्यांश को पढ़ें और इसके बाद प्रश्नों के उत्तर दें।

हरगोबिन बड़ी हवेली की टूटी ड्योढ़ी पारकर अंदर गया। सदा की भाँति उसने वातावरण को सूँघकर संवाद का अंदाज लगाया।... निश्चय ही कोई गुप्त समाचार ले जाना है। चाँद-सूरज को भी नहीं मालूम हो। परेवा-पंछी तक न जाने। "पाँव लागी, बड़ी बहुरिया।" बड़ी हवेली की बड़ी बहुरिया ने हरगोबिन को पीढ़ी दी और आँख के इशारे से कुछ देर चुपचाप बैठने को कहा। बड़ी हवेली अब नाममात्र को ही बड़ी हवेली है। जहाँ दिनरात नौकर-नौकरानियों और जन-मजदूरों की भीड़ लगी रहती थी, वहाँ आज हवेली की बड़ी बहुरिया अपने हाथ से सूपा में अनाज लेकर फटक रही है। इन हाथों में सिर्फ मेहँदी लगाकर ही गाँव की नाइन परिवार पालती थी। कहाँ गए वे दिन? हरगोबिन ने लंबी साँस ली। बड़े भैया के मरने के बाद ही जैसे सब खेल खत्म हो गया। तीनों भाइयों ने आपस में लड़ाई-झगड़ा शुरू किया। रैयतों ने जमीन पर दावे करके दखल किया, फिर तीनों भाई गाँव छोड़कर शहर में जा बसे, रह गई बड़ी बहुरिया-कहाँ जाती बेचारी। भगवान भले आदमी को ही कष्ट देते हैं। नहीं तो एक घंटे की बीमारी में बड़े भैया क्यों मरते?... बड़ी बहुरिया की देह से जेवर खींच-छीनकर बँटवारे की लीला हुई थी।⁸²⁴

SubQuestion No : 17

Q.17 उपरोक्त गद्यांश के आधार पर उत्तर दें।

किस घटना के पश्चात रैयतों ने जमीन पर दावे करके दखल किया था?⁸²⁶

Comprehension:

निम्नलिखित गद्यांश को पढ़ें और इसके बाद प्रश्नों के उत्तर दें।

हरगोबिन बड़ी हवेली की टूटी ड्योढ़ी पारकर अंदर गया। सदा की भाँति उसने वातावरण को सूँघकर संवाद का अंदाज लगाया।... निश्चय ही कोई गुप्त समाचार ले जाना है। चाँद-सूरज को भी नहीं मालूम हो। परेवा-पंछी तक न जाने। "पाँव लागी, बड़ी बहुरिया।" बड़ी हवेली की बड़ी बहुरिया ने हरगोबिन को पीढ़ी दी और आँख के इशारे से कुछ देर चुपचाप बैठने को कहा। बड़ी हवेली अब नाममात्र को ही बड़ी हवेली है। जहाँ दिनरात नौकर-नौकरानियों और जन-मजदूरों की भीड़ लगी रहती थी, वहाँ आज हवेली की बड़ी बहुरिया अपने हाथ से सूपा में अनाज लेकर फटक रही है। इन हाथों में सिर्फ मेहँदी लगाकर ही गाँव की नाइन परिवार पालती थी। कहाँ गए वे दिन? हरगोबिन ने लंबी साँस ली। बड़े भैया के मरने के बाद ही जैसे सब खेल खत्म हो गया। तीनों भाइयों ने आपस में लड़ाई-झगड़ा शुरू किया। रैयतों ने जमीन पर दावे करके दखल किया, फिर तीनों भाई गाँव छोड़कर शहर में जा बसे, रह गई बड़ी बहुरिया-कहाँ जाती बेचारी। भगवान भले आदमी को ही कष्ट देते हैं। नहीं तो एक घंटे की बीमारी में बड़े भैया क्यों मरते?... बड़ी बहुरिया की देह से जेवर खींच-छीनकर बँटवारे की लीला हुई थी।⁸²⁴

SubQuestion No : 18

Q.18 उपरोक्त गद्यांश के आधार पर वाक्य पूर्ण करें।

बड़ी बहुरिया की देह से जेवर खींच-छीनकर बँटवारे की ____ हुई थी।⁸²⁷

Comprehension:

निम्नलिखित गद्यांश को पढ़ें और इसके बाद प्रश्नों के उत्तर दें।

हरगोबिन बड़ी हवेली की टूटी ड्योढ़ी पारकर अंदर गया। सदा की भाँति उसने वातावरण को सूँघकर संवाद का अंदाज लगाया।... निश्चय ही कोई गुप्त समाचार ले जाना है। चाँद-सूरज को भी नहीं मालूम हो। परेवा-पंछी तक न जाने। "पाँव लागी, बड़ी बहुरिया।" बड़ी हवेली की बड़ी बहुरिया ने हरगोबिन को पीढ़ी दी और आँख के इशारे से कुछ देर चुपचाप बैठने को कहा। बड़ी हवेली अब नाममात्र को ही बड़ी हवेली है। जहाँ दिनरात नौकर-नौकरानियों और जन-मजदूरों की भीड़ लगी रहती थी, वहाँ आज हवेली की बड़ी बहुरिया अपने हाथ से सूपा में अनाज लेकर फटक रही है। इन हाथों में सिर्फ मेहँदी लगाकर ही गाँव की नाइन परिवार पालती थी। कहाँ गए वे दिन? हरगोबिन ने लंबी साँस ली। बड़े भैया के मरने के बाद ही जैसे सब खेल खत्म हो गया। तीनों भाइयों ने आपस में लड़ाई-झगड़ा शुरू किया। रैयतों ने जमीन पर दावे करके दखल किया, फिर तीनों भाई गाँव छोड़कर शहर में जा बसे, रह गई बड़ी बहुरिया-कहाँ जाती बेचारी। भगवान भले आदमी को ही कष्ट देते हैं। नहीं तो एक घंटे की बीमारी में बड़े भैया क्यों मरते?... बड़ी बहुरिया की देह से जेवर खींच-छीनकर बँटवारे की लीला हुई थी।⁸²⁴

SubQuestion No : 19

Q.19 निम्नलिखित विकल्पों में से चाँद शब्द का पर्यायवाची शब्द पहचानें।⁸²⁸

Comprehension:

निम्नलिखित गद्यांश को पढ़ें और इसके बाद प्रश्नों के उत्तर दें।

हरगोबिन बड़ी हवेली की टूटी ड्योढ़ी पारकर अंदर गया। सदा की भाँति उसने वातावरण को सूँघकर संवाद का अंदाज लगाया।... निश्चय ही कोई गुप्त समाचार ले जाना है। चाँद-सूरज को भी नहीं मालूम हो। परेवा-पंछी तक न जाने। "पाँव लागी, बड़ी बहुरिया।" बड़ी हवेली की बड़ी बहुरिया ने हरगोबिन को पीढ़ी दी और आँख के इशारे से कुछ देर चुपचाप बैठने को कहा। बड़ी हवेली अब नाममात्र को ही बड़ी हवेली है। जहाँ दिनरात नौकर-नौकरानियों और जन-मजदूरों की भीड़ लगी रहती थी, वहाँ आज हवेली की बड़ी बहुरिया अपने हाथ से सूपा में अनाज लेकर फटक रही है। इन हाथों में सिर्फ मेहँदी लगाकर ही गाँव की नाइन परिवार पालती थी। कहाँ गए वे दिन? हरगोबिन ने लंबी साँस ली। बड़े भैया के मरने के बाद ही जैसे सब खेल खत्म हो गया। तीनों भाइयों ने आपस में लड़ाई-झगड़ा शुरू किया। रैयतों ने जमीन पर दावे करके दखल किया, फिर तीनों भाई गाँव छोड़कर शहर में जा बसे, रह गई बड़ी बहुरिया-कहाँ जाती बेचारी। भगवान भले आदमी को ही कष्ट देते हैं। नहीं तो एक घंटे की बीमारी में बड़े भैया क्यों मरते?... बड़ी बहुरिया की देह से जेवर खींच-छीनकर बँटवारे की लीला हुई थी।⁸²⁴

SubQuestion No : 20

Q.20 निम्नलिखित विकल्पों में से चुपचाप शब्द का विलोम शब्द पहचानें।⁸²⁹